



**GREAT FUTURE TALENT OLYMPIAD
PAST PAPER 2024
COMPLETE BOOKLET
ALL SUBJECTS**



GREAT FUTURE TALENT OLYMPIAD

ROUND-I

ENGLISH GRAMMAR & COMPOSITION

PAST PAPER

Class 4th English Grammar Past Paper

1. What part of speech is the word "book" in the sentence "I love reading books"?
- a) Noun
 - b) Pronoun
 - c) Adjective

Answer: a)

2. Identify the pronoun in the sentence: "She went to the store to buy groceries."
- a) She
 - b) Store
 - c) Groceries

Answer: a)

3. Choose the adjective in the sentence: "The big, red ball bounced down the hill."
- a) Bounced
 - b) Red
 - c) Down

Answer: b)

4. Which of the following is a coordinating conjunction?
- a) Because
 - b) And
 - c) Although

Answer: b)

5. In the sentence "He is my best friend," what is the possessive pronoun?
- a) He
 - b) My
 - c) Is

Answer: b)

6. What is the contraction in the sentence "I can't believe it"?
- a) Can
 - b) Believe
 - c) Can't

Answer: c)

7. Identify the noun in the sentence: "The cat chased the mouse."
- a) Cat, Mouse
 - b) Cat
 - c) Mouse

Class 4th English Grammar Past Paper

Answer: a)

8. Choose the correct adjective in the sentence: "She wore a beautiful dress to the party."

- a) Wore
- b) Beautiful
- c) Dress

Answer: b)

9. Which conjunction is used to show contrast?

- a) And
- b) But
- c) Or

Answer: b)

10. What is the pronoun in the sentence "They won the game"?

- a) They
- b) Won
- c) Game

Answer: a)

11. Identify the noun in the sentence: "Running is good exercise."

- a) Running
- b) Good
- c) Exercise
- d) Is

Answer: a)

12. Choose the correct contraction in the sentence: "We haven't seen them for weeks."

- a) We
- b) Seen
- c) Haven't

Answer: c)

13. Plural of lady is:

- a) Ladies
- b) Ladys
- c) Ladyes

Answer: a)

Class 4th English Grammar Past Paper

14. The pronoun for pillow is:

- a) It
- b) She
- c) He

Answer: a)

15. Tick the possessive noun:

- a) Spiders'
- b) Spider's
- c) Spide'rs

Answer: a)

16. Identify the thing:

- a) Uncle
- b) Postman
- c) Bat

Answer: c)

17. Sana is a monitor of_____.

- a) Class
- b) Court
- c) None of these

Answer: a)

18. The gender of aunt is:

- a) Feminine
- b) Masculine
- c) Both of them

Answer: a)

19. Plural of fairy is:

- a) Fairies
- b) Fairyrs
- c) Kids

Answer: a)

20. The _____ is playing.

- a) Bench
- b) Day
- c) Boy

Class 4th English Grammar Past Paper

Answer: c)

21. Which of the following is a personal pronoun?

- a) This
- b) It
- c) They
- d) All of the above

Answer: d)

22. Identify the reflexive pronoun in the sentence: "She brushed herself off and continued walking."

- a) She
- b) Off
- c) Herself

Answer: c)

23. What is the indefinite pronoun in the sentence: "Somebody left their umbrella in the hallway."

- a) Somebody
- b) Left
- c) Their

Answer: c)

24. Choose the correct interrogative pronoun: "_____ is at the door?"

- a) Who
- b) Whom
- c) Whose

Answer: a)

25. In the sentence "The keys are on the table; please grab _____," what pronoun completes the sentence?

- a) They
- b) It
- c) Them

Answer: c)

26. Identify the possessive pronoun in the sentence: "Is this pen yours or mine?"

- a) Yours
- b) Mine
- c) both of them

Class 4th English Grammar Past Paper

Answer: c)

27. Tick the noun of feminine gender.

- a) Woman
- b) Princess
- c) Both a) and b)

Answer: c)

28. Husband, brother, brother in law belong to:

- a) Male group
- b) Female group
- c) None of these

Answer: a)

29. One brush-ten_____.

- a) Brushes
- b) Brushes
- c) None of these

Answer: a)

30. _____ is singing a song

- a) Kainat
- b) Keys
- c) Ants

Answer: a)

31. Which group of letters form the plural of foot?

- a) F,t,o,s,o
- b) F,t,e,e
- c) E,e,f,t,s

Answer: b)

32. Which character is odd one out?

- a) The white rabbit
- b) The scarecrow
- c) The mad hatter

Answer: b)

33. A tiger has got very sharp

- a) Scales

Class 4th English Grammar Past Paper

- b) Claws
- c) Horns

Answer: b)

34. Complete the dialogue:

Maria: what is your brother like?

Maryam:

- a) Fine, thanks
- b) Tall and thin
- c) Tonny

Answer: b)

35. My grandma used to knit while _____ me stories.

- a) Saying
- b) Telling
- c) Remembering

Answer: b)

36. _____ a lot of snow on the roads this winter.

- a) It's
- b) There's
- c) There are

Answer: b)

37. My aunt _____ enough amount to buy new cloth so she's going to wear old one this eid.

- a) Have
- b) Doesn't have
- c) Not have

Answer: b)

38. I went to Imtiaz Super Market and bought a _____ of chocolate.

- a) Bar
- b) Bag
- c) Pack

Answer: a)

39. The British flag is often known as _____.

- a) The red dragon
- b) The union jack

Class 4th English Grammar Past Paper

- c) The five cross flag

Answer: b)

40. Look at the picture. Children are playing on a _____



- a) Sea saw
b) Tire swing
c) None of them

Answer: a)

41. To make any dairy product, you need _____ .

- a) Milk
b) Honey
c) Water

Answer: a)

42. If you invited a panda to a restaurant, he would most probably order _____ .

- a) Bamboo
b) Honey
c) Fish

Answer: a)

43. What does “a couch potato” refer to?

- a) A fried potato
b) A lazy person
c) A friendly person

Answer: b)

44. Which is the odd one out?

- a) Tights
b) Sandals
c) Boots

Answer: a)

Class 4th English Grammar Past Paper

45. The dinner reception took _____ in the new festivity hall.

- a) Care
- b) Place
- c) After

Answer: b)

46. The feminine gender of “Lion” is _____.

- a) Lioness
- b) Bitch
- c) Cow

Answer: a)

47. The pronoun for “Mr. Suri” is:

- a) He
- b) She
- c) Both a) and b)

Answer: a)

48. These are _____ bags.

- a) Jennifer’s
- b) Jennife’rs
- c) Jennifers

Answer: a)

49. I like _____ cartoon very much.

- a) Doraemon
- b) Monkey
- c) Biscuits

Answer: a)

50. Choose the correct group of pronouns used for male group.

- a) She, her, hers
- b) He, his, him
- c) Both a) and b)

Answer: b)

51. Plural of baby is:

- a) Babies
- b) Babys

Class 4th English Grammar Past Paper

c) Bayes

Answer: a)

52. One bowl- eleven _____.

a) Monkeys

b) Bowls

c) Keys

Answer: a)

53. Tick the noun.

a) Wise

b) Suddenly

c) Platform

Answer: c)

54. Niece is a noun of _____.

a) Masculine

b) Feminine

c) Neuter gender

Answer: b)

55. The pronoun of salt is:

a) He

b) She

c) None of these

Answer: c)

56. How _____ cheese does you need for the macaroni?

a) Much

b) Many

c) Old

Answer: a)

57. If you want to _____ weight faster, you'll need to eat much less and exercise much more.

a) Lose

b) Loose

c) Win

Answer: a)

Class 4th English Grammar Past Paper

58. He's married but he hasn't got any children, _____ ?

- a) Has he
- b) Has she
- c) Have she

Answer: a)

59. My best friend Tonny _____ later for school.

- a) Is never
- b) Never is
- c) Isn't never

Answer: a)

60. Which one is the odd one out?

Radish- Aubergine- Cauliflower- Tangerine- Lettuce

- a) Tangerine
- b) Aubergine
- c) Radish

Answer: a)

61. Ice always _____ in water

- a) Floats
- b) Float
- c) Will float

Answer: a)

62. Which of these words is not a nationality?

- a) Greece
- b) German
- c) Japanese

Answer: a)

63. A photographer is someone who _____.

- a) Takes photos
- b) Makes photos
- c) Paints photos

Answer: a)

64. The names of persons, places, animals, and things are called _____.

- a) Nouns
- b) Verb

Class 4th English Grammar Past Paper

c) Adjective

Answer: a)

65. Tick the abstract noun.

a) Happiness

b) Cat

c) Gun

Answer: a)

66. The pronoun for “Book” is:

a) He

b) She

c) None of these

Answer: c)

67. Tick the abstract noun.

a) Table

b) Cabbage

c) Faith

Answer: c)

68. Plural of coat is:

a) Coats

b) Coatis

c) Coat

Answer: a)

69. Tick the thing.

a) Town

b) Mouse

c) Table

Answer: c)

70. A _____ of straw.

a) Bunch

b) Day

c) Bundle

Answer: c)

71. What is the material noun for the outer covering of a tree trunk?

Class 4th English Grammar Past Paper

- a) Wood
- b) Bark
- c) Timber

Answer: a)

72. Identify the material noun for the thin metal layer used to wrap chocolates.

- a) Foil
- b) Metal
- c) Tin

Answer: a)

73. Find the odd one out.

- a) nose
- b) eye
- c) chin

Answer: b)

74. Mahnoor, _____ the windows, please! It's too hot here in the class.

- a) Is opening
- b) To open
- c) Open

Answer: a)

75. It's likely to get cold tonight, so you may need an extra

- a) Carpet
- b) Blanket
- c) Mat

Answer: c)

76. I __ arrange the flowers for the bouquet.

- a) Can
- b) May
- c) Will

Answer: a)

77. __ I borrow this pen from you?

- a) May
- b) Might
- c) Can

Answer: a)

78. The teacher __ ask you to bring the homework.

- a) Might
- b) Can
- c) May

Class 4th English Grammar Past Paper

Answer: a)

79. According to the weather forecast, it ___ snow heavily tomorrow.

- a) May
- b) Shall
- c) Will

Answer: a)

80. Raj hasn't studied well. He ___ fail his exam.

- a) Might
- b) Shall
- c) May

Answer: a)

81. You ___ follow the traffic rules.

- a) May
- b) Must
- c) Should

Answer: b)

82. It ___ be difficult to live amidst war.

- a) Should
- b) Must
- c) Could

Answer: b)

83. My mother ___ scold me if I don't go back on time.

- a) Will
- b) May
- c) Must

Answer: a)

84. She sings _____ beautifully that everyone enjoys her performances.

- a) so
- b) too
- c) such

Answer: a)

85. I would like _____ a doctor someday.

Class 4th English Grammar Past Paper

- a) becoming
- b) to become
- c) become

Answer: b)

86. We've known each other _____ we were children.

- a) since
- b) for
- c) from

Answer: a)

87. The package arrived _____ the expected delivery date.

- a) on
- b) in
- c) before

Answer: c)

88. He went to the store _____ buy some groceries.

- a) to
- b) too
- c) two

Answer: a)

89. The cat is hiding _____ the bed.

- a) in
- b) on
- c) under

Answer: c)

90. _____ of my friends are coming to the party.

- a) Many
- b) Much
- c) More

Answer: a)

91. I can't believe _____ my keys at home.

- a) I forget
- b) I forgot
- c) I have forgotten

Answer: b)

92. He is the _____ of the two brothers.

- a) younger
- b) more young
- c) young

Answer: a)

Class 4th English Grammar Past Paper

93. The cake tasted _____ sweet that I couldn't finish it.

- a) so
- b) such
- c) too

Answer: c)

94. I'm going to the store. Do you want _____?

- a) come with me
- b) coming with me
- c) to come with me

Answer: c)

95. She plays the piano _____.

- a) good
- b) well
- c) goodly

Answer: b)

96. I couldn't find my keys _____ I left them on the kitchen counter.

- a) because
- b) so
- c) but

Answer: a)

97. The book is _____ on the table.

- a) lays
- b) laid
- c) lying

Answer: c)

98. He is _____ than his brother.

- a) smarter
- b) smart
- c) most smart

Answer: a)

99. I'll call you _____ I arrive at the airport.

- a) When
- b) During
- c) Since

Answer: a)

100. The sun is shining, and the birds are singing. It's a _____ day.

- a) Beautiful
- b) Beauty

Class 4th English Grammar Past Paper

c) Beautification

Answer: a)

Class 5th English Grammar Past Paper

1. As soft as
- a) Butter
 - b) Silk
 - c) Chocolate

Answer: a)

2. As numerous as
- a) Planets
 - b) Stars
 - c) Flies

Answer: b)

3. In the sentence "The keys are on the table; please grab _____," what pronoun completes the sentence?
- a) They
 - b) It
 - c) Them

Answer: c)

4. Identify the possessive pronoun in the sentence: "Is this pen yours or mine?"
- a) Yours
 - b) Mine
 - c) both of them

Answer: c)

5. Tick the noun of feminine gender.
- a) Woman
 - b) Princess
 - c) Both a) and b)

Answer: c)

6. Husband, brother, brother in law belong to:
- a) Male group
 - b) Female group
 - c) None of these

Answer: a)

7. One brush-ten_____.
- a) Brushes
 - b) Brushes

Class 5th English Grammar Past Paper

c) None of these

Answer: a)

8. _____ is singing a song

- a) Kainat
- b) Keys
- c) Ants

Answer: a)

9. Which group of letters form the plural of foot?

- a) F,t,o,s,o
- b) F,t,e,e
- c) E,e,f,t,s

Answer: b)

10. Tick the thing.

- a) Town
- b) Mouse
- c) Table

Answer: c)

11. A _____ of straw.

- a) Bunch
- b) Day
- c) Bundle

Answer: c)

12. What does the prefix pre-mean?

- a) After
- b) During
- c) Before

Answer: c)

13. Each member of the team _____ to donate his service. Choose the best form of verb.

- a) Wants
- b) Want
- c) None of above

Answer: a)

14. Is the capitalized word used as a noun or a verb? Some pieces are tiny ice particles, while other REACH the size of icebergs.

Class 5th English Grammar Past Paper

- a) Noun
- b) Verb

Answer: b)

15. The _____ account of the accident was missing details. What is the correct possessive noun for the sentence above?

- a) Witnesses
- b) Witness's
- c) Witness'

Answer: b)

16. Improper:

- a) Not according to expectations
- b) Wisdom
- c) To reduce the value of something

Answer: a)

17. Identify the adjective; the rain was steady throughout the afternoon.

- a) Rain
- b) Steady
- c) Afternoon

Answer: b)

18. In poetry, meaning can be emphasized by _____.

- a) Crafting the poem in the shape of main idea
- b) Capitalizing certain words or phrases
- c) Both of them

Answer: c)

19. I left my slippers Under the kitchen table. The word Under is?

- a) Noun
- b) Pronoun
- c) Preposition

Answer: c)

20. Which word in the sentence is a plural noun? "The city's lights shone brightly on the horizon last night."

- a) City's
- b) Lights
- c) Horizon

Answer: b)

Class 5th English Grammar Past Paper

21. An acquaintance is someone you call them your best friend?

- a) Yes
- b) No

Answer: b)

22. Maira is not coming today; Identify Noun.

- a) Maira
- b) Today
- c) Coming

Answer: a)

23. My mom will be leaving to Pakistan tomorrow. "Will be leaving" is?

- a) Verb, adverb
- b) Verb
- c) Adverb

Answer: a)

24. The teacher asked the students to stand. "Students" refer to?

- a) Noun
- b) Pronoun
- c) None of them.

Answer: a)

25. The clothes did not dry as it was raining all night.

- a) As is conjunction
- b) As is pronoun
- c) As is noun

Answer: a)

26. Sheena and her sister dance well.

- a) And & well is conjunction & adverb
- b) And & well is noun & pronoun
- c) None of them

Answer: a)

27. I am wearing a green dress for the party.

- a) Green is adjective
- b) Green is objective
- c) Green is noun

Answer: a)

Class 5th English Grammar Past Paper

28. Oh! That is really sad.

- a) Oh! Representing question
- b) Oh! Representing interjection
- c) None of them

Answer: b)

29. I can't believe _____ my keys at home.

- a) I forget
- b) I forgot
- c) I have forgotten

Answer: b)

30. He is the _____ of the two brothers.

- a) younger
- b) more young
- c) young

Answer: a)

31. The cake tasted _____ sweet that I couldn't finish it.

- a) so
- b) such
- c) too

Answer: c)

32. I'm going to the store. Do you want _____?

- a) come with me
- b) coming with me
- c) to come with me

Answer: c)

33. She plays the piano _____.

- a) good
- b) well
- c) goodly

Answer: b)

34. I couldn't find my keys _____ I left them on the kitchen counter.

Class 5th English Grammar Past Paper

- a) because
- b) so
- c) but

Answer: a)

35. The book is _____ on the table.

- a) lays
- b) laid
- c) lying

Answer: c)

36. He is _____ than his brother.

- a) smarter
- b) smart
- c) most smart

Answer: a)

37. I'll call you _____ I arrive at the airport.

- a) When
- b) During
- c) Since

Answer: a)

38. The sun is shining, and the birds are singing. It's a _____ day.

- a) Beautiful
- b) Beauty
- c) Beautification

Answer: a)

39. She is coming with me. "With is"?

- a) Preposition
- b) Noun
- c) Pronoun

Answer: a)

40. The word "un" means

- a) Not opposite of
- b) Again
- c) None

Answer: a)

41. What is the contraction in the sentence "I can't believe it"?

- a) Can
- b) Believe

Class 5th English Grammar Past Paper

c) Can't

Answer: c)

42. Identify the noun in the sentence: "The cat chased the mouse."

a) Cat, Mouse

b) Cat

c) Mouse

Answer: a)

43. Choose the correct adjective in the sentence: "She wore a beautiful dress to the party."

a) Wore

b) Beautiful

c) Dress

Answer: b)

44. Which conjunction is used to show contrast?

a) And

b) But

c) Or

Answer: b)

45. What is the pronoun in the sentence "They won the game"?

a) They

b) Won

c) Game

Answer: a)

46. Identify the noun in the sentence: "Running is good exercise."

a) Running

b) Good

c) Exercise

d) Is

Answer: a)

47. "Re" means

a) Again

b) Not again

c) None of them

Answer: a)

Class 5th English Grammar Past Paper

48. She _____ most of her time to football.

- a) Watched
- b) Devoted
- c) Played

Answer: b)

49. Each _____ and Susan _____ the test she failed.

- a) Time/took
- b) Took/time
- c) Day/time

Answer: a)

50. Ali _____ to play the guitar

- a) Want
- b) Wanted
- c) Decide

Answer: b)

51. Small stream:

- a) Interlace
- b) Rivulet
- c) Both

Answer: b)

52. We always plant pumpkins behind the garage. Tense of the verb is?

- a) Present
- b) Past
- c) None

Answer: a)

53. My brother is as sweet as honey is a:

- a) Simile
- b) Metaphor
- c) Both of them

Answer: a)

54. What does bi means?

- a) 2
- b) 1
- c) 3

Answer: a)

Class 5th English Grammar Past Paper

55. What type of figurative language is being used in the following sentence? It's going to take a thousand years to finish all this homework?

- a) Idiom
- b) Hyperbole
- c) Metaphor

Answer: b)

56. What part of speech is the word "book" in the sentence "I love reading books"?

- a) Noun
- b) Pronoun
- c) Adjective

Answer: a)

57. Identify the pronoun in the sentence: "She went to the store to buy groceries."

- a) She
- b) Store
- c) Groceries

Answer: a)

58. Choose the adjective in the sentence: "The big, red ball bounced down the hill."

- a) Bounced
- b) Red
- c) Down

Answer: b)

59. Which of the following is a coordinating conjunction?

- a) Because
- b) And
- c) Although

Answer: b)

60. In the sentence "He is my best friend," what is the possessive pronoun?

- a) He
- b) My
- c) Is

Answer: b)

61. logy mean?

- a) To love
- b) Study or science of

Class 5th English Grammar Past Paper

c) None

Answer: b)

62. These books _____ leather covers.

- a) Has
- b) Have
- c) None

Answer: b)

63. It takes _____ to run a race.

- a) Energy
- b) Energies
- c) Enirgy

Answer: a)

64. As dark as

- a) Night
- b) Black
- c) Coal

Answer: a)

65. As happy as

- a) Queen
- b) King
- c) Jack

Answer: b)

66. Pride goes before a fall. Pride is?

- a) Noun
- b) Abstract noun
- c) Both

Answer: a)

67. What is the object of the preposition? Venetian merchants traded with many different countries.

- a) Countries
- b) Merchants
- c) Both of them

Answer: a)

68. What do you think about his idea? Identify abstract noun.

Class 5th English Grammar Past Paper

- a) Idea
- b) Think
- c) You

Answer: a)

69. Mahnoor, courage, judgement, icecream, probability. Identify Abstract noun.

- a) Mahnoor, courage, icecream
- b) Probability, judgement, courage
- c) None

Answer: b)

70. Ten volunteers (is, are) necessary before we can continue the project?

- a) Are
- b) Is
- c) Both of them

Answer: a)

71. Choose the correct spellings:

- a) Delete
- b) Delte
- c) Delite

Answer: a)

72. The room with the entire window (has, have) no furniture.

- a) Has
- b) Have
- c) Haven't

Answer: a)

73. _____ the pain in my leg, I completed the race.

- a) Despite
- b) Inspire
- c) None

Answer: a)

74. Did you _____ to draw on the walls when you were a child?

- a) use
- b) had
- c) used

Answer: a)

75. Child: My tooth hurts.

Class 5th English Grammar Past Paper

Father : Let me see, maybe we need to visit the dentist.

Child: No. I do not want to _____ the dentist.

- a) look up
- b) see
- c) Go

Answer: c)

76. What is the antonym of "brave"?

- a) Strong
- b) Fearful
- c) Smart
- d) Happy

Answer: b)

77. Identify the adverb in the sentence: "She quickly finished her homework."

- a) She
- b) Quickly
- c) Finished
- d) Homework

Answer: b)

78. As firm as

- a) Rock
- b) Stone
- c) Gem

Answer: a)

79. Choose the correct spelling:

- a) Accomodate
- b) Accommodate (Correct Answer)
- c) Acommodate
- d) Accomodate

Answer: b)

80. Which sentence is in the past perfect tense?

- a) She eats breakfast every morning.
- b) They will go to the park.
- c) He had finished his homework before dinner.
- d) We are playing soccer.

Answer: c)

81. What is the plural form of "child"?

- a) Childs
- b) Childen
- c) Children
- d) Childs'

Class 5th English Grammar Past Paper

Answer: c)

82. Identify the preposition in the sentence: "The cat is under the table."

- a) Cat
- b) Under
- c) Table
- d) Is

Answer: b)

83. Which word is a conjunction?

- a) Quickly
- b) Because
- c) Happy
- d) Jumped

Answer: b)

84. Choose the correct possessive pronoun: "This is _____ book."

- a) Me
- b) My
- c) Mine
- d) I

Answer: c)

85. What is the main function of an apostrophe in a contraction?

- a) To show possession
- b) To join words together
- c) To indicate missing letters
- d) To create a plural form

Answer: c)

86. We ___ take care of our parents. ought to

- a) Ought to
- b) Shall
- c) Will

Answer: a)

87. I ___ visit the local grocery store soon.

- a) Shall
- b) Will
- c) Should

Answer: a)

88. You ___ be punctual.

- a) Should
- b) Would

Class 5th English Grammar Past Paper

c) Could

Answer: a)

89. One ___ repay all their debts.

- a) Ought to
- b) Ought
- c) Ought off

Answer: a)

90. ___ you show me the road to the market?

- a) Could
- b) Would
- c) Should

Answer: a)

91. The child ___ be taken to hospital immediately.

- a) Must
- b) Should
- c) Would

Answer: a)

92. ___ you have hot chocolate?

- a) Would
- b) Will
- c) Shall

Answer: b)

93. Ah expresses:

- a) Pleasure
- b) Pity
- c) Surprise

Answer: a)

94. As innocent as

- a) Girls
- b) Child
- c) Man

Answer: b)

95. Hmm expresses:

- a) Pity
- b) Pleasure
- c) Doubt

Answer: c)

96. Hello expresses:

- a) Surprise
- b) Pity
- c) Greetings

Class 5th English Grammar Past Paper

Answer: c)

97. As easy as

- a) DEATH
- b) ABC
- c) VOWEL

Answer: b)

98. As silly as

- a) Sheep
- b) Buffalo
- c) Snail

Answer: a)

99. _____ he studied hard, he couldn't pass the exam.

- a) Although
- b) Because
- c) since

Answer: a)

100. They went to the beach _____ have a picnic.

- a) for
- b) to
- c) in

Answer: a)

Class 6th English Grammar Past Paper

1. Timothy finally _____ at the wedding.
- a) showed up
 - b) buck up
 - c) give up

Answer: a)

2. Never _____ on your dreams.
- a) showed up
 - b) buck up
 - c) give up

Answer: c)

3. _____ the room before you leave to play.
- a) Clean up
 - b) Showed up
 - c) Buck up

Answer: a)

4. The convict is trying to _____ a story.
- a) Make up
 - b) Clean up
 - c) Showed up

Answer: a)

5. Mark Antony's speech _____ the Roman people.
- a) Worked up
 - b) Showed up
 - c) Made up

Answer: a)

6. The convention was _____ due to the pandemic.
- a) called off
 - b) cancelled off
 - c) both of them

Answer: a)

7. You can't _____ such a horrible thing.
- a) get away with
 - b) call away with
 - c) both of them

Answer: a)

8. The parents couldn't _____ with the naughty kid.
- a) put up
 - b) clean up
 - c) make up

Answer: a)

Class 6th English Grammar Past Paper

9. The speaker _____ on me.

- a) hung up
- b) speak up
- c) both a and b

Answer: a)

10. Can you _____ with a new topic?

- a) come up
- b) bring up
- c) speak up

Answer: a)

11. Decode the numbers to find the plural of "mouse".

1	2	3	4	5	6	7
U	C	E	S	M	I	O

- a) 51434
- b) 5623
- c) 5622

Answer: b)

12. Amy usually goes to work

- a) By bus
- b) On bus
- c) In bus

Answer: a)

13. A zebra crossing is a place where

- a) People cross a road
- b) People crossed a road
- c) Zebra cross a road

Answer: a)

14. Once a week, my brother and I swimming at the pool.

- a) Goes
- b) Go
- c) Went

Answer: b)

15. Sorry, a problem with this file. Please reload.

- a) There is
- b) Its
- c) Theirs

Answer: a)

16. Which pair contains opposite words?

- a) Light/dark

Class 6th English Grammar Past Paper

- b) Quiet/silent
- c) None

Answer: a)

17. Which sentence is in the past perfect tense?

- a) She will eat dinner later.
- b) They have finished their homework.
- c) He had already left when I arrived.
- d) The sun is shining brightly.

Answer: c)

18. Identify the sentence in the present continuous tense:

- a) I ate breakfast early.
- b) She will call you soon.
- c) They are playing football in the park.
- d) We have visited that museum.

Answer: c)

19. In which sentence is the future perfect tense used correctly?

- a) By next year, they are finishing the project.
- b) He will have completed his assignment by tomorrow.
- c) She was reading a book last night.
- d) The movie has ended.

Answer: b)

20. Choose the sentence with the correct past continuous tense:

- a) The birds sing in the morning.
- b) I am writing a letter yesterday.
- c) They were swimming in the pool when it started raining.

Answer: c)

21. Which sentence is in the present perfect continuous tense?

- a) We play tennis every Sunday.
- b) They are playing chess now.
- c) I have been studying for three hours.

Answer: c)

22. Identify the sentence with the correct future continuous tense:

- a) I am going to the market now.
- b) They will finish the project by Friday.
- c) She will be dancing at the party tomorrow.

Answer: c)

23. Choose the sentence with the correct past perfect continuous tense:

Class 6th English Grammar Past Paper

- a) I will have slept for eight hours tonight.
- b) They had been waiting for the bus for an hour.
- c) We play football every weekend.

Answer: b)

24. In which sentence is the present simple tense used correctly?

- a) She is singing a song now.
- b) The train will arrive at 3 PM.
- c) Dogs bark loudly at night.

Answer: c)

25. Identify the sentence in the future perfect continuous tense:

- a) I am reading a book.
- b) They will be watching a movie tomorrow.
- c) He will have been working on the project for a month by next Monday.

Answer: c)

26. Choose the sentence with the correct past simple tense:

- a) We have been living here for five years.
- b) She is studying for her exam.
- c) They visited Paris last summer.

Answer: c)

27. In which sentence is the present perfect simple tense used correctly?

- a) I was reading a book yesterday.
- b) They will go to the cinema tonight.
- c) We have finished our homework.

Answer: c)

28. To pick holes

- a) To criticize someone
- b) To cut some part of an item
- c) None of these

Answer: a)

29. To put one's hand to plough

- a) To take a difficult task
- b) To take an easy task
- c) Both of them

Answer: a)

30. To be above board

- a) To be honest in any business deal
- b) To be fake in any business deal
- c) None of these

Answer: a)

31. To end in smoke

Class 6th English Grammar Past Paper

- a) To ruin others
- b) To ruin oneself
- c) To overcome someone

Answer: b)

32. To cry wolf

- a) To give false alarm
- b) To listen eagerly
- c) To turn people

Answer: b)

33. To have an axe to grind

- a) A private end to serve
- b) To listen eagerly
- c) To turn people

Answer: a)

34. Identify the sentence with the correct future perfect simple tense:

- a) I am working on a project.
- b) He will have completed his degree by next May.
- c) She eats breakfast at 7 AM.

Answer: b)

35. Choose the sentence with the correct past perfect simple tense:

- a) She is playing the piano now.
- b) They had already left when I arrived.
- c) He has been writing a letter.

Answer: b)

36. Which sentence is in the present continuous tense?

- a) The sun sets in the west.
- b) They are having dinner at the moment.
- c) She will sing a song tomorrow.

Answer: b)

37. Identify the sentence with the correct past continuous tense:

- a) I will cook dinner later.
- b) They were playing volleyball when it started raining.
- c) We have visited that museum last month.

Answer: b)

38. In which sentence is the future continuous tense used correctly?

- a) She is reading a book now.
- b) They will finish the project by Friday.
- c) He will be working on a new project next month.

Answer: c)

39. Choose the sentence with the correct past perfect continuous tense:

Class 6th English Grammar Past Paper

- a) She has been studying for three hours.
- b) I will have slept for eight hours tonight.
- c) They had been waiting for the bus for an hour.

Answer: c)

40. Identify the sentence in the present perfect continuous tense:

- a) I am reading a book.
- b) She has visited London last year.
- c) He has been working on the assignment for two hours.

Answer: c)

41. Choose the sentence with the correct future perfect continuous tense:

- a) They will be watching a movie tomorrow.
- b) She will have been dancing at the party for an hour by midnight.
- c) We have finished our homework.

Answer: c)

42. In which sentence is the present simple tense used correctly?

- a) The train will arrive at 3 PM.
- b) Dogs bark loudly at night.
- c) She is singing a song now.

Answer: c)

43. Identify the sentence with the correct future simple tense:

- a) I am working on a project.
- b) She will bake a cake.
- c) They are playing basketball yesterday.

Answer: b)

44. Choose the sentence with the correct past simple tense:

- a) I have been living here for five years.
- b) They will go to the cinema tonight.
- c) We will go to the zoo tomorrow.

Answer: c)

45. Which sentence is in the present perfect simple tense?

- a) I was reading a book yesterday.
- b) We have finished our dinner.
- c) She eats breakfast at 7 AM.

Answer: c)

46. Identify the sentence with the correct future perfect simple tense:

- a) He will have been working on the project for a month by next Monday.
- b) I am working on a project.
- c) They were playing volleyball when it started raining.

Answer: a)

Class 6th English Grammar Past Paper

47. Choose the sentence with the correct past perfect simple tense:

- a) She is studying for her exam.
- b) They had already left when I arrived.
- c) I am going to the market now.

Answer: b)

48. In which sentence is the present continuous tense used correctly?

- a) She was playing the piano yesterday.
- b) I am writing a letter yesterday.
- c) They are playing football in the park.

Answer: c)

49. Identify the sentence with the correct past continuous tense:

- a) I have been studying for three hours.
- b) They were swimming in the pool when it started raining.
- c) We play football every weekend.

Answer: b)

50. Choose the sentence with the correct future continuous tense:

- a) I am going to the market now.
- b) She will be dancing at the party tomorrow.
- c) He will have completed his degree by next May.

Answer: b)

51. In which sentence is the past perfect continuous tense used correctly?

- a) I am reading a book.
- b) She will have slept for eight hours tonight.
- c) They had been waiting for the bus for an hour.

Answer: c)

52. This problem _____ by your mother yesterday.

- a) Was solved
- b) Is solved
- c) Solved

Answer: a)

53. My cousin wrote this book. This book _____ by my cousin.

- a) Was written
- b) Was solved
- c) Is written

Answer: a)

54. This clock _____ in 1970.

- a) Is made
- b) Was made
- c) Will be made

Answer: b)

Class 6th English Grammar Past Paper

55. Bronson scored a goal. Yes, a goal _____ by Bronson.

- a) Was scored
- b) Will be scored
- c) Is scored

Answer: a)

56. Change the voice "Set the thief to catch the thief.

- a) Let the thief to catch the thief
- b) Let the thief be set to catch the thief
- c) Thief is set to catch the thief

Answer: b)

57. Passive of "Why did you disobey your parents?"

- a) Why your parents do was disobey by you?
- b) Why were your parents disobeyed by you?
- c) Why your parents were disobeyed by you?

Answer: b)

58. Rome was not built in a day.

- a) They did not build Rome in a day.
- b) They could not build Rome in a day.
- c) The Romans did not build Rome in a day.

Answer: c)

59. Though he has lot of many, yet all his plans are built upon sand.

- a) Established on insecure foundations
- b) Based on inexperience
- c) Both of them

Answer: a)

60. His plan was so complicated that it floored his listeners.

- a) Puzzled
- b) Entertained
- c) Annoyed

Answer: a)

61. There has been bad blood between the two communities even before shouting.

- a) Ill feeling
- b) Loony fights
- c) Quarrels

Answer: a)

62. The curious neighbors were disappointed as the young couple's quarrel was just a storm in a teacup.

- a) Fuss about a trifle

Class 6th English Grammar Past Paper

- b) Brittle situation
- c) Both of them

Answer: a)

63. Aysha always keeps himself to himself.

- a) Is unsociable
- b) Is too busy
- c) Is too selfish

Answer: a)

64. While the ladies continued their small talk in the drawing room, I felt bored.

- a) Light conversation
- b) Whispering
- c) Gossip

Answer: a)

65. Identify the sentence with the correct subject-verb agreement:

- a) The flock of birds is flying south.
- b) The flock of birds are flying south.
- c) Flock of birds is flying south.

Answer: a)

66. What is the correct reported speech of "He said, 'I will visit my grandparents tomorrow'"?

- a) He says that he will visit his grandparents tomorrow.
- b) He said that he will visit his grandparents tomorrow.
- c) He said that he would visit his grandparents the next day.

Answer: c)

67. Choose the preposition in the sentence: "The cat jumped onto the roof."

- a) Cat
- b) Jumped
- c) Onto
- d) Roof

Answer: c)

68. Identify the complex sentence:

- a) The sun sets in the west.
- b) Although it was raining, they decided to go for a walk.
- c) She likes to swim in the ocean.
- d) He plays the guitar beautifully.

Answer: b)

69. What is the correct past perfect tense of "We have completed our homework"?

- a) We had completed our homework.
- b) We has completed our homework.

Class 6th English Grammar Past Paper

c) We had completing our homework.

Answer: a)

70. Select the correct adverb: "The music played _____ in the background."

- a) Soft
- b) Softly
- c) Softness

Answer: b)

71. Choose the synonym of "ephemeral":

- a) Eternal
- b) short lived Permanent

Answer: b)

72. What is the material noun for the substance used in making ink?

- a) Inky
- b) Ink
- c) Inkiness

Answer: b)

73. Identify the adjective in the sentence: "The old, dilapidated house was haunted."

- a) House
- b) Dilapidated
- c) Haunted

Answer: b)

74. What is the active voice sentence?

- a) The cake was eaten by the children.
- b) The children ate the cake. (Correct Answer)
- c) Eating the cake, the children laughed.
- d) The cake has been eaten.

Answer: b)

75. Choose the correct spelling:

- a) Carribbean
- b) Carribbean
- c) Caribbean
- d) Caribbean

Answer: c)

76. What is the plural form of "cactus"?

- a) Cacti
- b) Cactuses
- c) Cactus
- d) Cactuss

Answer: a)

Class 6th English Grammar Past Paper

77. Identify the conjunction in the sentence: "She will come if you invite her."

- a) She
- b) Will
- c) If
- d) You

Answer: c)

78. What is the possessive pronoun in the sentence: "Those toys are theirs"?

- a) Those
- b) Toys
- c) Theirs
- d) Are

Answer: c)

79. Choose the correct relative pronoun: "The girl _____ won the first prize is my friend."

- a) Which
- b) Whose
- c) Who
- d) Whom

Answer: c)

80. Identify the antonym of "Ubiquitous".

- a) Common
- b) Scarce
- c) Unusual

Answer: c)

81. What is the contraction in the sentence: "I would prefer not to go."?

- a) Would
- b) Prefer
- c) Not
- d) I'd

Answer: d)

82. Choose the correct preposition: "They are skilled _____ playing musical instruments."

- a) At
- b) In
- c) On

Answer: a)

83. What is the material noun for the substance used in making bread?

- a) Bread
- b) Bready
- c) Dough

Class 6th English Grammar Past Paper

Answer: c)

84. Identify the adverb in the sentence: "She spoke very softly during the meeting."

- a) She
- b) Very
- c) Softly

Answer: b)

85. What is the correct past perfect tense of "I have written a letter"?

- a) I was writing a letter.
- b) I had written a letter.
- c) I wrote a letter.
- d) I have been writing a letter.

Answer: b)

86. Choose the correct spelling:

- a) Occasion
- b) Occassion
- c) Occasison

Answer: a)

87. What is the plural form of "datum"?

- a) Data
- b) Datas
- c) Datums
- d) Both a) and c)

Answer: a)

88. Identify the adverb in the sentence: "The car moved very quickly down the highway."

- a) Car
- b) Moved
- c) Very
- d) Quickly

Answer: c)

89. What is the active voice sentence?

- a) The cake was backed by the baker.
- b) The baker backed the cake.
- c) Baking the cake, the baker hummed a song.
- d) The cake has been backed.

Answer: b)

90. Choose the correct relative pronoun: "The book _____ is on the shelf is mine."

- a) That
- b) Which
- c) Whose

Class 6th English Grammar Past Paper

Answer: b)

91. What is the correct preposition: "The cat is hiding _____ the bed."

- a) At
- b) On
- c) Under
- d) Over

Answer: c)

92. Choose the correct spelling:

- a) Neccessary
- b) Necessary
- c) Necessary
- d) Neccessery

Answer: b)

93. What is the possessive pronoun in the sentence: "These shoes are hers"?

- a) These
- b) Shoes
- c) Hers
- d) Are

Answer: c)

94. Identify the antonym of "Benevolent".

- a) Malevolent
- b) Benevolentless
- c) Kind
- d) Friendly

Answer: a)

95. What is the contraction in the sentence: "They're going to the beach tomorrow."?

- a) They
- b) Going
- c) To
- d) They're

Answer: d)

96. Choose the correct adjective in the sentence: "She wore a beautiful dress to the party."

- a) Wore
- b) Beautiful
- c) Dress
- d) Party

Answer: b)

97. What is the correct reported speech of "He said, 'I am reading a book'"?

- a) He says that he reads a book.

Class 6th English Grammar Past Paper

- b) He said that he reads a book.
- c) He said that he was reading a book.
- d) He said, "I am reading a book."

Answer: c)

98. Identify the adverb in the sentence: "He ran quite fast to catch the bus."

- a) He
- b) Ran
- c) Quite
- d) Fast

Answer: c)

99. Choose the correct preposition: "The dog is running _____ the yard."

- a) In
- b) On
- c) Across

Answer: c)

100. Identify the conjunction in the sentence: "I like both pizza and pasta."

- a) Like
- b) Pizza
- c) Both
- d) Pasta

Answer: c)

Class 7th English Grammar Past Paper

1. The designer said to her, 'will you have the dress ready by tomorrow evening?'
- The designer asked her if she would have the dress ready by next evening.
 - The designer asked her that she would have the dress ready by next evening.
 - The designer asked her that if she will like to have the dress by next evening.
 - The designer asked her that she will have the suit ready by next evening.

Answer: a)

2. They said, 'Let us come in'.
- They told that let them be allowed to come in.
 - They requested that they might be allowed to come in.
 - They said that if they are allowed to come in.
 - They requested me to let them come in.

Answer: b)

3. Reshma said to Priya, 'Why are you sketching on the wall?'
- Reshma asked Priya why was she sketching on the wall.
 - Reshma asked Priya why had she been sketching on the wall
 - Reshma asked Priya that why is she sketching on the wall.
 - Reshma asked Priya why she was sketching on the wall.

Answer: d)

4. 'Jacob fell as he'd have wished', the father said.
- The father said that Jacob has fallen as he would have wished.
 - The father said that Jacob had fallen as he would have wished.
 - The father said that Jacob had fallen as he had wished.
 - The father said that Jacob had been fallen as he would have been wished.

Answer: b)

5. Arya said to Tara, 'David will leave for his mother's place tomorrow'.
- Arya told Tara that David will leave for his mother's place tomorrow.
 - Arya told Tara that David will leave for his mother's place the next day.
 - Arya told Tara that David would leave for his mother's place the next day.
 - Arya informed Tara that David would be leaving for his mother's place the next day

Answer: c)

6. She said, 'Why didn't you send a friend request to me?'
- She asked me why had i not sent a friend request to her
 - She enquired why I had not sent a friend request to her.
 - She enquired why I did not send a friend request to her.
 - She questioned why I had not sent a friend request to her.

Answer: b

7. The judge commanded them to call the accused in the court.
- The Judge said, 'Call the accused in the court'.
 - The Judge ordered, 'Call the accused in the court'
 - The Judge command, 'Call the accused in the court'
 - The Judge said to them, 'Call the accused in the court'.

Answer: d)

Class 7th English Grammar Past Paper

8. The instructor asked Ronny if he was ready for the race.
- a) 'Ronny, are you ready for the race?', the instructor asked.
 - b) 'Are you ready for the race Ronny?', the instructor asked.
 - c) 'Ronny, ready for race?' the instructor said.
 - d) 'Ronny, are you ready for the race?', said the instructor.

Answer: a)

9. Manager said to Shekher, 'Why didn't you attend the meeting yesterday?'
- a) The manager enquired shekhar why did not he attend the meeting the day before.
 - b) The manager asked Shekhar why he did not attend the meeting the previous day.
 - c) The manager asked Shekhar why he had not attended the meeting the day before.
 - d) The manager enquired Shekhar that why didn't he attended the meeting yesterday.

Answer: c)

10. I asked my sister if she had returned the mobile phone to her friend.
- a) I said to my sister, 'have you returned the mobile phone to your friend?'
 - b) I said to my sister, 'did you return the mobile phone to my friend?'
 - c) I said to my sister, 'have you returned the mobile phone to my friend?'
 - d) I asked my sister, 'have you return the mobile phone to your friend?'

Answer: a)

11. "Fortune befriends the bold".
- a) Milton
 - b) Dryden
 - c) Keats
 - d) Plato

Answer: b)

12. "Common sense is not so common".
- a) Voltaire
 - b) Plato
 - c) Keats
 - d) Dryden

Answer: a)

13. I _____ this exercise by ten o'clock. [Finish]
- a) Shall have finished
 - b) Have finished
 - c) Finish
 - d) Finished

Answer: a)

14. Put an S (for "synonym") or an A (for "antonym") in the blank after each number to indicate how the words are related. _____: I couldn't recall her name and I don't even remember where we met.
- a) S
 - b) A

Answer: a)

Class 7th English Grammar Past Paper

15. Choose the sentence with the correct past perfect continuous tense:

- a) I will have slept for eight hours tonight.
- b) They had been waiting for the bus for an hour.
- c) We play football every weekend.

Answer: b)

16. In which sentence is the present simple tense used correctly?

- a) She is singing a song now.
- b) The train will arrive at 3 PM.
- c) Dogs bark loudly at night.

Answer: c)

17. Identify the sentence in the future perfect continuous tense:

- a) I am reading a book.
- b) They will be watching a movie tomorrow.
- c) He will have been working on the project for a month by next Monday.

Answer: c)

18. Choose the sentence with the correct past simple tense:

- a) We have been living here for five years.
- b) She is studying for her exam.
- c) They visited Paris last summer.

Answer: c)

19. In which sentence is the present perfect simple tense used correctly?

- a) I was reading a book yesterday.
- b) They will go to the cinema tonight.
- c) We have finished our homework.

Answer: c)

20. To pick holes

- a) To criticize someone
- b) To cut some part of an item
- c) None of these

Answer: a)

21. To put one's hand to plough

- a) To take a difficult task
- b) To take an easy task
- c) Both of them

Answer: a)

22. To be above board

- a) To be honest in any business deal
- b) To be fake in any business deal
- c) None of these

Answer: a)

Class 7th English Grammar Past Paper

23. To end in smoke
- a) To ruin others
 - b) To ruin oneself
 - c) To overcome someone

Answer: b)

24. Put an S (for “synonym”) or an A (for “antonym”) in the blank after each number to indicate how the words are related. _____ Chris wasn't in his seat when the teacher passed out the morning assignment. He was tardy as usual. Then he missed the bus and was late for supper.
- a) S
 - b) A

Answer: a)

25. "To take care of" means:
- a) to look back
 - b) to look after
 - c) to look in

Answer: b)

26. She was _____ dressed with fine furs and jewels.
- a) expensive
 - b) more expensive
 - c) expensively

Answer: c)

27. Why did you that book home without asking me?
- a) remove
 - b) take
 - c) get

Answer: b)

28. I asked my friend to me 10 pounds.
- a) borrow
 - b) withdraw
 - c) lend

Answer: c)

29. He's worked for that company last May.
- a) from
 - b) during
 - c) since

Answer: c)

30. Timothy finally _____ at the wedding.
- a) showed up
 - b) buck up
 - c) give up

Answer: a)

Class 7th English Grammar Past Paper

31. Never _____ on your dreams.

- a) showed up
- b) buck up
- c) give up

Answer: c)

32. _____ the room before you leave to play.

- a) Clean up
- b) Showed up
- c) Buck up

Answer: a)

33. The convict is trying to _____ a story.

- a) Make up
- b) Clean up
- c) Showed up

Answer: a)

34. Mark Antony's speech _____ the Roman people.

- a) Worked up
- b) Showed up
- c) Made up

Answer: a)

35. The convention was _____ due to the pandemic.

- a) called off
- b) cancelled off
- c) both of them

Answer: a)

36. You can't _____ such a horrible thing.

- a) get away with
- b) call away with
- c) both of them

Answer: a)

37. The parents couldn't _____ with the naughty kid.

- a) put up
- b) clean up
- c) make up

Answer: a)

38. "She's going on holiday for a fortnight" means that she will be away for _____.

- a) four nights
- b) four weeks
- c) two weeks

Answer: c)

Class 7th English Grammar Past Paper

39. Complete the sentence: If you were a true friend, you _____ me a hand with this difficult assignment.

- a) would give
- b) gave
- c) would given

Answer: a)

40. Which word sounds the same as “hare”?

- a) hire
- b) heir
- c) hear
- d) hair
- e) here

Answer: d)

41. Funny how you can get a bee in your bonnet about the most unlikely matters.

- a) go wild
- b) obsessed with an idea
- c) speak succinctly
- d) stay up

Answer: b)

42. I understand that you don't like the necklace he brought, but, it is a gift, so please, don't look a gift horse in the mouth.

- a) don't judge it by price
- b) don't compare it with others gift
- c) don't find fault with the gift
- d) don't expect too much

Answer: c)

43. The sales manager tried every trick in the book to sell the flat to my uncle, but they failed.

- a) Try every possible way
- b) Not ready to bargain
- c) Try to give the least discount
- d) Stuck in the midway

Answer: a)

44. It was crazy of you to drive like that. Youkilled somebody.

- a) ought to have
- b) might not have
- c) could have

Answer: c)

45. He fell over while playing tennis and his knee.

- a) sliced
- b) skimmed
- c) chopped
- d) beat
- e) grazed

Class 7th English Grammar Past Paper

Answer: e)

46. Incredible , Diana and Dean have got married.

- a) as it may seem
- b) as may it seem
- c) as seems it

Answer: a)

47. Choose the correct answer to complete the dialogue:

“I’ve invited Sarah to my party on Friday.”

“I doubt if she.....She’s got an important exam on Saturday morning.”

- a) is coming
- b) will come
- c) came

Answer: b)

48. What birds are fed by the Beefeaters at the Tower of London?

- a) pigeons
- b) crows
- c) ravens
- d) seagulls

Answer: c)

49. She ought toa taxi home last night instead of walking alone.

- a) take
- b) have taken
- c) took

Answer: b)

50. Some rooms don’t have curtains at the windows, they have

- a) blinds
- b) carpets
- c) gates

Answer: a)

51. “To be, or not to be? That is the question-“is a famous quote in William Shakespeare’s
play

- a) Othello
- b) Hamlet
- c) Macbeth

Answer: b)

52. Robin Hood was a heroic outlaw in English folklore who became known for “robbing
from the rich and giving to the poor”, assisted by a group of fellow outlaws known as his
.....

Class 7th English Grammar Past Paper

- a) Merry Men
- b) Wise Men
- c) Robbers

Answer: a)

53. After decades of neglect, government schools are finally making a fresh start with much-needed improvements to facilities and teaching methods.

- a) Improvising the old thought
- b) Grabbing the eyeballs
- c) Starting something in a new and different way
- d) Giving a jumpstart

Answer: c)

54. They thought that Ria would simply give up if her complaint had to go to the court. Now, she will realize that they have caught a Tartar!

- a) Dealing with an expert
- b) Forced to leave something
- c) Dealing with a troublesome person
- d) Wasting time

Answer: c)

55. As I was driving through the woods, I saw something moving in the trees but I could not what it was.

- a) take out
- b) turn off
- c) work off
- d) make out

Answer: d)

56. Security during the Queen's visit must be maintained

- a) in any way
- b) on the whole
- c) at all costs
- d) by no means

Answer: c)

57. My grandmother is a very smart woman. Her shoes always her gloves and handbag.

- a) suit
- b) fit
- c) match

Answer: c)

58. He was _____ upset _____ even get out of bed.

- a) too / to
- b) so / too
- c) such / to
- d) very / to

Class 7th English Grammar Past Paper

Answer: a)

59. Edward Parker, _____ book became a best-seller overnight, is visiting our town next week.

- a) who's
- b) whose
- c) whom
- d) which

Answer: b)

60. Which is the extra word in the following sentence? My mother doesn't always let me to watch TV at night.

- a) always
- b) let
- c) me
- d) to

Answer: d)

61. I'm already full and I've only eaten one

- a) type
- b) food
- c) course
- d) order

Answer: c)

62. He has been working _____ lately.

- a) roughly
- b) hard
- c) strongly
- d) hardly

Answer: b)

63. Alice turned the TV off _____ she could concentrate on her homework.

- a) so
- b) since
- c) if
- d) unless

Answer: a)

64. Which of the following verbs means to go over your notes again before an exam?

- a) repeat
- b) remind
- c) revise
- d) recall

Answer: c)

65. William Shakespeare was a(n).....playwright widely regarded as one of the greatest writers of all times.

- a) Welsh

Class 7th English Grammar Past Paper

- b) American
- c) Scottish
- d) English
- e) Irish

Answer: d)

66. The Tower of London was originally built by

- a) King Harold
- b) Christopher Wren
- c) Henry VIII

Answer: b)

67. If someone is unkind or not willing to spend money they are

- a) Disobedient
- b) unsympathetic
- c) unruly

Answer: b)

68. Which of the following expressions is incorrect?

- a) say a prayer
- b) say a word
- c) say the time

Answer: c)

69. Benjamin Franklin dedicated his whole life to the of his fellow-citizens.

- a) faith
- b) support
- c) welfare
- d) improvement
- e) sickness

Answer: c)

70. She was very disappointed and she..... again and again.

- a) sided
- b) sited
- c) sighted
- d) cited
- e) sighed

Answer: e)

71. She went out for a walk it was raining.

- a) regardless
- b) in spite of
- c) Despite

Answer: c)

72. Winston Churchill is the only to have received the Nobel Prize in Literature.

- a) Canadian Archbishop
- b) American President

Class 7th English Grammar Past Paper

- c) American Prime Minister
- d) British Prime Minister

Answer: d)

73. If Iyour phone number, I would have called you but I forgot my address book at home.

- a) had had
- b) have
- c) have had

Answer: a)

74. “Frankenstein” is a horror story written by

- a) Percy Bysshe Shelley
- b) Mary Shelley
- c) William Shakespeare

Answer: b)

75. We were disappointed that we only saw a few of fish during our dive.

- a) swarms
- b) schools
- c) packs
- d) heaps
- e) bangs

Answer: b)

76. Which word means “to treat a person badly” ?

- a) Declare
- b) Exhibit
- c) Persecute

Answer: c)

77. I always go to school by bus. However this week _____ by car with my father.

- a) I’ll
- b) I’ve gone
- c) I’m going

Answer: a)

78. Which of these suffixes means “able to be” or “suitable for being” ?

- a) Ible
- b) Ion
- c) 1st

Answer: a)

79. Masculine and feminine are given in pairs. Select the wrong one.

- a) Horse, lioness
- b) Lord, lady
- c) Brother, sister

Class 7th English Grammar Past Paper

Answer: a)

80. The _____ outside is rainy and cold.

- a) Weather
- b) Whether

Answer: a)

81. The theme of the story is: _____.

- a) The best part of the story
- b) The lesson of the story
- c) The starting of the story

Answer: b)

82. Tree is to Forest as Book is to:

- a) Shelf
- b) Library
- c) Chapter
- d) Cover

Answer: b)

83. The detective found a _____ clue at the crime scene.

- a) Elusive
- b) Cryptic
- c) Pernicious
- d) Ephemeral

Answer: b)

84. All roses are flowers. Some flowers fade quickly. Therefore, some roses:

- a) Fade quickly
- b) Do not fade quickly
- c) Are thorns
- d) Are artificial

Answer: a)

85. Sentence Completion: The magician's performance was so captivating that it held the audience in _____.

- a) Wonder
- b) Awe
- c) Suspense
- d) Confusion

Answer: b)

86. Critical Reasoning: If all elephants can fly and Dumbo is an elephant, then:

- a) Dumbo can fly
- b) Dumbo cannot fly
- c) Elephants cannot fly
- d) All elephants are like Dumbo

Answer: a)

Class 7th English Grammar Past Paper

87. Analogous Pair: Doctor is to Hospital as Teacher is to:

- a) Classroom
- b) Students
- c) Books
- d) School

Answer: a)

88. Odd One Out: Identify the word that does not belong: Apple, Orange, Banana, Grape, Carrot.

- a) Apple
- b) Orange
- c) Banana
- d) Carrot

Answer: d)

89. If the moon is made of green cheese, then what can we infer about the ocean?

- a) It is made of cheese.
- b) It is not made of cheese.
- c) It is green.
- d) It is made of water.

Answer: b)

90. Identify the adverb in the sentence: "She danced gracefully across the stage."

- a) She
- b) Danced
- c) Gracefully
- d) Stage

Answer: c)

91. Choose the correct conjunction: "He will come to the party _____ he finishes his homework."

- a) But
- b) And
- c) If
- d) Or

Answer: c)

92. What is the preposition in the sentence: "The book is on the shelf."

- a) The
- b) Book
- c) Is
- d) On

Answer: d)

93. Identify the interjection in the sentence: "Oh, I forgot to bring my umbrella."

- a) Oh
- b) I
- c) Forgot
- d) Bring

Answer: a)

Class 7th English Grammar Past Paper

94. Choose the correct conjunction: "He is allergic to peanuts, _____ he loves peanut butter sandwiches."

- a) So
- b) but
- c) Because
- d) Or

Answer: b)

95. In the sentence "The cat caught the mouse," what is the voice"?

- a) Active
- b) Passive

Answer: a)

96. What is the indirect speech of "She said, 'I will come tomorrow'"?

- a) She says that she will come tomorrow.
- b) She said that she will come tomorrow.
- c) She says, "I will come tomorrow."
- d) She said that she would come tomorrow.

Answer: d)

97. Identify the adverb in the sentence: "The students worked diligently during the exam."

- a) Students
- b) Worked
- c) Diligently
- d) Exam

Answer: c)

98. Choose the correct conjunction: "I studied hard, _____ I couldn't pass the exam."

- a) But
- b) And
- c) Because
- d) Or

Answer: a)

99. What is the preposition in the sentence: "The cat jumped over the fence."

- a) Cat
- b) Jumped
- c) Over
- d) Fence

Answer: c)

100. Identify the interjection in the sentence: "Wow, that performance was amazing!"

- a) Wow
- b) That
- c) Performance
- d) Amazing

Answer: a)

Class 7th English Grammar Past Paper

Class 8th English Grammar Past Paper

1. Choose the correct conjunction: "She is both talented _____ hardworking."

- a) Or
- b) And
- c) But
- d) Yet

Answer: b)

2. What is the indirect speech of "He said, 'I am going to the market'"?

- a) He says, "I am going to the market."
- b) He said that he was going to the market.
- c) He says that he is going to the market.
- d) He said, "I will go to the market."

Answer: b)

3. Identify the adverb in the sentence: "The car moved slowly along the winding road."

- a) Car
- b) Moved
- c) Slowly
- d) Winding

Answer: c)

4. Choose the correct conjunction: "I will buy a new phone _____ my old one is not working."

- a) Or
- b) But
- c) Because
- d) So

Answer: c)

5. What is the preposition in the sentence: "The keys are on the table."

- a) The
- b) Keys
- c) Are
- d) On

Answer: d)

6. Identify the interjection in the sentence: "Alas, the castle crumbled to the ground."

- a) Alas
- b) The
- c) Castle
- d) Ground

Answer: a)

7. Choose the correct conjunction: "She enjoys playing basketball _____ swimming."

- a) Or
- b) And

Class 8th English Grammar Past Paper

- c) But
- d) Yet

Answer: b)

8. What is the indirect speech of "He said, 'I will come later'"?

- a) He says that he will come later.
- b) He said that he will come later.
- c) He says, "I will come later."
- d) He said that he would come later.

Answer: d)

9. Identify the adverb in the sentence: "The train departed early in the morning."

- a) Train
- b) Departed
- c) Early
- d) Morning

Answer: c)

10. Which sentence is grammatically correct?

- a) He don't like pizza.
- b) She doesn't likes pizza.
- c) They doesn't like pizza.
- d) I don't like pizza.

Answer: d)

11. What is the synonym for "ubiquitous"?

- a) Rare
- b) Abundant
- c) Unique
- d) Scarce

Answer: b)

12. What is the main idea of the passage?

The benefits of regular exercise include improved cardiovascular health, enhanced mood, and increased energy levels.

- a) The importance of cardiovascular health.
- b) The benefits of regular exercise.
- c) Ways to enhance mood.
- d) The drawbacks of a sedentary lifestyle.

Answer: b)

13. In which sentence is the punctuation used correctly?

- a) She loves hiking, camping and fishing.
- b) He said "I will be there by 3 pm".
- c) My favorite colors are blue, green and yellow.
- d) The dog barked loudly but, ran away.

Class 8th English Grammar Past Paper

Answer: c)

14. What literary device is used in the phrase “time flies”?

- a) Simile
- b) Metaphor
- c) Personification
- d) Alliteration

Answer: b)

15. Which of the following words is an antonym for “ephemeral”?

- a) Permanent
- b) Fleeting
- c) Transient
- d) Momentary

Answer: a)

16. What literary device is employed when an inanimate object is given human-like qualities?

- a) Simile
- b) Personification
- c) Metaphor
- d) Hyperbole

Answer: b)

17. Choose the correct sentence that demonstrates proper subject-verb agreement:

- a) The team are playing well.
- b) The team is playing well.
- c) The team plays well.
- d) The team playing well.

Answer: b)

18. Identify the correctly punctuated sentence:

- a) She couldn't believe it – the surprise was overwhelming.
- b) She couldn't believe it, the surprise was overwhelming.
- c) She couldn't believe it; the surprise was overwhelming.
- d) She couldn't believe it the surprise was overwhelming.

Answer: c)

19. What does the idiom “hit the hay” mean?

- a) To dance
- b) To go to bed
- c) To play a musical instrument
- d) To cook a meal

Class 8th English Grammar Past Paper

Answer: b)

20. Do NOT expect other people to pick up your trash at school! And also, always make sure to use the separate bins we provide for recycling. Read and select the correct option.

- a) Students are presented with new rules for recycling.
- b) Students are told they should take their trash home with them at the end of each day.
- c) Students are reminded they are responsible for their own trash.

Answer: c)

21. Jane,

I thought you said you would meet me at 5. If you don't get here soon, we'll miss the beginning of the movie. Has anything happened?

Paul.

Read and select the correct option.

- a) Paul wishes to explain to Jane why he is late.
- b) Paul is trying to find out why Jane is not on time.
- c) Paul wishes to meet Jane later than planned.

Answer: b)

22. Choose the part grammatically incorrect from the sentence; Judge in him prevailed upon the father and he sentenced his son to death.

- a) Judge in him
- b) Prevailed upon the father
- c) And he sentenced his son to death
- d) No error

Answer: a)

23. Choose the part grammatically incorrect from the sentence; Nine-tenths of the pillar have rotted away.

- a) Nine-tenths
- b) Of the pillar
- c) Have rotted away
- d) No error

Answer: c)

24. The designer said to her, 'will you have the dress ready by tomorrow evening?'

- a) The designer asked her if she would have the dress ready by next evening.
- b) The designer asked her that she would have the dress ready by next evening.
- c) The designer asked her that if she will like to have the dress by next evening.
- d) The designer asked her that she will have the suit ready by next evening.

Answer: a)

25. They said, 'Let us come in'.

Class 8th English Grammar Past Paper

- a) They told that let them be allowed to come in.
- b) They requested that they might be allowed to come in.
- c) They said that if they are allowed to come in.
- d) They requested me to let them come in.

Answer: b)

26. Reshma said to Priya, 'Why are you sketching on the wall?'

- a) Reshma asked Priya why was she sketching on the wall.
- b) Reshma asked Priya why had she been sketching on the wall
- c) Reshma asked Priya that why is she sketching on the wall.
- d) Reshma asked Priya why she was sketching on the wall.

Answer: d)

27. 'Jacob fell as he'd have wished', the father said.

- a) The father said that Jacob has fallen as he would have wished.
- b) The father said that Jacob had fallen as he would have wished.
- c) The father said that Jacob had fallen as he had wished.
- d) The father said that Jacob had been fallen as he would have been wished.

Answer: b)

28. Arya said to Tara, 'David will leave for his mother's place tomorrow'.

- a) Arya told Tara that David will leave for his mother's place tomorrow.
- b) Arys told Tara that David will leave for his mother's place the next day.
- c) Arya told Tara that David would leave for his mother's place the next day.
- d) Arya informed Tara that David would be leaving for his mother's place the next day

Answer: c)

29. She said, 'Why didn't you send a friend request to me?'

- a) She asked me why had i not sent a friend request to her
- b) She enquired why I had not sent a friend request to her.
- c) She enquired why I did not send a friend request to her.
- d) She questioned why I had not sent a friend request to her.

Answer: b

30. The judge commanded them to call the accused in the court.

- a) The Judge said, 'Call the accused in the court'.
- b) The Judge ordered, 'Call the accused in the court'
- c) The Judge command, 'Call the accused in the court'
- d) The Judge said to them, 'Call the accused in the court'.

Answer: d)

31. Each of its atoms loses or gives off a certain amount of energy _____
substance is radiating energy.

- a) With a
- b) When is a
- c) A

Class 8th English Grammar Past Paper

d) If a

Answer: d)

32. When _____, they leave rocks and soil behind them on the lowlands or in the ocean.

- a) Are glaciers melted
- b) Melting glaciers
- c) Glaciers met
- d) Do glaciers melt

Answer: c)

33. Generally, the thicker a mammal's skin is the less hair _____.

- a) That has it
- b) That is has
- c) Has it
- d) It has

Answer: d)

34. Most teachers spend a great deal of time on their student's papers, and it is a great pity _____.

- a) That too little parents appreciate that fact
- b) That parents too little appreciate that fact
- c) That less parents appreciate that fact
- d) That too few parents appreciate the fact

Answer: d)

35. Phonograph records, tape recordings and computer have made _____ to store data conveniently and accurately.

- a) Easier
- b) Easier than
- c) It easier
- d) It is easier

Answer: b)

36. _____ was the Erie Canal an engineering triumph, it quickly proved a financial success as well.

- a) Not only
- b) Only
- c) It
- d) Neither

Answer: a)

37. _____ made the first united flag is widely believed.

- a) When Betsy Ross
- b) That Betsy Ross
- c) Whether Betsy Ross
- d) Betsy Ross

Class 8th English Grammar Past Paper

Answer: b)

38. Meets can be purchased not only fresh _____ canned and frozen.

- a) Also
- b) Not also
- c) But also
- d) But not also

Answer: c)

39. _____ steam locomotive to be used for regular passenger and freight service in the United States was built in New York City.

- a) The first
- b) As the first
- c) First was
- d) When it was the first

Answer: a)

40. Geologist's _____ forces that alter the surface and appearance of the earth.

- a) Analyzing
- b) Analyzable
- c) Analyzes
- d) Analyze

Answer: d)

41. The quince is an attractive shrub or small tree _____ closely related to the apple and pear tree.

- a) Is
- b) That is
- c) That it is
- d) Is that which

Answer: b)

42. Many gases, including the nitrogen and oxygen in air, _____ color or odor.

- a) Have no
- b) Which have no
- c) Not having
- d) They don't have

Answer: a)

43. The present-tense form of the verb 'read' and its past-tense which is pronounced as 'red' is an example of _____

- a) allophones
- b) homophones
- c) homographs
- d) homonyms

Answer: d)

Class 8th English Grammar Past Paper

44. Syllables in which the consonant functions as nucleus are called----

- a) syllabic consonants
- b) sibilants
- c) suffixes
- d) none of the above

Answer:a)

45. The final /l/ in the words 'bottle', 'cattle' and 'little' are examples of ----

- a) syllabic consonants
- b) sibilants
- c) suffixes
- d) none of the above

Answer:a)

46. _____are also called secondary phonemes

- a) suprasegmentals
- b) morphemes
- c) allomorphs
- d) allophones

Answer: a)

47. _____is the degree of force with which a sound of syllable is uttered.

- a) Stress
- b) pitch
- c) intonation
- d) juncture

Answer: a)

48. Choose the correct pair of correlative conjunctions in the sentence: "Either you come to the party, _____ you stay home."

- a) or
- b) neither...nor
- c) both...and
- d) not only...but also

Correct Answer: a)

49. Identify the correlative conjunctions in the sentence: "Not only did she finish her project, _____ she also submitted it on time."

- a) but also
- b) either...or
- c) both...and
- d) neither...nor

Correct Answer: a) but also

Class 8th English Grammar Past Paper

50. Complete the sentence with the appropriate correlative conjunctions: "Whether you pass the exam _____ fail, you should give your best effort."

- a) or
 - b) neither...nor
 - c) both...and
 - d) not only...but also
- Correct Answer: a) or

51. Choose the correct pair of correlative conjunctions: "I will neither buy a new car _____ a new house this year."

- a) or
 - b) either...or
 - c) both...and
 - d) not only...but also
- Correct Answer: b) either...or

52. Identify the correlative conjunctions in the sentence: "Both the teacher _____ the students were surprised by the test results."

- a) but also
 - b) either...or
 - c) both...and
 - d) neither...nor
- Correct Answer: c)

53. Complete the sentence with the appropriate correlative conjunctions: "_____ I study hard _____ I won't pass the exam."

- a) Either...or
 - b) Neither...nor
 - c) Both...and
 - d) Not only...but also
- Correct Answer: a)

54. Choose the correct pair of correlative conjunctions: "She not only plays the piano _____ also the violin."

- a) or
 - b) neither...nor
 - c) both...and
 - d) not only...but also
- Correct Answer: d) not only...but also

55. Identify the correlative conjunctions in the sentence: "Neither the cat _____ the dog wanted to go outside."

- a) but also
- b) either...or
- c) both...and
- d) neither...nor

Class 8th English Grammar Past Paper

Correct Answer: d) neither...nor

56. Complete the sentence with the appropriate correlative conjunctions: "_____ the rain _____ the wind could stop the determined hiker."

- a) Either...or
- b) Neither...nor
- c) Both...and
- d) Not only...but also

Correct Answer: b)

57. Choose the correct pair of correlative conjunctions in the sentence: "_____ he passes the interview, _____ he will receive a job offer."

- a) or
- b) neither...nor
- c) both...and
- d) not only...but also

Correct Answer: d)

58. Identify the sentence with the correct parallel structure:

- a) She enjoys reading, writing, and to paint.
- b) She enjoys reading, writing, and painting.
- c) She enjoys reading, to write, and painting.
- d) She enjoys reading, to write, and to paint.

Correct Answer: b)

59. Choose the correct sentence with proper tense consistency:

- a) Yesterday, she will go to the market.
- b) Yesterday, she went to the market.
- c) Yesterday, she goes to the market.
- d) Yesterday, she is going to the market.

Correct Answer: b)

60. Identify the sentence with the correct use of the subjunctive mood:

- a) If I was you, I would go.
- b) If I were you, I would go.
- c) If I am you, I would go.
- d) If I would be you, I would go.

Correct Answer: b)

61. Choose the sentence with the correct use of relative pronouns:

- a) The book who is on the shelf is interesting.
- b) The book which is on the shelf is interesting.
- c) The book whose on the shelf is interesting.
- d) The book whom is on the shelf is interesting.

Correct Answer: b)

Class 8th English Grammar Past Paper

62. Identify the sentence with the correct use of the infinitive:

- a) He made me to do my homework.
- b) He made me do my homework.
- c) He made to me do my homework.
- d) He made me doing my homework.

Correct Answer: b)

63. Choose the correct sentence with the proper use of conditionals:

- a) If he would have known, he will come.
- b) If he knew, he will come.
- c) If he knows, he will come.
- d) If he had known, he would have come.

Correct Answer: d)

64. Identify the sentence with the correct use of the causative verb:

- a) I had my hair cut at the salon.
- b) I had cut my hair at the salon.
- c) I cut my hair at the salon.
- d) I was cutting my hair at the salon.

Correct Answer: a)

65. Choose the sentence with the correct use of modals:

- a) She can sings beautifully.
- b) She can sing beautifully.
- c) She can be singing beautifully.
- d) She can beautifully sing.

Correct Answer: b)

66. Identify the sentence with the correct use of reported speech:

- a) She said, "I am going to the party."
- b) She said, "I go to the party."
- c) She says, "I am going to the party."
- d) She says, "I was going to the party."

Correct Answer: c)

67. Choose the sentence with the correct use of gerund and infinitive:

- a) I enjoy to swim in the ocean.
- b) I enjoy swimming in the ocean.
- c) I enjoy swim in the ocean.
- d) I enjoy swam in the ocean.

Correct Answer: b)

68. The designer said to her, 'will you have the dress ready by tomorrow evening?'

- a) The designer asked her if she would have the dress ready by next evening.
- B The designer asked her that she would have the dress ready by next evening.
- 69The designer asked her that if she will like to have the dress by next evening.

Class 8th English Grammar Past Paper

69. The designer asked her that she will have the suit ready by next evening.

Answer: a)

70. They said, 'Let us come in'.

- e) They told that let them be allowed to come in.
- f) They requested that they might be allowed to come in.
- g) They said that if they are allowed to come in.
- h) They requested me to let them come in.

Answer: b)

71. Reshma said to Priya, 'Why are you sketching on the wall?'

- e) Reshma asked Priya why was she sketching on the wall.
- f) Reshma asked Priya why had she been sketching on the wall
- g) Reshma asked Priya that why is she sketching on the wall.
- h) Reshma asked Priya why she was sketching on the wall.

Answer: d)

72. 'Jacob fell as he'd have wished', the father said.

- e) The father said that Jacob has fallen as he would have wished.
- f) The father said that Jacob had fallen as he would have wished.
- g) The father said that Jacob had fallen as he had wished.
- h) The father said that Jacob had been fallen as he would have been wished.

Answer: b)

73. Arya said to Tara, 'David will leave for his mother's place tomorrow'.

- e) Arya told Tara that David will leave for his mother's place tomorrow.
- f) Arys told Tara that David will leave for his mother's place the next day.
- g) Arya told Tara that David would leave for his mother's place the next day.
- h) Arya informed Tara that David would be leaving for his mother's place the next day

Answer: c)

74. The convict is trying to _____ a story.

- a) Make up
- b) Clean up
- c) Showed up

Answer: a)

75. Mark Antony's speech _____ the Roman people.

- a) Worked up
- b) Showed up
- c) Made up

Answer: a)

76. She said, 'Why didn't you send a friend request to me?'

Class 8th English Grammar Past Paper

- e) She asked me why had i not sent a friend request to her
- f) She enquired why I had not sent a friend request to her.
- g) She enquired why I did not send a friend request to her.
- h) She questioned why I had not sent a friend request to her.

Answer: b

77. The judge commanded them to call the accused in the court.
- e) The Judge said, 'Call the accused in the court'.
 - f) The Judge ordered, 'Call the accused in the court'
 - g) The Judge command, 'Call the accused in the court'
 - h) The Judge said to them, 'Call the accused in the court'.

Answer: d)

78. The instructor asked Ronny if he was ready for the race.
- a) 'Ronny, are you ready for the race?', the instructor asked.
 - b) 'Are you ready for the race Ronny?', the instructor asked.
 - c) 'Ronny, ready for race?' the instructor said.
 - d) 'Ronny, are you ready for the race?', said the instructor.

Answer: a)

79. Manager said to Shekher, 'Why didn't you attend the meeting yesterday?'
- a) The manager enquired shekhar why did not he attend the meeting the day before.
 - b) The manager asked Shekhar why he did not attend the meeting the previous day.
 - c) The manager asked Shekhar why he had not attended the meeting the day before.
 - d) The manager enquired Shekhar that why didn't he attended the meeting yesterday.

Answer: c)

80. I asked my sister if she had returned the mobile phone to her friend.
- a) I said to my sister, 'have you returned the mobile phone to your friend?'
 - b) I said to my sister, 'did you return the mobile phone to my friend?'
 - c) I said to my sister, 'have you returned the mobile phone to my friend?'
 - d) I asked my sister, 'have you return the mobile phone to your friend?'

Answer: a)

81. _____ the room before you leave to play.
- a) Clean up
 - b) Showed up
 - c) Buck up

Answer: a)

82. The convention was _____ due to the pandemic.
- a) called off
 - b) cancelled off
 - c) both of them

Answer: a)

Class 8th English Grammar Past Paper

83. You can't _____ such a horrible thing.

- a) get away with
- b) call away with
- c) both of them

Answer: a)

84. The parents couldn't _____ with the naughty kid.

- a) put up
- b) clean up
- c) make up

Answer: a)

85. "She's going on holiday for a fortnight" means that she will be away for _____.

- a) four nights
- b) four weeks
- c) two weeks

Answer: c)

86. Choose the correct answer to complete the dialogue:

"I've invited Sarah to my party on Friday."

"I doubt if she..... She's got an important exam on Saturday morning."

- a) is coming
- b) will come
- c) came

Answer: b)

87. What birds are fed by the Beefeaters at the Tower of London?

- a) pigeons
- b) crows
- c) ravens
- d) seagulls

Answer: c)

88. She ought toa taxi home last night instead of walking alone.

- a) take
- b) have taken
- c) took

Answer: b)

89. Some rooms don't have curtains at the windows, they have

- a) blinds
- b) carpets
- c) gates

Answer: a)

Class 8th English Grammar Past Paper

90. “To be, or not to be? That is the question-“is a famous quote in William Shakespeare’s play

- a) Othello
- b) Hamlet
- c) Macbeth

Answer: b)

91. Robin Hood was a heroic outlaw in English folklore who became known for “robbing from the rich and giving to the poor”, assisted by a group of fellow outlaws known as his

- a) Merry Men
- b) Wise Men
- c) Robbers

Answer: a)

92. After decades of neglect, government schools are finally making a fresh start with much-needed improvements to facilities and teaching methods.

- a) Improvising the old thought
- b) Grabbing the eyeballs
- c) Starting something in a new and different way
- d) Giving a jumpstart

Answer: c)

93. They thought that Ria would simply give up if her complaint had to go to the court. Now, she will realize that they have caught a Tartar!

- e) Dealing with an expert
- f) Forced to leave something
- g) Dealing with a troublesome person
- h) Wasting time

Answer: c)

94. Timothy finally _____ at the wedding.

- a) showed up
- b) buck up
- c) give up

Answer: a)

95. Never _____ on your dreams.

- a) showed up
- b) buck up
- c) give up

Answer: c)

Class 8th English Grammar Past Paper

96. _____ the room before you leave to play.

- d) Clean up
- e) Showed up
- f) Buck up

Answer: a)

97. The convict is trying to _____ a story.

- a) Make up
- b) Clean up
- c) Showed up

Answer: a)

98. Mark Antony's speech _____ the Roman people.

- a) Worked up
- b) Showed up
- c) Made up

Answer: a)

99. The convention was _____ due to the pandemic.

- a) called off
- b) cancelled off
- c) both of them

Answer: a)

100. Timothy finally _____ at the wedding.

- a) showed up
- b) buck up
- c) give up

Answer: a)

Class 9th English Grammar Past Paper

1. The doctor had examined him.
- a) He was examined by the doctor.
 - b) He has been examined by the doctor.
 - c) He had been examined by the doctor.
 - d) None of these

Answer: c)

2. She does not like tea.
- a) Tea is not liked by her.
 - b) Tea have not liked by her.
 - c) Tea was not liked by her.
 - d) Tea did not liked by her.

Answer: a)

3. Which sentence is in the passive voice?
- a) The chef cooked a delicious meal.
 - b) A delicious meal was cooked by the chef.
 - c) Cooking a delicious meal, the chef was skilled.
 - d) The chef is cooking a delicious meal.

Answer: b)

4. Identify the active voice sentence:
- a) The ancient manuscript was carefully restored by the librarian.
 - b) Carefully restored by the librarian was the ancient manuscript.
 - c) The librarian carefully restored the ancient manuscript.
 - d) The ancient manuscript has been carefully restored.

Answer: c)

5. Choose the correct passive form:
- a) They have already chosen the leader.
 - b) The leader has already been chosen by them.
 - c) Already the leader has been chosen by them.
 - d) They already choosing the leader.

Answer: b)

6. In which sentence is the passive voice used?
- a) The storm destroyed the entire village.
 - b) The entire village was destroyed by the storm.
 - c) The village suffered destruction from the storm.
 - d) Destruction of the entire village happened in the storm.

Answer: b)

7. Identify the active voice sentence:
- a) The novel was written by the famous author.
 - b) By the famous author, the novel was written.
 - c) Writing the novel was done by the famous author.

Class 9th English Grammar Past Paper

d) The famous author wrote the novel.

Answer: d)

8. Select the correct passive voice:

- a) Someone has stolen my wallet.
- b) My wallet has been stolen by someone.
- c) My wallet has stolen someone.
- d) Someone stealing my wallet.

Answer: b)

9. Which sentence is in the active voice?

- a) The new building is being constructed by the workers.
- b) Construction of the new building is underway by the workers.
- c) Workers are constructing the new building.
- d) The new building has been constructed by the workers.

Answer: c)

10. Choose the correct passive form:

- a) The company will launch a new product next month.
- b) A new product will be launched by the company next month.
- c) The launching of a new product will happen next month.
- d) Next month, a new product is launching by the company.

Answer: b)

11. Identify the active voice sentence:

- a) The ancient ruins were explored by the archaeologists.
- b) Explored by the archaeologists were the ancient ruins.
- c) The archaeologists explored the ancient ruins.
- d) Exploration of the ancient ruins was conducted by the archaeologists.

Answer: c)

12. Which sentence is in the passive voice?

- a) The detective solved the mysterious case.
- b) The mysterious case was solved by the detective.
- c) Solving the mysterious case, the detective was skilled.
- d) The detective is solving a mysterious case.

Answer: b)

13. Choose the correct passive voice:

- a) People speak Spanish in many countries.
- b) Spanish is spoken by people in many countries.
- c) Speaking Spanish is done by people in many countries.
- d) In many countries, people speak Spanish.

Answer: b)

Class 9th English Grammar Past Paper

14. Identify the active voice sentence:

- a) The masterpiece was painted by the famous artist.
- b) Painted by the famous artist was the masterpiece.
- c) The famous artist painted the masterpiece.
- d) Painting the masterpiece was the famous artist.

Answer: c) The famous artist painted the masterpiece.

15. Which sentence is in the passive voice?

- a) The engineer designed the innovative bridge.
- b) The innovative bridge was designed by the engineer.
- c) Designing the innovative bridge, the engineer showcased skill.
- d) The engineer designs an innovative bridge.

Answer: b)

16. Choose the correct passive form:

- a) The team won the championship trophy.
- b) The championship trophy was won by the team.
- c) Winning the championship trophy, the team celebrated.
- d) The team is winning the championship trophy.

Answer: b)

17. Identify the active voice sentence:

- a) The virus was eradicated by the scientists.
- b) Eradicated by the scientists was the virus.
- c) The scientists eradicated the virus.
- d) Eradicating the virus was done by the scientists.

Answer: c)

18. Which sentence is in the passive voice?

- a) The teacher teaches the students every day.
- b) The students are taught by the teacher every day.
- c) Teaching the students every day is the teacher's job.
- d) Every day, the teacher is teaching the students.

Answer: b)

19. Choose the correct passive voice:

- a) The company developed a new software application.
- b) A new software application was developed by the company.
- c) Development of a new software application happened by the company.
- d) A new software application is developed by the company.

Answer: b)

20. Identify the active voice sentence:

- a) The play was performed by the talented actors.
- b) Performed by the talented actors was the play.
- c) The talented actors performed the play.

Class 9th English Grammar Past Paper

d) Performing the play was done by the talented actors.

Answer: c)

21. Which sentence is in the passive voice?

- a) The chef will prepare a special dish for the guests.
- b) A special dish will be prepared by the chef for the guests.
- c) Preparing a special dish for the guests, the chef is skilled.
- d) The chef prepares a special dish for the guests.

Answer: b)

22. Choose the correct passive form:

- a) The athletes set new records in the competition.
- b) New records were set by the athletes in the competition.
- c) Setting new records in the competition, the athletes celebrated.
- d) The athletes are setting new records in the competition.

Answer: b).

23. Identify the adverb in the sentence: "The train departed early in the morning."

- a) Train
- b) Departed
- c) Early
- d) Morning

Answer: c)

24. Which sentence is grammatically correct?

- a) He don't like pizza.
- b) She doesn't likes pizza.
- c) They doesn't like pizza.
- d) I don't like pizza.

Answer: d)

25. What is the synonym for "ubiquitous"?

- a) Rare
- b) Abundant
- c) Unique
- d) Scarce

Answer: b)

26. What is the main idea of the passage?

The benefits of regular exercise include improved cardiovascular health, enhanced mood, and increased energy levels.

- e) The importance of cardiovascular health.
- f) The benefits of regular exercise.
- g) Ways to enhance mood.
- h) The drawbacks of a sedentary lifestyle.

Answer: b)

Class 9th English Grammar Past Paper

27. In which sentence is the punctuation used correctly?

- i) She loves hiking, camping and fishing.
- j) He said "I will be there by 3 pm".
- k) My favorite colors are blue, green and yellow.
- l) The dog barked loudly but, ran away.

Answer: c)

28. What literary device is used in the phrase "time flies"?

- m) Simile
- n) Metaphor
- o) Personification
- p) Alliteration

Answer: b)

29. Which of the following words is an antonym for "ephemeral"?

- a) Permanent
- b) Fleeting
- c) Transient
- d) Momentary

Answer: a)

30. Word Order:

- a) The cat chased the dog.
- b) Chased the cat the dog.
- c) Chased the dog the cat.
- d) The chased cat the dog.

Answer: a)

31. Sentence Structure:

- a) The students eagerly listened to the lecture.
- b) To the lecture, the students eagerly listened.
- c) Eagerly listened to the lecture, the students.
- d) Listened eagerly students the to lecture.

Answer: a)

32. Verb Tenses:

- a) She will have completed the assignment by tomorrow.
- b) She completed the assignment by tomorrow.
- c) She completes the assignment by tomorrow.
- d) She completes the assignment tomorrow.

Answer: a)

33. Punctuation:

- a) The rain poured heavily the streets were flooded.

Class 9th English Grammar Past Paper

- b) The rain poured heavily; the streets were flooded.
- c) The rain poured heavily, the streets were flooded.
- d) The rain poured heavily the streets, were flooded.

Answer: b)

34. Capitalization:

- a) The president of the united states delivered a speech.
- b) The President of the United States delivered a speech.
- c) The President of the united states delivered a speech.
- d) The president of the United States delivered a speech.

Answer: b)

35. Modifiers:

- a) Quickly running, the athlete won the race.
- b) The athlete won the race running quickly.
- c) Running quickly, the athlete won the race.
- d) The athlete won quickly running the race.

Answer: c)

36. Prepositions and Conjunctions:

- a) She is allergic to peanuts but not tree nuts.
- b) She is allergic to peanuts and not tree nuts.
- c) She is allergic to peanuts nor tree nuts.
- d) She is allergic peanuts to but not tree nuts.

Answer: a)

37. Word Order:

- a) Across the bridge, the children ran happily.
- b) The children happily ran across the bridge.
- c) The bridge across ran happily the children.
- d) Happily the children ran across the bridge.

Answer: b)

38. Sentence Structure:

- a) A mysterious package arrived at the doorstep.
- b) At the doorstep arrived a mysterious package.
- c) A package mysterious at the doorstep arrived.
- d) Arrived at the doorstep a mysterious package.

Answer: a)

39. Verb Tenses:

- a) They have visited the museum last week.
- b) They visited the museum last week.
- c) They were visiting the museum last week.
- d) They will visit the museum last week.

Answer: b)

Class 9th English Grammar Past Paper

40. Punctuation:

- a) The storm was approaching however, they were prepared.
- b) The storm was approaching however they were prepared.
- c) The storm was approaching, however they were prepared.
- d) The storm was approaching however; they were prepared.

Answer: c)

41. Capitalization:

- a) My aunt and uncle lives in the Midwest.
- b) My Aunt and Uncle live in the midwest.
- c) My aunt and uncle live in the Midwest.
- d) My Aunt and uncle live in the Midwest.

Answer: c)

42. Modifiers:

- a) The old man found a wallet walking down the street.
- b) The old man walking down the street found a wallet.
- c) Walking down the street, a wallet was found by the old man.
- d) A wallet was found walking down the street by the old man.

Answer: b)

43. Prepositions and Conjunctions:

- a) She is interested in both science and art.
- b) She is interested in both science nor art.
- c) She is interested both in science and art.
- d) Both she is interested in science and art.

Answer: a)

44. Word Order:

- a) The movie was watched by the children eagerly.
- b) Eagerly was watched the movie by the children.
- c) The children watched the movie eagerly.
- d) Watched the movie eagerly the children.

Answer: c)

45. Sentence Structure:

- a) An unexpected guest arrived at the party.
- b) At the party arrived an unexpected guest.
- c) An unexpected guest at the party arrived.
- d) Arrived an unexpected guest at the party.

Answer: a)

46. Do NOT expect other people to pick up your trash at school! And also, always make sure to use the separate bins we provide for recycling. Read and select the correct option.

Class 9th English Grammar Past Paper

- q) Students are presented with new rules for recycling.
- r) Students are told they should take their trash home with them at the end of each day.
- s) Students are reminded they are responsible for their own trash.

Answer: c)

47. Jane,

I thought you said you would meet me at 5. If you don't get here soon, we'll miss the beginning of the movie. Has anything happened?

Paul.

Read and select the correct option.

- a) Paul wishes to explain to Jane why he is late.
- b) Paul is trying to find out why Jane is not on time.
- c) Paul wishes to meet Jane later than planned.

Answer: b)

48. Choose the part grammatically incorrect from the sentence; Judge in him prevailed upon the father and he sentenced his son to death.

- t) Judge in him
- u) Prevailed upon the father
- v) And he sentenced his son to death
- w) No error

Answer: a)

49. Choose the part grammatically incorrect from the sentence; Nine-tenths of the pillar have rotted away.

- x) Nine-tenths
- y) Of the pillar
- z) Have rotted away
- aa) No error

Answer: c)

50. The designer said to her, 'will you have the dress ready by tomorrow evening?'

- a) The designer asked her if she would have the dress ready by next evening.
- b) The designer asked her that she would have the dress ready by next evening.
- c) The designer asked her that if she will like to have the dress by next evening.
- d) The designer asked her that she will have the suit ready by next evening.

Answer: a)

51. They said, 'Let us come in'.

- a) They told that let them be allowed to come in.
- b) They requested that they might be allowed to come in.
- c) They said that if they are allowed to come in.
- d) They requested me to let them come in.

Answer: b)

Class 9th English Grammar Past Paper

52. Reshma said to Priya, 'Why are you sketching on the wall?'

- a) Reshma asked Priya why was she sketching on the wall.
- b) Reshma asked Priya why had she been sketching on the wall
- c) Reshma asked Priya that why is she sketching on the wall.
- d) Reshma asked Priya why she was sketching on the wall.

Answer: d)

53. 'Jacob fell as he'd have wished', the father said.

- a) The father said that Jacob has fallen as he would have wished.
- b) The father said that Jacob had fallen as he would have wished.
- c) The father said that Jacob had fallen as he had wished.
- d) The father said that Jacob had been fallen as he would have been wished.

Answer: b)

54. Arya said to Tara, 'David will leave for his mother's place tomorrow'.

- a) Arya told Tara that David will leave for his mother's place tomorrow.
- b) Arys told Tara that David will leave for his mother's place the next day.
- c) Arya told Tara that David would leave for his mother's place the next day.
- d) Arya informed Tara that David would be leaving for his mother's place the next day

Answer: c)

55. She said, 'Why didn't you send a friend request to me?'

- a) She asked me why had i not sent a friend request to her
- b) She enquired why I had not sent a friend request to her.
- c) She enquired why I did not send a friend request to her.
- d) She questioned why I had not sent a friend request to her.

Answer: b

56. The judge commanded them to call the accused in the court.

- a) The Judge said, 'Call the accused in the court'.
- b) The Judge ordered, 'Call the accused in the court'
- c) The Judge command, 'Call the accused in the court'
- d) The Judge said to them, 'Call the accused in the court'.

Answer: d)

57. Each of its atoms loses or gives off a certain amount of energy _____
substance is radiating energy.

- a) With a
- b) When is a
- c) A
- d) If a

Answer: d)

58. When _____, they leave rocks and soil behind them on the lowlands or in the ocean.

- a) Are glaciers melted

Class 9th English Grammar Past Paper

- b) Melting glaciers
- c) Glaciers met
- d) Do glaciers melt

Answer: c)

59. Generally, the thicker a mammal's skin is the less hair _____.

- a) That has it
- b) That is has
- c) Has it
- d) It has

Answer: d)

60. Most teachers spend a great deal of time on their student's papers, and it is a great pity _____.

- a) That too little parents appreciate that fact
- b) That parents too little appreciate that fact
- c) That less parents appreciate that fact
- d) That too few parents appreciate the fact

Answer: d)

61. Phonograph records, tape recordings and computer have made _____ to store data conveniently and accurately.

- a) Easier
- b) Easier than
- c) It easier
- d) It is easier

Answer: b)

62. _____ was the Erie Canal an engineering triumph, it quickly proved a financial success as well.

- e) Not only
- f) Only
- g) It
- h) Neither

Answer: a)

63. Tenses:

- a) She had visited the museum last week.
- b) She was visiting the museum next week.
- c) She visit the museum every week.
- d) She visit the museum next week.

Answer: a)

64. Modals:

- a) You can finish the assignment tomorrow.
- b) You could finish the assignment tomorrow.

Class 9th English Grammar Past Paper

- c) You finished the assignment tomorrow.
- d) You can finishing the assignment tomorrow.

Answer: a)

65. Use of Passive Voice:

- a) The chef cooked a delicious meal.
- b) A delicious meal was cooked by the chef.
- c) Cooking a delicious meal, the chef was skilled.
- d) The chef is cooking a delicious meal.

Answer: b)

66. Subject-Verb Concord:

- a) The team are playing well.
- b) The team plays well.
- c) The team is playing well.
- d) The team play well.

Answer: c)

67. Reporting Commands and Requests:

- a) She said, "Close the door."
- b) She said to close the door.
- c) She said, "Please close the door."
- d) She said, "Closing the door, please."

Answer: c)

68. Statements:

- a) The sun rises in the east.
- b) Does the sun rise in the east?
- c) Rising in the east is the sun.
- d) In the east, the sun rises?

Answer: a)

69. Questions:

- a) Did they finished the project on time?
- b) Do they finish the project on time?
- c) They finish the project on time?
- d) Did they finish the project on time?

Answer: d)

70. Clauses:

- a) Although it was raining, she went for a walk.
- b) It was raining when she went for a walk.
- c) She went for a walk, it was raining.
- d) When it was raining, she went for a walk.

Answer: a)

Class 9th English Grammar Past Paper

71. Determiners:

- a) Few students passed the exam.
- b) Much students passed the exam.
- c) Many students passed the exam.
- d) Several students passed the exam.

Answer: c)

72. Preposition:

- a) He is allergic from peanuts.
- b) He is allergic to peanuts.
- c) He is allergic with peanuts.
- d) He is allergic at peanuts.

Answer: b)

73. Tenses:

- a) They are swimming in the pool now.
- b) They swam in the pool yesterday.
- c) They will swim in the pool tomorrow.
- d) They swim in the pool every day.

Answer: a)

74. Modals:

- a) She must finish the assignment by tomorrow.
- b) She finished the assignment by tomorrow.
- c) She will finish the assignment by tomorrow.
- d) She finishing the assignment by tomorrow.

Answer: c)

75. Use of Passive Voice:

- a) The novel was writing by the famous author.
- b) The famous author was writing the novel.
- c) Writing the novel, the famous author was skilled.
- d) The famous author wrote the novel.

Answer: b)

76. Subject-Verb Concord:

- a) Each of the students has completed their homework.
- b) Each of the students have completed their homework.
- c) Each of the students has completed his or her homework.
- d) Each of the students have completed his homework.

Answer: c)

77. Reporting Commands and Requests:

- a) He said, "Do not disturb."
- b) He said, "Disturb not."

Class 9th English Grammar Past Paper

- c) He said, "Don't disturb."
- d) He said, "Disturb please."

Answer: c)

78. Statements:

- a) The moon revolves around the earth.
- b) Does the moon revolve around the earth?
- c) Revolving around the earth is the moon.
- d) Around the earth, does the moon revolve?

Answer: a)

79. "Hit the hay" typically means:

- a) Planting crops
- b) Going to bed
- c) Exercising
- d) Building a fence

Correct Answer: b)

80. If something is described as a "piece of cake," it means that it is:

- a) Difficult
- b) Complicated
- c) Easy
- d) Delicious

Correct Answer: c)

81. The expression "Break a leg" is commonly used to wish someone:

- a) Good luck
- b) Quick recovery from illness
- c) Safe travels
- d) Happy birthday

Correct Answer: a)

82. When someone is "under the weather," it means they are:

- a) Excited
- b) Angry
- c) Sad
- d) Ill or sick

Correct Answer: d)

83. If something "costs an arm and a leg," it is:

- a) Very cheap
- b) Affordable
- c) Moderately priced
- d) Very expensive

Correct Answer: d)

Class 9th English Grammar Past Paper

84. "Bite the bullet" means to:

- a) Chew on a metal object
- b) Face a difficult situation with courage
- c) Avoid challenges
- d) Take a break from work

Correct Answer: b)

85. When someone suggests to "jump on the bandwagon," they are encouraging you to:

- a) Join a traveling musical group
- b) Adopt a popular trend or activity
- c) Criticize others
- d) Start a new project

Correct Answer: b)

86. "The ball is in your court" implies that:

- a) You are playing a game
- b) It's time for you to make a decision or take action
- c) You have lost control
- d) You should pass the responsibility to someone else

Correct Answer: b)

87. To "cut to the chase" means to:

- a) Trim a piece of fabric
- b) Skip the introduction and get to the main point
- c) Start a race
- d) Solve a mystery

Correct Answer: b)

88. If someone mentions "the whole nine yards," they are referring to:

- a) A long distance
- b) A complete or exhaustive effort
- c) Nine specific items
- d) A short duration

Correct Answer: b)

89. Some rooms don't have curtains at the windows, they have

- a) blinds
- b) carpets
- c) gates

Answer: a)

90. "To be, or not to be? That is the question-" is a famous quote in William Shakespeare's play

- a) Othello
- b) Hamlet

Class 9th English Grammar Past Paper

c) Macbeth

Answer: b)

91. Robin Hood was a heroic outlaw in English folklore who became known for “robbing from the rich and giving to the poor”, assisted by a group of fellow outlaws known as his

a) Merry Men

b) Wise Men

c) Robbers

Answer: a)

92. After decades of neglect, government schools are finally making a fresh start with much-needed improvements to facilities and teaching methods.

a) Improvising the old thought

b) Grabbing the eyeballs

c) Starting something in a new and different way

d) Giving a jumpstart

Answer: c)

93. They thought that Ria would simply give up if her complaint had to go to the court. Now, they will realize that they have caught a Tartar!

e) Dealing with an expert

f) Forced to leave something

g) Dealing with a troublesome person

h) Wasting time

Answer: c)

94. Timothy finally _____ at the wedding.

a) showed up

b) buck up

c) give up

Answer: a)

95. Never _____ on your dreams.

a) showed up

b) buck up

c) give up

Answer: c)

96. _____ the room before you leave to play.

d) Clean up

e) Showed up

f) Buck up

Answer: a)

Class 9th English Grammar Past Paper

97. The convict is trying to _____ a story.

- a) Make up
- b) Clean up
- c) Showed up

Answer: a)

98. Mark Antony's speech _____ the Roman people.

- a) Worked up
- b) Showed up
- c) Made up

Answer: a)

99. The convention was _____ due to the pandemic.

- a) called off
- b) cancelled off
- c) both of them

Answer: a)

100. Timothy finally _____ at the wedding.

- a) showed up
- b) buck up
- c) give up

Answer: a)

Class 10th English Grammar Past Paper

1. Choose the correct collocation:

The politician gave a _____ speech, captivating the audience with his eloquence.

- a) Vivid
- b) Tremendous
- c) Resilient
- d) Colossal

Correct Answer: a)

2. Identify the appropriate collocation:

The artist's paintings were characterized by a _____ blend of colors, creating a visually stunning effect.

- a) Haphazard
- b) Meticulous
- c) Callous
- d) Pernicious

Correct Answer: b)

3. Select the correct collocation:

The scientist conducted a _____ experiment to validate the groundbreaking hypothesis.

- a) Flagrant
- b) Pioneering
- c) Ineffable
- d) Languid

Correct Answer: b)

4. Choose the appropriate collocation:

Her _____ decision to resign shocked the entire company.

- a) Audacious
- b) Cacophonous
- c) Sagacious
- d) Salubrious

Correct Answer: a)

5. Identify the correct collocation:

The novel featured a _____ plot, full of unexpected twists and turns.

- a) Banal
- b) Intricate
- c) Lethargic
- d) Serene

Correct Answer: b)

6. Select the proper collocation:

The athlete displayed _____ strength during the intense training sessions.

- a) Inherent
- b) Conspicuous
- c) Inefficacious

Class 10th English Grammar Past Paper

d) Superfluous

Correct Answer: a)

7. Choose the correct collocation:

The students showed _____ enthusiasm for the challenging mathematics competition.

a) Ingrained

b) Lackadaisical

c) Ambivalent

d) Zealous

Correct Answer: d)

8. Identify the appropriate collocation:

The chef's _____ approach to culinary arts resulted in innovative and delicious dishes.

a) Avant-garde

b) Stalwart

c) Mellifluous

d) Capricious

Correct Answer: a)

9. Select the correct collocation:

The storm caused _____ damage to the coastal town, leaving residents in shock.

a) Cataclysmic

b) Serendipitous

c) Facetious

d) Nebulous

Correct Answer: a)

10. Choose the appropriate collocation:

The professor delivered a lecture with _____ precision, leaving the students deeply impressed.

a) Concise

b) Unruly

c) Juxtaposed

d) Cacophonous

Correct Answer: a)

11. The doctor had examined him.

a) He was examined by the doctor.

b) He has been examined by the doctor.

c) He had been examined by the doctor.

d) None of these

Answer: c)

12. She does not like tea.

a) Tea is not liked by her.

b) Tea have not liked by her.

Class 10th English Grammar Past Paper

- c) Tea was not liked by her.
- d) Tea did not liked by her.

Answer: a)

13. Which sentence is in the passive voice?

- a) The chef cooked a delicious meal.
- b) A delicious meal was cooked by the chef.
- c) Cooking a delicious meal, the chef was skilled.
- d) The chef is cooking a delicious meal.

Answer: b)

14. Identify the active voice sentence:

- a) The ancient manuscript was carefully restored by the librarian.
- b) Carefully restored by the librarian was the ancient manuscript.
- c) The librarian carefully restored the ancient manuscript.
- d) The ancient manuscript has been carefully restored.

Answer: c)

15. Choose the correct passive form:

- a) They have already chosen the leader.
- b) The leader has already been chosen by them.
- c) Already the leader has been chosen by them.
- d) They already choosing the leader.

Answer: b)

16. In which sentence is the passive voice used?

- a) The storm destroyed the entire village.
- b) The entire village was destroyed by the storm.
- c) The village suffered destruction from the storm.
- d) Destruction of the entire village happened in the storm.

Answer: b)

17. Identify the active voice sentence:

- e) The novel was written by the famous author.
- f) By the famous author, the novel was written.
- g) Writing the novel was done by the famous author.
- h) The famous author wrote the novel.

Answer: d)

18. Select the correct passive voice:

- i) Someone has stolen my wallet.
- j) My wallet has been stolen by someone.
- k) My wallet has stolen someone.
- l) Someone stealing my wallet.

Answer: b)

Class 10th English Grammar Past Paper

19. Which sentence is in the active voice?

- m) The new building is being constructed by the workers.
- n) Construction of the new building is underway by the workers.
- o) Workers are constructing the new building.
- p) The new building has been constructed by the workers.

Answer: c)

20. Choose the correct passive form:

- a) The company will launch a new product next month.
- b) A new product will be launched by the company next month.
- c) The launching of a new product will happen next month.
- d) Next month, a new product is launching by the company.

Answer: b)

21. Identify the active voice sentence:

- a) The ancient ruins were explored by the archaeologists.
- b) Explored by the archaeologists were the ancient ruins.
- c) The archaeologists explored the ancient ruins.
- d) Exploration of the ancient ruins was conducted by the archaeologists.

Answer: c)

22. Which sentence is in the passive voice?

- a) The detective solved the mysterious case.
- b) The mysterious case was solved by the detective.
- c) Solving the mysterious case, the detective was skilled.
- d) The detective is solving a mysterious case.

Answer: b)

23. Choose the correct passive voice:

- a) People speak Spanish in many countries.
- b) Spanish is spoken by people in many countries.
- c) Speaking Spanish is done by people in many countries.
- d) In many countries, people speak Spanish.

Answer: b)

24. Identify the active voice sentence:

- a) The masterpiece was painted by the famous artist.
- b) Painted by the famous artist was the masterpiece.
- c) The famous artist painted the masterpiece.
- d) Painting the masterpiece was the famous artist.

Answer: c) The famous artist painted the masterpiece.

25. Which sentence is in the passive voice?

- a) The engineer designed the innovative bridge.
- b) The innovative bridge was designed by the engineer.

Class 10th English Grammar Past Paper

- c) Designing the innovative bridge, the engineer showcased skill.
- d) The engineer designs an innovative bridge.

Answer: b)

26. Choose the correct passive form:

- a) The team won the championship trophy.
- b) The championship trophy was won by the team.
- c) Winning the championship trophy, the team celebrated.
- d) The team is winning the championship trophy.

Answer: b)

27. Identify the active voice sentence:

- a) The virus was eradicated by the scientists.
- b) Eradicated by the scientists was the virus.
- c) The scientists eradicated the virus.
- d) Eradicating the virus was done by the scientists.

Answer: c)

28. Select the correct collocation:

The artist's brushstrokes conveyed a sense of _____ beauty in the portrait.

- a) Enigmatic
- b) Quaint
- c) Effervescent
- d) Augmented

Correct Answer: c)

29. Choose the appropriate collocation:

The CEO's _____ decision to restructure the company led to significant improvements in efficiency.

- a) Egregious
- b) Judicious
- c) Reticent
- d) Capitulating

Correct Answer: b)

30. Identify the correct collocation:

The new technology offered a _____ solution to the longstanding problem.

- a) Panacea
- b) Ineffable
- c) Quizzical
- d) Profligate

Correct Answer: a)

31. Select the proper collocation:

The novel featured a _____ cast of characters, each with a unique and compelling backstory.

Class 10th English Grammar Past Paper

- a) Multifarious
 - b) Pernicious
 - c) Intractable
 - d) Inefficacious
- Correct Answer: a)

32. Choose the appropriate collocation:

The athlete demonstrated _____ determination in overcoming numerous obstacles to achieve success.

- a) Stalwart
- b) Serpentine
- c) Callow
- d) Placid

Correct Answer: a)

33. Identify the correct collocation:

The poet's verses were imbued with a _____ sense of melancholy and introspection.

- a) Wistful
- b) Ephemeral
- c) Garrulous
- d) Inscrutable

Correct Answer: a)

34. Jane,

I thought you said you would meet me at 5. If you don't get here soon, we'll miss the beginning of the movie. Has anything happened?

Paul.

Read and select the correct option.

- a) Paul wishes to explain to Jane why he is late.
- b) Paul is trying to find out why Jane is not on time.
- c) Paul wishes to meet Jane later than planned.

Answer: b)

35. Choose the part grammatically incorrect from the sentence; Judge in him prevailed upon the father and he sentenced his son to death.

- a) Judge in him
- b) Prevailed upon the father
- c) And he sentenced his son to death
- d) No error

Answer: a)

36. Choose the part grammatically incorrect from the sentence; Nine-tenths of the pillar have rotted away.

- e) Nine-tenths
- f) Of the pillar

Class 10th English Grammar Past Paper

- g) Have rotted away
- h) No error

Answer: c)

37. The designer said to her, 'will you have the dress ready by tomorrow evening?'

- a) The designer asked her if she would have the dress ready by next evening.
- b) The designer asked her that she would have the dress ready by next evening.
- c) The designer asked her that if she will like to have the dress by next evening.
- d) The designer asked her that she will have the suit ready by next evening.

Answer: a)

38. They said, 'Let us come in'.

- a) They told that let them be allowed to come in.
- b) They requested that they might be allowed to come in.
- c) They said that if they are allowed to come in.
- d) They requested me to let them come in.

Answer: b)

39. Reshma said to Priya, 'Why are you sketching on the wall?'

- a) Reshma asked Priya why was she sketching on the wall.
- b) Reshma asked Priya why had she been sketching on the wall
- c) Reshma asked Priya that why is she sketching on the wall.
- d) Reshma asked Priya why she was sketching on the wall.

Answer: d)

40. 'Jacob fell as he'd have wished', the father said.

- a) The father said that Jacob has fallen as he would have wished.
- b) The father said that Jacob had fallen as he would have wished.
- c) The father said that Jacob had fallen as he had wished.
- d) The father said that Jacob had been fallen as he would have been wished.

Answer: b)

41. Arya said to Tara, 'David will leave for his mother's place tomorrow'.

- a) Arya told Tara that David will leave for his mother's place tomorrow.
- b) Arys told Tara that David will leave for his mother's place the next day.
- c) Arya told Tara that David would leave for his mother's place the next day.
- d) Arya informed Tara that David would be leaving for his mother's place the next day

Answer: c)

42. She said, 'Why didn't you send a friend request to me?'

- a) She asked me why had i not sent a friend request to her
- b) She enquired why I had not sent a friend request to her.
- c) She enquired why I did not send a friend request to her.
- d) She questioned why I had not sent a friend request to her.

Answer: b)

Class 10th English Grammar Past Paper

43. The judge commanded them to call the accused in the court.

- a) The Judge said, 'Call the accused in the court'.
- b) The Judge ordered, 'Call the accused in the court'
- c) The Judge command, 'Call the accused in the court'
- d) The Judge said to them, 'Call the accused in the court'.

Answer: d)

44. Each of its atoms loses or gives off a certain amount of energy _____ substance is radiating energy.

- a) With a
- b) When is a
- c) A
- d) If a

Answer: d)

45. When _____, they leave rocks and soil behind them on the lowlands or in the ocean.

- a) Are glaciers melted
- b) Melting glaciers
- c) Glaciers met
- d) Do glaciers melt

Answer: c)

46. Generally, the thicker a mammal's skin is the less hair _____.

- a) That has it
- b) That is has
- c) Has it
- d) It has

Answer: d)

47. Most teachers spend a great deal of time on their student's papers, and it ia a great pity _____.

- a) That too little parents appreciate that fact
- b) That parents too little appreciate that fact
- c) That less parents appreciate that fact
- d) That too few parents appreciate the fact

Answer: d)

48. Phonograph records, tape recordings and computer have made _____ to store data conveniently and accurately.

- a) Easier
- b) Easier than
- c) It easier
- d) It is easier

Answer: b)

Class 10th English Grammar Past Paper

49. Identify the correct collocation:

The scientist made a _____ discovery that revolutionized the field of physics.

- a) Fortuitous
- b) Serpentine
- c) Paradigmatic
- d) Limpid

Correct Answer: c)

50. Select the proper collocation:

The orchestra played with _____ precision, captivating the audience with each note.

- a) Inexorable
- b) Resonant
- c) Nebulous
- d) Incurable

Correct Answer: b)

51. Choose the appropriate collocation:

The negotiator adopted a _____ strategy to resolve the diplomatic standoff.

- a) Quixotic
- b) Palliative
- c) Esoteric
- d) Pragmatic

Correct Answer: d)

52. Identify the correct collocation:

The mountain climbers faced a _____ challenge as they ascended the treacherous peak.

- a) Formidable
- b) Lackluster
- c) Ephemeral
- d) Quizzical

Correct Answer: a)

53. Use of Passive Voice:

- a) The chef cooked a delicious meal.
- b) A delicious meal was cooked by the chef.
- c) Cooking a delicious meal, the chef was skilled.
- d) The chef is cooking a delicious meal.

Answer: b)

54. Subject-Verb Concord:

- a) The team are playing well.
- b) The team plays well.
- c) The team is playing well.

Class 10th English Grammar Past Paper

d) The team play well.

Answer: c)

55. Reporting Commands and Requests:

a) She said, "Close the door."

b) She said to close the door.

c) She said, "Please close the door."

d) She said, "Closing the door, please."

Answer: c)

56. Statements:

a) The sun rises in the east.

b) Does the sun rise in the east?

c) Rising in the east is the sun.

d) In the east, the sun rises?

Answer: a)

57. Questions:

a) Did they finished the project on time?

b) Do they finish the project on time?

c) They finish the project on time?

d) Did they finish the project on time?

Answer: d)

58. Clauses:

a) Although it was raining, she went for a walk.

b) It was raining when she went for a walk.

c) She went for a walk, it was raining.

d) When it was raining, she went for a walk.

Answer: a)

59. Determiners:

a) Few students passed the exam.

b) Much students passed the exam.

c) Many students passed the exam.

d) Several students passed the exam.

Answer: c)

60. Preposition:

a) He is allergic from peanuts.

b) He is allergic to peanuts.

c) He is allergic with peanuts.

d) He is allergic at peanuts.

Answer: b)

Class 10th English Grammar Past Paper

61. Tenses:

- a) They are swimming in the pool now.
- b) They swam in the pool yesterday.
- c) They will swim in the pool tomorrow.
- d) They swim in the pool every day.

Answer: a)

62. Modals:

- a) She must finish the assignment by tomorrow.
- b) She finished the assignment by tomorrow.
- c) She will finish the assignment by tomorrow.
- d) She finishing the assignment by tomorrow.

Answer: c)

63. Use of Passive Voice:

- a) The novel was writing by the famous author.
- b) The famous author was writing the novel.
- c) Writing the novel, the famous author was skilled.
- d) The famous author wrote the novel.

Answer: b)

64. Subject-Verb Concord:

- a) Each of the students has completed their homework.
- b) Each of the students have completed their homework.
- c) Each of the students has completed his or her homework.
- d) Each of the students have completed his homework.

Answer: c)

65. Reporting Commands and Requests:

- a) He said, "Do not disturb."
- b) He said, "Disturb not."
- c) He said, "Don't disturb."
- d) He said, "Disturb please."

Answer: c)

66. Statements:

- a) The moon revolves around the earth.
- b) Does the moon revolve around the earth?
- c) Revolving around the earth is the moon.
- d) Around the earth, does the moon revolve?

Answer: a)

67. "Hit the hay" typically means:

- a) Planting crops
- b) Going to bed
- c) Exercising

Class 10th English Grammar Past Paper

d) Building a fence
Correct Answer: b)

68. If something "costs an arm and a leg," it is:

- a) Very cheap
 - b) Affordable
 - c) Moderately priced
 - d) Very expensive
- Correct Answer: d)

69. "Bite the bullet" means to:

- a) Chew on a metal object
 - b) Face a difficult situation with courage
 - c) Avoid challenges
 - d) Take a break from work
- Correct Answer: b)

70. When someone suggests to "jump on the bandwagon," they are encouraging you to:

- a) Join a traveling musical group
 - b) Adopt a popular trend or activity
 - c) Criticize others
 - d) Start a new project
- Correct Answer: b)

71. "The ball is in your court" implies that:

- a) You are playing a game
 - b) It's time for you to make a decision or take action
 - c) You have lost control
 - d) You should pass the responsibility to someone else
- Correct Answer: b)

72. To "cut to the chase" means to:

- a) Trim a piece of fabric
 - b) Skip the introduction and get to the main point
 - c) Start a race
 - d) Solve a mystery
- Correct Answer: b)

73. If someone mentions "the whole nine yards," they are referring to:

- a) A long distance
 - b) A complete or exhaustive effort
 - c) Nine specific items
 - d) A short duration
- Correct Answer: b)

74. Some rooms don't have curtains at the windows, they have

Class 10th English Grammar Past Paper

- a) blinds
- b) carpets
- c) gates

Answer: a)

75. "To be, or not to be? That is the question-" is a famous quote in William Shakespeare's play

- a) Othello
- b) Hamlet
- c) Macbeth

Answer: b)

76. Robin Hood was a heroic outlaw in English folklore who became known for "robbing from the rich and giving to the poor", assisted by a group of fellow outlaws known as his

- a) Merry Men
- b) Wise Men
- c) Robbers

Answer: a)

77. After decades of neglect, government schools are finally making a fresh start with much-needed improvements to facilities and teaching methods.

- a) Improvising the old thought
- b) Grabbing the eyeballs
- c) Starting something in a new and different way
- d) Giving a jumpstart

Answer: c)

78. They thought that Ria would simply give up if her complaint had to go to the court. Now, she will realize that they have caught a Tartar!

- e) Dealing with an expert
- f) Forced to leave something
- g) Dealing with a troublesome person
- h) Wasting time

Answer: c)

79. Timothy finally _____ at the wedding.

- a) showed up
- b) buck up
- c) give up

Answer: a)

80. Never _____ on your dreams.

Class 10th English Grammar Past Paper

- a) showed up
- b) buck up
- c) give up

Answer: c)

81. _____ the room before you leave to play.

- d) Clean up
- e) Showed up
- f) Buck up

Answer: a)

82. The convict is trying to _____ a story.

- a) Make up
- b) Clean up
- c) Showed up

Answer: a)

83. Mark Antony's speech _____ the Roman people.

- a) Worked up
- b) Showed up
- c) Made up

Answer: a)

84. The convention was _____ due to the pandemic.

- a) called off
- b) cancelled off
- c) both of them

Answer: a)

85. Timothy finally _____ at the wedding.

- a) showed up
- b) buck up
- c) give up

Answer: a)

86. Identify the correct homonym:

The criminal tried to _____ from the scene of the crime.

- a) Steal
- b) Steel

Correct Answer: a)

87. Select the appropriate homophone:

His _____ reaction to the news surprised everyone.

- a) Affect
- b) Effect

Correct Answer: a)

Class 10th English Grammar Past Paper

88. Choose the correct homonym:

The company produces high-quality _____ for construction.

- a) Steal
- b) Steel

Correct Answer: b)

89. Identify the correct homophone:

I cannot _____ what he is saying because of the loud music.

- a) Here
- b) Hear

Correct Answer: b)

90. Select the appropriate homonym:

The _____ of the novel is set in the 19th century.

- a) Tail
- b) Tale

Correct Answer: b)

91. Choose the correct homophone:

We need to _____ for the upcoming exam.

- a) Revise
- b) Review

Correct Answer: a)

92. Identify the correct homonym:

The cat chased its _____ as if it were a prey.

- a) Tale
- b) Tail

Correct Answer: b)

93. Choose the correct homonym:

The artist used a _____ brush to create fine details in the painting.

- a) Fine
- b) Fein

Correct Answer: a)

94. Identify the nominalized form:

The team made a _____ of the proposed changes.

- a) Proposal
- b) Propose
- c) Proposing

Correct Answer: a)

95. Choose the correct nominalization:

The _____ of the project was a significant achievement for the research team.

- a) Complete

Class 10th English Grammar Past Paper

- b) Completion
 - c) Completely
- Correct Answer: b)

96. Identify the nominalized form:

- Her _____ in the negotiation process was commendable.
- a) Participate
 - b) Participation
 - c) Participating
- Correct Answer: b)

97. Choose the correct nominalization:

- The _____ of the new law raised concerns among citizens.
- a) Implementing
 - b) Implementation
 - c) Implement
- Correct Answer: b)

98. Identify the nominalized form:

- The _____ of the historical artifacts was carefully documented by the archaeologists.
- a) Discover
 - b) Discovery
 - c) Discovering
- Correct Answer: b)

99. The _____ of the new policy led to improved efficiency in the workplace.

- a) Implement
 - b) Implementation
 - c) Implementing
- Correct Answer: b)

100. Identify the nominalized form:

- The _____ of the novel won several literary awards.
- a) Write
 - b) Writer
 - c) Writing
- Answer: c)

Class 11th English Grammar Past Paper

1. Which word has the underlined part pronounced differently from the rest?

- A) plough
- B) ground
- C) mouth
- D) southern
- E) trounce

Answer: D

2. One of these words does not describe a way of walking. Which one?

- A) waddle
- B) stroll
- C) limp
- D) amble
- E) hover

Answer: E

3. Find a synonym for the underlined word:

Rebecca stared back at us with such mournful eyes that we averted our gaze from her entirely.

- A) misty
- B) pitiful
- C) mocking
- D) greedy
- E) sad

ANSWER: E

4. David has lost his wallet again. It's the second time this

- A) will happen
- B) has happened
- C) happened
- D) happens
- E) had happened

Answer: B

5. He doesn't have that much experience. He's still wet behind the

- A) knees
- B) eyes
- C) ears
- D) tongue
- E) shoulders

Answer: C

6. Little that there were people who had never been brought to justice for their

Class 11th English Grammar Past Paper

crimes.

- A) I knew
- B) I did know
- C) did I know
- D) knew I
- E) I had known

Answer: C

7. The inspector is a very man who checks the evidence over and over again.

- A) attentive
- B) thorough
- C) thoughtful
- D) complete
- E) conscious

Answer: B

8. "I risked life and to save you and look at how ungrateful you are!" Charles shouted.

- A) limb
- B) flesh
- C) death
- D) soul
- E) being

Answer: A

9. He couldn't find two that matched, so he was forced to wear socks.

- A) mixed
- B) odd
- C) uneven
- D) unlike
- E) impaired

Answer: B

10. Match the halves of the phrases.

- | | | |
|-----------|-----|-----------|
| 1. fair | | a. breezy |
| 2. bright | | b. simple |
| 3. rough | and | c. void |
| 4. plain | | d. square |
| 5. null | | e. ready |

- A) 1e/ 2c/ 3a/ 4d/ 5b
- B) 1b/ 2a/ 3c/ 4d/ 5e
- C) 1d/ 2a/ 3c/ 4e/ 5b
- D) 1a/ 2c/ 3b/ 4e/ 5d

Class 11th English Grammar Past Paper

E) 1d/ 2a/ 3e/ 4b/ 5c

Answer: E

11. Antonym of EXPAND is _____?

- A) Congest
- B) Conclude
- C) Convert
- D) Condense

Answer: D

12. Antonym of ARTIFICIAL is _____?

- A) Red
- B) Solid
- C) Truthful
- D) Natural

Answer: D

13. Choose the correct homonym:

The company produces high-quality _____ for construction.

- A) Steal
- B) Steel

Correct Answer: B)

14. Identify the correct homophone:

I cannot _____ what he is saying because of the loud music.

- A) Here
- B) Hear

Correct Answer: B)

15. Select the appropriate homonym:

The _____ of the novel is set in the 19th century.

- A) Tail
- B) Tale

Correct Answer: B)

16. Choose the correct homophone:

We need to _____ for the upcoming exam.

- A) Revise
- B) Review

Correct Answer: A)

17. Identify the correct homonym:

The cat chased it's _____ as if it were a prey.

- A) Tale
- B) Tail

Correct Answer: B)

Class 11th English Grammar Past Paper

18. Choose the correct homonym:

The artist used a _____ brush to create fine details in the painting.

- A) Fine
- B) Fein

Correct Answer: A)

19. Identify the nominalized form:

The team made a _____ of the proposed changes.

- A) Proposal
- B) Propose
- C) Proposing

Correct Answer: A)

20. Choose the correct nominalization:

The _____ of the project was a significant achievement for the research team.

- A) Complete
- B) Completion
- C) Completely

Correct Answer: B)

21. Identify the nominalized form:

Her _____ in the negotiation process was commendable.

- A) Participate
- B) Participation
- C) Participating

Correct Answer: B)

22. Choose the correct nominalization:

The _____ of the new law raised concerns among citizens.

- A) Implementing
- B) Implementation
- C) Implement

Correct Answer: B)

23. Identify the nominalized form:

The _____ of the historical artifacts was carefully documented by the archaeologists.

- A) Discover
- B) Discovery
- C) Discovering

Correct Answer: B)

24. The _____ of the new policy led to improved efficiency in the workplace.

- A) Implement
- B) Implementation
- C) Implementing

Class 11th English Grammar Past Paper

Correct Answer: B)

25. Identify the nominalized form:

The _____ of the novel won several literary awards.

- A) Write
- B) Writer
- C) Writing

Answer: C)

26. Antonym of ENORMOUS is _____?

- A) Fragile
- B) Weak
- C) Tiny
- D) Soft

Answer: C

27. Antonym of RECONDITE is _____?

- A) Hermetic
- B) Manifest
- C) Pedantic
- D) Occult

Answer: B

28. Modals:

- A) She must finish the assignment by tomorrow.
- B) She finished the assignment by tomorrow.
- C) She will finish the assignment by tomorrow.
- D) She finishing the assignment by tomorrow.

Answer: C)

29. Use of Passive Voice:

- A) The novel was writing by the famous author.
- B) The famous author was writing the novel.
- C) Writing the novel, the famous author was skilled.
- D) The famous author wrote the novel.

Answer: B)

30. Subject-Verb Concord:

- A) Each of the students has completed their homework.
- B) Each of the students have completed their homework.
- C) Each of the students has completed his or her homework.
- D) Each of the students have completed his homework.

Answer: C)

31. Reporting Commands and Requests:

- A) He said, "Do not disturb."

Class 11th English Grammar Past Paper

- B) He said, "Disturb not."
- C) He said, "Don't disturb."
- D) He said, "Disturb please."

Answer: C)

32. Statements:

- A) The moon revolves around the earth.
- B) Does the moon revolve around the earth?
- C) Revolving around the earth is the moon.
- D) Around the earth, does the moon revolve?

Answer: A)

33. "Hit the hay" typically means:

- A) Planting crops
- B) Going to bed
- C) Exercising
- D) Building a fence

Correct Answer: B)

34. If something "costs an arm and a leg," it is:

- A) Very cheap
- B) Affordable
- C) Moderately priced
- D) Very expensive

Correct Answer: D)

35. "Bite the bullet" means to:

- A) Chew on a metal object
- B) Face a difficult situation with courage
- C) Avoid challenges
- D) Take a break from work

Correct Answer: B)

36. When someone suggests to "jump on the bandwagon," they are encouraging you to:

- A) Join a traveling musical group
- B) Adopt a popular trend or activity
- C) Criticize others
- D) Start a new project

Correct Answer: B)

37. "The ball is in your court" implies that:

- A) You are playing a game
- B) It's time for you to make a decision or take action
- C) You have lost control
- D) You should pass the responsibility to someone else

Correct Answer: B)

Class 11th English Grammar Past Paper

38. To "cut to the chase" means to:

- A) Trim a piece of fabric
- B) Skip the introduction and get to the main point
- C) Start a race
- D) Solve a mystery

Correct Answer: B)

39. If someone mentions "the whole nine yards," they are referring to:

- A) A long distance
- B) A complete or exhaustive effort
- C) Nine specific items
- D) A short duration

Correct Answer: B)

40. Some rooms don't have curtains at the windows, they have

- A) blinds
- B) carpets
- C) gates

Answer: A)

41. "To be, or not to be? That is the question-" is a famous quote in William Shakespeare's play

- A) Othello
- B) Hamlet
- C) Macbeth

Answer: B)

42. Robin Hood was a heroic outlaw in English folklore who became known for "robbing from the rich and giving to the poor", assisted by a group of fellow outlaws known as his

- A) Merry Men
- B) Wise Men
- C) Robbers

Answer: A)

43. After decades of neglect, government schools are finally making a fresh start with much-needed improvements to facilities and teaching methods.

- A) Improvising the old thought
- B) Grabbing the eyeballs
- C) Starting something in a new and different way
- D) Giving a jumpstart

Answer: D)

44. They thought that Ria would simply give up if her complaint had to go to the court. Now, she will realize that they have caught a Tartar!

- A) Dealing with an expert

Class 11th English Grammar Past Paper

- B) Forced to leave something
- C) Dealing with a troublesome person
- D) Wasting time

Answer: C)

45. Timothy finally _____ at the wedding.
- A) showed up
 - B) buck up
 - C) give up

Answer: A)

46. Never _____ on your dreams.
- A) showed up
 - B) buck up
 - C) give up

Answer: c)

47. _____ the room before you leave to play.
- A) Clean up
 - B) Showed up
 - C) Buck up

Answer: A)

48. The convict is trying to _____ a story.
- A) Make up
 - B) Clean up
 - C) Showed up

Answer: A)

49. Mark Antony's speech _____ the Roman people.
- A) Worked up
 - B) Showed up
 - C) Made up

Answer: A)

50. The convention was _____ due to the pandemic.
- A) called off
 - B) cancelled off
 - C) both of them

Answer: A)

51. Timothy finally _____ at the wedding.
- A) showed up
 - B) buck up
 - C) give up

Answer: A)

Class 11th English Grammar Past Paper

52. Identify the correct homonym:

The criminal tried to _____ from the scene of the crime.

- A) Steal
- B) Steel

Correct Answer: A)

53. Select the appropriate homophone:

His _____ reaction to the news surprised everyone.

- A) Affect
- B) Effect

Correct Answer: A)

54. Antonym of GUMPTION is _____?

- A) Apathy
- B) Nerve
- C) Initiative
- D) Sagacity

Answer: A)

55. Ocean currents play a _____ role in setting long-term climate _____.

- A) vital ... date
- B) important ... variations
- C) major ... patterns
- D) unusual ... changes

Answer: C)

56. I promise to _____ you in all circumstances

- A) stand up to
- B) stand with
- C) stand off
- D) stand by

Answer: B

57. It's difficult _____ reconcile such different points of view

- A) with
- B) to
- C) in
- D) on

Answer: B

58. The speaker did not properly space out his speech, but went on _____ one point only.

- A) stressing
- B) avoiding

Class 11th English Grammar Past Paper

- C) devoting
- D) decrying

Answer: A)

59. In the test, we will _____ your work and then give you detailed feedback.

- A) assess
- B) judge
- C) measure
- D) check

Answer: A

60. A speed limit is the _____ legal speed that you can travel on the road.

- A) highest
- B) biggest
- C) maximum
- D) longest

Answer: C

61. The President's speech was so _____ that many people were persuaded to accept the need for change.

- A) expressive
- B) articulate
- C) eloquent
- D) calm

Answer: C

62. There is something wonderful _____ him.

- A) of
- B) about
- C) for
- D) inside

Answer: B)

63. If she is not interested, we will _____ the proposal.

- A) vaccant
- B) abandon
- C) impulse
- D) remove

Answer: B

64. The police forces have launched an operation to _____ out the kidnapped person

- A) track
- B) touch
- C) nib
- D) trace

Class 11th English Grammar Past Paper

Answer: D

65. Some people _____ to the officer against him about his mis-deeds
- A) asked
 - B) complained
 - C) question
 - D) informed

Answer: B

66. If we go to the park, _____ you like to come too ?
- A) shall
 - B) are
 - C) would
 - D) am

Answer: C

67. It is certain that human beings _____ latent Vpower of which they are only vaguely aware
- A) exhibit
 - B) possess
 - C) impose
 - D) knowledge

Answer: B

68. Idiom "Star Crossed" is _____ ?
- A) Unlucky
 - B) Lucky
 - C) Hard worker
 - D) None of these

Answer: A)

69. Choose the meaning of idiom: "To break a lance with".
- A) To entertain friends
 - B) To fail or to miscarry
 - C) To engage in a competition
 - D) Get up to be involved in something

Answer: C)

70. Choose the correct meaning of idiom " between sylla and charybids"
- A) Between two great difficulties
 - B) Between two great opportunities
 - C) In a confused situation
 - D) None of these

Answer: A

71. Choose the correct meaning of idiom " Leave in the Lurch" :

Class 11th English Grammar Past Paper

- A) A difficult situation
- B) To meet suddenly with someone
- C) To leave someone in difficulty
- D) To assist someone in adverse circumstances

Answer: C

72. Choose the correct collocation:

The politician gave a _____ speech, captivating the audience with his eloquence.

- A) Vivid
- B) Tremendous
- C) Resilient
- D) Colossal

Correct Answer: A

73. Identify the appropriate collocation:

The artist's paintings were characterized by a _____ blend of colors, creating a visually stunning effect.

- A) Haphazard
- B) Meticulous
- C) Callous
- D) Pernicious

Correct Answer: B)

74. Select the correct collocation:

The scientist conducted a _____ experiment to validate the groundbreaking hypothesis.

- A) Flagrant
- B) Pioneering
- C) Ineffable
- D) Languid

Correct Answer: B

75. Choose the appropriate collocation:

Her _____ decision to resign shocked the entire company.

- A) Audacious
- B) Cacophonous
- C) Sagacious
- D) Salubrious

Correct Answer: A)

76. Identify the correct collocation:

The novel featured a _____ plot, full of unexpected twists and turns.

- A) Banal
- B) Intricate
- C) Lethargic
- D) Serene

Correct Answer: B)

Class 11th English Grammar Past Paper

77. Select the proper collocation:

The athlete displayed _____ strength during the intense training sessions.

- A) Inherent
- B) Conspicuous
- C) Inefficacious
- D) Superfluous

Correct Answer: A)

78. Choose the correct collocation:

The students showed _____ enthusiasm for the challenging mathematics competition.

- A) Ingrained
- B) Lackadaisical
- C) Ambivalent
- D) Zealous

Correct Answer: D

79. Identify the appropriate collocation:

The chef's _____ approach to culinary arts resulted in innovative and delicious dishes.

- A) Avant-garde
- B) Stalwart
- C) Mellifluous
- D) Capricious

Correct Answer: A)

80. Select the correct collocation:

The storm caused _____ damage to the coastal town, leaving residents in shock.

- A) Cataclysmic
- B) Serendipitous
- C) Facetious
- D) Nebulous

Correct Answer: A)

81. Choose the appropriate collocation:

The professor delivered a lecture with _____ precision, leaving the students deeply impressed.

- A) Concise
- B) Unruly
- C) Juxtaposed
- D) Cacophonous

Correct Answer: A)

82. The doctor had examined him.

- A) He was examined by the doctor.
- B) He has been examined by the doctor.
- C) He had been examined by the doctor.

Class 11th English Grammar Past Paper

D) None of these

Answer: C

83. She does not like tea.

- A) Tea is not liked by her.
- B) Tea have not liked by her.
- C) Tea was not liked by her.
- D) Tea did not liked by her.

Answer: A)

84. Which sentence is in the passive voice?

- A) The chef cooked a delicious meal.
- B) A delicious meal was cooked by the chef.
- C) Cooking a delicious meal, the chef was skilled.
- D) The chef is cooking a delicious meal.

Answer: B)

85. Identify the active voice sentence:

- A) The ancient manuscript was carefully restored by the librarian.
- B) Carefully restored by the librarian was the ancient manuscript.
- C) The librarian carefully restored the ancient manuscript.
- D) The ancient manuscript has been carefully restored.

Answer: C)

86. Choose the correct passive form:

- A) They have already chosen the leader.
- B) The leader has already been chosen by them.
- C) Already the leader has been chosen by them.
- D) They already choosing the leader.

Answer: B)

87. A group of giraffe is known as: _____?

- A) Tower
- B) Herd
- C) Flock
- D) None of these

Answer: A)

88. Choose the most suitable word: An office or post with no work but high pay:

- A) Honorary
- B) Sinecure
- C) Gratis
- D) Ex-Officio

Answer: B)

89. Through which light cannot pass?

Class 11th English Grammar Past Paper

- A) Dull
- B) Dark
- C) Obscure
- D) Opaque

Answer: D)

90. A leady who remains unmarried?

- A) Bachelor
- B) Misanthrope
- C) Spinster
- D) None of these

Answer: C)

91. The original inhabitants of a Country.

- A) Aborigines
- B) Citizens
- C) Natives
- D) Primitive

Answer: A)

92. A Group of birds or a flock flying together in hundreds or even in thousands is called _____ ?

- A) Startling
- B) Murmuration
- C) Both A and B
- D) None of these

Answer: B)

93. One who lacks knowledge _____ ?

- A) Intelligent
- B) Ignorant
- C) Credulous
- D) Colleague

Answer: B)

94. A part of a word that can be pronounced separately ?

- A) Particle
- B) Sibilant
- C) Syllable
- D) Letter

Answer: C)

95. One who travels from place to place ?

- A) Itinerant
- B) Mendicant
- C) Journeyman

Class 11th English Grammar Past Paper

D) Tramp

Answer: A)

96. The practice of taking someone else's work or ideas and passing them off as one's own is known as _____?

- A) Cuckold
- B) Despotism
- C) Plagiarism
- D) Epicure

Answer: C

97. A person who talks in his/her sleep is known as _____?

- A) Bourgeois
- B) Insomnist
- C) ventriloquist
- D) Somniloquist

Answer: D)

98. secretly listening to a conversation is called _____?

- A) Eavesdrop
- B) Overhearing
- C) Pigeonholing
- D) Spying

Answer: A)

99. A disease that is liable to be transmitted to people through the environment is known as _____?

- A) Contagious
- B) Infectious
- C) Fatal
- D) Incurable

Answer: B)

100. A disease spreading from one person or organism to another by contact is known as _____?

- A) Contagious
- B) Infectious
- C) Unanimous
- D) Fatal

Answer: A)

Class 12th English Grammar Past Paper

1. A person fluent in two languages is known as _____?

- A) Bilingual
- B) Bigot
- C) Bigamy
- D) Brittle

Answer: A)

2. The action or practice of persuading someone to do something by using force or Threats is known as _____?

- A) Coercion
- B) Conviction
- C) Confession
- D) Cajolement

Answer: A)

3. A narrow piece of land connecting two large masses of land is known as _____?

- A) Gulf
- B) Isthmus
- C) Peninsula
- D) Continent

Answer: B

4. Government by a small group of all powerful persons is known as _____?

- A) Dictatorship
- B) Monarchy
- C) Oligarchy
- D) Anarchy

Answer: C)

5. A person who helps another commit a crime is known as _____?

- A) Accomplice
- B) Amateur
- C) Cuckold
- D) Changeling

Answer: A)

6. A sad poem usually written to praise and express sorrow for someone who is dead is known as _____?

- A) Elegy
- B) Oad
- C) Sestina
- A. Epic

Answer: A)

7. A long poem narrating achievements of a hero or legendary figures is known as

Class 12th English Grammar Past Paper

_____?

- A) Epic
- B) Elegy
- C) Ode
- D) Sestina

Answer: A)

8. Which word has the underlined part pronounced differently from the rest?

- A) plough
- B) ground
- C) mouth
- D) southern
- E) trounce

Answer: D

9. One of these words does not describe a way of walking. Which one?

- A) waddle
- B) stroll
- C) limp
- D) amble
- E) hover

Answer: E

10. Find a synonym for the underlined word:

Rebecca stared back at us with such mournful eyes that we averted our gaze from her entirely.

- A) misty
- B) pitiful
- C) mocking
- D) greedy
- E) sad

ANSWER: E

11. David has lost his wallet again. It's the second time this

- A) will happen
- B) has happened
- C) happened
- D) happens
- E) had happened

Answer: B

12. He doesn't have that much experience. He's still wet behind the

- A) knees
- B) eyes
- C) ears

Class 12th English Grammar Past Paper

- D) tongue
 - E) shoulders
- Answer: C

13. Little that there were people who had never been brought to justice for their crimes.

- A) I knew
- B) I did know
- C) did I know
- D) knew I
- E) I had known

Answer: C

14. The inspector is a very man who checks the evidence over and over again.

- A) attentive
- B) thorough
- C) thoughtful
- D) complete
- E) conscious

Answer: B

15. "I risked life and to save you and look at how ungrateful you are!" Charles shouted.

- A) limb
- B) flesh
- C) death
- D) soul
- E) being

Answer: A

16. He couldn't find two that matched, so he was forced to wear socks.

- A) mixed
- B) odd
- C) uneven
- D) unlike
- E) impaired

Answer: B

17. Match the halves of the phrases.

- | | | |
|-----------|-----|-----------|
| 1. fair | | a. breezy |
| 2. bright | | b. simple |
| 3. rough | and | c. void |
| 4. plain | | d. square |

Class 12th English Grammar Past Paper

5. null

e. ready

- A) 1e/ 2c/ 3a/ 4d/ 5b
 - B) 1b/ 2a/ 3c/ 4d/ 5e
 - C) 1d/ 2a/ 3c/ 4e/ 5b
 - D) 1a/ 2c/ 3b/ 4e/ 5d
 - E) 1d/ 2a/ 3e/ 4b/ 5c
- Answer: E

18. A form of written language for blind people is known as _____?

- A) Braille
- B) Elysium
- C) Epicure
- D) Arson

Answer: A

19. A medicine taken or given to counteract a particular poison is known as _____?

- A) antidote
- B) antitoxin
- C) Adderall
- D) A & B

Answer: D

20. One who eats everything indiscriminately is known as _____?

- A) Albumen
- B) Adept
- C) Omnivorous
- D) Amphibian

Answer: C

21. Choose the meaning of idiom: "To break a lance with".

- A) To entertain friends
- B) To fail or to miscarry
- C) To engage in a competition
- D) Get up to be involved in something

Answer: C)

22. Choose the correct meaning of idiom "between scylla and charybids"

- A) Between two great difficulties
- B) Between two great opportunities
- C) In a confused situation
- D) None of these

Answer: A

23. Choose the correct meaning of idiom "Leave in the Lurch" :

- A) A difficult situation

Class 12th English Grammar Past Paper

- B) To meet suddenly with someone
- C) To leave someone in difficulty
- D) To assist someone in adverse circumstances

Answer: C

24. Choose the correct collocation:

The politician gave a _____ speech, captivating the audience with his eloquence.

- A) Vivid
- B) Tremendous
- C) Resilient
- D) Colossal

Correct Answer: A

25. Identify the appropriate collocation:

The artist's paintings were characterized by a _____ blend of colors, creating a visually stunning effect.

- A) Haphazard
- B) Meticulous
- C) Callous
- D) Pernicious

Correct Answer: B)

26. Select the correct collocation:

The scientist conducted a _____ experiment to validate the groundbreaking hypothesis.

- A) Flagrant
- B) Pioneering
- C) Ineffable
- D) Languid

Correct Answer: B

27. Choose the appropriate collocation:

Her _____ decision to resign shocked the entire company.

- A) Audacious
- B) Cacophonous
- C) Sagacious
- D) Salubrious

Correct Answer: A)

28. Identify the correct collocation:

The novel featured a _____ plot, full of unexpected twists and turns.

- A) Banal
- B) Intricate
- C) Lethargic
- D) Serene

Correct Answer: B)

Class 12th English Grammar Past Paper

29. Select the proper collocation:

The athlete displayed _____ strength during the intense training sessions.

- A) Inherent
- B) Conspicuous
- C) Inefficacious
- D) Superfluous

Correct Answer: A)

30. Choose the correct collocation:

The students showed _____ enthusiasm for the challenging mathematics competition.

- A) Ingrained
- B) Lackadaisical
- C) Ambivalent
- D) Zealous

Correct Answer: D

31. Identify the appropriate collocation:

The chef's _____ approach to culinary arts resulted in innovative and delicious dishes.

- A) Avant-garde
- B) Stalwart
- C) Mellifluous
- D) Capricious

Correct Answer: A)

32. Select the correct collocation:

The storm caused _____ damage to the coastal town, leaving residents in shock.

- A) Cataclysmic
- B) Serendipitous
- C) Facetious
- D) Nebulous

Correct Answer: A)

33. Choose the appropriate collocation:

The professor delivered a lecture with _____ precision, leaving the students deeply impressed.

- A) Concise
- B) Unruly
- C) Juxtaposed
- D) Cacophonous

Correct Answer: A)

34. The doctor had examined him.

- A) He was examined by the doctor.
- B) He has been examined by the doctor.
- C) He had been examined by the doctor.
- D) None of these

Class 12th English Grammar Past Paper

Answer: C

35. She does not like tea.

- A) Tea is not liked by her.
- B) Tea have not liked by her.
- C) Tea was not liked by her.
- D) Tea did not liked by her.

Answer: A)

36. Which sentence is in the passive voice?

- A) The chef cooked a delicious meal.
- B) A delicious meal was cooked by the chef.
- C) Cooking a delicious meal, the chef was skilled.
- D) The chef is cooking a delicious meal.

Answer: B)

37. Identify the active voice sentence:

- A) The ancient manuscript was carefully restored by the librarian.
- B) Carefully restored by the librarian was the ancient manuscript.
- C) The librarian carefully restored the ancient manuscript.
- D) The ancient manuscript has been carefully restored.

Answer: C)

38. Choose the correct passive form:

- A) They have already chosen the leader.
- B) The leader has already been chosen by them.
- C) Already the leader has been chosen by them.
- D) They already choosing the leader.

Answer: B)

39. A group of giraffe is known as: _____?

- A) Tower
- B) Herd
- C) Flock
- D) None of these

Answer: A)

40. Choose the most suitable word: An office or post with no work but high pay:

- A) Honorary
- B) Sinecure
- C) Gratis
- D) Ex-Officio

Answer: B)

41. Through which light cannot pass?

- A) Dull

Class 12th English Grammar Past Paper

- B) Dark
- C) Obscure
- D) Opaque

Answer: D)

42. A leady who remains unmarried?

- A) Bachelor
- B) Misanthrope
- C) Spinster
- D) None of these

Answer: C)

43. The original inhabitants of a Country.

- A) Aborigines
- B) Citizens
- C) Natives
- D) Primitve

Answer: A)

44. A Group of birds or a flock flying together in hundreds or even in thousands is called _____ ?

- A) Startling
- B) Murmuration
- C) Both A and B
- D) None of these

Answer: B)

45. One who lacks knowledge _____ ?

- A) Intelligent
- B) Ignorant
- C) Credulous
- D) Colleague

Answer: B)

46. A part of a word that can be pronounced separately ?

- A) Particle
- B) Sibilant
- C) Syllable
- D) Letter

Answer: C)

47. One who travels from place to place ?

- A) Itinerant
- B) Mendicant
- C) Journeyman
- D) Tramp

Class 12th English Grammar Past Paper

Answer: A)

48. The practice of taking someone else's work or ideas and passing them off as one's own is known as _____?

- A) Cuckold
- B) Despotism
- C) Plagiarism
- D) Epicure

Answer: C

49. A person who talks in his/her sleep is known as _____?

- A) Bourgeois
- B) Insomnist
- C) ventriloquist
- D) Somniloquist

Answer:D)

50. secretly listening to a conversation is called _____?

- A) Eavesdrop
- B) Overhearing
- C) Pigeonholing
- D) Spying

Answer:A)

51. A disease that is liable to be transmitted to people through the environment is known as _____?

- A) Contagious
- B) Infectious
- C) Fatal
- D) Incurable

Answer: B)

52. A disease spreading from one person or organism to another by contact is known as _____?

- A) Contagious
- B) Infectious
- C) Unanimous
- D) Fatal

Answer: A)

53. One who is present everywhere is known as _____?

- A) Omnipotent
- B) Omniscient
- C) Omnipresent

Class 12th English Grammar Past Paper

D) None of the above

Answer: C

54. Antonym of EXPAND is _____?

- A) Congest
- B) Conclude
- C) Convert
- D) Condense

Answer: D

55. Antonym of ARTIFICIAL is _____?

- A) Red
- B) Solid
- C) Truthful
- D) Natural

Answer: D

56. Choose the correct homonym:

The company produces high-quality _____ for construction.

- A) Steal
- B) Steel

Correct Answer: B)

57. Identify the correct homophone:

I cannot _____ what he is saying because of the loud music.

- A) Here
- B) Hear

Correct Answer: B)

58. Select the appropriate homonym:

The _____ of the novel is set in the 19th century.

- A) Tail
- B) Tale

Correct Answer: B)

59. Choose the correct homophone:

We need to _____ for the upcoming exam.

- A) Revise
- B) Review

Correct Answer: A)

60. Identify the correct homonym:

The cat chased it's _____ as if it were a prey.

- A) Tale
- B) Tail

Correct Answer: B)

Class 12th English Grammar Past Paper

61. Choose the correct homonym:

The artist used a _____ brush to create fine details in the painting.

- A) Fine
- B) Fein

Correct Answer: A)

62. Identify the nominalized form:

The team made a _____ of the proposed changes.

- A) Proposal
- B) Propose
- C) Proposing

Correct Answer: A)

63. Choose the correct nominalization:

The _____ of the project was a significant achievement for the research team.

- A) Complete
- B) Completion
- C) Completely

Correct Answer: B)

64. Something which is incapable of being seen through is known as _____?

- A) Non-transparent
- B) Blurred
- C) Opaque
- D) All of the above

Answer: D

65. Something which is capable of being seen through is known as _____?

- A) Opaque
- B) Coarse
- C) Ambiguous
- D) Transparent

Answer: D

66. One who is unable to pay debts owed is known as _____?

- A) Foreclosed
- B) Insolvent
- C) Bankrupt
- D) All of the above

Answer: D

67. The teacher cautioned me _____ my spelling.

- A) For
- B) Against
- C) At
- D) On

Class 12th English Grammar Past Paper

Answer: A)

68. The train went _____ the tunnel.

- A) from
- B) under
- C) through
- D) to

Answer: C)

69. The jug is full _____ milk?

- A) of
- B) about
- C) by
- D) with

Answer: A)

70. Books are a great source _____ happiness.

- A) of
- B) for
- C) on
- D) with

Answer: A)

71. He is superior _____ me?

- A) To
- B) than
- C) With
- D) from

Answer: A)

72. He looks upset, I think he took the criticism _____ heart?

- A) to
- B) in
- C) about
- D) of

Answer: A)

73. You can't always pass _____ appearance.

- A) Down
- B) By
- C) Into
- D) Of

Answer: B)

74. Both parties must adhere _____ the terms of the contract.

- A) In

Class 12th English Grammar Past Paper

- B) By
- C) On
- D) To

Answer: D)

75. I was alarmed_____his death.

- A) by
- B) at
- C) upon
- D) from

Answer: B)

76. What type of narration is used in the following sentence?

"The mysterious door creaked open, revealing a dimly lit hallway."

- A) First-person
- B) Second-person
- C) Third-person limited
- D) Third-person omniscient

Correct Answer: C) Third-person limited

77. Which sentence demonstrates an example of unreliable narration?

- A) "I saw the thief run past me with the stolen purse."
- B) "He claimed to have witnessed the accident, but I doubt his credibility."
- C) "We all knew she couldn't be trusted, especially after what she did."
- D) "You are the only one who knows the truth about what happened."

Correct Answer: B) "He claimed to have witnessed the accident, but I doubt his credibility."

78. In which narrative perspective is the narrator not a character in the story and knows the thoughts and feelings of multiple characters?

- A) First-person limited
- B) Second-person
- C) Third-person omniscient
- D) Third-person objective

Correct Answer: C) Third-person omniscient

79. What tense and point of view is used in the following sentence?

"As I gazed at the stars, I felt a sense of peace wash over me."

- A) Present tense, first-person
- B) Past tense, second-person
- C) Past tense, third-person limited
- D) Present tense, third-person omniscient

Correct Answer: A) Present tense, first-person

80. Which narrative technique involves the narrator addressing the reader directly?

- A) Stream of consciousness
- B) Epistolary

Class 12th English Grammar Past Paper

- C) Metafiction
- D) Breaking the fourth wall

Correct Answer: D) Breaking the fourth wall

81. What narrative style is characterized by a continuous flow of thoughts, feelings, and associations of a character?

- A) Third-person objective
- B) Stream of consciousness
- C) Epistolary
- D) Omniscient narration

Correct Answer: B) Stream of consciousness

82. Which narrative mode is often used in detective stories where the narrator is unaware of some crucial information?

- A) First-person omniscient
- B) Second-person limited
- C) Third-person objective
- D) Unreliable narration

Correct Answer: A)

83. What is the term for a narrative device in which the story unfolds through a series of letters?

- A) Stream of consciousness
- B) Omniscient narration
- C) Epistolary
- D) Second-person limited

Correct Answer: C) Epistolary

84. In which narrative perspective does the narrator use "I" and is typically a character in the story?

- A) First-person
- B) Second-person
- C) Third-person limited
- D) Third-person omniscient

Correct Answer: A) First-person

85. What type of narration is characterized by the narrator only knowing the external actions and dialogue of the characters, without access to their thoughts or feelings?

- A) First-person omniscient
- B) Second-person limited
- C) Third-person objective
- D) Third-person limited

Correct Answer: C) Third-person objective

86. Honey is related to Wax in the same way as Milk is related to?

- A) Cows

Class 12th English Grammar Past Paper

- B) Leather
- C) Eggs
- D) Water

Answer: B)

87. Inch is related to Wax in the same way as is Pint related to?

- A) Liter
- B) Volume
- C) Gallon
- D) Viscosity

Answer: C)

88. Orthopedist is related to Bones in the same way as Chiropodist is related to.....?

- A) Nails
- B) Sounds
- C) Feet
- D) Heart

Answer: C)

89. Grains is related to Granary in the same way as Curious is related to ?

- A) Archives
- B) Museum
- C) Library
- D) Zoo

Answer: (B)

90. Delicious is related to Taste in the same way as Melody is related to.?

- A) Voice
- B) Speak
- C) Tongue
- D) Highness

Answer: (A)

91. Faiz Ahmed Faiz is related to poetry in the same way as Ali Imam is related to?

- A) Literature
- B) Drama
- C) Poetry
- D) Painting

Answer: D)

92. Borrower is related to Loan in the same way as Beggar is related to?

- A) Alms
- B) Mercy
- C) Money
- D) Gift

Answer: A)

93. Waves is related to Air in the same way as Ripples is related to?

- A) Wind
- B) Water
- C) Storm
- D) Smoke

Answer: A)

Class 12th English Grammar Past Paper

94. Institute is related to Academy in the same way as Decree is related to?
A) Blame
B) Court
C) Judge
D) Mandate
Answer: D)
95. Hygienic is related to Polluted in the same way as Knowing is related to?
A) Ingenuous
B) Uncommon
C) Secret
D) Sagacious
Answer: A)
96. Jesus is related to Christians in the same way as Zoroaster is related to?
A) Jews
B) Parsis
C) Sikh
D) Catholics
Answer: B)
97. Palm is related to Hand in the same way as Sole is related to?
A) Leg
B) Ankle
C) Knee
D) Foot
Answer: D)
98. Young is related to Old in the same way as Wild is related to?
A) Insufficient
B) Big
C) Narrow
D) Long
Answer: C)
99. Auger is related to Carpenter in the same way as Awl is related to?
A) Sculptor
B) Cobbler
C) Chef
D) Mason
Answer: B)
100. Bird is related to Aviary in the same way as Bees is related to?
A) Aquarium
B) Hive
C) Brewery
D) Apiary
Answer: D)

IGCSE English Grammar Past Paper

1. Antonym of ARTIFICIAL is _____?

- A) Red
- B) Solid
- C) Truthful
- D) Natural

Answer: D

2. Choose the correct homonym:

The company produces high-quality _____ for construction.

- A) Steal
- B) Steel

Correct Answer: B)

3. Identify the correct homophone:

I cannot _____ what he is saying because of the loud music.

- A) Here
- B) Hear

Correct Answer: B)

4. Select the appropriate homonym:

The _____ of the novel is set in the 19th century.

- A) Tail
- B) Tale

Correct Answer: B)

5. Choose the correct homophone:

We need to _____ for the upcoming exam.

- A) Revise
- B) Review

Correct Answer: A)

6. Identify the correct homonym:

The cat chased it's _____ as if it were a prey.

- A) Tale
- B) Tail

Correct Answer: B)

7. Choose the correct homonym:

The artist used a _____ brush to create fine details in the painting.

- A) Fine
- B) Fein

Correct Answer: A)

8. Identify the nominalized form:

The team made a _____ of the proposed changes.

IGCSE English Grammar Past Paper

- A) Proposal
- B) Propose
- C) Proposing

Correct Answer: A)

9. Choose the correct nominalization:

The _____ of the project was a significant achievement for the research team.

- A) Complete
- B) Completion
- C) Completely

Correct Answer: B)

10. Identify the nominalized form:

Her _____ in the negotiation process was commendable.

- A) Participate
- B) Participation
- C) Participating

Correct Answer: B)

11. Choose the correct nominalization:

The _____ of the new law raised concerns among citizens.

- A) Implementing
- B) Implementation
- C) Implement

Correct Answer: B)

12. Identify the nominalized form:

The _____ of the historical artifacts was carefully documented by the archaeologists.

- A) Discover
- B) Discovery
- C) Discovering

Correct Answer: B)

13. The _____ of the new policy led to improved efficiency in the workplace.

- A) Implement
- B) Implementation
- C) Implementing

Correct Answer: B)

14. Identify the nominalized form:

The _____ of the novel won several literary awards.

- A) Write
- B) Writer
- C) Writing

Answer: C)

IGCSE English Grammar Past Paper

15. Antonym of ENORMOUS is _____?

- A) Fragile
- B) Weak
- C) Tiny
- D) Soft

Answer: C

16. Antonym of RECONDITE is _____?

- A) Hermetic
- B) Manifest
- C) Pedantic
- D) Occult

Answer: B

17. Modals:

- A) She must finish the assignment by tomorrow.
- B) She finished the assignment by tomorrow.
- C) She will finish the assignment by tomorrow.
- D) She finishing the assignment by tomorrow.

Answer: C)

18. Use of Passive Voice:

- A) The novel was writing by the famous author.
- B) The famous author was writing the novel.
- C) Writing the novel, the famous author was skilled.
- D) The famous author wrote the novel.

Answer: B)

19. Subject-Verb Concord:

- A) Each of the students has completed their homework.
- B) Each of the students have completed their homework.
- C) Each of the students has completed his or her homework.
- D) Each of the students have completed his homework.

Answer: C)

20. Reporting Commands and Requests:

- A) He said, "Do not disturb."
- B) He said, "Disturb not."
- C) He said, "Don't disturb."
- D) He said, "Disturb please."

Answer: C)

21. Statements:

- A) The moon revolves around the earth.
- B) Does the moon revolve around the earth?
- C) Revolving around the earth is the moon.

IGCSE English Grammar Past Paper

D) Around the earth, does the moon revolve?

Answer: A)

22. "Hit the hay" typically means:

- A) Planting crops
- B) Going to bed
- C) Exercising
- D) Building a fence

Correct Answer: B)

23. If something "costs an arm and a leg," it is:

- A) Very cheap
- B) Affordable
- C) Moderately priced
- D) Very expensive

Correct Answer: D)

24. "Bite the bullet" means to:

- A) Chew on a metal object
- B) Face a difficult situation with courage
- C) Avoid challenges
- D) Take a break from work

Correct Answer: B)

25. When someone suggests to "jump on the bandwagon," they are encouraging you to:

- A) Join a traveling musical group
- B) Adopt a popular trend or activity
- C) Criticize others
- D) Start a new project

Correct Answer: B)

26. "The ball is in your court" implies that:

- A) You are playing a game
- B) It's time for you to make a decision or take action
- C) You have lost control
- D) You should pass the responsibility to someone else

Correct Answer: B)

27. To "cut to the chase" means to:

- A) Trim a piece of fabric
- B) Skip the introduction and get to the main point
- C) Start a race
- D) Solve a mystery

Correct Answer: B)

28. If someone mentions "the whole nine yards," they are referring to:

IGCSE English Grammar Past Paper

- A) A long distance
- B) A complete or exhaustive effort
- C) Nine specific items
- D) A short duration

Correct Answer: B)

29. Some rooms don't have curtains at the windows, they have

- A) blinds
- B) carpets
- C) gates

Answer: A)

30. "To be, or not to be? That is the question-" is a famous quote in William Shakespeare's play

- A) Othello
- B) Hamlet
- C) Macbeth

Answer: B)

31. Robin Hood was a heroic outlaw in English folklore who became known for "robbing from the rich and giving to the poor", assisted by a group of fellow outlaws known as his

- A) Merry Men
- B) Wise Men
- C) Robbers

Answer: A)

32. After decades of neglect, government schools are finally making a fresh start with much-needed improvements to facilities and teaching methods.

- A) Improvising the old thought
- B) Grabbing the eyeballs
- C) Starting something in a new and different way
- D) Giving a jumpstart

Answer: D

33. They thought that Ria would simply give up if her complaint had to go to the court. Now, she will realize that they have caught a Tartar!

- A) Dealing with an expert
- B) Forced to leave something
- C) Dealing with a troublesome person
- D) Wasting time

Answer: C)

34. Timothy finally _____ at the wedding.

- A) showed up
- B) buck up
- C) give up

IGCSE English Grammar Past Paper

Answer: A)

35. Never _____ on your dreams.

- A) showed up
- B) buck up
- C) give up

Answer: c)

36. _____ the room before you leave to play.

- A) Clean up
- B) Showed up
- C) Buck up

Answer: A)

37. The convict is trying to _____ a story.

- A) Make up
- B) Clean up
- C) Showed up

Answer: A)

38. Mark Antony's speech _____ the Roman people.

- A) Worked up
- B) Showed up
- C) Made up

Answer: A)

39. The convention was _____ due to the pandemic.

- A) called off
- B) cancelled off
- C) both of them

Answer: A)

40. Timothy finally _____ at the wedding.

- A) showed up
- B) buck up
- C) give up

Answer: A)

41. Identify the correct homonym:

The criminal tried to _____ from the scene of the crime.

- A) Steal
- B) Steel

Correct Answer: A)

42. Select the appropriate homophone:

His _____ reaction to the news surprised everyone.

IGCSE English Grammar Past Paper

- A) Affect
- B) Effect

Correct Answer: A)

43. Antonym of GUMPTION is _____?

- A) Apathy
- B) Nerve
- C) Initiative
- D) Sagacity

Answer: A)

44. Ocean currents play a _____ role in setting long-term climate _____.

- A) vital ... date
- B) important ... variations
- C) major ... patterns
- D) unusual ... changes

Answer: C)

45. I promise to _____ you in all circumstances

- A) stand up to
- B) stand with
- C) stand off
- D) stand by

Answer: B

46. It's difficult _____ reconcile such different points of view

- A) with
- B) to
- C) in
- D) on

Answer: B

47. The speaker did not properly space out his speech, but went on _____ one point only.

- A) stressing
- B) avoiding
- C) devoting
- D) decrying

Answer: A)

48. In the test, we will _____ your work and then give you detailed feedback.

- A) assess
- B) judge
- C) measure
- D) check

IGCSE English Grammar Past Paper

Answer: A

49. A speed limit is the _____ legal speed that you can travel on the road.

- A) highest
- B) biggest
- C) maximum
- D) longest

Answer: C

50. The President's speech was so _____ that many people were persuaded to accept the need for change.

- A) expressive
- B) articulate
- C) eloquent
- D) calm

Answer: C

51. There is something wonderful _____ him.

- A) of
- B) about
- C) for
- D) inside

Answer: B)

52. If she is not interested, we will _____ the proposal.

- A) vaccant
- B) abandon
- C) impulse
- D) remove

Answer: B

53. The police forces have launched an operation to _____ out the kidnapped person

- A) track
- B) touch
- C) nib
- D) trace

Answer: D

54. Some people _____ to the officer against him about his mis-deeds

- A) asked
- B) complained
- C) question
- D) informed

Answer: B

IGCSE English Grammar Past Paper

55. If we go to the park, _____ you like to come too ?

- A) shall
- B) are
- C) would
- D) am

Answer: C

56. It is certain that human beings _____ latent power of which they are only vaguely aware

- A) exhibit
- B) possess
- C) impose
- D) knowledge

Answer: B

57. Words such as 'UNESCO' and 'RADAR' are instances of ?

- A) Compounding
- B) Acronym
- C) Reduplicates
- D) Conversion

Answer: B

58. Words such as 'edit' and 'house keep' are instances of ?

- A) Compounding
- B) Portmanteau
- C) Derivation
- D) Backformation

Answer: D

59. Words such as 'smog' and 'motel' are instances of ?

- A) Compounding
- B) Portmanteau
- C) Derivation
- D) Backformation

Answer: B

60. is a process of word formation whereby new words are formed by subtracting a root by deleting final syllable which is misunderstood as a suffix?

- A) Compounding
- B) Portmanteau
- C) Derivation
- D) Backformation

Answer: D

IGCSE English Grammar Past Paper

61. involves a different analysis of the structure of the word by attaching a consonant at the end of a word or a vowel at the beginning of the next word

- A) Portmanteau
- B) Onomatopoeia
- C) Clipping
- D) Meta analysis

Answer: D

62. Idiom “Star Crossed” is _____ ?

- A) Unlucky
- B) Lucky
- C) Hard worker
- D) None of these

Answer: A)

63. Choose the meaning of idiom: “To break a lance with”.

- A) To entertain friends
- B) To fail or to miscarry
- C) To engage in a competition
- D) Get up to be involved in something

Answer: C)

64. Choose the correct meaning of idiom ” between sylla and charybids”

- A) Between two great difficulties
- B) Between two great opportunities
- C) In a confused situation
- D) None of these

Answer: A

65. Choose the correct meaning of idiom ” Leave in the Lurch” :

- A) A difficult situation
- B) To meet suddenly with someone
- C) To leave someone in difficulty
- D) To assist someone in adverse circumstances

Answer: C

66. Choose the correct collocation:

The politician gave a _____ speech, captivating the audience with his eloquence.

- A) Vivid
- B) Tremendous
- C) Resilient
- D) Colossal

Correct Answer: A

IGCSE English Grammar Past Paper

67. Identify the appropriate collocation:

The artist's paintings were characterized by a _____ blend of colors, creating a visually stunning effect.

- A) Haphazard
- B) Meticulous
- C) Callous
- D) Pernicious

Correct Answer: B)

68. Select the correct collocation:

The scientist conducted a _____ experiment to validate the groundbreaking hypothesis.

- A) Flagrant
- B) Pioneering
- C) Ineffable
- D) Languid

Correct Answer: B

69. Choose the appropriate collocation:

Her _____ decision to resign shocked the entire company.

- A) Audacious
- B) Cacophonous
- C) Sagacious
- D) Salubrious

Correct Answer: A)

70. Identify the correct collocation:

The novel featured a _____ plot, full of unexpected twists and turns.

- A) Banal
- B) Intricate
- C) Lethargic
- D) Serene

Correct Answer: B)

71. Select the proper collocation:

The athlete displayed _____ strength during the intense training sessions.

- A) Inherent
- B) Conspicuous
- C) Inefficacious
- D) Superfluous

Correct Answer: A)

72. Choose the correct collocation:

The students showed _____ enthusiasm for the challenging mathematics competition.

- A) Ingrained
- B) Lackadaisical
- C) Ambivalent

IGCSE English Grammar Past Paper

D) Zealous

Correct Answer: D

73. Identify the appropriate collocation:

The chef's _____ approach to culinary arts resulted in innovative and delicious dishes.

A) Avant-garde

B) Stalwart

C) Mellifluous

D) Capricious

Correct Answer: A)

74. Select the correct collocation:

The storm caused _____ damage to the coastal town, leaving residents in shock.

A) Cataclysmic

B) Serendipitous

C) Facetious

D) Nebulous

Correct Answer: A)

75. Choose the appropriate collocation:

The professor delivered a lecture with _____ precision, leaving the students deeply impressed.

A) Concise

B) Unruly

C) Juxtaposed

D) Cacophonous

Correct Answer: A)

76. The doctor had examined him.

A) He was examined by the doctor.

B) He has been examined by the doctor.

C) He had been examined by the doctor.

D) None of these

Answer: C

77. She does not like tea.

A) Tea is not liked by her.

B) Tea have not liked by her.

C) Tea was not liked by her.

D) Tea did not liked by her.

Answer: A)

78. Which sentence is in the passive voice?

A) The chef cooked a delicious meal.

B) A delicious meal was cooked by the chef.

C) Cooking a delicious meal, the chef was skilled.

IGCSE English Grammar Past Paper

D) The chef is cooking a delicious meal.

Answer: B)

79. Identify the active voice sentence:

A) The ancient manuscript was carefully restored by the librarian.

B) Carefully restored by the librarian was the ancient manuscript.

C) The librarian carefully restored the ancient manuscript.

D) The ancient manuscript has been carefully restored.

Answer: C)

80. Choose the correct passive form:

A) They have already chosen the leader.

B) The leader has already been chosen by them.

C) Already the leader has been chosen by them.

D) They already choosing the leader.

Answer: B)

81. A group of giraffe is known as: _____?

A) Tower

B) Herd

C) Flock

D) None of these

Answer: A)

82. Choose the most suitable word: An office or post with no work but high pay:

A) Honorary

B) Sinecure

C) Gratis

D) Ex-Officio

Answer: B)

83. Through which light cannot pass?

A) Dull

B) Dark

C) Obscure

D) Opaque

Answer: D)

84. A leady who remains unmarried?

A) Bachelor

B) Misanthrope

C) Spinster

D) None of these

Answer: C)

85. The original inhabitants of a Country.

IGCSE English Grammar Past Paper

- A) Aborigines
- B) Citizens
- C) Natives
- D) Primitive

Answer: A)

86. A Group of birds or a flock flying together in hundreds or even in thousands is called _____ ?

- A) Startling
- B) Murmuration
- C) Both A and B
- D) None of these

Answer: B)

87. One who lacks knowledge _____ ?

- A) Intelligent
- B) Ignorant
- C) Credulous
- D) Colleague

Answer: B)

88. A part of a word that can be pronounced separately ?

- A) Particle
- B) Sibilant
- C) Syllable
- D) Letter

Answer: C)

89. One who travels from place to place ?

- A) Itinerant
- B) Mendicant
- C) Journeyman
- D) Tramp

Answer: A)

90. The practice of taking someone else's work or ideas and passing them off as one's own is known as _____ ?

- A) Cuckold
- B) Despotism
- C) Plagiarism
- D) Epicure

Answer: C)

91. A person who talks in his/her sleep is known as _____ ?

- A) Bourgeois

IGCSE English Grammar Past Paper

- B) Insomnist
- C) ventriloquist
- D) Somniloquist

Answer:D)

92. secretly listening to a conversation is called _____?

- A) Eavesdrop
- B) Overhearing
- C) Pigeonholing
- D) Spying

Answer:A)

93. A disease that is liable to be transmitted to people through the environment is known as _____?

- A) Contagious
- B) Infectious
- C) Fatal
- D) Incurable

Answer: B)

94. A disease spreading from one person or organism to another by contact is known as _____?

- A) Contagious
- B) Infectious
- C) Unanimous
- D) Fatal

Answer: A)

95. "Reflections on Language" is a book written by Noam Chomsky in _____ ?

- A) 1975
- B) 1976
- C) 1977
- D) 1988

Answer: A

96. "The Syntactic Structures" is a book written by Noam Chomsky in _____ ?

- A) 1957
- B) 1958
- C) 1959
- D) 1960

Answer: A

97. The study of relationships between two or more languages and the investigation whether the common languages have a common ancestor is called _____ ?

IGCSE English Grammar Past Paper

- A) Psycho linguistics
- B) Sociolinguistics
- C) Comparative linguistics
- D) None of these

Answer: C

98. Morphology is the branch of linguistics which deals with?

- A) The study of the structure of sounds and symbols.
- B) Study of the structure of letters.
- C) The study of the structure of words
- D) N. O. T

Answer: C

99. Which among the following is an example acronym ?

- A) Smog
- B) UNESCO
- C) Buzz
- D) Edit

Answer: B

100. Which among the following is an example for portmanteau ?

- A) Smog
- B) UNESCO
- C) Buzz
- D) Edit

Answer: A

O-Levels English Grammar Past Paper

1. Antonym of ARTIFICIAL is _____?

- A) Red
- B) Solid
- C) Truthful
- D) Natural

Answer: D

2. Choose the correct homonym:

The company produces high-quality _____ for construction.

- A) Steal
- B) Steel

Correct Answer: B)

3. Identify the correct homophone:

I cannot _____ what he is saying because of the loud music.

- A) Here
- B) Hear

Correct Answer: B)

4. Select the appropriate homonym:

The _____ of the novel is set in the 19th century.

- A) Tail
- B) Tale

Correct Answer: B)

5. Choose the correct homophone:

We need to _____ for the upcoming exam.

- A) Revise
- B) Review

Correct Answer: A)

6. Identify the correct homonym:

The cat chased it's _____ as if it were a prey.

- A) Tale
- B) Tail

Correct Answer: B)

7. Choose the correct homonym:

The artist used a _____ brush to create fine details in the painting.

- A) Fine
- B) Fein

Correct Answer: A)

8. Identify the nominalized form:

The team made a _____ of the proposed changes.

O-Levels English Grammar Past Paper

- A) Proposal
- B) Propose
- C) Proposing

Correct Answer: A)

9. Choose the correct nominalization:

The _____ of the project was a significant achievement for the research team.

- A) Complete
- B) Completion
- C) Completely

Correct Answer: B)

10. Identify the nominalized form:

Her _____ in the negotiation process was commendable.

- A) Participate
- B) Participation
- C) Participating

Correct Answer: B)

11. Choose the correct nominalization:

The _____ of the new law raised concerns among citizens.

- A) Implementing
- B) Implementation
- C) Implement

Correct Answer: B)

12. Identify the nominalized form:

The _____ of the historical artifacts was carefully documented by the archaeologists.

- A) Discover
- B) Discovery
- C) Discovering

Correct Answer: B)

13. The _____ of the new policy led to improved efficiency in the workplace.

- A) Implement
- B) Implementation
- C) Implementing

Correct Answer: B)

14. Identify the nominalized form:

The _____ of the novel won several literary awards.

- A) Write
- B) Writer
- C) Writing

Answer: C)

O-Levels English Grammar Past Paper

15. Antonym of ENORMOUS is _____?

- A) Fragile
- B) Weak
- C) Tiny
- D) Soft

Answer: C

16. Antonym of RECONDITE is _____?

- A) Hermetic
- B) Manifest
- C) Pedantic
- D) Occult

Answer: B

17. Modals:

- A) She must finish the assignment by tomorrow.
- B) She finished the assignment by tomorrow.
- C) She will finish the assignment by tomorrow.
- D) She finishing the assignment by tomorrow.

Answer: C)

18. Use of Passive Voice:

- A) The novel was writing by the famous author.
- B) The famous author was writing the novel.
- C) Writing the novel, the famous author was skilled.
- D) The famous author wrote the novel.

Answer: B)

19. Subject-Verb Concord:

- A) Each of the students has completed their homework.
- B) Each of the students have completed their homework.
- C) Each of the students has completed his or her homework.
- D) Each of the students have completed his homework.

Answer: C)

20. Reporting Commands and Requests:

- A) He said, "Do not disturb."
- B) He said, "Disturb not."
- C) He said, "Don't disturb."
- D) He said, "Disturb please."

Answer: C)

21. Statements:

- A) The moon revolves around the earth.
- B) Does the moon revolve around the earth?
- C) Revolving around the earth is the moon.

O-Levels English Grammar Past Paper

D) Around the earth, does the moon revolve?

Answer: A)

22. "Hit the hay" typically means:

- A) Planting crops
- B) Going to bed
- C) Exercising
- D) Building a fence

Correct Answer: B)

23. If something "costs an arm and a leg," it is:

- A) Very cheap
- B) Affordable
- C) Moderately priced
- D) Very expensive

Correct Answer: D)

24. "Bite the bullet" means to:

- A) Chew on a metal object
- B) Face a difficult situation with courage
- C) Avoid challenges
- D) Take a break from work

Correct Answer: B)

25. When someone suggests to "jump on the bandwagon," they are encouraging you to:

- A) Join a traveling musical group
- B) Adopt a popular trend or activity
- C) Criticize others
- D) Start a new project

Correct Answer: B)

26. "The ball is in your court" implies that:

- A) You are playing a game
- B) It's time for you to make a decision or take action
- C) You have lost control
- D) You should pass the responsibility to someone else

Correct Answer: B)

27. To "cut to the chase" means to:

- A) Trim a piece of fabric
- B) Skip the introduction and get to the main point
- C) Start a race
- D) Solve a mystery

Correct Answer: B)

28. If someone mentions "the whole nine yards," they are referring to:

O-Levels English Grammar Past Paper

- A) A long distance
- B) A complete or exhaustive effort
- C) Nine specific items
- D) A short duration

Correct Answer: B)

29. Some rooms don't have curtains at the windows, they have

- A) blinds
- B) carpets
- C) gates

Answer: A)

30. "To be, or not to be? That is the question-" is a famous quote in William Shakespeare's play

- A) Othello
- B) Hamlet
- C) Macbeth

Answer: B)

31. Robin Hood was a heroic outlaw in English folklore who became known for "robbing from the rich and giving to the poor", assisted by a group of fellow outlaws known as his

- A) Merry Men
- B) Wise Men
- C) Robbers

Answer: A)

32. After decades of neglect, government schools are finally making a fresh start with much-needed improvements to facilities and teaching methods.

- A) Improvising the old thought
- B) Grabbing the eyeballs
- C) Starting something in a new and different way
- D) Giving a jumpstart

Answer: D

33. They thought that Ria would simply give up if her complaint had to go to the court. Now, she will realize that they have caught a Tartar!

- A) Dealing with an expert
- B) Forced to leave something
- C) Dealing with a troublesome person
- D) Wasting time

Answer: C)

34. Timothy finally _____ at the wedding.

- A) showed up
- B) buck up
- C) give up

O-Levels English Grammar Past Paper

Answer: A)

35. Never _____ on your dreams.

- A) showed up
- B) buck up
- C) give up

Answer: c)

36. _____ the room before you leave to play.

- A) Clean up
- B) Showed up
- C) Buck up

Answer: A)

37. The convict is trying to _____ a story.

- A) Make up
- B) Clean up
- C) Showed up

Answer: A)

38. Mark Antony's speech _____ the Roman people.

- A) Worked up
- B) Showed up
- C) Made up

Answer: A)

39. The convention was _____ due to the pandemic.

- A) called off
- B) cancelled off
- C) both of them

Answer: A)

40. Timothy finally _____ at the wedding.

- A) showed up
- B) buck up
- C) give up

Answer: A)

41. Identify the correct homonym:

The criminal tried to _____ from the scene of the crime.

- A) Steal
- B) Steel

Correct Answer: A)

42. Select the appropriate homophone:

His _____ reaction to the news surprised everyone.

O-Levels English Grammar Past Paper

- A) Affect
- B) Effect

Correct Answer: A)

43. Antonym of GUMPTION is _____?

- A) Apathy
- B) Nerve
- C) Initiative
- D) Sagacity

Answer: A)

44. Ocean currents play a _____ role in setting long-term climate _____.

- A) vital ... date
- B) important ... variations
- C) major ... patterns
- D) unusual ... changes

Answer: C)

45. I promise to _____ you in all circumstances

- A) stand up to
- B) stand with
- C) stand off
- D) stand by

Answer: B

46. It's difficult _____ reconcile such different points of view

- A) with
- B) to
- C) in
- D) on

Answer: B

47. The speaker did not properly space out his speech, but went on _____ one point only.

- A) stressing
- B) avoiding
- C) devoting
- D) decrying

Answer: A)

48. In the test, we will _____ your work and then give you detailed feedback.

- A) assess
- B) judge
- C) measure
- D) check

O-Levels English Grammar Past Paper

Answer: A

49. A speed limit is the _____ legal speed that you can travel on the road.

- A) highest
- B) biggest
- C) maximum
- D) longest

Answer: C

50. The President's speech was so _____ that many people were persuaded to accept the need for change.

- A) expressive
- B) articulate
- C) eloquent
- D) calm

Answer: C

51. There is something wonderful _____ him.

- A) of
- B) about
- C) for
- D) inside

Answer: B)

52. If she is not interested, we will _____ the proposal.

- A) vaccant
- B) abandon
- C) impulse
- D) remove

Answer: B

53. The police forces have launched an operation to _____ out the kidnapped person

- A) track
- B) touch
- C) nib
- D) trace

Answer: D

54. Some people _____ to the officer against him about his mis-deeds

- A) asked
- B) complained
- C) question
- D) informed

Answer: B

O-Levels English Grammar Past Paper

55. If we go to the park, _____ you like to come too ?

- A) shall
- B) are
- C) would
- D) am

Answer: C

56. It is certain that human beings _____ latent power of which they are only vaguely aware

- A) exhibit
- B) possess
- C) impose
- D) knowledge

Answer: B

57. Words such as 'UNESCO' and 'RADAR' are instances of ?

- A) Compounding
- B) Acronym
- C) Reduplicates
- D) Conversion

Answer: B

58. Words such as 'edit' and 'house keep' are instances of ?

- A) Compounding
- B) Portmanteau
- C) Derivation
- D) Backformation

Answer: D

59. Words such as 'smog' and 'motel' are instances of ?

- A) Compounding
- B) Portmanteau
- C) Derivation
- D) Backformation

Answer: B

60. is a process of word formation whereby new words are formed by subtracting a root by deleting final syllable which is misunderstood as a suffix?

- A) Compounding
- B) Portmanteau
- C) Derivation
- D) Backformation

Answer: D

O-Levels English Grammar Past Paper

61. involves a different analysis of the structure of the word by attaching a consonant at the end of a word or a vowel at the beginning of the next word

- A) Portmanteau
- B) Onomatopoeia
- C) Clipping
- D) Meta analysis

Answer: D

62. Idiom “Star Crossed” is _____ ?

- A) Unlucky
- B) Lucky
- C) Hard worker
- D) None of these

Answer: A)

63. Choose the meaning of idiom: “To break a lance with”.

- A) To entertain friends
- B) To fail or to miscarry
- C) To engage in a competition
- D) Get up to be involved in something

Answer: C)

64. Choose the correct meaning of idiom ” between sylla and charybids”

- A) Between two great difficulties
- B) Between two great opportunities
- C) In a confused situation
- D) None of these

Answer: A

65. Choose the correct meaning of idiom ” Leave in the Lurch” :

- A) A difficult situation
- B) To meet suddenly with someone
- C) To leave someone in difficulty
- D) To assist someone in adverse circumstances

Answer: C

66. Choose the correct collocation:

The politician gave a _____ speech, captivating the audience with his eloquence.

- A) Vivid
- B) Tremendous
- C) Resilient
- D) Colossal

Correct Answer: A

O-Levels English Grammar Past Paper

67. Identify the appropriate collocation:

The artist's paintings were characterized by a _____ blend of colors, creating a visually stunning effect.

- A) Haphazard
- B) Meticulous
- C) Callous
- D) Pernicious

Correct Answer: B)

68. Select the correct collocation:

The scientist conducted a _____ experiment to validate the groundbreaking hypothesis.

- A) Flagrant
- B) Pioneering
- C) Ineffable
- D) Languid

Correct Answer: B

69. Choose the appropriate collocation:

Her _____ decision to resign shocked the entire company.

- A) Audacious
- B) Cacophonous
- C) Sagacious
- D) Salubrious

Correct Answer: A)

70. Identify the correct collocation:

The novel featured a _____ plot, full of unexpected twists and turns.

- A) Banal
- B) Intricate
- C) Lethargic
- D) Serene

Correct Answer: B)

71. Select the proper collocation:

The athlete displayed _____ strength during the intense training sessions.

- A) Inherent
- B) Conspicuous
- C) Inefficacious
- D) Superfluous

Correct Answer: A)

72. Choose the correct collocation:

The students showed _____ enthusiasm for the challenging mathematics competition.

- A) Ingrained
- B) Lackadaisical
- C) Ambivalent

O-Levels English Grammar Past Paper

D) Zealous

Correct Answer: D

73. Identify the appropriate collocation:

The chef's _____ approach to culinary arts resulted in innovative and delicious dishes.

A) Avant-garde

B) Stalwart

C) Mellifluous

D) Capricious

Correct Answer: A)

74. Select the correct collocation:

The storm caused _____ damage to the coastal town, leaving residents in shock.

A) Cataclysmic

B) Serendipitous

C) Facetious

D) Nebulous

Correct Answer: A)

75. Choose the appropriate collocation:

The professor delivered a lecture with _____ precision, leaving the students deeply impressed.

A) Concise

B) Unruly

C) Juxtaposed

D) Cacophonous

Correct Answer: A)

76. The doctor had examined him.

A) He was examined by the doctor.

B) He has been examined by the doctor.

C) He had been examined by the doctor.

D) None of these

Answer: C

77. She does not like tea.

A) Tea is not liked by her.

B) Tea have not liked by her.

C) Tea was not liked by her.

D) Tea did not liked by her.

Answer: A)

78. Which sentence is in the passive voice?

A) The chef cooked a delicious meal.

B) A delicious meal was cooked by the chef.

C) Cooking a delicious meal, the chef was skilled.

O-Levels English Grammar Past Paper

D) The chef is cooking a delicious meal.

Answer: B)

79. Identify the active voice sentence:

A) The ancient manuscript was carefully restored by the librarian.

B) Carefully restored by the librarian was the ancient manuscript.

C) The librarian carefully restored the ancient manuscript.

D) The ancient manuscript has been carefully restored.

Answer: C)

80. Choose the correct passive form:

A) They have already chosen the leader.

B) The leader has already been chosen by them.

C) Already the leader has been chosen by them.

D) They already choosing the leader.

Answer: B)

81. A group of giraffe is known as: _____?

A) Tower

B) Herd

C) Flock

D) None of these

Answer: A)

82. Choose the most suitable word: An office or post with no work but high pay:

A) Honorary

B) Sinecure

C) Gratis

D) Ex-Officio

Answer: B)

83. Through which light cannot pass?

A) Dull

B) Dark

C) Obscure

D) Opaque

Answer: D)

84. A leady who remains unmarried?

A) Bachelor

B) Misanthrope

C) Spinster

D) None of these

Answer: C)

85. The original inhabitants of a Country.

O-Levels English Grammar Past Paper

- A) Aborigines
- B) Citizens
- C) Natives
- D) Primitive

Answer: A)

86. A Group of birds or a flock flying together in hundreds or even in thousands is called _____ ?

- A) Startling
- B) Murmuration
- C) Both A and B
- D) None of these

Answer: B)

87. One who lacks knowledge _____ ?

- A) Intelligent
- B) Ignorant
- C) Credulous
- D) Colleague

Answer: B)

88. A part of a word that can be pronounced separately ?

- A) Particle
- B) Sibilant
- C) Syllable
- D) Letter

Answer: C)

89. One who travels from place to place ?

- A) Itinerant
- B) Mendicant
- C) Journeyman
- D) Tramp

Answer: A)

90. The practice of taking someone else's work or ideas and passing them off as one's own is known as _____ ?

- A) Cuckold
- B) Despotism
- C) Plagiarism
- D) Epicure

Answer: C)

91. A person who talks in his/her sleep is known as _____ ?

- A) Bourgeois

O-Levels English Grammar Past Paper

- B) Insomnist
- C) ventriloquist
- D) Somniloquist

Answer:D)

92. secretly listening to a conversation is called _____?

- A) Eavesdrop
- B) Overhearing
- C) Pigeonholing
- D) Spying

Answer:A)

93. A disease that is liable to be transmitted to people through the environment is known as _____?

- A) Contagious
- B) Infectious
- C) Fatal
- D) Incurable

Answer: B)

94. A disease spreading from one person or organism to another by contact is known as _____?

- A) Contagious
- B) Infectious
- C) Unanimous
- D) Fatal

Answer: A)

95. "Reflections on Language" is a book written by Noam Chomsky in _____ ?

- A) 1975
- B) 1976
- C) 1977
- D) 1988

Answer: A

96. "The Syntactic Structures" is a book written by Noam Chomsky in _____ ?

- A) 1957
- B) 1958
- C) 1959
- D) 1960

Answer: A

97. The study of relationships between two or more languages and the investigation whether the common languages have a common ancestor is called _____ ?

O-Levels English Grammar Past Paper

- A) Psycho linguistics
- B) Sociolinguistics
- C) Comparative linguistics
- D) None of these

Answer: C

98. Morphology is the branch of linguistics which deals with?

- A) The study of the structure of sounds and symbols.
- B) Study of the structure of letters.
- C) The study of the structure of words
- D) N. O. T

Answer: C

99. Which among the following is an example acronym ?

- A) Smog
- B) UNESCO
- C) Buzz
- D) Edit

Answer: B

100. Which among the following is an example for portmanteau ?

- A) Smog
- B) UNESCO
- C) Buzz
- D) Edit

Answer: A

A-Levels English Grammar Past Paper

1. is a process of word formation wherein new words are coined by combining the segments of two different existing words?

- A) Compounding
- B) Portmanteau
- C) Derivation

Answer: B

2. The /d/ in 'middle' is an instance of ?

- A) Lateral plosion
- B) Alveolar plosion
- C) Nasal plosion
- D) Incomplete plosion.

Answer: A

3. A person fluent in two languages is known as _____?

- A) Bilingual
- B) Bigot
- C) Bigamy

Answer: A

4. The action or practice of persuading someone to do something by using force or Threats is known as _____?

- A) Coercion
- B) Conviction
- C) Cajolement

Answer: A

5. A narrow piece of land connecting two large masses of land is known as _____?

- A) Gulf
- B) Isthmus
- C) Peninsula

Answer: B

6. Government by a small group of all powerful persons is known as _____?

- A) Dictatorship
- B) Monarchy
- C) Oligarchy

Answer: C

7. A person who helps another commit a crime is known as _____?

- A) Accomplice
- B) Amateur
- C) Cuckold

Answer: A

A-Levels English Grammar Past Paper

8. The team made a _____ of the proposed changes.

- A) Proposal
- B) Propose
- C) Proposing

Answer: A)

9. Choose the correct nominalization:

The _____ of the project was a significant achievement for the research team.

- A) Complete
- B) Completion
- C) Completely

Answer: B)

10. Identify the nominalized form:

Her _____ in the negotiation process was commendable.

- A) Participate
- B) Participation
- C) Participating

Answer: B)

11. Choose the correct nominalization:

The _____ of the new law raised concerns among citizens.

- A) Implementing
- B) Implementation
- C) Implement

Correct Answer: B)

12. Identify the nominalized form:

The _____ of the historical artifacts was carefully documented by the archaeologists.

- A) Discover
- B) Discovery
- C) Discovering

Correct Answer: B)

13. The _____ of the new policy led to improved efficiency in the workplace.

- A) Implement
- B) Implementation
- C) Implementing

Correct Answer: B)

14. Identify the nominalized form:

The _____ of the novel won several literary awards.

- A) Write
- B) Writer
- C) Writing

A-Levels English Grammar Past Paper

Answer: C)

15. Antonym of ENORMOUS is _____?

- A) Fragile
- B) Weak
- C) Tiny
- D) Soft

Answer: C

16. Antonym of RECONDITE is _____?

- A) Hermetic
- B) Manifest
- C) Pedantic
- D) Occult

Answer: B

17. Modals:

- A) She must finish the assignment by tomorrow.
- B) She finished the assignment by tomorrow.
- C) She will finish the assignment by tomorrow.
- D) She finishing the assignment by tomorrow.

Answer: C)

18. Use of Passive Voice:

- A) The novel was writing by the famous author.
- B) The famous author was writing the novel.
- C) Writing the novel, the famous author was skilled.
- D) The famous author wrote the novel.

Answer: B)

19. Subject-Verb Concord:

- A) Each of the students has completed their homework.
- B) Each of the students have completed their homework.
- C) Each of the students has completed his or her homework.
- D) Each of the students have completed his homework.

Answer: C)

20. Reporting Commands and Requests:

- A) He said, "Do not disturb."
- B) He said, "Disturb not."
- C) He said, "Don't disturb."
- D) He said, "Disturb please."

Answer: C)

21. Statements:

- A) The moon revolves around the earth.

A-Levels English Grammar Past Paper

- B) Does the moon revolve around the earth?
- C) Revolving around the earth is the moon.
- D) Around the earth, does the moon revolve?

Answer: A)

22. "Hit the hay" typically means:

- A) Planting crops
- B) Going to bed
- C) Exercising
- D) Building a fence

Correct Answer: B)

23. If something "costs an arm and a leg," it is:

- A) Very cheap
- B) Affordable
- C) Moderately priced
- D) Very expensive

Correct Answer: D)

24. "Bite the bullet" means to:

- A) Chew on a metal object
- B) Face a difficult situation with courage
- C) Avoid challenges
- D) Take a break from work

Correct Answer: B)

25. When someone suggests to "jump on the bandwagon," they are encouraging you to:

- A) Join a traveling musical group
- B) Adopt a popular trend or activity
- C) Criticize others
- D) Start a new project

Correct Answer: B)

26. "The ball is in your court" implies that:

- A) You are playing a game
- B) It's time for you to make a decision or take action
- C) You have lost control
- D) You should pass the responsibility to someone else

Correct Answer: B)

27. To "cut to the chase" means to:

- A) Trim a piece of fabric
- B) Skip the introduction and get to the main point
- C) Start a race
- D) Solve a mystery

Correct Answer: B)

A-Levels English Grammar Past Paper

28. If someone mentions "the whole nine yards," they are referring to:

- A) A long distance
- B) A complete or exhaustive effort
- C) Nine specific items
- D) A short duration

Correct Answer: B)

29. Some rooms don't have curtains at the windows, they have

- A) blinds
- B) carpets
- C) gates

Answer: A)

30. "To be, or not to be? That is the question-" is a famous quote in William Shakespeare's play

- A) Othello
- B) Hamlet
- C) Macbeth

Answer: B)

31. Robin Hood was a heroic outlaw in English folklore who became known for "robbing from the rich and giving to the poor", assisted by a group of fellow outlaws known as his

- A) Merry Men
- B) Wise Men
- C) Robbers

Answer: A)

32. After decades of neglect, government schools are finally making a fresh start with much-needed improvements to facilities and teaching methods.

- A) Improvising the old thought
- B) Grabbing the eyeballs
- C) Starting something in a new and different way
- D) Giving a jumpstart

Answer: D

33. They thought that Ria would simply give up if her complaint had to go to the court. Now, she will realize that they have caught a Tartar!

- A) Dealing with an expert
- B) Forced to leave something
- C) Dealing with a troublesome person
- D) Wasting time

Answer: C)

34. Timothy finally _____ at the wedding.

- A) showed up

A-Levels English Grammar Past Paper

B) buck up

C) give up

Answer: A)

35. Never _____ on your dreams.

A) showed up

B) buck up

C) give up

Answer: c)

36. _____ the room before you leave to play.

A) Clean up

B) Showed up

C) Buck up

Answer: A)

37. The convict is trying to _____ a story.

A) Make up

B) Clean up

C) Showed up

Answer: A)

38. Mark Antony's speech _____ the Roman people.

A) Worked up

B) Showed up

C) Made up

Answer: A)

39. The convention was _____ due to the pandemic.

A) called off

B) cancelled off

C) both of them

Answer: A)

40. Timothy finally _____ at the wedding.

A) showed up

B) buck up

C) give up

Answer: A)

41. Identify the correct homonym:

The criminal tried to _____ from the scene of the crime.

A) Steal

B) Steel

Correct Answer: A)

A-Levels English Grammar Past Paper

42. Select the appropriate homophone:

His _____ reaction to the news surprised everyone.

- A) Affect
- B) Effect

Correct Answer: A)

43. Antonym of GUMPTION is _____?

- A) Apathy
- B) Nerve
- C) Initiative
- D) Sagacity

Answer: A)

44. Ocean currents play a _____ role in setting long-term climate_____.

- A) vital ... date
- B) important ... variations
- C) major ... patterns
- D) unusual ... changes

Answer: C)

45. I promise to _____ you in all circumstances

- A) stand up to
- B) stand with
- C) stand off
- D) stand by

Answer: B

46. It's difficult _____ reconcile such different points of view

- A) with
- B) to
- C) in
- D) on

Answer: B

47. The speaker did not properly space out his speech, but went on _____ one point only.

- A) stressing
- B) avoiding
- C) devoting
- D) decrying

Answer: A)

48. In the test, we will _____ your work and then give you detailed feedback.

- A) assess
- B) judge

A-Levels English Grammar Past Paper

- C) measure
- D) check

Answer: A

49. A speed limit is the _____ legal speed that you can travel on the road.

- A) highest
- B) biggest
- C) maximum
- D) longest

Answer: C

50. The President's speech was so _____ that many people were persuaded to accept the need for change.

- A) expressive
- B) articulate
- C) eloquent
- D) calm

Answer: C

51. There is something wonderful _____ him.

- A) of
- B) about
- C) for
- D) inside

Answer: B)

52. If she is not interested, we will _____ the proposal.

- A) vaccant
- B) abandon
- C) impulse
- D) remove

Answer: B

53. The police forces have launched an operation to _____ out the kidnapped person

- A) track
- B) touch
- C) nib
- D) trace

Answer: D

54. Some people _____ to the officer against him about his mis-deeds

- A) asked
- B) complained
- C) question
- D) informed

A-Levels English Grammar Past Paper

Answer: B

55. If we go to the park, _____ you like to come too ?

- A) shall
- B) are
- C) would
- D) am

Answer: C

56. It is certain that human beings _____ latent power of which they are only vaguely aware

- A) exhibit
- B) possess
- C) impose
- D) knowledge

Answer: B

57. Words such as 'UNESCO' and 'RADAR' are instances of ?

- A) Compounding
- B) Acronym
- C) Reduplicates
- D) Conversion

Answer: B

58. Words such as 'edit' and 'house keep' are instances of ?

- A) Compounding
- B) Portmanteau
- C) Derivation
- D) Backformation

Answer: D

59. Words such as 'smog' and 'motel' are instances of ?

- A) Compounding
- B) Portmanteau
- C) Derivation
- D) Backformation

Answer: B

60. is a process of word formation whereby new words are formed by subtracting a root by deleting final syllable which is misunderstood as a suffix?

- A) Compounding
- B) Portmanteau
- C) Derivation

A-Levels English Grammar Past Paper

D) Backformation

Answer: D

61. involves a different analysis of the structure of the word by attaching a consonant at the end of a word or a vowel at the beginning of the next word

- A) Portmanteau
- B) Onomatopoeia
- C) Clipping
- D) Meta analysis

Answer: D

62. Idiom “Star Crossed” is _____?

- A) Unlucky
- B) Lucky
- C) Hard worker
- D) None of these

Answer: A)

63. Choose the meaning of idiom: “To break a lance with”.

- A) To entertain friends
- B) To fail or to miscarry
- C) To engage in a competition
- D) Get up to be involved in something

Answer: C)

64. Choose the correct meaning of idiom ” between sylla and charybids”

- A) Between two great difficulties
- B) Between two great opportunities
- C) In a confused situation
- D) None of these

Answer: A

65. Choose the correct meaning of idiom ” Leave in the Lurch” :

- A) A difficult situation
- B) To meet suddenly with someone
- C) To leave someone in difficulty
- D) To assist someone in adverse circumstances

Answer: C

66. Choose the correct collocation:

The politician gave a _____ speech, captivating the audience with his eloquence.

- A) Vivid
- B) Tremendous
- C) Resilient

A-Levels English Grammar Past Paper

D) Colossal

Correct Answer: A

67. Identify the appropriate collocation:

The artist's paintings were characterized by a _____ blend of colors, creating a visually stunning effect.

A) Haphazard

B) Meticulous

C) Callous

D) Pernicious

Correct Answer: B)

68. Select the correct collocation:

The scientist conducted a _____ experiment to validate the groundbreaking hypothesis.

A) Flagrant

B) Pioneering

C) Ineffable

D) Languid

Correct Answer: B

69. Choose the appropriate collocation:

Her _____ decision to resign shocked the entire company.

A) Audacious

B) Cacophonous

C) Sagacious

D) Salubrious

Correct Answer: A)

70. Identify the correct collocation:

The novel featured a _____ plot, full of unexpected twists and turns.

A) Banal

B) Intricate

C) Lethargic

D) Serene

Correct Answer: B)

71. Select the proper collocation:

The athlete displayed _____ strength during the intense training sessions.

A) Inherent

B) Conspicuous

C) Inefficacious

D) Superfluous

Correct Answer: A)

72. Choose the correct collocation:

The students showed _____ enthusiasm for the challenging mathematics competition.

A-Levels English Grammar Past Paper

- A) Ingrained
- B) Lackadaisical
- C) Ambivalent
- D) Zealous

Correct Answer: D

73. Identify the appropriate collocation:

The chef's _____ approach to culinary arts resulted in innovative and delicious dishes.

- A) Avant-garde
- B) Stalwart
- C) Mellifluous
- D) Capricious

Correct Answer: A)

74. Select the correct collocation:

The storm caused _____ damage to the coastal town, leaving residents in shock.

- A) Cataclysmic
- B) Serendipitous
- C) Facetious
- D) Nebulous

Correct Answer: A)

75. Choose the appropriate collocation:

The professor delivered a lecture with _____ precision, leaving the students deeply impressed.

- A) Concise
- B) Unruly
- C) Juxtaposed
- D) Cacophonous

Correct Answer: A)

76. The doctor had examined him.

- A) He was examined by the doctor.
- B) He has been examined by the doctor.
- C) He had been examined by the doctor.
- D) None of these

Answer: C

77. She does not like tea.

- A) Tea is not liked by her.
- B) Tea have not liked by her.
- C) Tea was not liked by her.
- D) Tea did not liked by her.

Answer: A)

78. Which sentence is in the passive voice?

A-Levels English Grammar Past Paper

- A) The chef cooked a delicious meal.
- B) A delicious meal was cooked by the chef.
- C) Cooking a delicious meal, the chef was skilled.
- D) The chef is cooking a delicious meal.

Answer: B)

79. Identify the active voice sentence:

- A) The ancient manuscript was carefully restored by the librarian.
- B) Carefully restored by the librarian was the ancient manuscript.
- C) The librarian carefully restored the ancient manuscript.
- D) The ancient manuscript has been carefully restored.

Answer: C)

80. Choose the correct passive form:

- A) They have already chosen the leader.
- B) The leader has already been chosen by them.
- C) Already the leader has been chosen by them.
- D) They already choosing the leader.

Answer: B)

81. A group of giraffe is known as:_____?

- A) Tower
- B) Herd
- C) Flock
- D) None of these

Answer: A)

82. Choose the most suitable word: An office or post with no work but high pay:

- A) Honorary
- B) Sinecure
- C) Gratis
- D) Ex-Officio

Answer: B)

83. Through which light cannot pass?

- A) Dull
- B) Dark
- C) Obscure
- D) Opaque

Answer: D)

84. A leady who remains unmarried?

- A) Bachelor
- B) Misanthrope
- C) Spinster
- D) None of these

A-Levels English Grammar Past Paper

Answer: C)

85. The original inhabitants of a Country.

- A) Aborigines
- B) Citizens
- C) Natives
- D) Primitive

Answer: A)

86. A Group of birds or a flock flying together in hundreds or even in thousands is called _____ ?

- A) Startling
- B) Murmuration
- C) Both A and B
- D) None of these

Answer: B)

87. One who lacks knowledge _____ ?

- A) Intelligent
- B) Ignorant
- C) Credulous
- D) Colleague

Answer: B)

88. A part of a word that can be pronounced separately ?

- A) Particle
- B) Sibilant
- C) Syllable
- D) Letter

Answer: C)

89. One who travels from place to place ?

- A) Itinerant
- B) Mendicant
- C) Journeyman
- D) Tramp

Answer: A)

90. The practice of taking someone else's work or ideas and passing them off as one's own is known as _____ ?

- A) Cuckold
- B) Despotism
- C) Plagiarism
- D) Epicure

Answer: C

A-Levels English Grammar Past Paper

91. A person who talks in his/her sleep is known as _____?

- A) Bourgeois
- B) Insomnist
- C) ventriloquist
- D) Somniloquist

Answer:D)

92. secretly listening to a conversation is called _____?

- A) Eavesdrop
- B) Overhearing
- C) Pigeonholing
- D) Spying

Answer:A)

93. A disease that is liable to be transmitted to people through the environment is known as _____?

- A) Contagious
- B) Infectious
- C) Fatal
- D) Incurable

Answer: B)

94. A disease spreading from one person or organism to another by contact is known as _____?

- A) Contagious
- B) Infectious
- C) Unanimous
- D) Fatal

Answer: A)

95. "Reflections on Language" is a book written by Noam Chomsky in _____ ?

- A) 1975
- B) 1976
- C) 1977
- D) 1988

Answer: A

96. "The Syntactic Structures" is a book written by Noam Chomsky in _____ ?

- A) 1957
- B) 1958
- C) 1959
- D) 1960

Answer: A

A-Levels English Grammar Past Paper

97. The study of relationships between two or more languages and the investigation whether the common languages have a common ancestor is called ?

- A) Psycho linguistics
- B) Sociolinguistics
- C) Comparative linguistics
- D) None of these

Answer: C

98. Morphology is the branch of linguistics which deals with?

- A) The study of the structure of sounds and symbols.
- B) Study of the structure of letters.
- C) The study of the structure of words
- D) N. O. T

Answer: C

99. Which among the following is an example acronym ?

- A) Smog
- B) UNESCO
- C) Buzz
- D) Edit

Answer: B

100. Which among the following is an example for portmanteau ?

- A) Smog
- B) UNESCO
- C) Buzz
- D) Edit

Answer: A

IGCSE 1 & 2 English Grammar Past Paper

1. is a process of word formation wherein new words are coined by combining the segments of two different existing words?

- A) Compounding
- B) Portmanteau
- C) Derivation

Answer: B

2. The /d/ in 'middle' is an instance of ?

- A) Lateral plosion
- B) Alveolar plosion
- C) Nasal plosion
- D) Incomplete plosion.

Answer: A

3. A person fluent in two languages is known as _____?

- A) Bilingual
- B) Bigot
- C) Bigamy

Answer: A

4. The action or practice of persuading someone to do something by using force or Threats is known as _____?

- A) Coercion
- B) Conviction
- C) Cajolement

Answer: A

5. A narrow piece of land connecting two large masses of land is known as _____?

- A) Gulf
- B) Isthmus
- C) Peninsula

Answer: B

6. Government by a small group of all powerful persons is known as _____?

- A) Dictatorship
- B) Monarchy
- C) Oligarchy

Answer: C

7. A person who helps another commit a crime is known as _____?

- A) Accomplice
- B) Amateur
- C) Cuckold

Answer: A

IGCSE 1 & 2 English Grammar Past Paper

8. The team made a _____ of the proposed changes.

- A) Proposal
- B) Propose
- C) Proposing

Answer: A)

9. Choose the correct nominalization:

The _____ of the project was a significant achievement for the research team.

- A) Complete
- B) Completion
- C) Completely

Answer: B)

10. Identify the nominalized form:

Her _____ in the negotiation process was commendable.

- A) Participate
- B) Participation
- C) Participating

Answer: B)

11. Choose the correct nominalization:

The _____ of the new law raised concerns among citizens.

- A) Implementing
- B) Implementation
- C) Implement

Correct Answer: B)

12. Identify the nominalized form:

The _____ of the historical artifacts was carefully documented by the archaeologists.

- A) Discover
- B) Discovery
- C) Discovering

Correct Answer: B)

13. The _____ of the new policy led to improved efficiency in the workplace.

- A) Implement
- B) Implementation
- C) Implementing

Correct Answer: B)

14. Identify the nominalized form:

The _____ of the novel won several literary awards.

- A) Write
- B) Writer
- C) Writing

IGCSE 1 & 2 English Grammar Past Paper

Answer: C)

15. Antonym of ENORMOUS is _____?

- A) Fragile
- B) Weak
- C) Tiny
- D) Soft

Answer: C

16. Antonym of RECONDITE is _____?

- A) Hermetic
- B) Manifest
- C) Pedantic
- D) Occult

Answer: B

17. Modals:

- A) She must finish the assignment by tomorrow.
- B) She finished the assignment by tomorrow.
- C) She will finish the assignment by tomorrow.
- D) She finishing the assignment by tomorrow.

Answer: C)

18. Use of Passive Voice:

- A) The novel was writing by the famous author.
- B) The famous author was writing the novel.
- C) Writing the novel, the famous author was skilled.
- D) The famous author wrote the novel.

Answer: B)

19. Subject-Verb Concord:

- A) Each of the students has completed their homework.
- B) Each of the students have completed their homework.
- C) Each of the students has completed his or her homework.
- D) Each of the students have completed his homework.

Answer: C)

20. Reporting Commands and Requests:

- A) He said, "Do not disturb."
- B) He said, "Disturb not."
- C) He said, "Don't disturb."
- D) He said, "Disturb please."

Answer: C)

21. Statements:

- A) The moon revolves around the earth.

IGCSE 1 & 2 English Grammar Past Paper

- B) Does the moon revolve around the earth?
- C) Revolving around the earth is the moon.
- D) Around the earth, does the moon revolve?

Answer: A)

22. "Hit the hay" typically means:

- A) Planting crops
- B) Going to bed
- C) Exercising
- D) Building a fence

Correct Answer: B)

23. If something "costs an arm and a leg," it is:

- A) Very cheap
- B) Affordable
- C) Moderately priced
- D) Very expensive

Correct Answer: D)

24. "Bite the bullet" means to:

- A) Chew on a metal object
- B) Face a difficult situation with courage
- C) Avoid challenges
- D) Take a break from work

Correct Answer: B)

25. When someone suggests to "jump on the bandwagon," they are encouraging you to:

- A) Join a traveling musical group
- B) Adopt a popular trend or activity
- C) Criticize others
- D) Start a new project

Correct Answer: B)

26. "The ball is in your court" implies that:

- A) You are playing a game
- B) It's time for you to make a decision or take action
- C) You have lost control
- D) You should pass the responsibility to someone else

Correct Answer: B)

27. To "cut to the chase" means to:

- A) Trim a piece of fabric
- B) Skip the introduction and get to the main point
- C) Start a race
- D) Solve a mystery

Correct Answer: B)

IGCSE 1 & 2 English Grammar Past Paper

28. If someone mentions "the whole nine yards," they are referring to:

- A) A long distance
- B) A complete or exhaustive effort
- C) Nine specific items
- D) A short duration

Correct Answer: B)

29. Some rooms don't have curtains at the windows, they have

- A) blinds
- B) carpets
- C) gates

Answer: A)

30. "To be, or not to be? That is the question-" is a famous quote in William Shakespeare's play

- A) Othello
- B) Hamlet
- C) Macbeth

Answer: B)

31. Robin Hood was a heroic outlaw in English folklore who became known for "robbing from the rich and giving to the poor", assisted by a group of fellow outlaws known as his

- A) Merry Men
- B) Wise Men
- C) Robbers

Answer: A)

32. After decades of neglect, government schools are finally making a fresh start with much-needed improvements to facilities and teaching methods.

- A) Improvising the old thought
- B) Grabbing the eyeballs
- C) Starting something in a new and different way
- D) Giving a jumpstart

Answer: D

33. They thought that Ria would simply give up if her complaint had to go to the court. Now, she will realize that they have caught a Tartar!

- A) Dealing with an expert
- B) Forced to leave something
- C) Dealing with a troublesome person
- D) Wasting time

Answer: C)

34. Timothy finally _____ at the wedding.

- A) showed up

IGCSE 1 & 2 English Grammar Past Paper

B) buck up

C) give up

Answer: A)

35. Never _____ on your dreams.

A) showed up

B) buck up

C) give up

Answer: c)

36. _____ the room before you leave to play.

A) Clean up

B) Showed up

C) Buck up

Answer: A)

37. The convict is trying to _____ a story.

A) Make up

B) Clean up

C) Showed up

Answer: A)

38. Mark Antony's speech _____ the Roman people.

A) Worked up

B) Showed up

C) Made up

Answer: A)

39. The convention was _____ due to the pandemic.

A) called off

B) cancelled off

C) both of them

Answer: A)

40. Timothy finally _____ at the wedding.

A) showed up

B) buck up

C) give up

Answer: A)

41. Identify the correct homonym:

The criminal tried to _____ from the scene of the crime.

A) Steal

B) Steel

Correct Answer: A)

IGCSE 1 & 2 English Grammar Past Paper

42. Select the appropriate homophone:

His _____ reaction to the news surprised everyone.

- A) Affect
- B) Effect

Correct Answer: A)

43. Antonym of GUMPTION is _____?

- A) Apathy
- B) Nerve
- C) Initiative
- D) Sagacity

Answer: A)

44. Ocean currents play a _____ role in setting long-term climate_____.

- A) vital ... date
- B) important ... variations
- C) major ... patterns
- D) unusual ... changes

Answer: C)

45. I promise to _____ you in all circumstances

- A) stand up to
- B) stand with
- C) stand off
- D) stand by

Answer: B

46. It's difficult _____ reconcile such different points of view

- A) with
- B) to
- C) in
- D) on

Answer: B

47. The speaker did not properly space out his speech, but went on _____ one point only.

- A) stressing
- B) avoiding
- C) devoting
- D) decrying

Answer: A)

48. In the test, we will _____ your work and then give you detailed feedback.

- A) assess
- B) judge

IGCSE 1 & 2 English Grammar Past Paper

- C) measure
- D) check

Answer: A

49. A speed limit is the _____ legal speed that you can travel on the road.

- A) highest
- B) biggest
- C) maximum
- D) longest

Answer: C

50. The President's speech was so _____ that many people were persuaded to accept the need for change.

- A) expressive
- B) articulate
- C) eloquent
- D) calm

Answer: C

51. There is something wonderful _____ him.

- A) of
- B) about
- C) for
- D) inside

Answer: B)

52. If she is not interested, we will _____ the proposal.

- A) vaccant
- B) abandon
- C) impulse
- D) remove

Answer: B

53. The police forces have launched an operation to _____ out the kidnapped person

- A) track
- B) touch
- C) nib
- D) trace

Answer: D

54. Some people _____ to the officer against him about his mis-deeds

- A) asked
- B) complained
- C) question
- D) informed

IGCSE 1 & 2 English Grammar Past Paper

Answer: B

55. If we go to the park, _____ you like to come too ?

- A) shall
- B) are
- C) would
- D) am

Answer: C

56. It is certain that human beings _____ latent power of which they are only vaguely aware

- A) exhibit
- B) possess
- C) impose
- D) knowledge

Answer: B

57. Words such as 'UNESCO' and 'RADAR' are instances of ?

- A) Compounding
- B) Acronym
- C) Reduplicates
- D) Conversion

Answer: B

58. Words such as 'edit' and 'house keep' are instances of ?

- A) Compounding
- B) Portmanteau
- C) Derivation
- D) Backformation

Answer: D

59. Words such as 'smog' and 'motel' are instances of ?

- A) Compounding
- B) Portmanteau
- C) Derivation
- D) Backformation

Answer: B

60. is a process of word formation whereby new words are formed by subtracting a root by deleting final syllable which is misunderstood as a suffix?

- A) Compounding
- B) Portmanteau
- C) Derivation

IGCSE 1 & 2 English Grammar Past Paper

D) Backformation

Answer: D

61. involves a different analysis of the structure of the word by attaching a consonant at the end of a word or a vowel at the beginning of the next word

- A) Portmanteau
- B) Onomatopoeia
- C) Clipping
- D) Meta analysis

Answer: D

62. Idiom “Star Crossed” is _____?

- A) Unlucky
- B) Lucky
- C) Hard worker
- D) None of these

Answer: A)

63. Choose the meaning of idiom: “To break a lance with”.

- A) To entertain friends
- B) To fail or to miscarry
- C) To engage in a competition
- D) Get up to be involved in something

Answer: C)

64. Choose the correct meaning of idiom ” between sylla and charybids”

- A) Between two great difficulties
- B) Between two great opportunities
- C) In a confused situation
- D) None of these

Answer: A

65. Choose the correct meaning of idiom ” Leave in the Lurch” :

- A) A difficult situation
- B) To meet suddenly with someone
- C) To leave someone in difficulty
- D) To assist someone in adverse circumstances

Answer: C

66. Choose the correct collocation:

The politician gave a _____ speech, captivating the audience with his eloquence.

- A) Vivid
- B) Tremendous
- C) Resilient

IGCSE 1 & 2 English Grammar Past Paper

D) Colossal

Correct Answer: A

67. Identify the appropriate collocation:

The artist's paintings were characterized by a _____ blend of colors, creating a visually stunning effect.

A) Haphazard

B) Meticulous

C) Callous

D) Pernicious

Correct Answer: B)

68. Select the correct collocation:

The scientist conducted a _____ experiment to validate the groundbreaking hypothesis.

A) Flagrant

B) Pioneering

C) Ineffable

D) Languid

Correct Answer: B

69. Choose the appropriate collocation:

Her _____ decision to resign shocked the entire company.

A) Audacious

B) Cacophonous

C) Sagacious

D) Salubrious

Correct Answer: A)

70. Identify the correct collocation:

The novel featured a _____ plot, full of unexpected twists and turns.

A) Banal

B) Intricate

C) Lethargic

D) Serene

Correct Answer: B)

71. Select the proper collocation:

The athlete displayed _____ strength during the intense training sessions.

A) Inherent

B) Conspicuous

C) Inefficacious

D) Superfluous

Correct Answer: A)

72. Choose the correct collocation:

The students showed _____ enthusiasm for the challenging mathematics competition.

IGCSE 1 & 2 English Grammar Past Paper

- A) Ingrained
- B) Lackadaisical
- C) Ambivalent
- D) Zealous

Correct Answer: D

73. Identify the appropriate collocation:

The chef's _____ approach to culinary arts resulted in innovative and delicious dishes.

- A) Avant-garde
- B) Stalwart
- C) Mellifluous
- D) Capricious

Correct Answer: A)

74. Select the correct collocation:

The storm caused _____ damage to the coastal town, leaving residents in shock.

- A) Cataclysmic
- B) Serendipitous
- C) Facetious
- D) Nebulous

Correct Answer: A)

75. Choose the appropriate collocation:

The professor delivered a lecture with _____ precision, leaving the students deeply impressed.

- A) Concise
- B) Unruly
- C) Juxtaposed
- D) Cacophonous

Correct Answer: A)

76. The doctor had examined him.

- A) He was examined by the doctor.
- B) He has been examined by the doctor.
- C) He had been examined by the doctor.
- D) None of these

Answer: C

77. She does not like tea.

- A) Tea is not liked by her.
- B) Tea have not liked by her.
- C) Tea was not liked by her.
- D) Tea did not liked by her.

Answer: A)

78. Which sentence is in the passive voice?

IGCSE 1 & 2 English Grammar Past Paper

- A) The chef cooked a delicious meal.
- B) A delicious meal was cooked by the chef.
- C) Cooking a delicious meal, the chef was skilled.
- D) The chef is cooking a delicious meal.

Answer: B)

79. Identify the active voice sentence:

- A) The ancient manuscript was carefully restored by the librarian.
- B) Carefully restored by the librarian was the ancient manuscript.
- C) The librarian carefully restored the ancient manuscript.
- D) The ancient manuscript has been carefully restored.

Answer: C)

80. Choose the correct passive form:

- A) They have already chosen the leader.
- B) The leader has already been chosen by them.
- C) Already the leader has been chosen by them.
- D) They already choosing the leader.

Answer: B)

81. A group of giraffe is known as:_____?

- A) Tower
- B) Herd
- C) Flock
- D) None of these

Answer: A)

82. Choose the most suitable word: An office or post with no work but high pay:

- A) Honorary
- B) Sinecure
- C) Gratis
- D) Ex-Officio

Answer: B)

83. Through which light cannot pass?

- A) Dull
- B) Dark
- C) Obscure
- D) Opaque

Answer: D)

84. A leady who remains unmarried?

- A) Bachelor
- B) Misanthrope
- C) Spinster
- D) None of these

IGCSE 1 & 2 English Grammar Past Paper

Answer: C)

85. The original inhabitants of a Country.

- A) Aborigines
- B) Citizens
- C) Natives
- D) Primitive

Answer: A)

86. A Group of birds or a flock flying together in hundreds or even in thousands is called _____ ?

- A) Startling
- B) Murmuration
- C) Both A and B
- D) None of these

Answer: B)

87. One who lacks knowledge _____ ?

- A) Intelligent
- B) Ignorant
- C) Credulous
- D) Colleague

Answer: B)

88. A part of a word that can be pronounced separately ?

- A) Particle
- B) Sibilant
- C) Syllable
- D) Letter

Answer: C)

89. One who travels from place to place ?

- A) Itinerant
- B) Mendicant
- C) Journeyman
- D) Tramp

Answer: A)

90. The practice of taking someone else's work or ideas and passing them off as one's own is known as _____ ?

- A) Cuckold
- B) Despotism
- C) Plagiarism
- D) Epicure

Answer: C

IGCSE 1 & 2 English Grammar Past Paper

91. A person who talks in his/her sleep is known as _____?

- A) Bourgeois
- B) Insomnist
- C) ventriloquist
- D) Somniloquist

Answer:D)

92. secretly listening to a conversation is called _____?

- A) Eavesdrop
- B) Overhearing
- C) Pigeonholing
- D) Spying

Answer:A)

93. A disease that is liable to be transmitted to people through the environment is known as _____?

- A) Contagious
- B) Infectious
- C) Fatal
- D) Incurable

Answer: B)

94. A disease spreading from one person or organism to another by contact is known as _____?

- A) Contagious
- B) Infectious
- C) Unanimous
- D) Fatal

Answer: A)

95. "Reflections on Language" is a book written by Noam Chomsky in _____ ?

- A) 1975
- B) 1976
- C) 1977
- D) 1988

Answer: A

96. "The Syntactic Structures" is a book written by Noam Chomsky in _____ ?

- A) 1957
- B) 1958
- C) 1959
- D) 1960

Answer: A

IGCSE 1 & 2 English Grammar Past Paper

97. The study of relationships between two or more languages and the investigation whether the common languages have a common ancestor is called ?

- A) Psycho linguistics
- B) Sociolinguistics
- C) Comparative linguistics
- D) None of these

Answer: C

98. Morphology is the branch of linguistics which deals with?

- A) The study of the structure of sounds and symbols.
- B) Study of the structure of letters.
- C) The study of the structure of words
- D) N. O. T

Answer: C

99. Which among the following is an example acronym ?

- A) Smog
- B) UNESCO
- C) Buzz
- D) Edit

Answer: B

100. Which among the following is an example for portmanteau ?

- A) Smog
- B) UNESCO
- C) Buzz
- D) Edit

Answer: A

ADP English Grammar Past Paper

1. A term which refers to the sequential characteristics of language. When we construct WORDS and SENTENCES we follow a certain order in arranging the individual items.

- A. Syntagmatic
- B. Synergy
- C. Performance
- D. N. O. T

Answer: A

2. A term introduced by the linguist SAUSSURE which refers to the state of a language as it exists at any given time.

- A. Synchrony
- B. Diachrony
- C. Paradigmatic
- D. N. O. T

Answer: A

3. The study of signs is termed as ?

- A. Semiotics
- B. Semantics
- C. Paradigmatic
- D. Parole

Answer: A

4. In its general sense it refers to the creative capacity of language users to produce an endless number of new sentences, in contrast to the communication systems of animals is called ?

- A. Productivity
- B. Langue
- C. Paradigmatic
- D. Parole

Answer: A

5. is term introduced by CHOMSKY to describe 'the actual use of language in concrete situations':

- A. Performance
- B. Parole
- C. Paradigmatic
- D. N. O. T

Answer: A

6. A pair of terms introduced by Noam CHOMSKY in 1965 to describe native speakers' intuitions about the grammatical correctness, or otherwise, of sentences.

- A. Both b and c

ADP English Grammar Past Paper

- B. Diachrony/Synchrony
- C. Acceptable/Unacceptable
- D. N. O. T

Answer: C

7. The study of language and mind, which has greatly advanced our understanding of the way in which we acquire language is ?

- A. Sociolinguistics
- B. Psycholinguistics
- C. Bio linguistics
- D. None of these

Answer: B

8. Who argues that language is a unique evolutionary development of the human species and distinguished from modes of communication used by any other animal species ?

- A. Ferdinand De Saussure
- B. Albert Chomsky
- C. Noam Chomsky
- D. Noah Webster

Answer: C

9. Father of modern linguistics is _ ?

- A. Noam Chomsky
- B. Ferdinand De Saussure
- C. None of these
- D. Both A and B

Answer: A

10. The theory of Bio linguistics is given by ?

- A. Noam Chomsky
- B. Ferdinand De Saussure
- C. Steven Pinker
- D. Enoch Powell

Answer: A

11. Transformational-generative grammar is a broad theory used to model, encode, and deduce a native speaker's linguistic capabilities, was developed by ?

- A. Noam Chomsky
- B. Ferdinand De Saussure
- C. Leon Battista Alberti

ADP English Grammar Past Paper

D. Enoch Powell

Answer: A

12. Chomsky developed Transformational-Generative Grammar in ?

A. 1950

B. 1951

C. 1952

D. 1953

Answer: A

13. Competence is a term to describe the knowledge possessed by native users of a language which enables them to speak and understand their language fluently was introduced by ?

A. Ferdinand De Saussure

B. Enoch Powel

C. Noam Chomsky

D. None of these

Answer: C

14. is a term denotes historical perspective for studying language ?

A. Synchrony

B. Diachrony

C. Both a and b

D. None of these

Answer: B

15. "Reflections on Language" is a book written by Noam Chomsky in ?

A. 1975

B. 1976

C. 1977

D. 1988

Answer: A

16. "The Syntactic Structures" is a book written by Noam Chomsky in ?

A. 1957

B. 1958

C. 1959

D. 1960

Answer: A

17. The study of relationships between two or more languages and the investigation whether the common languages have a common ancestor is called ?

ADP English Grammar Past Paper

- A. Psycho linguistics
- B. Sociolinguistics
- C. Comparative linguistics
- D. None of these

Answer: C

18. Morphology is the branch of linguistics which deals with?

- A. The study of the structure of sounds and symbols.
- B. Study of the structure of letters.
- C. The study of the structure of words
- D. N. O. T

Answer: C

19. Which among the following is an example acronym ?

- A. Smog
- B. UNESCO
- C. Buzz
- D. Edit

Answer: B

20. Which among the following is an example for portmanteau ?

- A. Smog
- B. UNESCO
- C. Buzz
- D. Edit

Answer: A

21. Words such as 'UNESCO' and 'RADAR' are instances of ?

- A. Compounding
- B. Acronym
- C. Reduplicates
- D. Conversion

Answer: B

22. Words such as 'edit' and 'house keep' are instances of ?

- A. Compounding
- B. Portmanteau
- C. Derivation
- D. Backformation

Answer: D

ADP English Grammar Past Paper

23. Words such as 'smog' and 'motel' are instances of _____ ?

- A. Compounding
- B. Portmanteau
- C. Derivation
- D. Backformation

Answer: B

24. _____ is a process of word formation whereby new words are formed by subtracting a root by deleting final syllable which is misunderstood as a suffix?

- A. Compounding
- B. Portmanteau
- C. Derivation
- D. Backformation

Answer: D

25. _____ involves a different analysis of the structure of the word by attaching a consonant at the end of a word or a vowel at the beginning of the next word

- A. Portmanteau
- B. Onomatopoeia
- C. Clipping
- D. Meta analysis

Answer: D

26. _____ is a process of word formation wherein new words are coined by combining the segments of two different existing words?

- A. Compounding
- B. Portmanteau
- C. Derivation
- D. Backformation.

Answer: B

27. The /d/ in 'middle' is an instance of _____ ?

- A. Lateral plosion
- B. Alveolar plosion
- C. Nasal plosion
- D. Incomplete plosion.

Answer: A

28. A person fluent in two languages is known as _____?

- A. Bilingual
- B. Bigot
- C. Bigamy

ADP English Grammar Past Paper

D. Brittle

Answer: A

29. The action or practice of persuading someone to do something by using force or Threats is known as _____?

- A. Coercion
- B. Conviction
- C. Confession
- D. Cajolement

Answer: A

30. A narrow piece of land connecting two large masses of land is known as _____?

- A. Gulf
- B. Isthmus
- C. Peninsula
- D. Continent

Answer: B

31. Government by a small group of all powerful persons is known as _____?

- A. Dictatorship
- B. Monarchy
- C. Oligarchy
- D. Anarchy

Answer: C

32. A person who helps another commit a crime is known as _____?

- A. Accomplice
- B. Amateur
- C. Cuckold
- D. Changeling

Answer: A

33. A sad poem usually written to praise and express sorrow for someone who is dead is known as _____?

- A. Elegy
- B. Oad
- C. Sestina
- D. Epic

Answer: A)

34. A long poem narrating achievements of a hero or legendary figures is known as _____?

- A. Epic
- B. Elegy
- C. Ode

ADP English Grammar Past Paper

D. Sestina

Answer: A)

35. Which word has the underlined part pronounced differently from the rest?

- A. plough
- B. ground
- C. mouth
- D. southern
- E. trounce

Answer: D

36. One of these words does not describe a way of walking. Which one?

- A. waddle
- B. stroll
- C. limp
- D. amble
- E. hover

Answer: E

37. Find a synonym for the underlined word:

Rebecca stared back at us with such mournful eyes that we averted our gaze from her entirely.

- A. misty
- B. pitiful
- C. mocking
- D. greedy
- E. sad

ANSWER: E

38. David has lost his wallet again. It's the second time this

- A. will happen
- B. has happened
- C. happened
- D. happens
- E. had happened

Answer: B

39. He doesn't have that much experience. He's still wet behind the

- A. knees
- B. eyes
- C. ears
- D. tongue
- E. shoulders

Answer: C

ADP English Grammar Past Paper

40. Little that there were people who had never been brought to justice for their crimes.

- A. I knew
- B. I did know
- C. did I know
- D. knew I
- E. I had known

Answer: C

41. The inspector is a very man who checks the evidence over and over again.

- A. attentive
- B. thorough
- C. thoughtful
- D. complete
- E. conscious

Answer: B

42. "I risked life and to save you and look at how ungrateful you are!" Charles shouted.

- A. limb
- B. flesh
- C. death
- D. soul
- E. being

Answer: A

43. He couldn't find two that matched, so he was forced to wear socks.

- A. mixed
- B. odd
- C. uneven
- D. unlike
- E. impaired

Answer: B

44. Match the halves of the phrases.

- | | | |
|-----------|-----|-----------|
| 1. fair | | a. breezy |
| 2. bright | | b. simple |
| 3. rough | and | c. void |
| 4. plain | | d. square |
| 5. null | | e. ready |

A. 1e/ 2c/ 3a/ 4d/ 5b

B. B)1b/ 2a/ 3c/ 4d/ 5e

ADP English Grammar Past Paper

- C. 1d/ 2a/ 3c/ 4e/ 5b
- D. 1a/ 2c/ 3b/ 4e/ 5d
- E. 1d/ 2a/ 3e/ 4b/ 5c

Answer: E

45. Which among the following are the main properties of grammar ?
- A. To account by its rules for the infinite sentences of a language
 - B. To be explicit about the grammaticality of sentences
 - C. To predict all and the only possible grammatical sentences of a language
 - D. All the above

Answer: D

46. The theory of Transformational Generative Grammar is contained in?
- A. Chomsky's "Syntactic Structures"
 - B. Chomsky's "Aspects of the theory of Syntax"
 - C. Leonard Bloomfield's "Language"
 - D. Both "A" & "B"

Answer: D

47. The two great linguists who have contributed much to frame the device of Immediate Constituent analysis are ?
- A. Leonard Bloomfield & Noam Chomsky
 - B. Leonard Bloomfield & Max Muller
 - C. Max Muller & Herman Gundert
 - D. Edward Sapir & Ferdinand de Saussure

Answer: A

48. is a method of word formation whereby one or more syllables are removed from longer words ?
- A. Portmanteau
 - B. Onomatopoeia
 - C. Clipping
 - D. Metanalysis

Answer: C

49. The – s in 'she sings well' is ?
- A. An adjective forming morpheme
 - B. Plural morpheme
 - C. Possessive morpheme
 - D. Morpheme signaling third person singular

Answer: D

50. The – or in 'actor' is ?
- A. An adjective forming morpheme
 - B. Plural morpheme
 - C. Possessive morpheme
 - D. Noun forming morpheme

Answer: D

ADP English Grammar Past Paper

51. The –s in 'john's' is ?

- A. An adjective forming morpheme
- B. Plural morpheme
- C. Possessive morpheme
- D. Past morpheme

Answer: C

52. The –ish in the word 'childish' is ?

- A. An adjective forming morpheme
- B. Plural morpheme
- C. Possessive morpheme
- D. Past morpheme

Answer: A

53. The final consonants /s/, /z/ and /iz/ in the words 'cats', 'dogs' and 'boxes' are instances of ?

- A. Allophones
- B. Allomorphs
- C. Minimal pairs
- D. None of the above

Answer: B

54. The form 'dog' is a morpheme?

- A. A free morpheme
- B. Free variation
- C. Bound morpheme
- D. None of these

Answer: A

55. A minimal meaningful unit in the grammatical system of a language is called ?

- A. Syllable
- B. Phoneme
- C. Morpheme
- D. Allomorph

Answer: C

56. /m/ is a consonant ?

- A. Bilabial
- B. Bilabial nasal
- C. Velar
- D. Glottal

Answer: B

57. How many types of phonetic transcriptions are generally followed ?

- A. Only one
- B. Two
- C. Innumerable
- D. None of the above

ADP English Grammar Past Paper

Answer: B

58. The term _____ refers to omissions of certain sounds, syllables or even words in continuous speech?
- A. Alliteration
 - B. Assonance
 - C. Elision
 - D. None of the above

Answer: C

59. The term _____ refers to the phenomenon of pauses in speech?
- A. Stress
 - B. Pitch
 - C. Intonation
 - D. Juncture

Answer: D

60. How many stressed are generally marked ?
- A. Only one
 - B. Two
 - C. Three
 - D. Four

Answer: D

61. Something which is incapable of being seen through is known as _____?
- A. Non-transparent
 - B. Blurred
 - C. Opaque
 - D. All of the above

Answer: D

62. Something which is capable of being seen through is known as _____?
- A. Opaque
 - B. Coarse
 - C. Ambiguous
 - D. Transparent

Answer: D

63. One who is unable to pay debts owed is known as _____?
- A. Foreclosed
 - B. Insolvent
 - C. Bankrupt
 - D. All of the above

Answer: D

64. The teacher cautioned me _____ my spelling.
- A. For

ADP English Grammar Past Paper

- B. Against
- C. At
- D. On

Answer: A

65. The train went _____ the tunnel.

- A. from
- B. under
- C. through
- D. to

Answer: C)

66. The jug is full ____ milk?

- A. of
- B. about
- C. by
- D. with

Answer: A)

67. Books are a great source _____ happiness.

- A. of
- B. for
- C. on
- D. with

Answer: A)

68. He is superior _____ me?

- A. To
- B. than
- C. With
- D. from

Answer: A)

69. He looks upset, I think he took the criticism _____ heart?

- A. to
- B. in
- C. about
- D. of

Answer: A

70. You can't always pass _____ appearance.

- A. Down
- B. By
- C. Into
- D. Of

ADP English Grammar Past Paper

Answer: B

71. Both parties must adhere _____ the terms of the contract.

- A. In
- B. By
- C. On
- D. To

Answer: D

72. I was alarmed _____ his death.

- A. by
- B. at
- C. upon
- D. from

Answer: B

73. What type of narration is used in the following sentence?

"The mysterious door creaked open, revealing a dimly lit hallway."

- A. First-person
- B. Second-person
- C. Third-person limited
- D. Third-person omniscient

Answer: C)

74. Which sentence demonstrates an example of unreliable narration?

- A. "I saw the thief run past me with the stolen purse."
- B. "He claimed to have witnessed the accident, but I doubt his credibility."
- C. "We all knew she couldn't be trusted, especially after what she did."
- D. "You are the only one who knows the truth about what happened."

Answer: B

75. In which narrative perspective is the narrator not a character in the story and knows the thoughts and feelings of multiple characters?

- A. First-person limited
- B. Second-person
- C. Third-person omniscient
- D. Third-person objective

Answer: C

76. What tense and point of view is used in the following sentence?

"As I gazed at the stars, I felt a sense of peace wash over me."

- A. Present tense, first-person
- B. Past tense, second-person
- C. Past tense, third-person limited
- D. Present tense, third-person omniscient

Answer: A

ADP English Grammar Past Paper

77. Which narrative technique involves the narrator addressing the reader directly?

- A. Stream of consciousness
- B. Epistolary
- C. Metafiction
- D. Breaking the fourth wall

Correct Answer: D

78. What narrative style is characterized by a continuous flow of thoughts, feelings, and associations of a character?

- A. Third-person objective
- B. Stream of consciousness
- C. Epistolary
- D. Omniscient narration

Answer: B

79. Which narrative mode is often used in detective stories where the narrator is unaware of some crucial information?

- A. First-person omniscient
- B. Second-person limited
- C. Third-person objective
- D. Unreliable narration

Answer: A

80. What is the term for a narrative device in which the story unfolds through a series of letters?

- A. Stream of consciousness
- B. Omniscient narration
- C. Epistolary
- D. Second-person limited

Answer: C

81. In which narrative perspective does the narrator use "I" and is typically a character in the story?

- A. First-person
- B. Second-person
- C. Third-person limited
- D. Third-person omniscient

Answer: A

82. What type of narration is characterized by the narrator only knowing the external actions and dialogue of the characters, without access to their thoughts or feelings?

- A. First-person omniscient
- B. Second-person limited
- C. Third-person objective
- D. Third-person limited

ADP English Grammar Past Paper

Answer: C

83. The initial sounds in the words 'ship', 'church' and 'judge' are examples for ?

- A. Palato-alveolar
- B. Palatal
- C. Velar
- D. Bilabial

Answer: A

84. /f/ and /v/ are ?

- A. Dental
- B. Labio-dental
- C. Bilabial
- D. Alveolar

Answer: B

85. are sounds articulated in the glottis ?

- A. Glottal
- B. Velar
- C. Palatal
- D. None of the above

Answer: A

86. are produced involving the tip of the tongue and the back part of the teeth ridge ?

- A. Post alveolar
- B. Palate alveolar
- C. Palatal
- D. Velar

Answer: A

87. are articulated by raising the front of the tongue towards the hard palate ?

- A. Post alveolar
- B. Palate alveolar
- C. Palatal
- D. Velar

Answer: C

88. Sounds articulated by the tip of the tongue placed against the upper teeth are called ?

- A. Dental
- B. Labiodental
- C. Bilabial
- D. Alveolar

Answer: A

89. Sounds articulated by two lips are called ?

ADP English Grammar Past Paper

- A. Dental
- B. Bilabial
- C. Labiodental
- D. Alveolar

Answer: B

90. is a unit of speech which is at a level higher than the speech sound or phoneme ?
- A. Syllable
 - B. Stress
 - C. Intonation
 - D. Pitch

Answer: A

91. **Faiz Ahmed Faiz is related to poetry in the same way as Ali Imam is related to**?

- A. Literature
- B. Drama
- C. Poetry
- D. Painting

Answer: D

92. **Borrower is related to Loan in the same way as Beggar is related to**?

- A. Alms
- B. Mercy
- C. Money
- D. Gift

Answer: A

93. **Waves is related to Air in the same way as Ripples is related to**?

- A. Wind
- B. Water
- C. Storm
- D. Smoke

Answer: A

94. **Institute is related to Academy in the same way as Decree is related to**?

- A. Blame
- B. Court
- C. Judge
- D. Mandate

Answer: D

95. **Hygienic is related to Polluted in the same way as Knowing is related to**?

- A. Ingenuous
- B. Uncommon
- C. Secret

ADP English Grammar Past Paper

D. Sagacious
Answer: A

96. **Jesus is related to Christians in the same way as Zoroaster is related to**?

- A. Jews
- B. Parsis
- C. Sikh
- D. Catholics

Answer: B

97. **Palm is related to Hand in the same way as Sole is related to**?

- A. Leg
- B. Ankle
- C. Knee
- D. Foot

Answer: D

98. **Young is related to Old in the same way as Wild is related to**?

- A. Insufficient
- B. Big
- C. Narrow
- D. Long

Answer: C

99. **Auger is related to Carpenter in the same way as Awl is related to**?

- A. Sculptor
- B. Cobbler
- C. Chef
- D. Mason

Answer: B

100. **Bird is related to Aviary in the same way as Bees is related to**?

- A. Aquarium
- B. Hive
- C. Brewery
- D. Apiary

Answer: D

ADP English Grammar Past Paper

DAE English Grammar Past Paper

1. A term which refers to the sequential characteristics of language. When we construct WORDS and SENTENCES we follow a certain order in arranging the individual items.

- A. Syntagmatic
- B. Synergy
- C. Performance
- D. N. O. T

Answer: A

2. A term introduced by the linguist SAUSSURE which refers to the state of a language as it exists at any given time.

- A. Synchrony
- B. Diachrony
- C. Paradigmatic
- D. N. O. T

Answer: A

3. The study of signs is termed as ?

- A. Semiotics
- B. Semantics
- C. Paradigmatic
- D. Parole

Answer: A

4. In its general sense it refers to the creative capacity of language users to produce an endless number of new sentences, in contrast to the communication systems of animals is called ?

- A. Productivity
- B. Langue
- C. Paradigmatic
- D. Parole

Answer: A

5. is term introduced by CHOMSKY to describe 'the actual use of language in concrete situations':

- A. Performance
- B. Parole
- C. Paradigmatic
- D. N. O. T

Answer: A

6. A pair of terms introduced by Noam CHOMSKY in 1965 to describe native speakers' intuitions about the grammatical correctness, or otherwise, of sentences.

- A. Both b and c

DAE English Grammar Past Paper

- B. Diachrony/Synchrony
- C. Acceptable/Unacceptable
- D. N. O. T

Answer: C

7. The study of language and mind, which has greatly advanced our understanding of the way in which we acquire language is ?

- A. Sociolinguistics
- B. Psycholinguistics
- C. Bio linguistics
- D. None of these

Answer: B

8. Who argues that language is a unique evolutionary development of the human species and distinguished from modes of communication used by any other animal species ?

- A. Ferdinand De Saussure
- B. Albert Chomsky
- C. Noam Chomsky
- D. Noah Webster

Answer: C

9. Father of modern linguistics is _ ?

- A. Noam Chomsky
- B. Ferdinand De Saussure
- C. None of these
- D. Both A and B

Answer: A

10. The theory of Bio linguistics is given by ?

- A. Noam Chomsky
- B. Ferdinand De Saussure
- C. Steven Pinker
- D. Enoch Powell

Answer: A

11. Transformational-generative grammar is a broad theory used to model, encode, and deduce a native speaker's linguistic capabilities, was developed by ?

- A. Noam Chomsky
- B. Ferdinand De Saussure
- C. Leon Battista Alberti

DAE English Grammar Past Paper

D. Enoch Powell

Answer: A

12. Chomsky developed Transformational-Generative Grammar in ?

A. 1950

B. 1951

C. 1952

D. 1953

Answer: A

13. Competence is a term to describe the knowledge possessed by native users of a language which enables them to speak and understand their language fluently was introduced by ?

A. Ferdinand De Saussure

B. Enoch Powel

C. Noam Chomsky

D. None of these

Answer: C

14. is a term denotes historical perspective for studying language ?

A. Synchrony

B. Diachrony

C. Both a and b

D. None of these

Answer: B

15. "Reflections on Language" is a book written by Noam Chomsky in ?

A. 1975

B. 1976

C. 1977

D. 1988

Answer: A

16. "The Syntactic Structures" is a book written by Noam Chomsky in ?

A. 1957

B 1958

C. 1959

D. 1960

Answer: A

17. The study of relationships between two or more languages and the investigation whether the common languages have a common ancestor is called ?

DAE English Grammar Past Paper

- A. Psycho linguistics
- B. Sociolinguistics
- C. Comparative linguistics
- D. None of these

Answer: C

18. Morphology is the branch of linguistics which deals with?

- A. The study of the structure of sounds and symbols.
- B. Study of the structure of letters.
- C. The study of the structure of words
- D. N. O. T

Answer: C

19. Which among the following is an example acronym ?

- A. Smog
- B. UNESCO
- C. Buzz
- D. Edit

Answer: B

20. Which among the following is an example for portmanteau ?

- A. Smog
- B. UNESCO
- C. Buzz
- D. Edit

Answer: A

21. Words such as 'UNESCO' and 'RADAR' are instances of ?

- A. Compounding
- B. Acronym
- C. Reduplicates
- D. Conversion

Answer: B

22. Words such as 'edit' and 'house keep' are instances of ?

- A. Compounding
- B. Portmanteau
- C. Derivation
- D. Backformation

Answer: D

DAE English Grammar Past Paper

23. Words such as 'smog' and 'motel' are instances of _____ ?

- A. Compounding
- B. Portmanteau
- C. Derivation
- D. Backformation

Answer: B

24. _____ is a process of word formation whereby new words are formed by subtracting a root by deleting final syllable which is misunderstood as a suffix?

- A. Compounding
- B. Portmanteau
- C. Derivation
- D. Backformation

Answer: D

25. _____ involves a different analysis of the structure of the word by attaching a consonant at the end of a word or a vowel at the beginning of the next word

- A. Portmanteau
- B. Onomatopoeia
- C. Clipping
- D. Meta analysis

Answer: D

26. _____ is a process of word formation wherein new words are coined by combining the segments of two different existing words?

- A. Compounding
- B. Portmanteau
- C. Derivation
- D. Backformation.

Answer: B

27. The /d/ in 'middle' is an instance of _____ ?

- A. Lateral plosion
- B. Alveolar plosion
- C. Nasal plosion
- D. Incomplete plosion.

Answer: A

28. A person fluent in two languages is known as _____?

- A. Bilingual
- B. Bigot
- C. Bigamy

DAE English Grammar Past Paper

D. Brittle

Answer: A

29. The action or practice of persuading someone to do something by using force or Threats is known as _____?

- A. Coercion
- B. Conviction
- C. Confession
- D. Cajolement

Answer: A

30. A narrow piece of land connecting two large masses of land is known as _____?

- A. Gulf
- B. Isthmus
- C. Peninsula
- D. Continent

Answer: B

31. Government by a small group of all powerful persons is known as _____?

- A. Dictatorship
- B. Monarchy
- C. Oligarchy
- D. Anarchy

Answer: C

32. A person who helps another commit a crime is known as _____?

- A. Accomplice
- B. Amateur
- C. Cuckold
- D. Changeling

Answer: A

33. A sad poem usually written to praise and express sorrow for someone who is dead is known as _____?

- A. Elegy
- B. Oad
- C. Sestina
- D. Epic

Answer: A)

34. A long poem narrating achievements of a hero or legendary figures is known as _____?

- A. Epic
- B. Elegy
- C. Ode

DAE English Grammar Past Paper

D. Sestina

Answer: A)

35. Which word has the underlined part pronounced differently from the rest?

- A. plough
- B. ground
- C. mouth
- D. southern
- E. trounce

Answer: D

36. One of these words does not describe a way of walking. Which one?

- A. waddle
- B. stroll
- C. limp
- D. amble
- E. hover

Answer: E

37. Find a synonym for the underlined word:

Rebecca stared back at us with such mournful eyes that we averted our gaze from her entirely.

- A. misty
- B. pitiful
- C. mocking
- D. greedy
- E. sad

ANSWER: E

38. David has lost his wallet again. It's the second time this

- A. will happen
- B. has happened
- C. happened
- D. happens
- E. had happened

Answer: B

39. He doesn't have that much experience. He's still wet behind the

- A. knees
- B. eyes
- C. ears
- D. tongue
- E. shoulders

Answer: C

DAE English Grammar Past Paper

40. Little that there were people who had never been brought to justice for their crimes.

- A. I knew
- B. I did know
- C. did I know
- D. knew I
- E. I had known

Answer: C

41. The inspector is a very man who checks the evidence over and over again.

- A. attentive
- B. thorough
- C. thoughtful
- D. complete
- E. conscious

Answer: B

42. "I risked life and to save you and look at how ungrateful you are!" Charles shouted.

- A. limb
- B. flesh
- C. death
- D. soul
- E. being

Answer: A

43. He couldn't find two that matched, so he was forced to wear socks.

- A. mixed
- B. odd
- C. uneven
- D. unlike
- E. impaired

Answer: B

44. Match the halves of the phrases.

- | | | |
|-----------|-----|-----------|
| 1. fair | | a. breezy |
| 2. bright | | b. simple |
| 3. rough | and | c. void |
| 4. plain | | d. square |
| 5. null | | e. ready |

A. 1e/ 2c/ 3a/ 4d/ 5b

B. B)1b/ 2a/ 3c/ 4d/ 5e

DAE English Grammar Past Paper

- C. 1d/ 2a/ 3c/ 4e/ 5b
- D. 1a/ 2c/ 3b/ 4e/ 5d
- E. 1d/ 2a/ 3e/ 4b/ 5c

Answer: E

45. Which among the following are the main properties of grammar ?
- A. To account by its rules for the infinite sentences of a language
 - B. To be explicit about the grammaticality of sentences
 - C. To predict all and the only possible grammatical sentences of a language
 - D. All the above

Answer: D

46. The theory of Transformational Generative Grammar is contained in?
- A. Chomsky's "Syntactic Structures"
 - B. Chomsky's "Aspects of the theory of Syntax"
 - C. Leonard Bloomfield's "Language"
 - D. Both "A" & "B"

Answer: D

47. The two great linguists who have contributed much to frame the device of Immediate Constituent analysis are ?
- A. Leonard Bloomfield & Noam Chomsky
 - B. Leonard Bloomfield & Max Muller
 - C. Max Muller & Herman Gundert
 - D. Edward Sapir & Ferdinand de Saussure

Answer: A

48. is a method of word formation whereby one or more syllables are removed from longer words ?
- A. Portmanteau
 - B. Onomatopoeia
 - C. Clipping
 - D. Metanalysis

Answer: C

49. The – s in 'she sings well' is ?
- A. An adjective forming morpheme
 - B. Plural morpheme
 - C. Possessive morpheme
 - D. Morpheme signaling third person singular

Answer: D

50. The – or in 'actor' is ?
- A. An adjective forming morpheme
 - B. Plural morpheme
 - C. Possessive morpheme
 - D. Noun forming morpheme

Answer: D

DAE English Grammar Past Paper

51. The –s in 'john's' is ?

- A. An adjective forming morpheme
- B. Plural morpheme
- C. Possessive morpheme
- D. Past morpheme

Answer: C

52. The –ish in the word 'childish' is ?

- A. An adjective forming morpheme
- B. Plural morpheme
- C. Possessive morpheme
- D. Past morpheme

Answer: A

53. The final consonants /s/, /z/ and /iz/ in the words 'cats', 'dogs' and 'boxes' are instances of ?

- A. Allophones
- B. Allomorphs
- C. Minimal pairs
- D. None of the above

Answer: B

54. The form 'dog' is a morpheme?

- A. A free morpheme
- B. Free variation
- C. Bound morpheme
- D. None of these

Answer: A

55. A minimal meaningful unit in the grammatical system of a language is called ?

- A. Syllable
- B. Phoneme
- C. Morpheme
- D. Allomorph

Answer: C

56. /m/ is a consonant ?

- A. Bilabial
- B. Bilabial nasal
- C. Velar
- D. Glottal

Answer: B

57. How many types of phonetic transcriptions are generally followed ?

- A. Only one
- B. Two
- C. Innumerable
- D. None of the above

DAE English Grammar Past Paper

Answer: B

58. The term _____ refers to omissions of certain sounds, syllables or even words in continuous speech?
- A. Alliteration
 - B. Assonance
 - C. Elision
 - D. None of the above

Answer: C

59. The term _____ refers to the phenomenon of pauses in speech?
- A. Stress
 - B. Pitch
 - C. Intonation
 - D. Juncture

Answer: D

60. How many stressed are generally marked ?
- A. Only one
 - B. Two
 - C. Three
 - D. Four

Answer: D

61. Something which is incapable of being seen through is known as _____?
- A. Non-transparent
 - B. Blurred
 - C. Opaque
 - D. All of the above

Answer: D

62. Something which is capable of being seen through is known as _____?
- A. Opaque
 - B. Coarse
 - C. Ambiguous
 - D. Transparent

Answer: D

63. One who is unable to pay debts owed is known as _____?
- A. Foreclosed
 - B. Insolvent
 - C. Bankrupt
 - D. All of the above

Answer: D

64. The teacher cautioned me _____ my spelling.
- A. For

DAE English Grammar Past Paper

- B. Against
- C. At
- D. On

Answer: A

65. The train went _____ the tunnel.

- A. from
- B. under
- C. through
- D. to

Answer: C)

66. The jug is full ____ milk?

- A. of
- B. about
- C. by
- D. with

Answer: A)

67. Books are a great source _____ happiness.

- A. of
- B. for
- C. on
- D. with

Answer: A)

68. He is superior _____ me?

- A. To
- B. than
- C. With
- D. from

Answer: A)

69. He looks upset, I think he took the criticism _____ heart?

- A. to
- B. in
- C. about
- D. of

Answer: A

70. You can't always pass _____ appearance.

- A. Down
- B. By
- C. Into
- D. Of

DAE English Grammar Past Paper

Answer: B

71. Both parties must adhere _____ the terms of the contract.

- A. In
- B. By
- C. On
- D. To

Answer: D

72. I was alarmed _____ his death.

- A. by
- B. at
- C. upon
- D. from

Answer: B

73. What type of narration is used in the following sentence?

"The mysterious door creaked open, revealing a dimly lit hallway."

- A. First-person
- B. Second-person
- C. Third-person limited
- D. Third-person omniscient

Answer: C)

74. Which sentence demonstrates an example of unreliable narration?

- A. "I saw the thief run past me with the stolen purse."
- B. "He claimed to have witnessed the accident, but I doubt his credibility."
- C. "We all knew she couldn't be trusted, especially after what she did."
- D. "You are the only one who knows the truth about what happened."

Answer: B

75. In which narrative perspective is the narrator not a character in the story and knows the thoughts and feelings of multiple characters?

- A. First-person limited
- B. Second-person
- C. Third-person omniscient
- D. Third-person objective

Answer: C

76. What tense and point of view is used in the following sentence?

"As I gazed at the stars, I felt a sense of peace wash over me."

- A. Present tense, first-person
- B. Past tense, second-person
- C. Past tense, third-person limited
- D. Present tense, third-person omniscient

Answer: A

DAE English Grammar Past Paper

77. Which narrative technique involves the narrator addressing the reader directly?

- A. Stream of consciousness
- B. Epistolary
- C. Metafiction
- D. Breaking the fourth wall

Correct Answer: D

78. What narrative style is characterized by a continuous flow of thoughts, feelings, and associations of a character?

- A. Third-person objective
- B. Stream of consciousness
- C. Epistolary
- D. Omniscient narration

Answer: B

79. Which narrative mode is often used in detective stories where the narrator is unaware of some crucial information?

- A. First-person omniscient
- B. Second-person limited
- C. Third-person objective
- D. Unreliable narration

Answer: A

80. What is the term for a narrative device in which the story unfolds through a series of letters?

- A. Stream of consciousness
- B. Omniscient narration
- C. Epistolary
- D. Second-person limited

Answer: C

81. In which narrative perspective does the narrator use "I" and is typically a character in the story?

- A. First-person
- B. Second-person
- C. Third-person limited
- D. Third-person omniscient

Answer: A

82. What type of narration is characterized by the narrator only knowing the external actions and dialogue of the characters, without access to their thoughts or feelings?

- A. First-person omniscient
- B. Second-person limited
- C. Third-person objective
- D. Third-person limited

DAE English Grammar Past Paper

Answer: C

83. The initial sounds in the words 'ship', 'church' and 'judge' are examples for ?

- A. Palato-alveolar
- B. Palatal
- C. Velar
- D. Bilabial

Answer: A

84. /f/ and /v/ are ?

- A. Dental
- B. Labio-dental
- C. Bilabial
- D. Alveolar

Answer: B

85. are sounds articulated in the glottis ?

- A. Glottal
- B. Velar
- C. Palatal
- D. None of the above

Answer: A

86. are produced involving the tip of the tongue and the back part of the teeth ridge ?

- A. Post alveolar
- B. Palate alveolar
- C. Palatal
- D. Velar

Answer: A

87. are articulated by raising the front of the tongue towards the hard palate ?

- A. Post alveolar
- B. Palate alveolar
- C. Palatal
- D. Velar

Answer: C

88. Sounds articulated by the tip of the tongue placed against the upper teeth are called ?

- A. Dental
- B. Labiodental
- C. Bilabial
- D. Alveolar

Answer: A

89. Sounds articulated by two lips are called ?

DAE English Grammar Past Paper

- A. Dental
- B. Bilabial
- C. Labiodental
- D. Alveolar

Answer: B

90. is a unit of speech which is at a level higher than the speech sound or phoneme ?
- A. Syllable
 - B. Stress
 - C. Intonation
 - D. Pitch

Answer: A

91. **Faiz Ahmed Faiz is related to poetry in the same way as Ali Imam is related to**?

- A. Literature
- B. Drama
- C. Poetry
- D. Painting

Answer: D

92. **Borrower is related to Loan in the same way as Beggar is related to**?

- A. Alms
- B. Mercy
- C. Money
- D. Gift

Answer: A

93. **Waves is related to Air in the same way as Ripples is related to**?

- A. Wind
- B. Water
- C. Storm
- D. Smoke

Answer: A

94. **Institute is related to Academy in the same way as Decree is related to**?

- A. Blame
- B. Court
- C. Judge
- D. Mandate

Answer: D

95. **Hygienic is related to Polluted in the same way as Knowing is related to**?

- A. Ingenuous
- B. Uncommon
- C. Secret

DAE English Grammar Past Paper

D. Sagacious
Answer: A

96. **Jesus is related to Christians in the same way as Zoroaster is related to**?

- A. Jews
- B. Parsis
- C. Sikh
- D. Catholics

Answer: B

97. **Palm is related to Hand in the same way as Sole is related to**?

- A. Leg
- B. Ankle
- C. Knee
- D. Foot

Answer: D

98. **Young is related to Old in the same way as Wild is related to**?

- A. Insufficient
- B. Big
- C. Narrow
- D. Long

Answer: C

99. **Auger is related to Carpenter in the same way as Awl is related to**?

- A. Sculptor
- B. Cobbler
- C. Chef
- D. Mason

Answer: B

100. **Bird is related to Aviary in the same way as Bees is related to**?

- A. Aquarium
- B. Hive
- C. Brewery
- D. Apiary

Answer: D

DAE English Grammar Past Paper

Undergraduate English Grammar Past Paper

1. A term which refers to the sequential characteristics of language. When we construct WORDS and SENTENCES we follow a certain order in arranging the individual items.

- A. Syntagmatic
- B. Synergy
- C. Performance
- D. N. O. T

Answer: A

2. A term introduced by the linguist SAUSSURE which refers to the state of a language as it exists at any given time.

- A. Synchrony
- B. Diachrony
- C. Paradigmatic
- D. N. O. T

Answer: A

3. The study of signs is termed as ?

- A. Semiotics
- B. Semantics
- C. Paradigmatic
- D. Parole

Answer: A

4. In its general sense it refers to the creative capacity of language users to produce an endless number of new sentences, in contrast to the communication systems of animals is called ?

- A. Productivity
- B. Langue
- C. Paradigmatic
- D. Parole

Answer: A

5. is term introduced by CHOMSKY to describe 'the actual use of language in concrete situations':

- A. Performance
- B. Parole
- C. Paradigmatic
- D. N. O. T

Answer: A

6. A pair of terms introduced by Noam CHOMSKY in 1965 to describe native speakers' intuitions about the grammatical correctness, or otherwise, of sentences.

- A. Both b and c

Undergraduate English Grammar Past Paper

- B. Diachrony/Synchrony
- C. Acceptable/Unacceptable
- D. N. O. T

Answer: C

7. The study of language and mind, which has greatly advanced our understanding of the way in which we acquire language is ?

- A. Sociolinguistics
- B. Psycholinguistics
- C. Bio linguistics
- D. None of these

Answer: B

8. Who argues that language is a unique evolutionary development of the human species and distinguished from modes of communication used by any other animal species ?

- A. Ferdinand De Saussure
- B. Albert Chomsky
- C. Noam Chomsky
- D. Noah Webster

Answer: C

9. Father of modern linguistics is _ ?

- A. Noam Chomsky
- B. Ferdinand De Saussure
- C. None of these
- D. Both A and B

Answer: A

10. The theory of Bio linguistics is given by ?

- A. Noam Chomsky
- B. Ferdinand De Saussure
- C. Steven Pinker
- D. Enoch Powell

Answer: A

11. Transformational-generative grammar is a broad theory used to model, encode, and deduce a native speaker's linguistic capabilities, was developed by ?

- A. Noam Chomsky
- B. Ferdinand De Saussure
- C. Leon Battista Alberti

Undergraduate English Grammar Past Paper

D. Enoch Powell

Answer: A

12. Chomsky developed Transformational-Generative Grammar in ?

A. 1950

B. 1951

C. 1952

D. 1953

Answer: A

13. Competence is a term to describe the knowledge possessed by native users of a language which enables them to speak and understand their language fluently was introduced by ?

A. Ferdinand De Saussure

B. Enoch Powel

C. Noam Chomsky

D. None of these

Answer: C

14. is a term denotes historical perspective for studying language ?

A. Synchrony

B. Diachrony

C. Both a and b

D. None of these

Answer: B

15. "Reflections on Language" is a book written by Noam Chomsky in ?

A. 1975

B. 1976

C. 1977

D. 1988

Answer: A

16. "The Syntactic Structures" is a book written by Noam Chomsky in ?

A. 1957

B. 1958

C. 1959

D. 1960

Answer: A

17. The study of relationships between two or more languages and the investigation whether the common languages have a common ancestor is called ?

Undergraduate English Grammar Past Paper

- A. Psycho linguistics
- B. Sociolinguistics
- C. Comparative linguistics
- D. None of these

Answer: C

18. Morphology is the branch of linguistics which deals with?

- A. The study of the structure of sounds and symbols.
- B. Study of the structure of letters.
- C. The study of the structure of words
- D. N. O. T

Answer: C

19. Which among the following is an example acronym ?

- A. Smog
- B. UNESCO
- C. Buzz
- D. Edit

Answer: B

20. Which among the following is an example for portmanteau ?

- A. Smog
- B. UNESCO
- C. Buzz
- D. Edit

Answer: A

21. Words such as 'UNESCO' and 'RADAR' are instances of ?

- A. Compounding
- B. Acronym
- C. Reduplicates
- D. Conversion

Answer: B

22. Words such as 'edit' and 'house keep' are instances of ?

- A. Compounding
- B. Portmanteau
- C. Derivation
- D. Backformation

Answer: D

Undergraduate English Grammar Past Paper

23. Words such as 'smog' and 'motel' are instances of _____ ?

- A. Compounding
- B. Portmanteau
- C. Derivation
- D. Backformation

Answer: B

24. _____ is a process of word formation whereby new words are formed by subtracting a root by deleting final syllable which is misunderstood as a suffix?

- A. Compounding
- B. Portmanteau
- C. Derivation
- D. Backformation

Answer: D

25. _____ involves a different analysis of the structure of the word by attaching a consonant at the end of a word or a vowel at the beginning of the next word

- A. Portmanteau
- B. Onomatopoeia
- C. Clipping
- D. Meta analysis

Answer: D

26. _____ is a process of word formation wherein new words are coined by combining the segments of two different existing words?

- A. Compounding
- B. Portmanteau
- C. Derivation
- D. Backformation.

Answer: B

27. The /d/ in 'middle' is an instance of _____ ?

- A. Lateral plosion
- B. Alveolar plosion
- C. Nasal plosion
- D. Incomplete plosion.

Answer: A

28. A person fluent in two languages is known as _____?

- A. Bilingual
- B. Bigot
- C. Bigamy

Undergraduate English Grammar Past Paper

D. Brittle

Answer: A

29. The action or practice of persuading someone to do something by using force or Threats is known as _____?

- A. Coercion
- B. Conviction
- C. Confession
- D. Cajolement

Answer: A

30. A narrow piece of land connecting two large masses of land is known as _____?

- A. Gulf
- B. Isthmus
- C. Peninsula
- D. Continent

Answer: B

31. Government by a small group of all powerful persons is known as _____?

- A. Dictatorship
- B. Monarchy
- C. Oligarchy
- D. Anarchy

Answer: C

32. A person who helps another commit a crime is known as _____?

- A. Accomplice
- B. Amateur
- C. Cuckold
- D. Changeling

Answer: A

33. A sad poem usually written to praise and express sorrow for someone who is dead is known as _____?

- A. Elegy
- B. Oad
- C. Sestina
- D. Epic

Answer: A)

34. A long poem narrating achievements of a hero or legendary figures is known as _____?

- A. Epic
- B. Elegy
- C. Ode

Undergraduate English Grammar Past Paper

D. Sestina

Answer: A)

35. Which word has the underlined part pronounced differently from the rest?

- A. plough
- B. ground
- C. mouth
- D. southern
- E. trounce

Answer: D

36. One of these words does not describe a way of walking. Which one?

- A. waddle
- B. stroll
- C. limp
- D. amble
- E. hover

Answer: E

37. Find a synonym for the underlined word:

Rebecca stared back at us with such mournful eyes that we averted our gaze from her entirely.

- A. misty
- B. pitiful
- C. mocking
- D. greedy
- E. sad

ANSWER: E

38. David has lost his wallet again. It's the second time this

- A. will happen
- B. has happened
- C. happened
- D. happens
- E. had happened

Answer: B

39. He doesn't have that much experience. He's still wet behind the

- A. knees
- B. eyes
- C. ears
- D. tongue
- E. shoulders

Answer: C

Undergraduate English Grammar Past Paper

40. Little that there were people who had never been brought to justice for their crimes.

- A. I knew
- B. I did know
- C. did I know
- D. knew I
- E. I had known

Answer: C

41. The inspector is a very man who checks the evidence over and over again.

- A. attentive
- B. thorough
- C. thoughtful
- D. complete
- E. conscious

Answer: B

42. "I risked life and to save you and look at how ungrateful you are!" Charles shouted.

- A. limb
- B. flesh
- C. death
- D. soul
- E. being

Answer: A

43. He couldn't find two that matched, so he was forced to wear socks.

- A. mixed
- B. odd
- C. uneven
- D. unlike
- E. impaired

Answer: B

44. Match the halves of the phrases.

- | | | |
|-----------|-----|-----------|
| 1. fair | | a. breezy |
| 2. bright | | b. simple |
| 3. rough | and | c. void |
| 4. plain | | d. square |
| 5. null | | e. ready |

A. 1e/ 2c/ 3a/ 4d/ 5b

B. B)1b/ 2a/ 3c/ 4d/ 5e

Undergraduate English Grammar Past Paper

- C. 1d/ 2a/ 3c/ 4e/ 5b
- D. 1a/ 2c/ 3b/ 4e/ 5d
- E. 1d/ 2a/ 3e/ 4b/ 5c

Answer: E

45. Which among the following are the main properties of grammar ?
- A. To account by its rules for the infinite sentences of a language
 - B. To be explicit about the grammaticality of sentences
 - C. To predict all and the only possible grammatical sentences of a language
 - D. All the above

Answer: D

46. The theory of Transformational Generative Grammar is contained in?
- A. Chomsky's "Syntactic Structures"
 - B. Chomsky's "Aspects of the theory of Syntax"
 - C. Leonard Bloomfield's "Language"
 - D. Both "A" & "B"

Answer: D

47. The two great linguists who have contributed much to frame the device of Immediate Constituent analysis are ?
- A. Leonard Bloomfield & Noam Chomsky
 - B. Leonard Bloomfield & Max Muller
 - C. Max Muller & Herman Gundert
 - D. Edward Sapir & Ferdinand de Saussure

Answer: A

48. is a method of word formation whereby one or more syllables are removed from longer words ?
- A. Portmanteau
 - B. Onomatopoeia
 - C. Clipping
 - D. Metanalysis

Answer: C

49. The – s in 'she sings well' is ?
- A. An adjective forming morpheme
 - B. Plural morpheme
 - C. Possessive morpheme
 - D. Morpheme signaling third person singular

Answer: D

50. The – or in 'actor' is ?
- A. An adjective forming morpheme
 - B. Plural morpheme
 - C. Possessive morpheme
 - D. Noun forming morpheme

Answer: D

Undergraduate English Grammar Past Paper

51. The –s in 'john's' is ?

- A. An adjective forming morpheme
- B. Plural morpheme
- C. Possessive morpheme
- D. Past morpheme

Answer: C

52. The –ish in the word 'childish' is ?

- A. An adjective forming morpheme
- B. Plural morpheme
- C. Possessive morpheme
- D. Past morpheme

Answer: A

53. The final consonants /s/, /z/ and /iz/ in the words 'cats', 'dogs' and 'boxes' are instances of ?

- A. Allophones
- B. Allomorphs
- C. Minimal pairs
- D. None of the above

Answer: B

54. The form 'dog' is a morpheme?

- A. A free morpheme
- B. Free variation
- C. Bound morpheme
- D. None of these

Answer: A

55. A minimal meaningful unit in the grammatical system of a language is called ?

- A. Syllable
- B. Phoneme
- C. Morpheme
- D. Allomorph

Answer: C

56. /m/ is a consonant ?

- A. Bilabial
- B. Bilabial nasal
- C. Velar
- D. Glottal

Answer: B

57. How many types of phonetic transcriptions are generally followed ?

- A. Only one
- B. Two
- C. Innumerable
- D. None of the above

Undergraduate English Grammar Past Paper

Answer: B

58. The term _____ refers to omissions of certain sounds, syllables or even words in continuous speech?
- A. Alliteration
 - B. Assonance
 - C. Elision
 - D. None of the above

Answer: C

59. The term _____ refers to the phenomenon of pauses in speech?
- A. Stress
 - B. Pitch
 - C. Intonation
 - D. Juncture

Answer: D

60. How many stressed are generally marked ?
- A. Only one
 - B. Two
 - C. Three
 - D. Four

Answer: D

61. Something which is incapable of being seen through is known as _____?
- A. Non-transparent
 - B. Blurred
 - C. Opaque
 - D. All of the above

Answer: D

62. Something which is capable of being seen through is known as _____?
- A. Opaque
 - B. Coarse
 - C. Ambiguous
 - D. Transparent

Answer: D

63. One who is unable to pay debts owed is known as _____?
- A. Foreclosed
 - B. Insolvent
 - C. Bankrupt
 - D. All of the above

Answer: D

64. The teacher cautioned me _____ my spelling.
- A. For

Undergraduate English Grammar Past Paper

- B. Against
- C. At
- D. On

Answer: A

65. The train went _____ the tunnel.

- A. from
- B. under
- C. through
- D. to

Answer: C)

66. The jug is full ____ milk?

- A. of
- B. about
- C. by
- D. with

Answer: A)

67. Books are a great source _____ happiness.

- A. of
- B. for
- C. on
- D. with

Answer: A)

68. He is superior _____ me?

- A. To
- B. than
- C. With
- D. from

Answer: A)

69. He looks upset, I think he took the criticism _____ heart?

- A. to
- B. in
- C. about
- D. of

Answer: A

70. You can't always pass _____ appearance.

- A. Down
- B. By
- C. Into
- D. Of

Undergraduate English Grammar Past Paper

Answer: B

71. Both parties must adhere _____ the terms of the contract.

- A. In
- B. By
- C. On
- D. To

Answer: D

72. I was alarmed _____ his death.

- A. by
- B. at
- C. upon
- D. from

Answer: B

73. What type of narration is used in the following sentence?

"The mysterious door creaked open, revealing a dimly lit hallway."

- A. First-person
- B. Second-person
- C. Third-person limited
- D. Third-person omniscient

Answer: C)

74. Which sentence demonstrates an example of unreliable narration?

- A. "I saw the thief run past me with the stolen purse."
- B. "He claimed to have witnessed the accident, but I doubt his credibility."
- C. "We all knew she couldn't be trusted, especially after what she did."
- D. "You are the only one who knows the truth about what happened."

Answer: B

75. In which narrative perspective is the narrator not a character in the story and knows the thoughts and feelings of multiple characters?

- A. First-person limited
- B. Second-person
- C. Third-person omniscient
- D. Third-person objective

Answer: C

76. What tense and point of view is used in the following sentence?

"As I gazed at the stars, I felt a sense of peace wash over me."

- A. Present tense, first-person
- B. Past tense, second-person
- C. Past tense, third-person limited
- D. Present tense, third-person omniscient

Answer: A

Undergraduate English Grammar Past Paper

77. Which narrative technique involves the narrator addressing the reader directly?

- A. Stream of consciousness
- B. Epistolary
- C. Metafiction
- D. Breaking the fourth wall

Correct Answer: D

78. What narrative style is characterized by a continuous flow of thoughts, feelings, and associations of a character?

- A. Third-person objective
- B. Stream of consciousness
- C. Epistolary
- D. Omniscient narration

Answer: B

79. Which narrative mode is often used in detective stories where the narrator is unaware of some crucial information?

- A. First-person omniscient
- B. Second-person limited
- C. Third-person objective
- D. Unreliable narration

Answer: A

80. What is the term for a narrative device in which the story unfolds through a series of letters?

- A. Stream of consciousness
- B. Omniscient narration
- C. Epistolary
- D. Second-person limited

Answer: C

81. In which narrative perspective does the narrator use "I" and is typically a character in the story?

- A. First-person
- B. Second-person
- C. Third-person limited
- D. Third-person omniscient

Answer: A

82. What type of narration is characterized by the narrator only knowing the external actions and dialogue of the characters, without access to their thoughts or feelings?

- A. First-person omniscient
- B. Second-person limited
- C. Third-person objective
- D. Third-person limited

Undergraduate English Grammar Past Paper

Answer: C

83. The initial sounds in the words 'ship', 'church' and 'judge' are examples for ?

- A. Palato-alveolar
- B. Palatal
- C. Velar
- D. Bilabial

Answer: A

84. /f/ and /v/ are ?

- A. Dental
- B. Labio-dental
- C. Bilabial
- D. Alveolar

Answer: B

85. are sounds articulated in the glottis ?

- A. Glottal
- B. Velar
- C. Palatal
- D. None of the above

Answer: A

86. are produced involving the tip of the tongue and the back part of the teeth ridge ?

- A. Post alveolar
- B. Palate alveolar
- C. Palatal
- D. Velar

Answer: A

87. are articulated by raising the front of the tongue towards the hard palate ?

- A. Post alveolar
- B. Palate alveolar
- C. Palatal
- D. Velar

Answer: C

88. Sounds articulated by the tip of the tongue placed against the upper teeth are called ?

- A. Dental
- B. Labiodental
- C. Bilabial
- D. Alveolar

Answer: A

89. Sounds articulated by two lips are called ?

Undergraduate English Grammar Past Paper

- A. Dental
- B. Bilabial
- C. Labiodental
- D. Alveolar

Answer: B

90. is a unit of speech which is at a level higher than the speech sound or phoneme ?
- A. Syllable
 - B. Stress
 - C. Intonation
 - D. Pitch

Answer: A

91. Faiz Ahmed Faiz is related to poetry in the same way as Ali Imam is related to

- A. Literature
- B. Drama
- C. Poetry
- D. Painting

Answer: D

92. Borrower is related to Loan in the same way as Beggar is related to

- A. Alms
- B. Mercy
- C. Money
- D. Gift

Answer: A

93. Waves is related to Air in the same way as Ripples is related to

- A. Wind
- B. Water
- C. Storm
- D. Smoke

Answer: A

94. Institute is related to Academy in the same way as Decree is related to

- A. Blame
- B. Court
- C. Judge
- D. Mandate

Answer: D

95. Hygienic is related to Polluted in the same way as Knowing is related to

- A. Ingenuous
- B. Uncommon
- C. Secret

Undergraduate English Grammar Past Paper

D. Sagacious
Answer: A

96. **Jesus is related to Christians in the same way as Zoroaster is related to**?

- A. Jews
- B. Parsis
- C. Sikh
- D. Catholics

Answer: B

97. **Palm is related to Hand in the same way as Sole is related to**?

- A. Leg
- B. Ankle
- C. Knee
- D. Foot

Answer: D

98. **Young is related to Old in the same way as Wild is related to**?

- A. Insufficient
- B. Big
- C. Narrow
- D. Long

Answer: C

99. **Auger is related to Carpenter in the same way as Awl is related to**?

- A. Sculptor
- B. Cobbler
- C. Chef
- D. Mason

Answer: B

100. **Bird is related to Aviary in the same way as Bees is related to**?

- A. Aquarium
- B. Hive
- C. Brewery
- D. Apiary

Answer: D

Undergraduate English Grammar Past Paper

Bachelor English Grammar Past Paper

1. A term which refers to the sequential characteristics of language. When we construct WORDS and SENTENCES we follow a certain order in arranging the individual items.

- A. Syntagmatic
- B. Synergy
- C. Performance
- D. N. O. T

Answer: A

2. A term introduced by the linguist SAUSSURE which refers to the state of a language as it exists at any given time.

- A. Synchrony
- B. Diachrony
- C. Paradigmatic
- D. N. O. T

Answer: A

3. The study of signs is termed as ?

- A. Semiotics
- B. Semantics
- C. Paradigmatic
- D. Parole

Answer: A

4. In its general sense it refers to the creative capacity of language users to produce an endless number of new sentences, in contrast to the communication systems of animals is called ?

- A. Productivity
- B. Langue
- C. Paradigmatic
- D. Parole

Answer: A

5. is term introduced by CHOMSKY to describe 'the actual use of language in concrete situations':

- A. Performance
- B. Parole
- C. Paradigmatic
- D. N. O. T

Answer: A

6. A pair of terms introduced by Noam CHOMSKY in 1965 to describe native speakers' intuitions about the grammatical correctness, or otherwise, of sentences.

- A. Both b and c

Bachelor English Grammar Past Paper

- B. Diachrony/Synchrony
- C. Acceptable/Unacceptable
- D. N. O. T

Answer: C

7. The study of language and mind, which has greatly advanced our understanding of the way in which we acquire language is ?

- A. Sociolinguistics
- B. Psycholinguistics
- C. Bio linguistics
- D. None of these

Answer: B

8. Who argues that language is a unique evolutionary development of the human species and distinguished from modes of communication used by any other animal species ?

- A. Ferdinand De Saussure
- B. Albert Chomsky
- C. Noam Chomsky
- D. Noah Webster

Answer: C

9. Father of modern linguistics is _ ?

- A. Noam Chomsky
- B. Ferdinand De Saussure
- C. None of these
- D. Both A and B

Answer: A

10. The theory of Bio linguistics is given by ?

- A. Noam Chomsky
- B. Ferdinand De Saussure
- C. Steven Pinker
- D. Enoch Powell

Answer: A

11. Transformational-generative grammar is a broad theory used to model, encode, and deduce a native speaker's linguistic capabilities, was developed by ?

- A. Noam Chomsky
- B. Ferdinand De Saussure
- C. Leon Battista Alberti

Bachelor English Grammar Past Paper

D. Enoch Powell

Answer: A

12. Chomsky developed Transformational-Generative Grammar in ?

A. 1950

B. 1951

C. 1952

D. 1953

Answer: A

13. Competence is a term to describe the knowledge possessed by native users of a language which enables them to speak and understand their language fluently was introduced by ?

A. Ferdinand De Saussure

B. Enoch Powel

C. Noam Chomsky

D. None of these

Answer: C

14. is a term denotes historical perspective for studying language ?

A. Synchrony

B. Diachrony

C. Both a and b

D. None of these

Answer: B

15. "Reflections on Language" is a book written by Noam Chomsky in ?

A. 1975

B. 1976

C. 1977

D. 1988

Answer: A

16. "The Syntactic Structures" is a book written by Noam Chomsky in ?

A. 1957

B. 1958

C. 1959

D. 1960

Answer: A

17. The study of relationships between two or more languages and the investigation whether the common languages have a common ancestor is called ?

Bachelor English Grammar Past Paper

- A. Psycho linguistics
- B. Sociolinguistics
- C. Comparative linguistics
- D. None of these

Answer: C

18. Morphology is the branch of linguistics which deals with?

- A. The study of the structure of sounds and symbols.
- B. Study of the structure of letters.
- C. The study of the structure of words
- D. N. O. T

Answer: C

19. Which among the following is an example acronym ?

- A. Smog
- B. UNESCO
- C. Buzz
- D. Edit

Answer: B

20. Which among the following is an example for portmanteau ?

- A. Smog
- B. UNESCO
- C. Buzz
- D. Edit

Answer: A

21. Words such as 'UNESCO' and 'RADAR' are instances of ?

- A. Compounding
- B. Acronym
- C. Reduplicates
- D. Conversion

Answer: B

22. Words such as 'edit' and 'house keep' are instances of ?

- A. Compounding
- B. Portmanteau
- C. Derivation
- D. Backformation

Answer: D

Bachelor English Grammar Past Paper

23. Words such as 'smog' and 'motel' are instances of _____ ?

- A. Compounding
- B. Portmanteau
- C. Derivation
- D. Backformation

Answer: B

24. is a process of word formation whereby new words are formed by subtracting a root by deleting final syllable which is misunderstood as a suffix?

- A. Compounding
- B. Portmanteau
- C. Derivation
- D. Backformation

Answer: D

25. involves a different analysis of the structure of the word by attaching a consonant at the end of a word or a vowel at the beginning of the next word

- A. Portmanteau
- B. Onomatopoeia
- C. Clipping
- D. Meta analysis

Answer: D

26. is a process of word formation wherein new words are coined by combining the segments of two different existing words?

- A. Compounding
- B. Portmanteau
- C. Derivation
- D. Backformation.

Answer: B

27. The /d/ in 'middle' is an instance of _____ ?

- A. Lateral plosion
- B. Alveolar plosion
- C. Nasal plosion
- D. Incomplete plosion.

Answer: A

28. A person fluent in two languages is known as _____?

- A. Bilingual
- B. Bigot
- C. Bigamy

Bachelor English Grammar Past Paper

D. Brittle

Answer: A

29. The action or practice of persuading someone to do something by using force or Threats is known as _____?

- A. Coercion
- B. Conviction
- C. Confession
- D. Cajolement

Answer: A

30. A narrow piece of land connecting two large masses of land is known as _____?

- A. Gulf
- B. Isthmus
- C. Peninsula
- D. Continent

Answer: B

31. Government by a small group of all powerful persons is known as _____?

- A. Dictatorship
- B. Monarchy
- C. Oligarchy
- D. Anarchy

Answer: C

32. A person who helps another commit a crime is known as _____?

- A. Accomplice
- B. Amateur
- C. Cuckold
- D. Changeling

Answer: A

33. A sad poem usually written to praise and express sorrow for someone who is dead is known as _____?

- A. Elegy
- B. Oad
- C. Sestina
- D. Epic

Answer: A)

34. A long poem narrating achievements of a hero or legendary figures is known as _____?

- A. Epic
- B. Elegy
- C. Ode

Bachelor English Grammar Past Paper

D. Sestina

Answer: A)

35. Which word has the underlined part pronounced differently from the rest?

- A. plough
- B. ground
- C. mouth
- D. southern
- E. trounce

Answer: D

36. One of these words does not describe a way of walking. Which one?

- A. waddle
- B. stroll
- C. limp
- D. amble
- E. hover

Answer: E

37. Find a synonym for the underlined word:

Rebecca stared back at us with such mournful eyes that we averted our gaze from her entirely.

- A. misty
- B. pitiful
- C. mocking
- D. greedy
- E. sad

ANSWER: E

38. David has lost his wallet again. It's the second time this

- A. will happen
- B. has happened
- C. happened
- D. happens
- E. had happened

Answer: B

39. He doesn't have that much experience. He's still wet behind the

- A. knees
- B. eyes
- C. ears
- D. tongue
- E. shoulders

Answer: C

Bachelor English Grammar Past Paper

40. Little that there were people who had never been brought to justice for their crimes.

- A. I knew
- B. I did know
- C. did I know
- D. knew I
- E. I had known

Answer: C

41. The inspector is a very man who checks the evidence over and over again.

- A. attentive
- B. thorough
- C. thoughtful
- D. complete
- E. conscious

Answer: B

42. "I risked life and to save you and look at how ungrateful you are!" Charles shouted.

- A. limb
- B. flesh
- C. death
- D. soul
- E. being

Answer: A

43. He couldn't find two that matched, so he was forced to wear socks.

- A. mixed
- B. odd
- C. uneven
- D. unlike
- E. impaired

Answer: B

44. Match the halves of the phrases.

- | | | |
|-----------|-----|-----------|
| 1. fair | | a. breezy |
| 2. bright | | b. simple |
| 3. rough | and | c. void |
| 4. plain | | d. square |
| 5. null | | e. ready |

A. 1e/ 2c/ 3a/ 4d/ 5b

B. B)1b/ 2a/ 3c/ 4d/ 5e

Bachelor English Grammar Past Paper

- C. 1d/ 2a/ 3c/ 4e/ 5b
- D. 1a/ 2c/ 3b/ 4e/ 5d
- E. 1d/ 2a/ 3e/ 4b/ 5c

Answer: E

45. Which among the following are the main properties of grammar ?
- A. To account by its rules for the infinite sentences of a language
 - B. To be explicit about the grammaticality of sentences
 - C. To predict all and the only possible grammatical sentences of a language
 - D. All the above

Answer: D

46. The theory of Transformational Generative Grammar is contained in?
- A. Chomsky's "Syntactic Structures"
 - B. Chomsky's "Aspects of the theory of Syntax"
 - C. Leonard Bloomfield's "Language"
 - D. Both "A" & "B"

Answer: D

47. The two great linguists who have contributed much to frame the device of Immediate Constituent analysis are ?
- A. Leonard Bloomfield & Noam Chomsky
 - B. Leonard Bloomfield & Max Muller
 - C. Max Muller & Herman Gundert
 - D. Edward Sapir & Ferdinand de Saussure

Answer: A

48. is a method of word formation whereby one or more syllables are removed from longer words ?
- A. Portmanteau
 - B. Onomatopoeia
 - C. Clipping
 - D. Metanalysis

Answer: C

49. The – s in 'she sings well' is ?
- A. An adjective forming morpheme
 - B. Plural morpheme
 - C. Possessive morpheme
 - D. Morpheme signaling third person singular

Answer: D

50. The – or in 'actor' is ?
- A. An adjective forming morpheme
 - B. Plural morpheme
 - C. Possessive morpheme
 - D. Noun forming morpheme

Answer: D

Bachelor English Grammar Past Paper

51. The –s in 'john's' is ?

- A. An adjective forming morpheme
- B. Plural morpheme
- C. Possessive morpheme
- D. Past morpheme

Answer: C

52. The –ish in the word 'childish' is ?

- A. An adjective forming morpheme
- B. Plural morpheme
- C. Possessive morpheme
- D. Past morpheme

Answer: A

53. The final consonants /s/, /z/ and /iz/ in the words 'cats', 'dogs' and 'boxes' are instances of ?

- A. Allophones
- B. Allomorphs
- C. Minimal pairs
- D. None of the above

Answer: B

54. The form 'dog' is a morpheme?

- A. A free morpheme
- B. Free variation
- C. Bound morpheme
- D. None of these

Answer: A

55. A minimal meaningful unit in the grammatical system of a language is called ?

- A. Syllable
- B. Phoneme
- C. Morpheme
- D. Allomorph

Answer: C

56. /m/ is a consonant ?

- A. Bilabial
- B. Bilabial nasal
- C. Velar
- D. Glottal

Answer: B

57. How many types of phonetic transcriptions are generally followed ?

- A. Only one
- B. Two
- C. Innumerable
- D. None of the above

Bachelor English Grammar Past Paper

Answer: B

58. The term _____ refers to omissions of certain sounds, syllables or even words in continuous speech?

- A. Alliteration
- B. Assonance
- C. Elision
- D. None of the above

Answer: C

59. The term _____ refers to the phenomenon of pauses in speech?

- A. Stress
- B. Pitch
- C. Intonation
- D. Juncture

Answer: D

60. How many stressed are generally marked ?

- A. Only one
- B. Two
- C. Three
- D. Four

Answer: D

61. Something which is incapable of being seen through is known as _____?

- A. Non-transparent
- B. Blurred
- C. Opaque
- D. All of the above

Answer: D

62. Something which is capable of being seen through is known as _____?

- A. Opaque
- B. Coarse
- C. Ambiguous
- D. Transparent

Answer: D

63. One who is unable to pay debts owed is known as _____?

- A. Foreclosed
- B. Insolvent
- C. Bankrupt
- D. All of the above

Answer: D

64. The teacher cautioned me _____ my spelling.

- A. For

Bachelor English Grammar Past Paper

- B. Against
- C. At
- D. On

Answer: A

65. The train went _____ the tunnel.

- A. from
- B. under
- C. through
- D. to

Answer: C)

66. The jug is full ____ milk?

- A. of
- B. about
- C. by
- D. with

Answer: A)

67. Books are a great source _____ happiness.

- A. of
- B. for
- C. on
- D. with

Answer: A)

68. He is superior _____ me?

- A. To
- B. than
- C. With
- D. from

Answer: A)

69. He looks upset, I think he took the criticism _____ heart?

- A. to
- B. in
- C. about
- D. of

Answer: A

70. You can't always pass _____ appearance.

- A. Down
- B. By
- C. Into
- D. Of

Bachelor English Grammar Past Paper

Answer: B

71. Both parties must adhere _____ the terms of the contract.

- A. In
- B. By
- C. On
- D. To

Answer: D

72. I was alarmed _____ his death.

- A. by
- B. at
- C. upon
- D. from

Answer: B

73. What type of narration is used in the following sentence?

"The mysterious door creaked open, revealing a dimly lit hallway."

- A. First-person
- B. Second-person
- C. Third-person limited
- D. Third-person omniscient

Answer: C)

74. Which sentence demonstrates an example of unreliable narration?

- A. "I saw the thief run past me with the stolen purse."
- B. "He claimed to have witnessed the accident, but I doubt his credibility."
- C. "We all knew she couldn't be trusted, especially after what she did."
- D. "You are the only one who knows the truth about what happened."

Answer: B

75. In which narrative perspective is the narrator not a character in the story and knows the thoughts and feelings of multiple characters?

- A. First-person limited
- B. Second-person
- C. Third-person omniscient
- D. Third-person objective

Answer: C

76. What tense and point of view is used in the following sentence?

"As I gazed at the stars, I felt a sense of peace wash over me."

- A. Present tense, first-person
- B. Past tense, second-person
- C. Past tense, third-person limited
- D. Present tense, third-person omniscient

Answer: A

Bachelor English Grammar Past Paper

77. Which narrative technique involves the narrator addressing the reader directly?

- A. Stream of consciousness
- B. Epistolary
- C. Metafiction
- D. Breaking the fourth wall

Correct Answer: D

78. What narrative style is characterized by a continuous flow of thoughts, feelings, and associations of a character?

- A. Third-person objective
- B. Stream of consciousness
- C. Epistolary
- D. Omniscient narration

Answer: B

79. Which narrative mode is often used in detective stories where the narrator is unaware of some crucial information?

- A. First-person omniscient
- B. Second-person limited
- C. Third-person objective
- D. Unreliable narration

Answer: A

80. What is the term for a narrative device in which the story unfolds through a series of letters?

- A. Stream of consciousness
- B. Omniscient narration
- C. Epistolary
- D. Second-person limited

Answer: C

81. In which narrative perspective does the narrator use "I" and is typically a character in the story?

- A. First-person
- B. Second-person
- C. Third-person limited
- D. Third-person omniscient

Answer: A

82. What type of narration is characterized by the narrator only knowing the external actions and dialogue of the characters, without access to their thoughts or feelings?

- A. First-person omniscient
- B. Second-person limited
- C. Third-person objective
- D. Third-person limited

Bachelor English Grammar Past Paper

Answer: C

83. The initial sounds in the words 'ship', 'church' and 'judge' are examples for ?

- A. Palato-alveolar
- B. Palatal
- C. Velar
- D. Bilabial

Answer: A

84. /f/ and /v/ are ?

- A. Dental
- B. Labio-dental
- C. Bilabial
- D. Alveolar

Answer: B

85. are sounds articulated in the glottis ?

- A. Glottal
- B. Velar
- C. Palatal
- D. None of the above

Answer: A

86. are produced involving the tip of the tongue and the back part of the teeth ridge ?

- A. Post alveolar
- B. Palate alveolar
- C. Palatal
- D. Velar

Answer: A

87. are articulated by raising the front of the tongue towards the hard palate ?

- A. Post alveolar
- B. Palate alveolar
- C. Palatal
- D. Velar

Answer: C

88. Sounds articulated by the tip of the tongue placed against the upper teeth are called ?

- A. Dental
- B. Labiodental
- C. Bilabial
- D. Alveolar

Answer: A

89. Sounds articulated by two lips are called ?

Bachelor English Grammar Past Paper

- A. Dental
- B. Bilabial
- C. Labiodental
- D. Alveolar

Answer: B

90. is a unit of speech which is at a level higher than the speech sound or phoneme ?
- A. Syllable
 - B. Stress
 - C. Intonation
 - D. Pitch

Answer: A

91. Faiz Ahmed Faiz is related to poetry in the same way as Ali Imam is related to

- A. Literature
- B. Drama
- C. Poetry
- D. Painting

Answer: D

92. Borrower is related to Loan in the same way as Beggar is related to

- A. Alms
- B. Mercy
- C. Money
- D. Gift

Answer: A

93. Waves is related to Air in the same way as Ripples is related to

- A. Wind
- B. Water
- C. Storm
- D. Smoke

Answer: A

94. Institute is related to Academy in the same way as Decree is related to

- A. Blame
- B. Court
- C. Judge
- D. Mandate

Answer: D

95. Hygienic is related to Polluted in the same way as Knowing is related to

- A. Ingenuous
- B. Uncommon
- C. Secret

Bachelor English Grammar Past Paper

D. Sagacious
Answer: A

96. **Jesus is related to Christians in the same way as Zoroaster is related to**?

- A. Jews
- B. Parsis
- C. Sikh
- D. Catholics

Answer: B

97. **Palm is related to Hand in the same way as Sole is related to**?

- A. Leg
- B. Ankle
- C. Knee
- D. Foot

Answer: D

98. **Young is related to Old in the same way as Wild is related to**?

- A. Insufficient
- B. Big
- C. Narrow
- D. Long

Answer: C

99. **Auger is related to Carpenter in the same way as Awl is related to**?

- A. Sculptor
- B. Cobbler
- C. Chef
- D. Mason

Answer: B

100. **Bird is related to Aviary in the same way as Bees is related to**?

- A. Aquarium
- B. Hive
- C. Brewery
- D. Apiary

Answer: D

Bachelor English Grammar Past Paper

Masters/M.Phil English Grammar Past Paper

1. The type of study of the changes in language over a span of time is called?
- A. Synchronic
 - B. Diachronic
 - C. Semiotic
 - D. Onomatopoeic

Answer: B

2. Language is never static. It goes on changing. This property of language is called ?
- A. Dynamic
 - E. Recursiveness
 - F. Displacement
 - G. Transference

Answer: A

3. Human beings can talk about experiences, objects and events which are not present at the time and place of speaking. This property of language is called ?
- A. Duality of structure
 - B. Recursiveness
 - C. Displacement
 - D. Transference

Answer: C

4. Human language is structured at the levels of phonemes and morphemes and at the level of words. This property of language is called ?
- A. Duality of structure
 - B. Recursiveness
 - C. Displacement
 - D. Transference.

Answer: A

5. A term which refers to the sequential characteristics of language. When we construct WORDS and SENTENCES we follow a certain order in arranging the individual items.

- A. Syntagmatic
- B. Synergy
- C. Performance
- D. N. O. T

Answer: A

6. A term introduced by the linguist SAUSSURE which refers to the state of a language as it exists at any given time.

- A. Synchrony
- B. Diachrony
- C. Paradigmatic
- D. N. O. T

Masters/M.Phill English Grammar Past Paper

Answer: A

7. The study of signs is termed as?

- A. Semiotics
- B. Semantics
- C. Paradigmatic
- D. Parole

Answer: A

8. In its general sense it refers to the creative capacity of language users to produce an endless number of new sentences, in contrast to the communication systems of animals is called ?

- A. Productivity
- B. Langue
- C. Paradigmatic
- D. Parole

Answer: A

9. is term introduced by CHOMSKY to describe 'the actual use of language in concrete situations':

- A. Performance
- B. Parole
- C. Paradigmatic
- D. N. O. T

Answer: A

10. A pair of terms introduced by Noam CHOMSKY in 1965 to describe native speakers' intuitions about the grammatical correctness, or otherwise, of sentences.

- A. Both b and c
- B. Diachrony/Synchrony
- C. Acceptable/Unacceptable
- D. N. O. T

Answer: C

11. The study of language and mind, which has greatly advanced our understanding of the way in which we acquire language is ?

- A. Sociolinguistics
- B. Psycholinguistics
- C. Bio linguistics
- D. None of these

Answer: B

12. Who argues that language is a unique evolutionary development of the human species and distinguished from modes of communication used by any other animal species ?

Masters/M.Phil English Grammar Past Paper

- A. Ferdinand De Saussure
- B. Albert Chomsky
- C. Noam Chomsky
- D. Noah Webster

Answer: C

13. Father of modern linguistics is _ ?

- A. Noam Chomsky
- B. Ferdinand De Saussure
- C. None of these
- D. Both A and B

Answer: A

14. The theory of Bio linguistics is given by?

- A. Noam Chomsky
- B. Ferdinand De Saussure
- C. Steven Pinker
- D. Enoch Powell

Answer: A

15. Transformational-generative grammar is a broad theory used to model, encode, and deduce a native speaker's linguistic capabilities, was developed by ?

- A. Noam Chomsky
- B. Ferdinand De Saussure
- C. Leon Battista Alberti
- D. Enoch Powell

Answer: A

16. Chomsky developed Transformational-Generative Grammar in ?

- A. 1950
- B. 1951
- C. 1952
- D. 1953

Answer: A

17. Competence is a term to describe the knowledge possessed by native users of a language which enables them to speak and understand their language fluently was introduced by ?

- A. Ferdinand De Saussure
- B. Enoch Powel
- C. Noam Chomsky
- D. None of these

Masters/M.Phill English Grammar Past Paper

Answer: C

18. is a term denotes historical perspective for studying language ?

- A. Synchrony
- B. Diachrony
- C. Both a and b
- D. None of these

Answer: B

19. "Reflections on Language" is a book written by Noam Chomsky in ?

- A. 1975
- B. 1976
- C. 1977
- D. 1988

Answer: A

20. "The Syntactic Structures" is a book written by Noam Chomsky in ?

- A. 1957
- B. 1958
- C. 1959
- D. 1960

Answer: A

21. The study of relationships between two or more languages and the investigation whether the common language have a common ancestor is called ?

- A. Psycho linguistics
- B. Sociolinguistics
- C. Comparative linguistics
- D. None of these

Answer: C

22. Morphology is the branch of linguistics which deals with?

- A. The study of the structure of sounds and symbols.
- B. Study of the structure of letters.
- C. The study of the structure of words
- D. N. O. T

Answer: C

23. Which among the following is an example acronym ?

- A. Smog
- B. UNESCO
- C. Buzz

Masters/M.Phill English Grammar Past Paper

D. Edit

Answer: B

24. Which among the following is an example for portmanteau ?

A. Smog

B. UNESCO

C. Buzz

D. Edit

Answer: A

25. Words such as 'UNESCO' and 'RADAR' are instances of ?

A. Compounding

B. Acronym

C. Reduplicates

D. Conversion

Answer: B

26. Words such as 'edit' and 'house keep' are instances of ?

A. Compounding

B. Portmanteau

C. Derivation

D. Backformation

Answer: D

27. Words such as 'smog' and 'motel' are instances of ?

A. Compounding

B. Portmanteau

C. Derivation

D. Backformation

Answer: B

28. is a process of word formation whereby new words are formed by subtracting a root by deleting final syllable which is misunderstood as a suffix?

A. Compounding

B. Portmanteau

C. Derivation

D. Backformation

Answer: D

29. involves a different analysis of the structure of the word by attaching a consonant at the end of a word or a vowel at the beginning of the next word

A. Portmanteau

Masters/M.Phill English Grammar Past Paper

- B. Onomatopoeia
- C. Clipping
- D. Meta analysis

Answer: D

30. is a process of word formation wherein new words are coined by combining the segments of two different existing words?

- A. Compounding
- B. Portmanteau
- C. Derivation
- D. Backformation.

Answer: B

31. The /d/ in 'middle' is an instance of ?

- A. Lateral plosion
- B. Alveolar plosion
- C. Nasal plosion
- D. Incomplete plosion.

Answer: A

32. A person fluent in two languages is known as _____?

- A. Bilingual
- B. Bigot
- C. Bigamy
- D. Brittle

Answer: A

33. The action or practice of persuading someone to do something by using force or threats is known as _____?

- A. Coercion
- B. Conviction
- C. Confession
- D. Cajolement

Answer: A

34. A narrow piece of land connecting two large masses of land is known as _____?

- A. Gulf
- B. Isthmus
- C. Peninsula
- D. Continent

Answer: B

35. Government by a small group of all powerful persons is known as _____?

- A. Dictatorship
- B. Monarchy

Masters/M.Phill English Grammar Past Paper

- C. Oligarchy
- D. Anarchy

Answer: C

36. A person who helps another commit a crime is known as _____?

- A. Accomplice
- B. Amateur
- C. Cuckold
- D. Changeling

Answer: A

37. A sad poem usually written to praise and express sorrow for someone who is dead is known as _____?

- A. Elegy
- B. Oad
- C. Sestina
- D. Epic

Answer: A)

38. A long poem narrating achievements of a hero or legendary figures is known as _____?

- A. Epic
- B. Elegy
- C. Ode
- D. Sestina

Answer: A)

39. Which word has the underlined part pronounced differently from the rest?

- A. plough
- B. ground
- C. mouth
- D. southern
- E. trounce

Answer: D

40. One of these words does not describe a way of walking. Which one?

- A. waddle
- B. stroll
- C. limp
- D. amble
- E. hover

Answer: E

41. Find a synonym for the underlined word:

Rebecca stared back at us with such mournful eyes that we averted our gaze from her entirely.

Masters/M.Phill English Grammar Past Paper

- A. misty
- B. pitiful
- C. mocking
- D. greedy
- E. sad

ANSWER: E

42. David has lost his wallet again. It's the second time this

- A. will happen
- B. has happened
- C. happened
- D. happens
- E. had happened

Answer: B

43. He doesn't have that much experience. He's still wet behind the

- A. knees
- B. eyes
- C. ears
- D. tongue
- E. shoulders

Answer: C

44. Little that there were people who had never been brought to justice for their crimes.

- A. I knew
- B. I did know
- C. did I know
- D. knew I
- E. I had known

Answer: C

45. The inspector is a very man who checks the evidence over and over again.

- A. attentive
- B. thorough
- C. thoughtful
- D. complete
- E. conscious

Answer: B

46. "I risked life and to save you and look at how ungrateful you are!" Charles shouted.

- a. limb

Masters/M.Phill English Grammar Past Paper

- b. flesh
- c. death
- d. soul
- e. being

Answer: A

47. He couldn't find two that matched, so he was forced to wear socks.

- A. mixed
- B. odd
- C. uneven
- D. unlike
- E. impaired

Answer: B

48. Match the halves of the phrases.

- | | | |
|-----------|-----|-----------|
| 1. fair | | a. breezy |
| 2. bright | | b. simple |
| 3. rough | and | c. void |
| 4. plain | | d. square |
| 5. null | | e. ready |

- A. 1e/ 2c/ 3a/ 4d/ 5b
- B. B)1b/ 2a/ 3c/ 4d/ 5e
- C. 1d/ 2a/ 3c/ 4e/ 5b
- D. 1a/ 2c/ 3b/ 4e/ 5d
- E. 1d/ 2a/ 3e/ 4b/ 5c

Answer: E

49. Which among the following are the main properties of grammar ?

- a. To account by its rules for the infinite sentences of a language
- b. To be explicit about the grammaticality of sentences
- c. To predict all and the only possible grammatical sentences of a language
- d. All the above

Answer: D

50. The theory of Transformational Generative Grammar is contained in?

- a. Chomsky's "Syntactic Structures"
- b. Chomsky's "Aspects of the theory of Syntax"
- c. Leonard Bloomfield's "Language"
- d. Both "A" & "B"

Answer: D

51. The two great linguists who have contributed much to frame the device of Immediate Constituent analysis are

- a. Leonard Bloomfield & Noam Chomsky
- b. Leonard Bloomfield & Max Muller
- c. Max Muller & Herman Gundert
- d. Edward Sapir & Ferdinand de Saussure

Answer: A

Masters/M.Phill English Grammar Past Paper

52. is a method of word formation whereby one or more syllables are removed from longer words ?

- a. Portmanteau
- b. Onomatopoeia
- c. Clipping
- d. Metanalysis

Answer: C

53. The –s in 'she sings well' is ?

- a. An adjective forming morpheme
- b. Plural morpheme
- c. Possessive morpheme
- d. Morpheme signaling third person singular

Answer: D

54. The –or in 'actor' is ?

- a. An adjective forming morpheme
- b. Plural morpheme
- c. Possessive morpheme
- d. Noun forming morpheme

Answer: D

55. The –s in 'john's' is ?

- a. An adjective forming morpheme
- b. Plural morpheme
- c. Possessive morpheme
- d. Past morpheme

Answer: C

56. The –ish in the word 'childish' is ?

- a. An adjective forming morpheme
- b. Plural morpheme
- c. Possessive morpheme
- d. Past morpheme

Answer: A

57. The final consonants /s/, /z/ and /ɪz/ in the words 'cats', 'dogs' and 'boxes' are instances of ?

- a. Allophones
- b. Allomorphs
- c. Minimal pairs
- d. None of the above

Answer: B

58. The form 'dog' is a morpheme?

- a. A free morpheme
- b. Free variation
- c. Bound morpheme
- d. None of these

Masters/M.Phill English Grammar Past Paper

Answer: A

59. A minimal meaningful unit in the grammatical system of a language is called ?

- a. Syllable
- b. Phoneme
- c. Morpheme
- d. Allomorph

Answer: C

60. /m/ is a consonant ?

- a. Bilabial
- b. Bilabial nasal
- c. Velar
- d. Glottal

Answer: B

61. How many types of phonetic transcriptions are generally followed ?

- a. Only one
- b. Two
- c. Innumerable
- d. None of the above

Answer: B

62. The term _____ refers to omissions of certain sounds, syllables or even words in continuous speech?

- a. Alliteration
- b. Assonance
- c. Elision
- d. None of the above

Answer: C

63. The term _____ refers to the phenomenon of pauses in speech?

- a. Stress
- b. Pitch
- c. Intonation
- d. Juncture

Answer: D

64. How many stressed are generally marked ?

- a. Only one
- b. Two
- c. Three
- d. Four

Answer: D

65. Something which is incapable of being seen through is known as _____?

- A. Non-transparent
- B. Blurred
- C. Opaque

Masters/M.Phill English Grammar Past Paper

D. All of the above

Answer: D

66. Something which is capable of being seen through is known as _____?

- A. Opaque
- B. Coarse
- C. Ambiguous
- D. Transparent

Answer: D

67. One who is unable to pay debts owed is known as _____?

- A. Foreclosed
- B. Insolvent
- C. Bankrupt
- D. All of the above

Answer: D

68. The teacher cautioned me _____ my spelling.

- A. For
- B. Against
- C. At
- D. On

Answer: A

69. The train went _____ the tunnel.

- A. from
- B. under
- C. through
- D. to

Answer: C)

70. The jug is full ____ milk?

- A. of
- B. about
- C. by
- D. with

Answer: A)

71. Books are a great source _____ happiness.

- A. of
- B. for
- C. on
- D. with

Answer: A)

72. He is superior _____ me?

Masters/M.Phill English Grammar Past Paper

- A. To
- B. than
- C. With
- D. from

Answer: A)

73. He looks upset, I think he took the criticism _____ heart?

- A. to
- B. in
- C. about
- D. of

Answer: A

74. You can't always pass _____ appearance.

- A. Down
- B. By
- C. Into
- D. Of

Answer: B

75. Both parties must adhere _____ the terms of the contract.

- A. In
- B. By
- C. On
- D. To

Answer: D

76. I was alarmed _____ his death.

- A. by
- B. at
- C. upon
- D. from

Answer: B

77. What type of narration is used in the following sentence?

"The mysterious door creaked open, revealing a dimly lit hallway."

- A. First-person
- B. Second-person
- C. Third-person limited
- D. Third-person omniscient

Answer: C)

78. Which sentence demonstrates an example of unreliable narration?

- A. "I saw the thief run past me with the stolen purse."
- B. "He claimed to have witnessed the accident, but I doubt his credibility."
- C. "We all knew she couldn't be trusted, especially after what she did."
- D. "You are the only one who knows the truth about what happened."

Masters/M.Phill English Grammar Past Paper

Answer: B

79. In which narrative perspective is the narrator not a character in the story and knows the thoughts and feelings of multiple characters?

- A. First-person limited
- B. Second-person
- C. Third-person omniscient
- D. Third-person objective

Answer: C

80. What tense and point of view is used in the following sentence?

"As I gazed at the stars, I felt a sense of peace wash over me."

- A. Present tense, first-person
- B. Past tense, second-person
- C. Past tense, third-person limited
- D. Present tense, third-person omniscient

Answer: A

81. Which narrative technique involves the narrator addressing the reader directly?

- A. Stream of consciousness
- B. Epistolary
- C. Metafiction
- D. Breaking the fourth wall

Correct Answer: D

82. What narrative style is characterized by a continuous flow of thoughts, feelings, and associations of a character?

- a. Third-person objective
- b. Stream of consciousness
- c. Epistolary
- d. Omniscient narration

Answer: B

83. Which narrative mode is often used in detective stories where the narrator is unaware of some crucial information?

- A. First-person omniscient
- B. Second-person limited
- C. Third-person objective
- D. Unreliable narration

Answer: A

84. What is the term for a narrative device in which the story unfolds through a series of letters?

- A. Stream of consciousness
- B. Omniscient narration
- C. Epistolary
- D. Second-person limited

Answer: C

Masters/M.Phill English Grammar Past Paper

85. In which narrative perspective does the narrator use "I" and is typically a character in the story?

- A. First-person
- B. Second-person
- C. Third-person limited
- D. Third-person omniscient

Answer: A

86. What type of narration is characterized by the narrator only knowing the external actions and dialogue of the characters, without access to their thoughts or feelings?

- A. First-person omniscient
- B. Second-person limited
- C. Third-person objective
- D. Third-person limited

Answer: C

87. The initial sounds in the words 'ship', 'church' and 'judge; are examples for ?

- a. Palato-alveolar
- b. Palatal
- c. Velar
- d. Bilabial

Answer: A

88. /f/and /v/ are ?

- a. Dental
- b. Labio-dental
- c. Bilabial
- d. Alveolar

Answer: B

89. are sounds articulated in the glottis ?

- A. Glottal
- B. Velar
- C. Palatal
- D. None of the above

Answer: A

90. are produced involving the tip of the tongue and the back part of the teeth ridge ?

- A. Post alveolar
- B. Palate alveolar
- C. Palatal
- D. Velar

Answer: A

91. Who defined language as "a purely human and non-instinctive method of communicating ideas, emotion and desires by means of voluntarily produced symbols" ?

Masters/M.Phill English Grammar Past Paper

- A. Noam Chomsky
- B. Ferdinand de Saussure
- C. Edward Sapir
- D. None of the above

Answer: C

92. are articulated by raising the front of the tongue towards the hard palate ?

- A. Post alveolar
- B. Palate alveolar
- C. Palatal
- D. Velar

Answer: C

93. Sounds articulated by the tip of the tongue placed against the upper teeth are called ?

- a. Dental
- b. Labiodental
- c. Bilabial
- d. Alveolar

Answer: A

94. Sounds articulated by two lips are called ?

- a. Dental
- b. Bilabial
- c. Labiodental
- d. Alveolar

Answer: B

95. is a unit of speech which is at a level higher than the speech sound or phoneme ?

- a. Syllable
- b. Stress
- c. Intonation
- d. Pitch

Answer: A

96. Who found the odd one out ?

- A. Ferdinand de Saussure
- B. Edward Sapir
- C. Herman Gundert

Answer: C

97. The Musical Theory of the origin of language was advanced by ?

- A. Wilhelm Wundt and Sir Richard Paget
- B. Noire
- C. Max_Muller
- D. Otto Jespersen**

Answer: D

Masters/M.Phill English Grammar Past Paper

98. The Ding__Dong theory of the origin of language was advanced by ?

- A. Wilhelm Wundt and Sir Richard Paget
- B. Noire
- C. Max Muller**
- D. Otto Jespersen

Answer: C

99. The theory which is based on the assumption that language originated as a result of the involuntary exclamations of pain, surprise, pleasure or wonder ?

- A. Ding Dong theory
- B. The Bow__vow theory
- C. The Poo__Pooh theory**
- D. The Gesture theory

Answer: C

100. The theory which is based on the assumption that language originated as a result of human instinct to imitate sounds ?

- A. Ding Dong theory
- B. The Bow-vow theory
- C. The Pooh-pooh theory
- D. The Gesture theory

Answer:



GREAT FUTURE TALENT OLYMPIAD
Intelligence Questions (IQ)
Past Paper 2024

4th Class Intelligence Questions (IQ) Past Paper

1. Which of the following is a perfect square?

- A. 1057
- B. 625
- C. 7928
- D. 64000

Answer: B

2. Which of the following will have 6 at unit place?

- A. 19^2
- B. 11^2
- C. 24^2
- D. 13^2

Answer: C

3. If 5278 is squared, then what will be at unit place?

- A. 8
- B. 7
- C. 6
- D. 4

Answer: D

4. What will be the number of zeros in square of 400?

- A. 2
- B. 3
- C. 4
- D. 6

Answer: C

5. How many natural numbers lie between 9^2 and 10^2 ?

- A. 17
- B. 18
- C. 19
- D. 20

Answer: B

6. What is the sum of the first four odd natural numbers?

- A. 16
- B. 17
- C. 18
- D. 20

Answer: A

7. The value of $9^2 - 1$ is equal to:

- A. 81
- B. 80

4th Class Intelligence Questions (IQ) Past Paper

C. 79

D. None of the above

Answer: B

8. The sum of $1 + 3 + 5 + 7 + 9 + 11 + 13 + 15 + 17 + 19$ is:

A. 121

B. 120

C. 100

D. 110

Answer: C

9. The square of 42 is:

A. 1764

B. 1664

C. 1564

D. 1504

Answer: A

10. Aircraft is to air as hovercraft is to:

A. Space

B. Stream

C. Vacuum

D. Surface

Answer: D

11. House is to human as nest is to:

A. Birds

B. Kids

C. Animals

D. Elders

Answer: A

12. Water is to flow as air is to:

A. Carry

B. Rage

C. Drive

D. Blow

Answer: D

13. Train is to track as car is to:

A. Jungle

B. Road

C. Oil

D. Wheels

Answer: B

4th Class Intelligence Questions (IQ) Past Paper

14. Kitten is to cat as cub is to:

- A. Monkey
- B. Goat
- C. Cow
- D. Leopard

Answer: D

15. Pension is to retirement as pay is to:

- A. Old age
- B. Employment
- C. Development
- D. Hard work

Answer: B

16. Neck is to head as foot is to:

- A. Hairs
- B. Arms
- C. Legs
- D. Body

Answer: C

17. What is the sum of $3+3 \times 4$:

- A. 16
- B. 24
- C. 22
- D. 15

Answer: D

18. Lamb is to sheep, as calf is to:

- A. Cow
- B. Sheep
- C. Zebra
- D. Dog

Answer: A

19. But is to tub as 2343 is to:

- A. 2343
- B. 4323
- C. 3234
- D. 3432

Answer: D

20. What will come next?

- $7+2-1 = H$
- $22+6-5 = W$
- $11+6-2 = ?$

4th Class Intelligence Questions (IQ) Past Paper

- A. O
- B. N
- C. P
- D. M

Answer: A

21. Which one is different from the rest?

- A. Dagger
- B. Sword
- C. Knife
- D. Fork

Answer: D

22. Looking on a portrait, a man said, that man is my father's son.
I have no brother & sister what is He to Me?

- A. Cousin
- B. Uncle
- C. Brother
- D. Own picture

Answer: D

23. Which one is different from the rest?

- A. True
- B. Certain
- C. Vague
- D. Sure

Answer: C

24. Saw is to Cut as Iron is to _____

- A. Press
- B. Metal
- C. Oven
- D. Hard

Answer: A

25. Which one is different from the rest?

- A. Two
- B. Four
- C. Twenty
- D. Five

Answer: D

26. Which one is different from the rest?

- A. Yard
- B. Foot

4th Class Intelligence Questions (IQ) Past Paper

- C. Kilometer
- D. Length

Answer: D

27. What is the perimeter of a square with a side length of 5 units?

- A. A)10 units
- B. 15 units
- C. 20 units
- D. 25 units

Answer: C.

28. What is the probability of rolling an even number on a fair six-sided die?

- A. $\frac{1}{2}$
- B. $\frac{1}{3}$
- C. $\frac{1}{6}$
- D. $\frac{1}{4}$

Answer: A.

29. If you draw a card from a standard deck of 52 cards, what is the probability of drawing a spade?

- A. $\frac{1}{13}$
- B. $\frac{1}{4}$
- C. $\frac{1}{52}$
- D. $\frac{1}{2}$

Answer: B.

30. A jar contains 8 red marbles, 4 blue marbles, and 3 green marbles. What is the probability of randomly selecting a green marble?

- A. $\frac{1}{5}$
- B. $\frac{1}{4}$
- C. $\frac{3}{15}$
- D. $\frac{3}{15}$

Answer: A.

31. If you toss a fair coin three times, what is the probability of getting exactly two tails?

- A. $\frac{1}{2}$
- B. $\frac{1}{8}$
- C. $\frac{1}{4}$
- D. $\frac{3}{8}$

Answer: D.

32. In a bag, there are 5 red balls, 4 blue balls, and 2 green balls. What is the probability of drawing a red ball?

- A. $\frac{5}{11}$
- B. $\frac{1}{3}$
- C. $\frac{5}{10}$
- D. $\frac{1}{2}$

Answer: A.

4th Class Intelligence Questions (IQ) Past Paper

33. If you roll a fair six-sided die, what is the probability of rolling a number greater than 4?

- A. $\frac{1}{2}$
- B. $\frac{1}{3}$
- C. $\frac{1}{6}$
- D. $\frac{1}{4}$

Answer: B

34. What is the probability of getting a sum of 7 when rolling two six-sided dice?

- A. $\frac{1}{6}$
- B. $\frac{1}{8}$
- C. $\frac{1}{12}$
- D. $\frac{1}{36}$

Answer: A.

35. If you randomly select a letter from the word "MATHEMATICS," what is the probability of getting a vowel?

- A. $\frac{3}{11}$
- B. $\frac{4}{11}$
- C. $\frac{1}{3}$
- D. $\frac{1}{2}$

Answer: B.

36. A spinner has 8 equal sections, numbered 1 through 8. What is the probability of landing on an even number?

- A. $\frac{1}{4}$
- B. $\frac{1}{2}$
- C. $\frac{3}{8}$
- D. $\frac{1}{8}$

Answer: B.

37. If you flip a fair coin and roll a fair six-sided die, what is the probability of getting both heads and an even number?

- A. $\frac{1}{6}$
- B. $\frac{1}{4}$
- C. $\frac{1}{8}$
- D. $\frac{1}{12}$

Answer: D.

38. How many degrees of rotation symmetry does a square have?

- A. 90°
- B. 180°
- C. 270°
- D. 360°

Answer: A.

39. A regular hexagon has rotational symmetry of:

- A. 60°
- B. 90°
- C. 120°
- D. 180°

4th Class Intelligence Questions (IQ) Past Paper

Answer: A.

40. An object with rotational symmetry of 180° can be rotated to look the same after:

- A. One-fourth turn
- B. Half turn
- C. Three-fourths turn
- D. Full turn

Answer: B.

41. What is the minimum number of lines of symmetry a rectangle can have?

- A. 0
- B. 1
- C. 2
- D. 4

Answer: C

42. How many lines of symmetry does an isosceles triangle have?

- A. 0
- B. 1
- C. 2
- D. 3

Answer: B.

43. Which letter of the English alphabet has no line of symmetry?

- A. A
- B. B
- C. C
- D. D

Answer: B.

44. A figure with line symmetry can be folded along the line to match exactly on both sides.

How many lines of symmetry does a circle have?

- A. 0
- B. 1
- C. 2
- D. Infinite

Answer: D.

45. Which of the following has rotational symmetry but no line symmetry?

- A. Square
- B. Rectangle
- C. Rhombus
- D. Isosceles triangle

Answer: C.

46. An equilateral triangle has how many lines of symmetry?

- A. 0
- B. 1
- C. 2
- D. 3

Answer: D.

4th Class Intelligence Questions (IQ) Past Paper

47. Which of the following shapes has more than one line of symmetry?

- A. Parallelogram
- B. Trapezoid
- C. Regular pentagon
- D. Scalene triangle

Answer: C.

48. How many lines of symmetry does the letter "X" have?

- A. 0
- B. 1
- C. 2
- D. 4

Answer: C.

49. A figure with no line of symmetry is called:

- A. Asymmetrical
- B. Symmetrical
- C. Rotational
- D. Isosceles

Answer: A.

50. Which of the following shapes has the most lines of symmetry?

- A. Square
- B. Hexagon
- C. Octagon
- D. Circle

Answer: D.

51. If a figure has rotational symmetry, it must also have:

- A. Line symmetry
- B. No symmetry
- C. Diagonal symmetry
- D. Reflective symmetry

Answer: D.

52. An irregular quadrilateral may have how many lines of symmetry?

- A. 0
- B. 1
- C. 2
- D. 4

Answer: A.

53. Who is the Father of Mathematics?

- A. Archimedes
- B. Aryabhata
- C. Einstein
- D. Ronaldo

Answer: A.

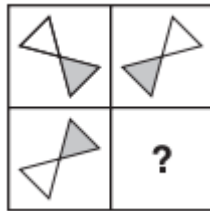
54. Who discovered Zero (0)?

4th Class Intelligence Questions (IQ) Past Paper

- A. Archimedes
- B. Aryabhata
- C. Einstein
- D. Ronaldo

Answer: B.

55. Which Shape completes the larger square?



A.



B.



C.



D.



Answer: C.

56. Which one comes next?



4th Class Intelligence Questions (IQ) Past Paper

A.



B.



C.

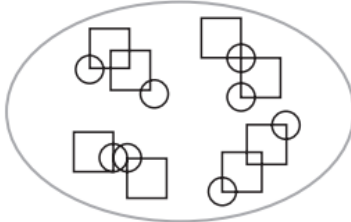


D.

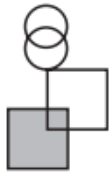


Answer: D.

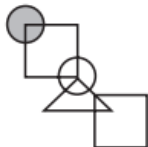
57. Which pattern on the right belongs in the group on the left?



A.

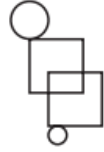


B.



4th Class Intelligence Questions (IQ) Past Paper

C.

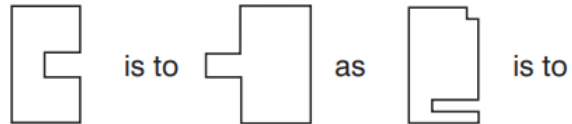


D.



Answer: D.

58. Which shape completes the second pair in the same way as the first pair?



A.



B.



4th Class Intelligence Questions (IQ) Past Paper

C.

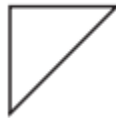


D.

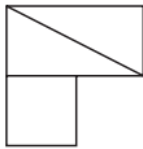


Answer: D.

59. In which larger shape is the shape on the left hidden?



A.

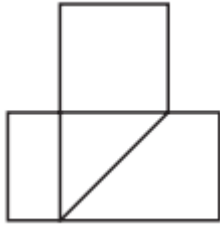


B.



4th Class Intelligence Questions (IQ) Past Paper

C.



D.



Answer: C.

60. Find the angle between minute hand and hour hand at 6:30 AM

- A. 25°
- B. 22.5°
- C. 15°
- D. None of these

Answer: C

61. Find the angle between minute hand and hour hand at 11:50 AM

- A. 55°
- B. 22.5°
- C. 15°
- D. None of these

Answer: A

62. Find the angle between minute hand and hour hand at 4:20 AM

- A. 10°
- B. 12.5°
- C. 15°
- D. None of these

Answer:A

63. Find the angle between minute hand and hour hand at 1:40 AM

- A. 180°
- B. 190°
- C. 175°
- D. None of these

4th Class Intelligence Questions (IQ) Past Paper

Answer: B

64. Find the angle between minute hand and hour hand at 10:10 AM

- A. 245°
- B. 195°
- C. 175°
- D. None of these

Answer: A

65. If 14th October 2005 is Friday then which day is 14th

October 2006?

- A. Tuesday
- B. Saturday
- C. Thursday
- D. Friday

Answer: B

66. If today is Monday then which day of the week is after 59 days.

- A. Tuesday
- B. Wednesday
- C. Thursday
- D. Friday

Answer: B

67. If 14th October 2005 is Friday then which day is 14th

October 2009?

- A. Tuesday
- B. Wednesday
- C. Thursday
- D. Friday

Answer: B

68. If 2nd June 2012 is Saturday then which day is 7th

July 2012?

- A. Tuesday
- B. Wednesday
- C. Thursday
- D. Saturday

Answer: D

69. Either Sam is ill, or he is drunk.

- A. Sam is ill.
- B. Sam is not ill.
- C. Sam is drunk.
- D. Sam is not drunk.

4th Class Intelligence Questions (IQ) Past Paper

- A. AB
- B. DA
- C. AC
- D. CD

Answer: B

70. Whenever Ram hears of a tragedy, he loses sleep.

- A. Ram heard of a tragedy.
- B. Ram did not hear of a tragedy.
- C. Ram lost sleep.
- D. Ram did not lose sleep.

- A. CA
- B. BD
- C. DB
- D. AD

Answer: C

71. Either the train is late, or it has derailed.

- A. The train is late.
- B. The train is not late.
- C. The train is derailed.
- D. The train is not derailed.

- A. AB
- B. DB
- C. CA
- D. BC

Answer: D

72. When I read a horror story I have a nightmare.

- A. I read a story.
- B. I did not read a horror story.
- C. I did not have a nightmare.
- D. I had a nightmare.

- A. CB
- B. AD
- C. BC
- D. AC

Answer: A

73. When I eat berries I get rashes.

- A. I ate berries.
- B. I did not get rashes.
- C. I did not eat berries.
- D. I got rashes.

- A. DA
- B. BC
- C. CB
- D. None of these

Answer: B

74. Either Sita is sick or she is careless.

4th Class Intelligence Questions (IQ) Past Paper

- A. Sita is not sick.
- B. Sita is not careless.
- C. Sita is sick.
- D. Sita is careless.

- A. AB
- B. AD
- C. BA
- D. DA

Answer: B

75. Ram gets a swollen nose whenever he eats hamburgers.

- A. Ram gets a swollen nose.
- B. Ram does not eat hamburgers.
- C. Ram does not get a swollen nose.
- D. Ram eats hamburgers.

- A. AB
- B. DC
- C. AC
- D. BC

Answer: D

76. Either the employees have no confidence in the management or they are hostile by nature.

- A. They are not hostile by nature.
- B. They are hostile by nature.
- C. They have confidence in the management.
- D. They have no confidence in the management.

- A. BA
- B. CB
- C. DA
- D. BD

Answer: B

77. Whenever Ram reads late into the night, his father beats him.

- A. His father does not beat Ram.
- B. Ram reads late into the night.
- C. Ram reads early in the morning.
- D. Ram's father beats him in the morning.

- A. CD
- B. BD
- C. AB
- D. None of these

Answer: D

78. All irresponsible parents shout if their children do not cavort.

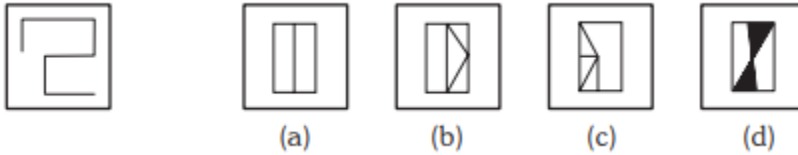
- A. All irresponsible parents do not shout.
- B. Children cavort.

4th Class Intelligence Questions (IQ) Past Paper

- C. Children do not cavort.
- D. All irresponsible parents shout.
- A. AB
- B. BA
- C. CA
- D. All of these

Answer: A

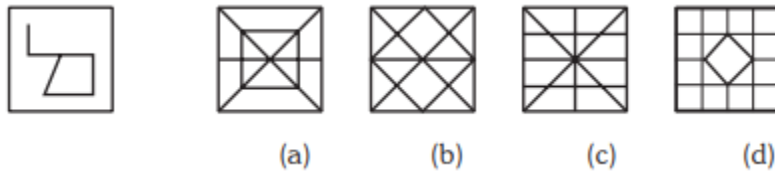
79. Which one is correct?



- A. Opt a)
- B. Opt b)
- C. Opt c)
- D. Opt d)

Answer: B

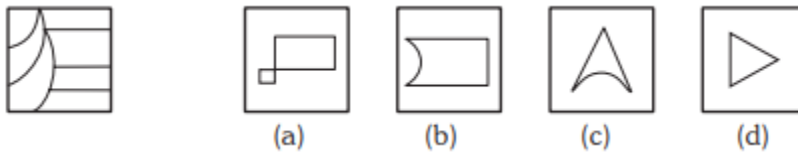
80. Identify the correct applicator.



- A. Opt a)
- B. Opt b)
- C. Opt c)
- D. Opt d)

Answer: C

81. Identify the correct applicator.



- A. Opt a)
- B. Opt b)
- C. Opt c)
- D. Opt d)

Answer: B

82. Which one is the correct option?

4th Class Intelligence Questions (IQ) Past Paper



(a)



(b)



(c)



(d)

- A. Opt a)
- B. Opt b)
- C. Opt c)
- D. Opt d)

Answer: A

83. $8 : 12 :: 6 : ?$

- A. 8
- B. 11
- C. 5
- D. 7

Answer: A

84. $13 : 19 :: 21 : ?$

- A. 41
- B. 81
- C. 141
- D. 14

Answer: A

85. Eagle : Swoops :: Duck : ?

- A. waddles
- B. floats
- C. swims
- D. flits

Answer: A

86. APPLE : 50 :: ORANGE : ?

- A. 60
- B. 69
- C. 61
- D. 63

Answer: A

87. Accommodation : Rent :: Journey : ?

- A. Freight
- B. Octroi
- C. Fare
- D. Expense

Answer: C

88. Fire : Smoke :: ?

- A. Children : School
- B. Cloud : Rain

4th Class Intelligence Questions (IQ) Past Paper

- C. Moon : Sky
- D. Shoe : Polish

Answer: B

89. Grenade : Gun :: ?

- A. Sister : Brother
- B. Father : Mother
- C. Man : Woman
- D. Head : Brain

Answer: D

90. TSH : IRQ :: QPK :: ?

- A. LNO
- B. LON
- C. PWK
- D. PON

Answer: B

91. AEZ : FPY :: BGX : ?

- A. HWW
- B. IYY
- C. HTX
- D. HYW

Answer: A

92. Length : Metre :: Power : ?

- A. Calories
- B. Degree
- C. Watt
- D. Kilogram

Answer: C

93. Square : Cube :: Circle : ?

- A. Ellipse
- B. Parabola
- C. Cone
- D. Sphere

Answer: D

94. Paper : Tree :: Glass : ?

- A. Window
- B. Sand
- C. Stone
- D. Mirror

Answer: B

95. ACFJ : ZXUQ :: EGIN : ?

- A. VUSQ
- B. VRPM
- C. UTRP
- D. VTRM

4th Class Intelligence Questions (IQ) Past Paper

Answer:D

96. ACEG : DFHJ :: QSUW : ?

- A. TVXZ
- B. TQST
- C. MNPR
- D. EGIJ

Answer: A

97. EGIK : FILO :: FHJL : ?

- A. JGMP
- B. JGPM
- C. GJPM
- D. GJMP

Answer: D

98. 10 : 91 :: 9 : ?

- A. 69
- B. 72
- C. 9
- D. 97

Answer: B

99. 7 : 56 :: 9 : ?

- A. 63
- B. 81
- C. 90
- D. 99

Answer:C

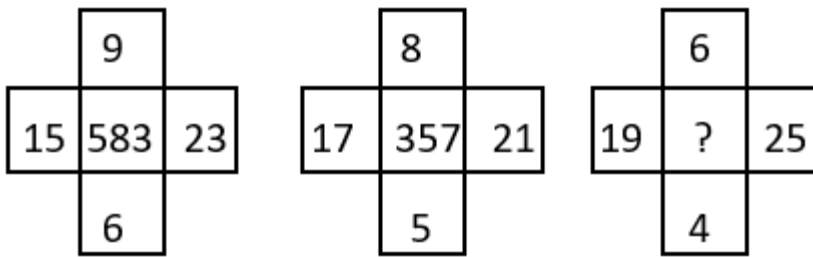
100. 20 : 50 :: 100 : ?

- A. 150
- B. 250
- C. 200
- D. 156

Answer: B

5th Class Intelligence Questions (IQ) Past Paper

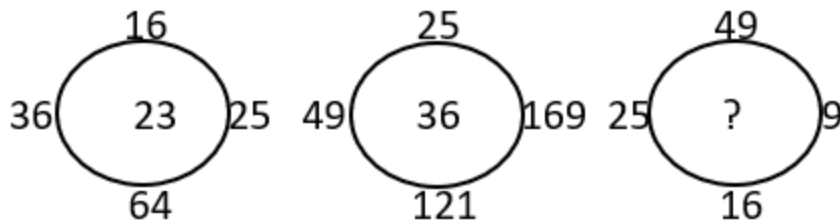
1. Find the correct alternative which will replace the question mark?



- A. 765
- B. 254
- C. 356
- D. 432

Answer: D

2. Find the correct alternative which will replace the question mark?



- A. 13
- B. 12
- C. 17
- D. 19

Answer: D

3. Choose the figure which is different from the rest?



Figure A



Figure B



Figure C



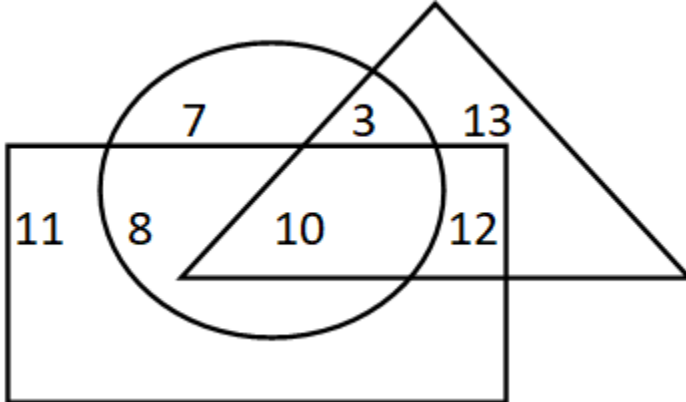
Figure D

- A. Figure A
- B. Figure B
- C. Figure C
- D. Figure D

Answer: D

5th Class Intelligence Questions (IQ) Past Paper

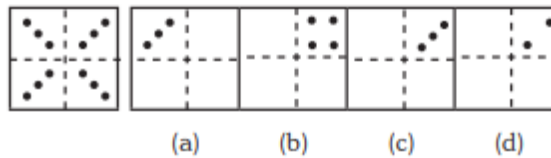
4. If triangle represents Women, rectangle represents Doctors and circle represents Lawyers. Then which number represents Women that are Lawyer but not Doctor?



- A. 10
- B. 12
- C. 8
- D. 3

Answer: D

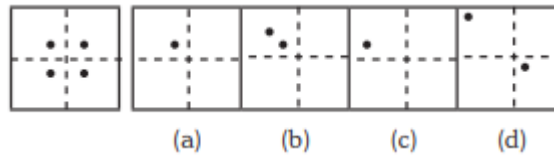
5.



- A. Only C
- B. Only D
- C. Both C & D
- D. None of these

Answer: A

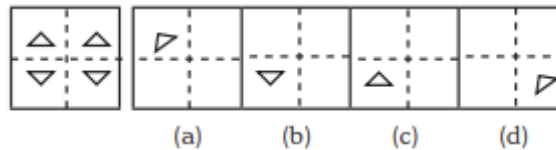
6.



- A. Only A
- B. Both A and B
- C. Only C
- D. Only D

Answer: A

7.

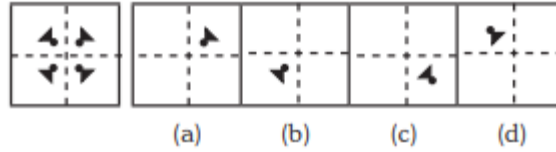


- A. Option B
- B. Option A
- C. Both A & C
- D. Only D

Answer: A

5th Class Intelligence Questions (IQ) Past Paper

8.



- A. Only A
- B. B
- C. C
- D. D

Answer: A

9. 3 pipes A, B and C can fill a tank in 30 minutes, 40 minutes, and 120 minutes, respectively. If all the pipes are opened together, how much time is required to fill the tank?

- A. 12 minutes
- B. 15 minutes
- C. 18 minutes
- D. 20 minutes

Answer: B

10. 3 pipes can fill a bucket in 20minutes, 30 minutes and 60 minutes, respectively. If all the pipes are opened for 5 minutes what percentage of the tank will be filled.

- A. 50%
- B. 60%
- C. 75%
- D. 100%

Answer: A

11. There are three pipes connected to a tank. The first two can fill the tank in 20 minutes and 30 minutes, respectively. The third pipe can empty the entire tank in 5 minutes. If all the pipes are opened simultaneously, what time will it take to empty the tank?

- A. 8.55 minutes
- B. 8.56 minutes
- C. 8.57 minutes
- D. 8.58 minutes

Answer: C

12. 2 pipes can empty a tank in 70 minutes and 140 minutes, respectively. If a third pipe can fill the tank in 7 minutes, find the time required to fill the tank if all the pipes are opened simultaneously.

- A. 7.23 minutes
- B. 8.23 minutes
- C. 8.57 minutes
- D. 8.88 minutes

Answer: B

13. A mixture containing 20% milk is mixed with another mixture containing 60% milk in the ratio 8 : 13. Find the percentage of milk in the new mixture.

- A. 37.14%
- B. 36.65%
- C. 35.57%
- D. 34.24%

Answer:A

5th Class Intelligence Questions (IQ) Past Paper

14. A mixture containing 66% of acid is mixed with another mixture containing 35% of acid in the ratio 2 : 5. Find the percentage of acid in the mixture formed.
- A. 45%
 - B. 46%
 - C. 47%
 - D. 48%

Answer: B

15. Introducing a woman, a man said, "Her husband is the only son of my father". How is that woman related to the man?
- A. Husband
 - B. Sister
 - C. Wife
 - D. Mother

Answer: C

16. Q's mother is the sister of P and daughter of S. A is the son of P and Brother of H. G is the father of H. How is S related to G?
- A. Nephew
 - B. Son-in-law
 - C. Grandfather
 - D. Father-in-law

Answer: D

17. R is the son of A's father's sister. S is son of D, who is the mother of G and grandmother of A. H is the father of T and grandfather of R. D is wife of H. How is R related to D?
- A. Nephew
 - B. Son
 - C. Grandson
 - D. Insufficient Data

Answer: C

18. Pointing towards a person a woman said to man, "His father is the only son of your mother". How is the man related to that person?
- A. Brother
 - B. Father
 - C. Son
 - D. Husband

Answer: B

19. Introducing a child, a woman said, "He is the son of my father's only daughter". How is that woman related to the child?
- A. Mother
 - B. Sister
 - C. Wife
 - D. Daughter

Answer: A

20. HSNT : EPKQ :: DTHL : ?
- A. ABCD
 - B. UEJM
 - C. WXYZ

5th Class Intelligence Questions (IQ) Past Paper

D. AQEI

Answer: D

21. Umbriel : Uranus :: Janus : ?

- A. Jupiter
- B. Mars
- C. Uranus
- D. Saturn

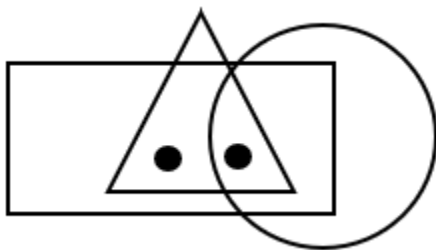
Answer: D

22. Kurnool : Andhra Pradesh :: Aizawl : ?

- A. Nagaland
- B. Meghalaya
- C. West Bengal
- D. Mizoram

Answer: D

23. Identify the figure which satisfies the same condition of placement of dots as in given figure.

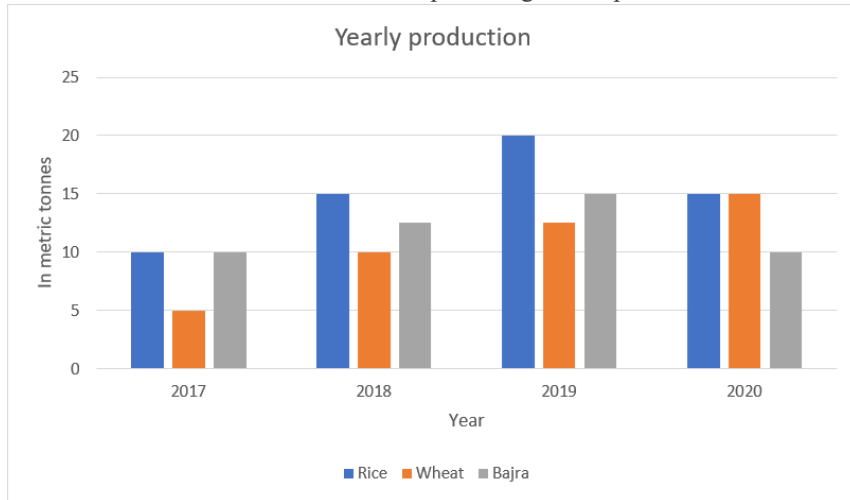


- A.
- B.
- C.
- D.

Answer: C

5th Class Intelligence Questions (IQ) Past Paper

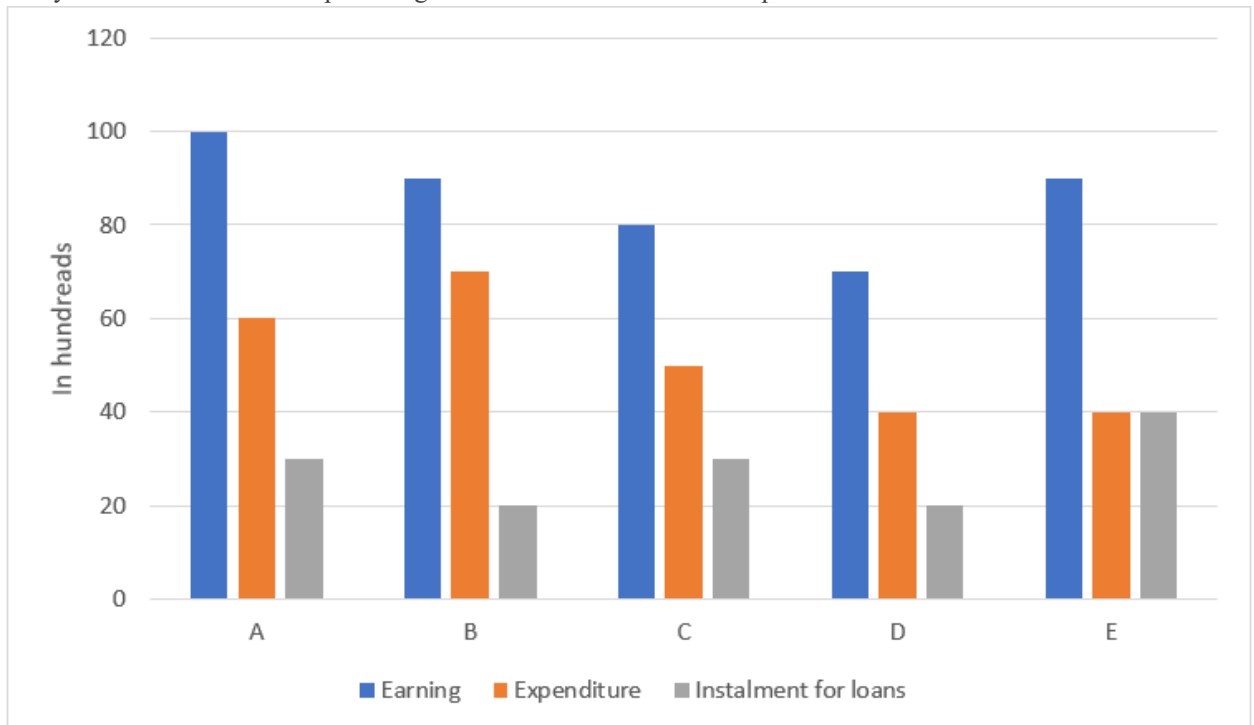
24. Production of wheat in 2019 and 2020 is what percentage of its production in 2018 and 2017?



- A. 200%
- B. 183.33%
- C. 150%
- D. 133.33%

Answer: B

25. Study the table and find what percentage of A's income is utilised in expenditure?



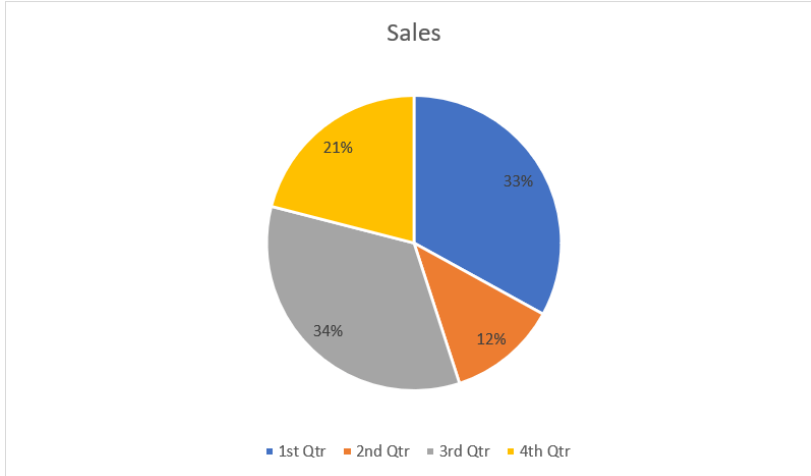
The chart represents monthly incomes of A, B, C, D and E.

- A. 100%
- B. 40%
- C. 60%
- D. 70%

5th Class Intelligence Questions (IQ) Past Paper

Answer: C

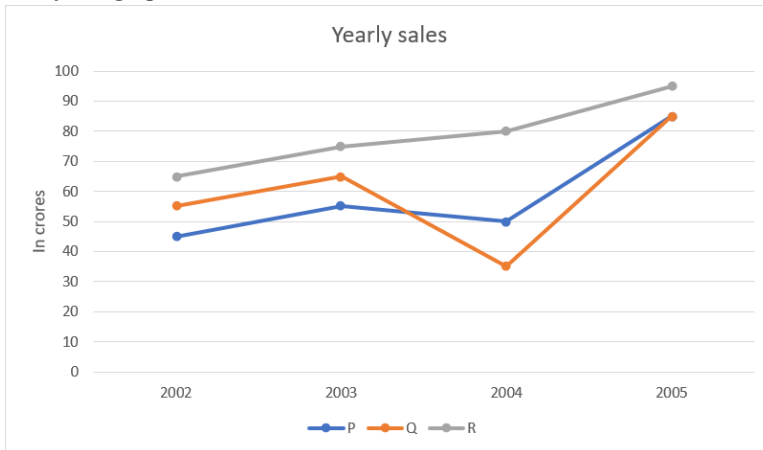
26. The yearly sales were 2,36,250 units, study the graph and find the sales in 3rd quarter.



- A. 83025 units
- B. 80325 units
- C. 82035 units
- D. 82503 units

Answer: B

27. Study the graph and find what is the difference between maximum and minimum sales of p.



- A. 40 crores
- B. 45 crores
- C. 50 crores
- D. 60 crores

Answer: A

28. In a certain code "CODE" is written as "DPEF". How is "DEFENCE" is written in that code?

- A. KWMCJFL
- B. ELDFSAP
- C. EFGFODF
- D. HRAOSCV

Answer: C

5th Class Intelligence Questions (IQ) Past Paper

29. Find the odd one out from the given set of numbers: 14, 28, 35, 46, 56, 84

- A. 56
- B. 84
- C. 35
- D. 46

Answer: D

30. Find odd one out from the given jumbled words: LNUAIMMIU, ELEST, OPERPC, NMKOYE, INCKLE

- A. NMKOYE
- B. OPERPC
- C. INCKLE
- D. ELEST

Answer: A

31. Find the odd one out.

- A. BEK
- B. CFL
- C. MPS
- D. GJP

Answer: C

32. In a certain code “564” means “study very hard”, “736” means “hard work pays” and “423” means “study and work”. Which of the following is the code for “work”?

- A. 5
- B. 3
- C. 6
- D. 4

Answer: B

33. If ‘white’ is called ‘yellow’, ‘yellow’ is called ‘blue’, ‘blue’ is called ‘red’, ‘red’ is called ‘black’, ‘black’ is called ‘violet’ and ‘violet’ is called ‘green’, then what would be the colour of light emitting from bulb?

- A. Blue
- B. Red
- C. Yellow
- D. Black

Answer: A

34. If the letters of the word “PRODUCT” are arranged alphabetically, then which letter would be farthest from the second letter of word?

- A. T
- B. R
- C. U
- D. P

Answer: C

35. Milly introduced a boy as the son of the only daughter of the mother of her maternal uncle. How is Milly related to that boy?

- A. Nephew
- B. Son
- C. Brother
- D. Sister

Answer: D

5th Class Intelligence Questions (IQ) Past Paper

36. If 'A&B' means A is father of B, 'A*B' means A is brother of B, 'A\$B' means A is mother of B then which of the following is correct about K\$T&M?

- A. M is brother of T
- B. T is son of K
- C. M is father of T
- D. K is mother of M

Answer: B

37. Ankita's younger brother Bobby is older than Nilu. Shweta is younger than Rahul but elder than Ankita. Who is the eldest?

- A. Rahul
- B. Shweta
- C. Ankita
- D. Bobby

Answer: A

38. How many even numbers are there in the following series of numbers, each of which is immediately preceded by an odd number, but not immediately followed by an even number?

"6 2 8 9 1 3 4 5 7 5 8 9 7 9 10 8 1 4 9 2 6"

- A. 4
- B. 3
- C. 2
- D. 1

Answer: B

39. ADLK : CFNM :: GRSP : ?

- A. WXYZ
- B. GHJK
- C. ABCD
- D. ITUR

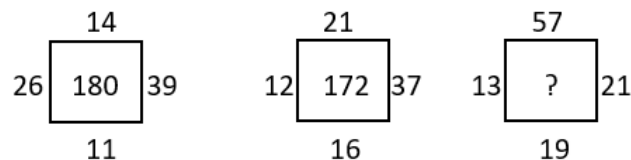
Answer: D

40. Pointing towards a person a woman said to man, "His father is the only son of your mother". How is the man related to that person?

- A. Husband
- B. Son
- C. Father
- D. Brother

Answer: C

41. Find the correct alternative which will replace the question mark?

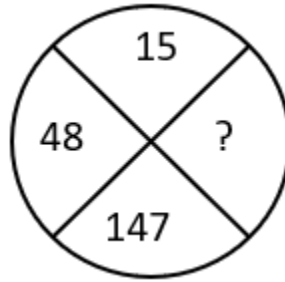


- A. 107
- B. 220
- C. 285
- D. 164

Answer: B

5th Class Intelligence Questions (IQ) Past Paper

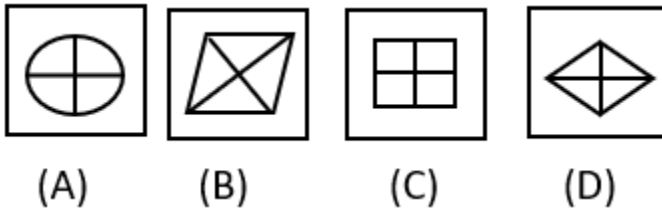
42. Find the correct alternative which will replace the question mark?



- A. 444
- B. 445
- C. 446
- D. 447

Answer: A

43. Choose the figure which is different from the rest?



- A. Fig A
- B. Fig B
- C. Fig C
- D. Fig D

Answer: A

44. A cage had 15 birds. All but seven manages to escape. How many birds remain?

- A. 7
- B. 12
- C. 15
- D. 8

Answer: A

45. Find the angle between minute hand and hour hand at 6:30 AM

- A. 25°
- B. 22.5°
- C. 15°
- D. None of these

Answer: C

46. Find the angle between minute hand and hour hand at 11:50 AM

- A. 55°
- B. 22.5°
- C. 15°
- D. None of these

Answer: A

5th Class Intelligence Questions (IQ) Past Paper

47. Find the angle between minute hand and hour hand at 4:20 AM

- A. 10°
- B. 12.5°
- C. 15°
- D. None of these

Answer: A

48. Find the angle between minute hand and hour hand at 1:40 AM

- A. 180°
- B. 190°
- C. 175°
- D. None of these

Answer: B

49. Find the angle between minute hand and hour hand at 10:10 AM

- A. 245°
- B. 195°
- C. 175°
- D. None of these

Answer: A

50. If 14th October 2005 is Friday then which day is 14th October 2006?

- A. Tuesday
- B. Saturday
- C. Thursday
- D. Friday

Answer: B

51. If today is Monday then which day of the week is after 59 days.

- A. Tuesday
- B. Wednesday
- C. Thursday
- D. Friday

Answer: B

52. If 14th October 2005 is Friday then which day is 14th October 2009?

- A. Tuesday
- B. Wednesday
- C. Thursday
- D. Friday

Answer: B

53. If 2nd June 2012 is Saturday then which day is 7th July 2012?

- A. Tuesday
- B. Wednesday
- C. Thursday
- D. Saturday

Answer: D

5th Class Intelligence Questions (IQ) Past Paper

54. Either Sam is ill, or he is drunk.

- A. Sam is ill.
- B. Sam is not ill.
- C. Sam is drunk.
- D. Sam is not drunk.

- A. AB
- B. DA
- C. AC
- D. CD

Answer: B

55. Whenever Ram hears of a tragedy, he loses sleep.

- A. Ram heard of a tragedy.
- B. Ram did not hear of a tragedy.
- C. Ram lost sleep.
- D. Ram did not lose sleep.

- A. CA
- B. BD
- C. DB
- D. AD

Answer: C

56. Either the train is late, or it has derailed.

- A. The train is late.
- B. The train is not late.
- C. The train is derailed.
- D. The train is not derailed.

- A. AB
- B. DB
- C. CA
- D. BC

Answer: D

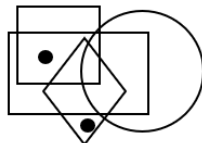
57. When I read a horror story I have a nightmare.

- A. I read a story.
- B. I did not read a horror story.
- C. I did not have a nightmare.
- D. I had a nightmare.

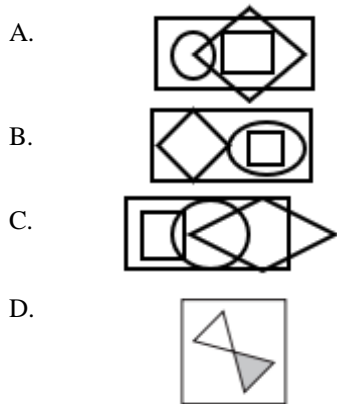
- A. CB
- B. AD
- C. BC
- D. AC

Answer: A

58. Identify the figure which satisfies the same condition of placement of dots as in given figure.



5th Class Intelligence Questions (IQ) Past Paper



Answer: C

59. YX, UTS, ONML, ?

- A. FEDCB
- B. GFEDC
- C. IHGFE
- D. HGFED

Answer: B

60. DA, HE, LI, ? TN

- A. PJ
- B. PT
- C. PM
- D. PK

Answer: A

61. B E I N T ?

- A. X
- B. Y
- C. A
- D. Z

Answer: C

62. AZ, CX, EV, ?

- A. HT
- B. HU
- C. GS
- D. GT

Answer: D

63. D9Y, J27S, P81M, V243G, ?

- A. A324B
- B. C729B
- C. B729A
- D. A729B

Answer: C

5th Class Intelligence Questions (IQ) Past Paper

64. BCFG, JKNO, RSVW, ?

- A. ZADE
- B. HIKL
- C. STUX
- D. MNPQ

Answer: A

65. CIM, HNR, MSW, ?

- A. SXA
- B. UYB
- C. RXB
- D. ZEH

Answer: C

66. 2, 3, 6, 7, 14, 15, ?

- A. 16
- B. 30
- C. 31
- D. 32

Answer: B

67. 3120, ?, 122, 23, 4

- A. 488
- B. 621
- C. 610
- D. 732

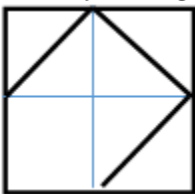
Answer: B

68. 0, 5, 60, 615, ?

- A. 6030
- B. 6170
- C. 6130
- D. 6000

Answer: C

69. Identify the figure which completes the pattern.



A.



B.



C.

5th Class Intelligence Questions (IQ) Past Paper

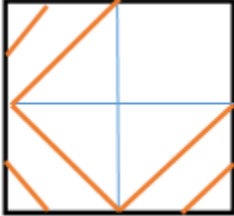


D.



Answer: C

70. Identify the figure which completes the pattern.



A.



B.



C.



D.



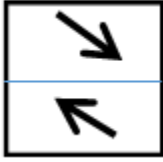
Answer: B

71. Identify the figure which completes the pattern.

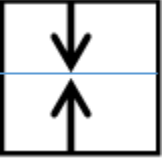


A.

5th Class Intelligence Questions (IQ) Past Paper



B.



C.



D.



Answer: A

Direction: (Qs. 82-87): Study the following information and answer the questions given below:

M, N, P, R, T, W, F and H are sitting around a circle facing the centre. P is third to the left of M and second to the right of T. N is second to the right of P. R is second to the right of W, who is second to the right of M. F is not an immediate neighbour of P.

72. Who is to the immediate right of P?

- A. H
- B. F
- C. R
- D. Data inadequate
- E. None of these

Answer: A

73. Who is to the immediate right of H?

- A. R
- B. F
- C. M
- D. Data inadequate
- E. None of these

Answer: E

74. Who is to the immediate left of R?

- A. P
- B. H
- C. W
- D. T

5th Class Intelligence Questions (IQ) Past Paper

E. Data inadequate

Answer: D

75. Who is third to the right of H?

A. T

B. W

C. R

D. F

E. Data inadequate

Answer: D

76. Who is second to the right of F?

A. M

B. R

C. T

D. Data inadequate

E. None of these

Answer: C

77. In which of the following is the first person sitting in between the second and the third person?

A. NHM

B. PHN

C. TRP

D. TWF

E. None of these

Answer: A

78. If the sum of two numbers is 35 and their difference is 7, what is the larger number?

A. 14

B. 21

C. 28

D. 35

Answer: C

79. A train travels at a speed of 80 km/h for the first half of its journey and then at a speed of 60 km/h for the second half. What is its average speed for the whole journey?

A. 64 km/h

B. 68 km/h

C. 72 km/h

D. 76 km/h

Answer: A

80. A store is offering a 20% discount on all items. If the original price of an item is \$80, what is the sale price?

A. \$16

B. \$20

C. \$64

D. \$80

Answer: C

81. In how many ways can the letters of the word "APPLE" be arranged?

A. 60

B. 120

5th Class Intelligence Questions (IQ) Past Paper

C. 240

D. 720

Answer: B

82. A committee of 5 people is to be formed from a group of 8. How many different committees can be formed?

A. 8

B. 10

C. 56

D. 120

Answer: C

83. In how many ways can 3 boys and 4 girls be seated in a row if the boys and girls are to alternate?

A. 24

B. 48

C. 144

D. 288

Answer: C

84. How many 3-digit numbers can be formed using the digits 1, 2, 3, and 4 without repetition?

A. 6

B. 12

C. 18

D. 24

Answer: D

85. A man is facing towards west and turns through 45° clockwise, again 180° clockwise and then turns through 270° anti-clockwise. In which direction is he

facing now?

A. West

B. North-west

C. South

D. South-west

E. None of these

Answer: D

86. I am facing east. I turn 100° in the clockwise direction and then 145° in the anti clock wise direction. Which direction am I facing now?

A. East

B. North-east

C. North

D. South-west

E. None of these

Answer: B

87. A river flows from west to east and on the way turns left and goes in a semi-circle round a hillock, and then turns left at right angle. In which direction is the river finally flowing?

A. West

B. East

C. North


D. South

E. None of these

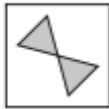
5th Class Intelligence Questions (IQ) Past Paper

Answer: B

88. Which Shape completes the larger square?



A.



B.



C.



D.



Answer: C.

89. Which one comes next?





A.



B.

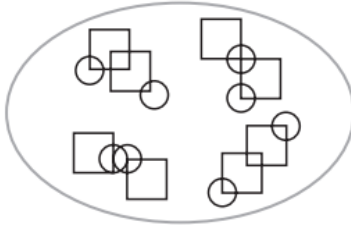


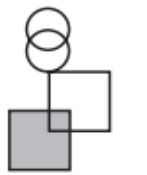
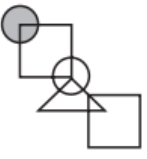
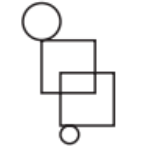
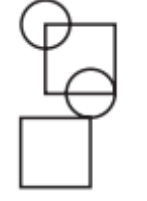
5th Class Intelligence Questions (IQ) Past Paper

- C. 
- D. 

Answer: D.

90. Which pattern on the right belongs in the group on the left?

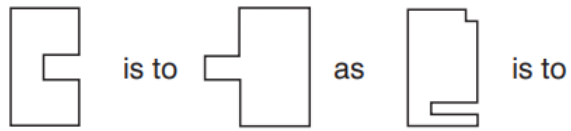


- A. 
- B. 
- C. 
- D. 

Answer: D.

5th Class Intelligence Questions (IQ) Past Paper

91. Which shape completes the second pair in the same way as the first pair?



A.



B.



C.



D.

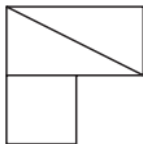


Answer: D.

92. In which larger shape is the shape on the left hidden?



A.

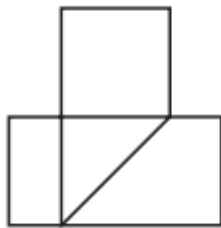


5th Class Intelligence Questions (IQ) Past Paper

B.



C.

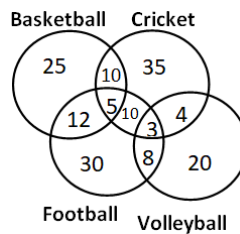


D.



Answer: C.

93. The following diagram shows the number of children playing Basketball, Cricket, Football and Volleyball. If the total number of children is 400, what is the percentage of children playing at least two games?

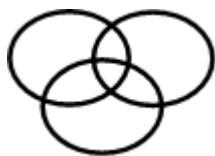


- A. 8
- B. 6
- C. 9.25
- D. 13

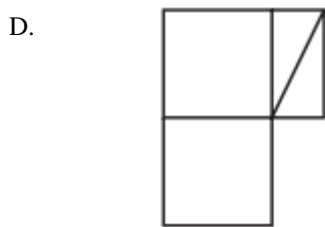
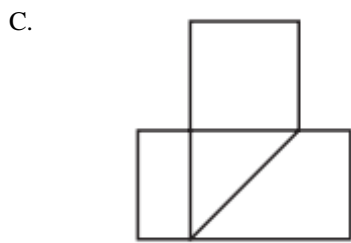
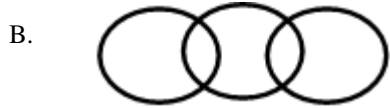
Answer: D

94. Which of the following diagram correctly represents the relationship among Teacher, Scientist and Graduate?

A.

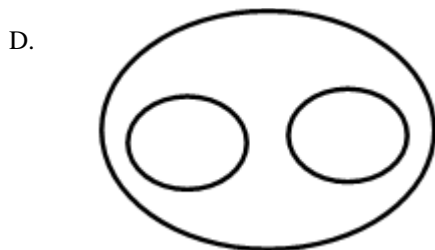
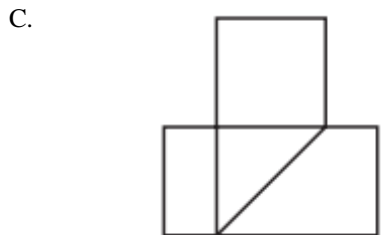
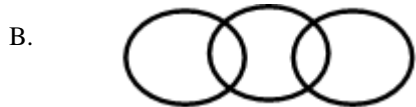
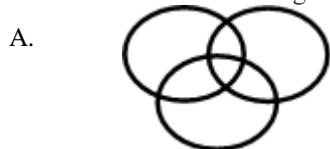


5th Class Intelligence Questions (IQ) Past Paper



Answer: A

95. Which of the following diagram depicts the relation among Currency, Dinar and Rupee.



Answer: D

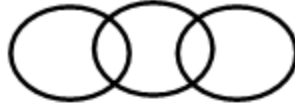
5th Class Intelligence Questions (IQ) Past Paper

96. If triangle represents women, rectangle represents educated person and circle represent government jobs. Then which number represents educated women who are not in government job?
- A. 10
 - B. 12
 - C. 8
 - D. 3

Answer: B

97. Which of the following figures shows relation between Trains, Goods and Truck?

a)



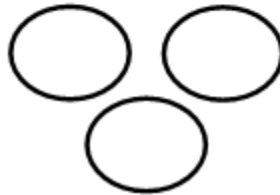
b)



c)



d)

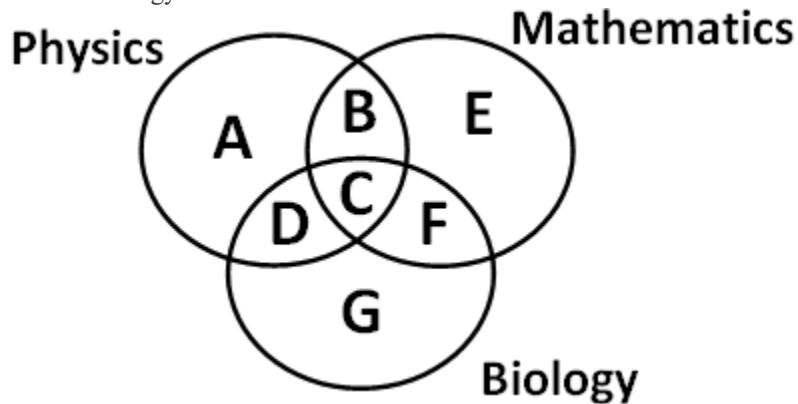


- A. Only a)
- B. Both a & d
- C. Only c)
- D. None of Above

Answer: A

5th Class Intelligence Questions (IQ) Past Paper

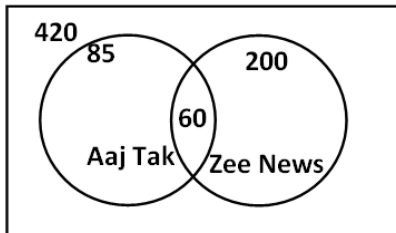
98. Which of the region in the following figure represents students who study both Physics and Mathematics but not Biology?



- A. $B+C+D+F$
- B. C
- C. $A+E$
- D. B

Answer: D

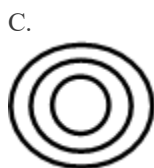
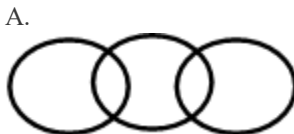
99. From the figure given below, determine the number of people who did not watch any news channel.



- A. 135
- B. 75
- C. 195
- D. 175

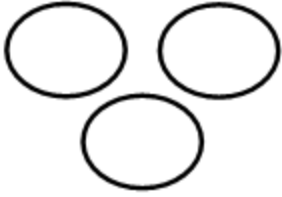
Answer: C

100. Which of the following figures correctly represents the relation between Machine, Lathe and Thermodynamics?



5th Class Intelligence Questions (IQ) Past Paper

D.



Answer: B

6th Class Intelligence Questions (IQ) Past Paper

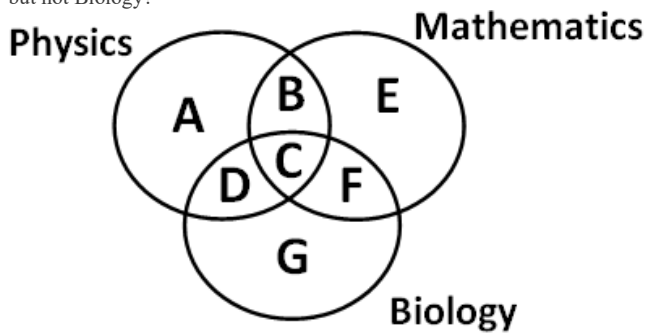
IQ-10

1. In a certain code "ELECTRONICS" is written as "CJCARPMLGAQ". How is "ELECTRICAL" written in that code?

- A. BCJWCKXUAA
- B. CJCAROGAYJ
- C. SHXXHLHCJC
- D. CJCGWPPNCV

Answer: B

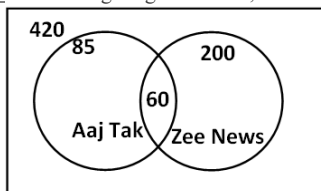
2. Which of the region in the following figure represents students who study both Physics and Mathematics but not Biology?



- A. B+C+D+F
- B. C
- C. A+E
- D. B

Answer: D

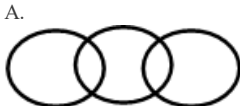
3. From the figure given below, determine the number of people who did not watch any news channel.



- A. 135
- B. 75
- C. 195
- D. 175

Answer: C

4. Which of the following figures correctly represents the relation between Machine, Lathe and Thermodynamics?



Formatted: Top: (Single solid line, Dark Blue, 6 pt Line width), Bottom: (Single solid line, Dark Blue, 6 pt Line width), Left: (Single solid line, Dark Blue, 6 pt Line width), Right: (Single solid line, Dark Blue, 6 pt Line width)

Formatted: Font: (Default) Times New Roman, 12 pt, Complex Script Font: Times New Roman, 12 pt

Formatted

Formatted: Font: 12 pt, Font color: Auto, Complex Script Font: 12 pt, Pattern: Clear

Formatted: Normal, No bullets or numbering

6th Class Intelligence Questions (IQ) Past Paper

IQ-10

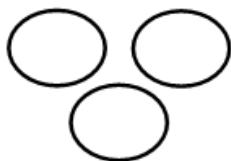
B.



C.

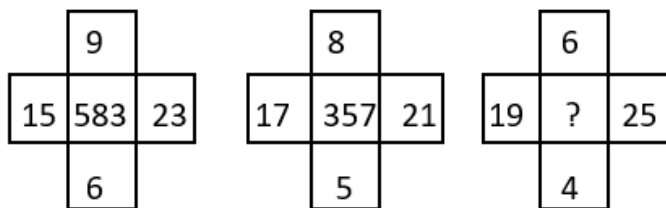


D.



Answer: B

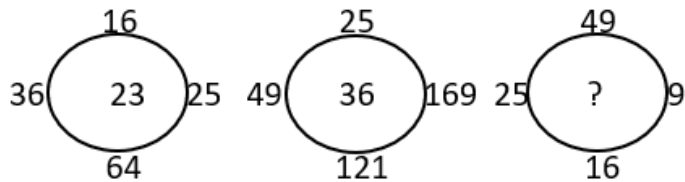
4.5. Find the correct alternative which will replace the question mark?



- A. 765
- B. 254
- C. 356
- D. 432

Answer: D

5.6. Find the correct alternative which will replace the question mark?



- A. 13
- B. 12
- C. 17
- D. 19

Answer: D

6th Class Intelligence Questions (IQ) Past Paper

IQ-10

6-7. Choose the figure which is different from the rest?



Figure A

Figure B

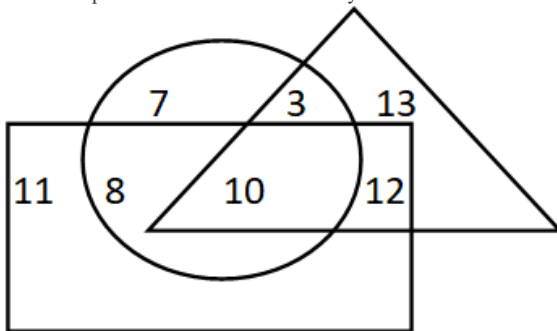
Figure C

Figure D

- A. Figure A
- B. Figure B
- C. Figure C
- D. Figure D

Answer: D

7-8. If triangle represents Women, rectangle represents Doctors and circle represents Lawyers. Then which number represents Women that are Lawyer but not Doctor?



- A. 10
- B. 12
- C. 8
- D. 3

Answer: D

8-9. 3 pipes A, B and C can fill a tank in 30 minutes, 40 minutes, and 120 minutes, respectively. If all the pipes are opened together, how much time is required to fill the tank?

- A. 12 minutes
- B. 15 minutes
- C. 18 minutes
- D. 20 minutes

Answer: B

9-10. 3 pipes can fill a bucket in 20 minutes, 30 minutes and 60 minutes, respectively. If all the pipes are opened for 5 minutes what percentage of the tank will be filled.

- A. 50%
- B. 60%
- C. 75%
- D. 100%

6th Class Intelligence Questions (IQ) Past Paper

~~10-10~~

Answer: A

~~10-11.~~ There are three pipes connected to a tank. The first two can fill the tank in 20 minutes and 30 minutes, respectively. The third pipe can empty the entire tank in 5 minutes. If all the pipes are opened simultaneously, what time will it take to empty the tank?

- A. 8.55 minutes
- B. 8.56 minutes
- C. 8.57 minutes
- D. 8.58 minutes

Answer: C

~~11-12.~~ 2 pipes can empty a tank in 70 minutes and 140 minutes, respectively. If a third pipe can fill the tank in 7 minutes, find the time required to fill the tank if all the pipes are opened simultaneously.

- A. 7.23 minutes
- B. 8.23 minutes
- C. 8.57 minutes
- D. 8.88 minutes

Answer: B

~~12-13.~~ A mixture containing 20% milk is mixed with another mixture containing 60% milk in the ratio 8 : 13. Find the percentage of milk in the new mixture.

- A. 37.14%
- B. 36.65%
- C. 35.57%
- D. 34.24%

Answer: A

~~13-14.~~ A mixture containing 66% of acid is mixed with another mixture containing 35% of acid in the ratio 2 : 5. Find the percentage of acid in the mixture formed.

- A. 45%
- B. 46%
- C. 47%
- D. 48%

Answer: B

~~14-15.~~ Introducing a woman, a man said, "Her husband is the only son of my father". How is that woman related to the man?

- A. Husband
- B. Sister
- C. Wife
- D. Mother

Answer: C

~~15-16.~~ Q's mother is the sister of P and daughter of S. A is the son of P and Brother of H. G is the father of H. How is S related to G?

- A. Nephew
- B. Son-in-law
- C. Grandfather
- D. Father-in-law

Answer: D

6th Class Intelligence Questions (IQ) Past Paper

~~16-19~~

~~16-17.~~ R is the son of A's father's sister. S is son of D, who is the mother of G and grandmother of A. H is the father of T and grandfather of R. D is wife of H. How is R related to D?

- A. Nephew
- B. Son
- C. Grandson
- D. Insufficient Data

Answer: C

~~17-18.~~ Pointing towards a person a woman said to man, "His father is the only son of your mother". How is the man related to that person?

- A. Brother
- B. Father
- C. Son
- D. Husband

Answer: B

~~18-19.~~ Introducing a child, a woman said, "He is the son of my father's only daughter". How is that woman related to the child?

- A. Mother
- B. Sister
- C. Wife
- D. Daughter

Answer: A

~~19-20.~~ HSNT : EPKQ :: DTHL : ?

- A. ABCD
- B. UEJM
- C. WXYZ
- D. AQEI

Answer: D

~~20-21.~~ Umbriel : Uranus :: Janus : ?

- A. Jupiter
- B. Mars
- C. Uranus
- D. Saturn

Answer: D

~~21-22.~~ Kurnool : Andhra Pradesh :: Aizawl : ?

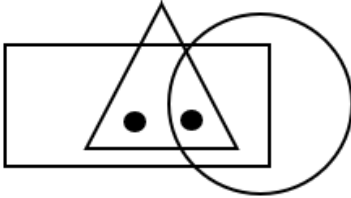
- A. Nagaland
- B. Meghalaya
- C. West Bengal
- D. Mizoram

Answer: D

6th Class Intelligence Questions (IQ) Past Paper

IQ-10

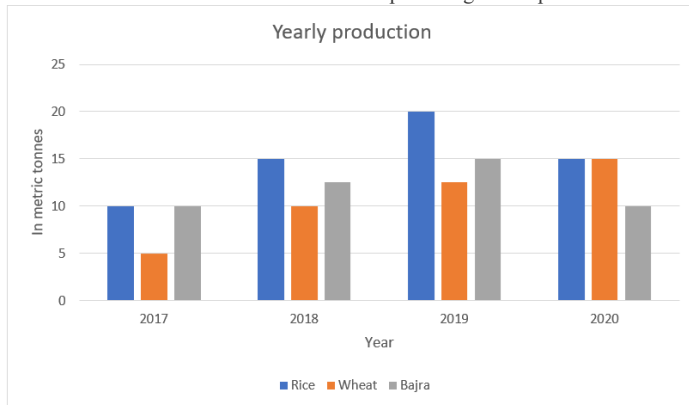
22-23. Identify the figure which satisfies the same condition of placement of dots as in given figure.



- A.
- B.
- C.
- D.

Answer: C

23-24. Production of wheat in 2019 and 2020 is what percentage of its production in 2018 and 2017?



- A. 200%
- B. 183.33%
- C. 150%
- D. 133.33%

Answer: B

6th Class Intelligence Questions (IQ) Past Paper

IQ-10

24-25. Study the table and find what percentage of A's income is utilised in expenditure?

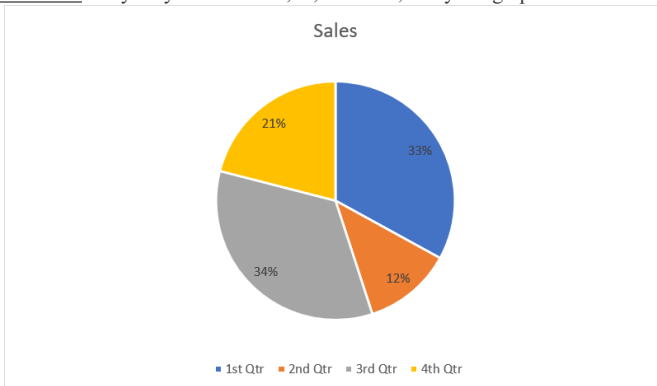


The chart represents monthly incomes of A, B, C, D and E.

- A. 100%
- B. 40%
- C. 60%
- D. 70%

Answer: C

25-26. The yearly sales were 2,36,250 units, study the graph and find the sales in 3rd quarter.



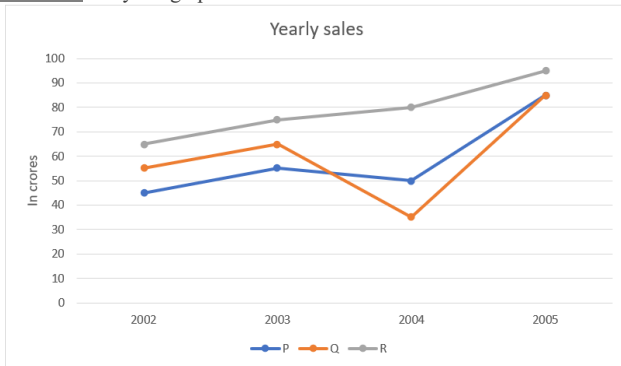
- A. 83025 units
- B. 80325 units
- C. 82035 units
- D. 82503 units

Answer: B

6th Class Intelligence Questions (IQ) Past Paper

IQ-10

26-27. Study the graph and find what is the difference between maximum and minimum sales of p.



- A. 40 crores
- B. 45 crores
- C. 50 crores
- D. 60 crores

Answer: A

27-28. In a certain code "CODE" is written as "DPEF". How is "DEFENCE" is written in that code?

- A. KWMCJFL
- B. ELDFSAP
- C. EFGFODF
- D. HRAOSCV

Answer: C

28-29. Find the odd one out from the given set of numbers: 14, 28, 35, 46, 56, 84

- A. 56
- B. 84
- C. 35
- D. 46

Answer: D

29-30. Find odd one out from the given jumbled words: LNUAIMMIU, ELEST, OPERPC, NMKOYE,

- INCKLE
- A. NMKOYE
- B. OPERPC
- C. INCKLE
- D. ELEST

Answer: A

30-31. Find the odd one out.

- A. BEK
- B. CFL
- C. MPS
- D. GJP

Answer: C

6th Class Intelligence Questions (IQ) Past Paper

IQ-10

~~31-32.~~ In a certain code "564" means "study very hard", "736" means "hard work pays" and "423" means "study and work". Which of the following is the code for "work"?

- A. 5
- B. 3
- C. 6
- D. 4

Answer: B

~~32-33.~~ If 'white' is called 'yellow', 'yellow' is called 'blue', 'blue' is called 'red', 'red' is called 'black', 'black' is called 'violet' and 'violet' is called 'green', then what would be the colour of light emitting from bulb?

- A. Blue
- B. Red
- C. Yellow
- D. Black

Answer: A

~~33-34.~~ If the letters of the word "PRODUCT" are arranged alphabetically, then which letter would be farthest from the second letter of word?

- A. T
- B. R
- C. U
- D. P

Answer: C

~~34-35.~~ Milly introduced a boy as the son of the only daughter of the mother of her maternal uncle. How is Milly related to that boy?

- A. Nephew
- B. Son
- C. Brother
- D. Sister

Answer: D

~~35-36.~~ If 'A&B' means A is father of B, 'A*B' means A is brother of B, 'A\$B' means A is mother of B then which of the following is correct about K\$T&M?

- A. M is brother of T
- B. T is son of K
- C. M is father of T
- D. K is mother of M

Answer: B

~~36-37.~~ Ankita's younger brother Bobby is older than Nilu. Shweta is younger than Rahul but elder than Ankita. Who is the eldest?

- A. Rahul
- B. Shweta
- C. Ankita
- D. Bobby

Answer: A

~~37-38.~~ How many even numbers are there in the following series of numbers, each of which is immediately preceded by an odd number, but not immediately followed by an even number?

"6 2 8 9 1 3 4 5 7 5 8 9 7 9 10 8 1 4 9 2 6"

6th Class Intelligence Questions (IQ) Past Paper

IQ-10

- A. 4
- B. 3
- C. 2
- D. 1

Answer: B

38-39. _____ADLK : CFNM :: GRSP : ?

- A. WXYZ
- B. GHJK
- C. ABCD
- D. ITUR

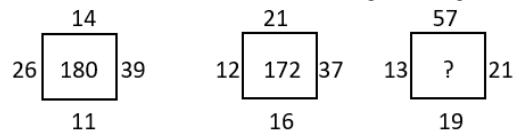
Answer: D

39-40. _____ Pointing towards a person a woman said to man, "His father is the only son of your mother". How is the man related to that person?

- A. Husband
- B. Son
- C. Father
- D. Brother

Answer: C

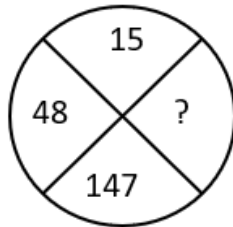
40-41. _____ Find the correct alternative which will replace the question mark?



- A. 107
- B. 220
- C. 285
- D. 164

Answer: B

41-42. _____ Find the correct alternative which will replace the question mark?



- A. 444
- B. 445
- C. 446
- D. 447

Answer: A

6th Class Intelligence Questions (IQ) Past Paper

IQ-10

42-43. Choose the figure which is different from the rest?



(A) (B) (C) (D)

- A. Fig A
- B. Fig B
- C. Fig C
- D. Fig D

Answer: A

43-44. A cage had 15 birds. All but seven managed to escape. How many birds remain?

- A. 7
- B. 12
- C. 15
- D. 8

Answer: A

44-45. Find the angle between minute hand and hour hand at 6:30 AM

- A. 25°
- B. 22.5°
- C. 15°
- D. None of these

Answer: C

45-46. Find the angle between minute hand and hour hand at 11:50 AM

- A. 55°
- B. 22.5°
- C. 15°
- D. None of these

Answer: A

46-47. Find the angle between minute hand and hour hand at 4:20 AM

- A. 10°
- B. 12.5°
- C. 15°
- D. None of these

Answer: A

47-48. Find the angle between minute hand and hour hand at 1:40 AM

- A. 180°
- B. 190°
- C. 175°
- D. None of these

Answer: B

48-49. Find the angle between minute hand and hour hand at 10:10 AM

6th Class Intelligence Questions (IQ) Past Paper

~~IQ-10~~

- A. 245°
- B. 195°
- C. 175°
- D. None of these

Answer: A

~~49-50.~~ If 14th October 2005 is Friday then which day is 14th

October 2006?

- A. Tuesday
- B. Saturday
- C. Thursday
- D. Friday

Answer: B

~~50-51.~~ If today is Monday then which day of the week is

after 59 days.

- A. Tuesday
- B. Wednesday
- C. Thursday
- D. Friday

Answer: B

~~51-52.~~ If 14th October 2005 is Friday then which day is 14th

October 2009?

- A. Tuesday
- B. Wednesday
- C. Thursday
- D. Friday

Answer: B

~~52-53.~~ If 2nd June 2012 is Saturday then which day is 7th

July 2012?

- A. Tuesday
- B. Wednesday
- C. Thursday
- D. Saturday

Answer: D

~~53-54.~~ Either Sam is ill, or he is drunk.

- A. Sam is ill.
- B. Sam is not ill.
- C. Sam is drunk.
- D. Sam is not drunk.

- A. AB
- B. DA
- C. AC
- D. CD

Answer: B

~~54-55.~~ Whenever Ram hears of a tragedy, he loses sleep.

6th Class Intelligence Questions (IQ) Past Paper

IQ-10

- A. Ram heard of a tragedy.
 - B. Ram did not hear of a tragedy.
 - C. Ram lost sleep.
 - D. Ram did not lose sleep.
- A. CA
 - B. BD
 - C. DB
 - D. AD

Answer: C

55-56. Either the train is late, or it has derailed.

- A. The train is late.
 - B. The train is not late.
 - C. The train is derailed.
 - D. The train is not derailed.
- A. AB
 - B. DB
 - C. CA
 - D. BC

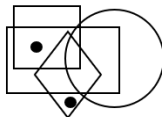
Answer: D

56-57. When I read a horror story I have a nightmare.

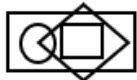
- A. I read a story.
 - B. I did not read a horror story.
 - C. I did not have a nightmare.
 - D. I had a nightmare.
- A. CB
 - B. AD
 - C. BC
 - D. AC

Answer: A

57-58. Identify the figure which satisfies the same condition of placement of dots as in given figure.



A.



B.



C.



D.



6th Class Intelligence Questions (IQ) Past Paper

~~IQ-10~~

Answer: C

~~58-59.~~ YX, UTS, ONML, ?

- A. FEDCB
- B. GFEDC
- C. IHGFE
- D. HGFED

Answer: B

~~59-60.~~ DA, HE, LI, ? TN

- A. PJ
- B. PT
- C. PM
- D. PK

Answer: A

~~60-61.~~ B E I N T ?

- A. X
- B. Y
- C. A
- D. Z

Answer: C

~~61-62.~~ AZ, CX, EV, ?

- A. HT
- B. HU
- C. GS
- D. GT

Answer: D

~~62-63.~~ D9Y, J27S, P81M, V243G, ?

- A. A324B
- B. C729B
- C. B729A
- D. A729B

Answer: C

~~63-64.~~ BCFG, JKNO, RSVW, ?

- A. ZADE
- B. HIKL
- C. STUX
- D. MNPQ

Answer: A

~~64-65.~~ CIM, HNR, MSW, ?

- A. SXA
- B. UYB
- C. RXB
- D. ZEH

Answer: C

6th Class Intelligence Questions (IQ) Past Paper

IQ-10

65-66. _____ 2, 3, 6, 7, 14, 15, ?

- A. 16
- B. 30
- C. 31
- D. 32

Answer: B

66-67. _____ 3120, ?, 122, 23, 4

- A. 488
- B. 621
- C. 610
- D. 732

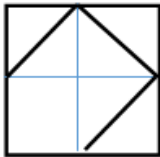
Answer: B

67-68. _____ 0, 5, 60, 615, ?

- A. 6030
- B. 6170
- C. 6130
- D. 6000

Answer: C

68-69. _____ Identify the figure which completes the pattern.



A.



B.



C.



D.

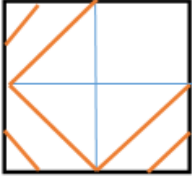


Answer: C

6th Class Intelligence Questions (IQ) Past Paper

IQ-10

69-70. Identify the figure which completes the pattern.



A.



B.



C.

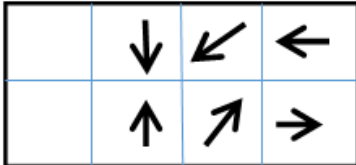


D.

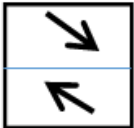


Answer: B

70-71. Identify the figure which completes the pattern.



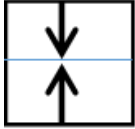
A.



B.

6th Class Intelligence Questions (IQ) Past Paper

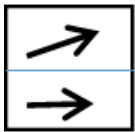
IQ-10



C.



D.



Answer: A

Direction: (Qs. 82-87): Study the following information and answer the questions given below:

M, N, P, R, T, W, F and H are sitting around a circle facing the centre. P is third to the left of M and second to the right of T. N is second to the right of P. R is second to the right of W, who is second to the right of M. F is not an immediate neighbour of P.

71-72. _____ Who is to the immediate right of P?

- A. H
- B. F
- C. R
- D. Data inadequate
- E. None of these

Answer: A

72-73. _____ Who is to the immediate right of H?

- A. R
- B. F
- C. M
- D. Data inadequate
- E. None of these

Answer: E

73-74. _____ Who is to the immediate left of R?

- A. P
- B. H
- C. W
- D. T
- E. Data inadequate

Answer: D

74-75. _____ Who is third to the right of H?

- A. T
- B. W

6th Class Intelligence Questions (IQ) Past Paper

~~IQ-10~~

- C. R
- D. F
- E. Data inadequate

Answer: D

~~75-76.~~ Who is second to the right of F?

- A. M
- B. R
- C. T
- D. Data inadequate
- E. None of these

Answer: C

~~76-77.~~ In which of the following is the first person sitting in between the second and the third person?

- A. NHM
- B. PHN
- C. TRP
- D. TWF
- E. None of these

Answer: A

~~77-78.~~ If the sum of two numbers is 35 and their difference is 7, what is the larger number?

- A. 14
- B. 21
- C. 28
- D. 35

Answer: C

~~78-79.~~ A train travels at a speed of 80 km/h for the first half of its journey and then at a speed of 60 km/h for the second half. What is its average speed for the whole journey?

- A. 64 km/h
- B. 68 km/h
- C. 72 km/h
- D. 76 km/h

Answer: A

~~79-80.~~ A store is offering a 20% discount on all items. If the original price of an item is \$80, what is the sale price?

- A. \$16
- B. \$20
- C. \$64
- D. \$80

Answer: C

~~80-81.~~ In how many ways can the letters of the word "APPLE" be arranged?

- A. 60
- B. 120
- C. 240
- D. 720

Answer: B

6th Class Intelligence Questions (IQ) Past Paper

~~IQ-10~~

~~81-82.~~ A committee of 5 people is to be formed from a group of 8. How many different committees can be formed?

- A. 8
- B. 10
- C. 56
- D. 120

Answer: C

~~82-83.~~ In how many ways can 3 boys and 4 girls be seated in a row if the boys and girls are to alternate?

- A. 24
- B. 48
- C. 144
- D. 288

Answer: C

~~83-84.~~ How many 3-digit numbers can be formed using the digits 1, 2, 3, and 4 without repetition?

- A. 6
- B. 12
- C. 18
- D. 24

Answer: D

~~84-85.~~ A man is facing towards west and turns through 45° clockwise, again 180° clockwise and then turns through 270° anti-clockwise. In which direction is he facing now?

- A. West
- B. North-west
- C. South
- D. South-west
- E. None of these

Answer: D

~~85-86.~~ I am facing east. I turn 100° in the clockwise direction and then 145° in the anti clock wise direction. Which direction am I facing now?

- A. East
- B. North-east
- C. North
- D. South-west
- E. None of these

Answer: B

~~86-87.~~ A river flows from west to east and on the way turns left and goes in a semi-circle round a hillock, and then turns left at right angle. In which direction is the river finally flowing?

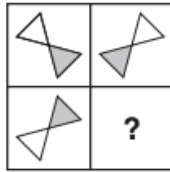
- A. West
- B. East
- C. North
- D. South
- E. None of these

Answer: B

~~87-88.~~ Which Shape completes the larger square?

6th Class Intelligence Questions (IQ) Past Paper

IQ-10



- A.
- B.
- C.
- D.

Answer: C.

88-89. Which one comes next?



- A.
- B.
- C.

6th Class Intelligence Questions (IQ) Past Paper

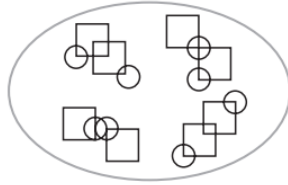
IQ-10

D.

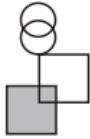


Answer: D.

89-90. Which pattern on the right belongs in the group on the left?



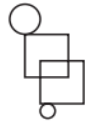
A.



B.



C.



D.

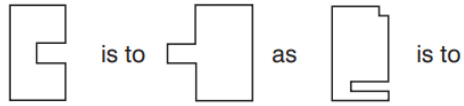


Answer: D.

90-91. Which shape completes the second pair in the same way as the first pair?

6th Class Intelligence Questions (IQ) Past Paper

IQ-10



A.



B.



C.



D.

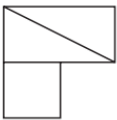


Answer: D.

91-92. In which larger shape is the shape on the left hidden?



A.



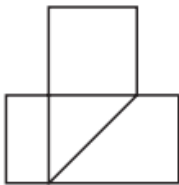
6th Class Intelligence Questions (IQ) Past Paper

IQ-10

B.



C.

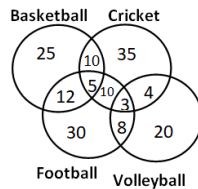


D.



Answer: C.

92-93. The following diagram shows the number of children playing Basketball, Cricket, Football and Volleyball. If the total number of children is 400, what is the percentage of children playing at least two games?

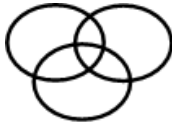


- A. 8
- B. 6
- C. 9.25
- D. 13

Answer: D

93-94. Which of the following diagram correctly represents the relationship among Teacher, Scientist and Graduate?

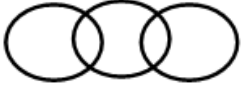
A.



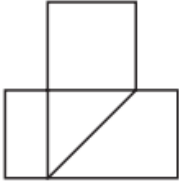
6th Class Intelligence Questions (IQ) Past Paper

IQ-10

B.



C.




D.



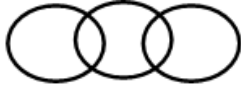
Answer: A

94-95. Which of the following diagram depicts the relation among Currency, Dinar and Rupee.

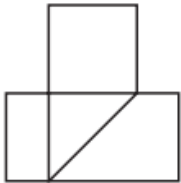
A.



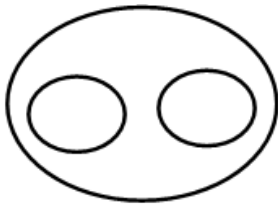
B.



C.



D.



Answer: D

6th Class Intelligence Questions (IQ) Past Paper

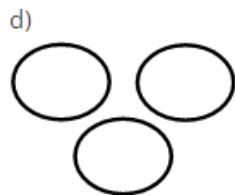
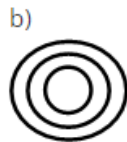
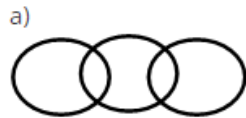
IQ-10

95-96. _____ If triangle represents women, rectangle represents educated person and circle represent government jobs. Then which number represents educated women who are not in government job?

- A. 10
- B. 12
- C. 8
- D. 3

Answer: B

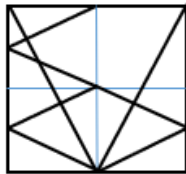
96-97. _____ Which of the following figures shows relation between Trains, Goods and Truck?



- A. Only a)
- B. Both a & d
- C. Only c)
- D. None of Above




Answer: A

97-98. _____ Identify the figure which completes the pattern.



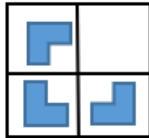
6th Class Intelligence Questions (IQ) Past Paper





IQ-10

- B. 
- C. 
- D. 

Answer: D

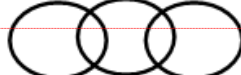
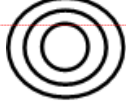

98-99. Identify the figure which completes the pattern.



- A. 
- B. 
- C. 
- D. 

Answer: C

99-100. Which of the following figure correctly represents relation among State, Country and City?

- A. 
- B. 
- C. 

Formatted: Font: (Default) Times New Roman, 12 pt, Complex Script Font: Times New Roman, 12 pt, Ligatures: None

Formatted: List Paragraph, Centered, Space After: 0 pt, Line spacing: single, Numbered + Level: 2 + Numbering Style: A, B, C, ... + Start at: 1 + Alignment: Left + Aligned at: 0.75" + Indent at: 1"

Formatted Table

Formatted: Font: (Default) Times New Roman, 12 pt, Complex Script Font: Times New Roman, 12 pt, Ligatures: None

Formatted: List Paragraph, Centered, Space After: 0 pt, Line spacing: single, Numbered + Level: 2 + Numbering Style: A, B, C, ... + Start at: 1 + Alignment: Left + Aligned at: 0.75" + Indent at: 1"

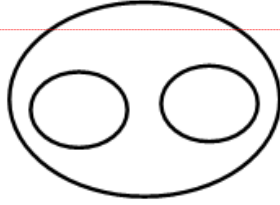
Formatted: Font: (Default) Times New Roman, 12 pt, Complex Script Font: Times New Roman, 12 pt, Ligatures: None

Formatted: List Paragraph, Centered, Space After: 0 pt, Line spacing: single, Numbered + Level: 2 + Numbering Style: A, B, C, ... + Start at: 1 + Alignment: Left + Aligned at: 0.75" + Indent at: 1"

6th Class Intelligence Questions (IQ) Past Paper

IQ-10

D.



Formatted: Font: (Default) Times New Roman, 12 pt, Complex Script Font: Times New Roman, 12 pt, Ligatures: None

Formatted: List Paragraph, Centered, Space After: 0 pt, Line spacing: single, Numbered + Level: 2 + Numbering Style: A, B, C, ... + Start at: 1 + Alignment: Left + Aligned at: 0.75" + Indent at: 1"

Answer: B

7th Class Intelligence Questions (IQ) Past Paper

1. Which word does not belong to the list?

- A. Oil
- B. Petrol
- C. Liquid
- D. Spirit
- E. Water

Answer: C

2. December is to October as June is to _____.

- A. May
- B. August
- C. October
- D. April

Answer: D

3. What number comes next in the following series?

20 15 18 13 16 11

- A. 10
- B. 19
- C. 26
- D. 14

Answer: D

4. What will be the answer if you add all even numbers in series and divide it by the middle figure?

3 4 5 6 7 8 9

- A. 4
- B. 11
- C. 3
- D. 7

Answer: 3

5. What number comes next in the following series?


2 4 5 10 11 22 23 46 _____

- A. 47
- B. 48
- C. 50
- D. 55

Answer: A

7th Class Intelligence Questions (IQ) Past Paper

6. Which Shape completes the larger square?



A.



B.



C.



D.



Answer: C.

7. Which one comes next?



A.



7th Class Intelligence Questions (IQ) Past Paper

B.



C.

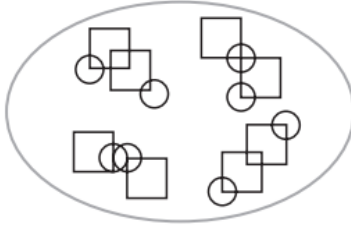


D.

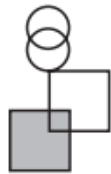


Answer: D.

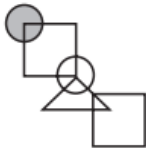
8. Which pattern on the right belongs in the group on the left?



A.



B.



C.



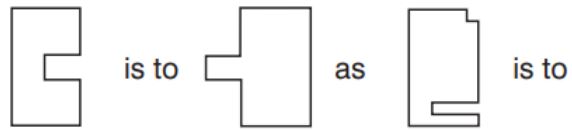
7th Class Intelligence Questions (IQ) Past Paper

D.



Answer: D.

9. Which shape completes the second pair in the same way as the first pair?



A.



B.



C.



7th Class Intelligence Questions (IQ) Past Paper

D.

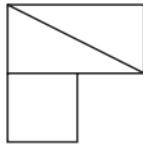


Answer: D.

10. In which larger shape is the shape on the left hidden?



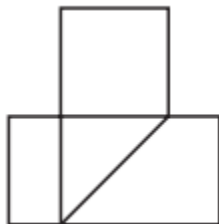
A.



B.



C.



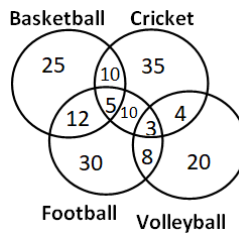
7th Class Intelligence Questions (IQ) Past Paper

D.



Answer: C.

11. The following diagram shows the number of children playing Basketball, Cricket, Football and Volleyball. If the total number of children is 400, what is the percentage of children playing at least two games?

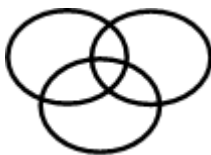


- A. 8
- B. 6
- C. 9.25
- D. 13

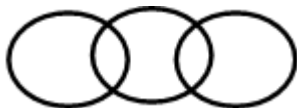
Answer: D

12. Which of the following diagram correctly represents the relationship among Teacher, Scientist and Graduate?

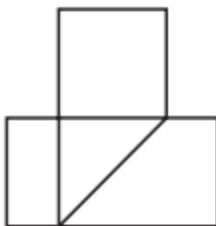
A.



B.



C.



7th Class Intelligence Questions (IQ) Past Paper


D.



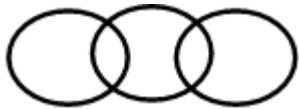
Answer: A

13. Which of the following diagram depicts the relation among Currency, Dinar and Rupee.

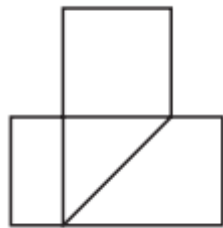
A.



B.



C.



D.



Answer: D

14. The purchase price of an article is 20% less than the profit made. Find the profit if the selling price is 360 rupees.

Olevel/Alevel

- A. 180 rupees
- B. 240 rupees
- C. 200 rupees
- D. 160 rupees

Answer: C

15. The cost price of an article is 1.56 times the selling price. Find the loss percentage.

- A. 37.8%
- B. 35.9%
- C. 39.5%
- D. 34.5%

Answer: B

16. A shopkeeper purchased an article for 500 rupees. At what price should he mark the article to allow a discount of 35% and still earn 100% profit.

- A. 1599 rupees
- B. 1523 rupees
- C. 1575 rupees
- D. 1539 rupees

Answer: D

17. A group of 5 men or 12 women can do a task in 78 days. Find the time taken by 5 men and 12 women to complete the task.

- A. 39 days
- B. 36 days
- C. 29 days
- D. 26 days

Answer: A

18. The speed of a train is 120 kmph and the length of the train is 240 m. Find the time it will take to cross a pole.

- A. 9.6 seconds
- B. 7.2 seconds
- C. 4.8 seconds
- D. 2.4 seconds

Answer: C

19. If triangle represents women, rectangle represents educated person and circle represent government jobs. Then which number represents educated women who are not in government job?

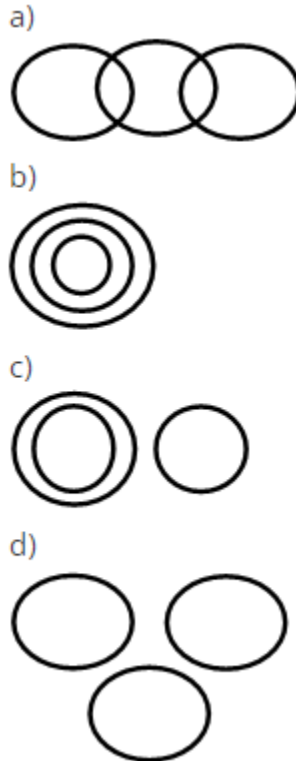
- A. 10

Olevel/Alevel

- B. 12
- C. 8
- D. 3

Answer: B

20. Which of the following figures shows relation between Trains, Goods and Truck?



- A. Only a)
- B. Both a & d
- C. Only c)
- D. None of Above

Answer: A

21.If 14th October 2005 is Friday then which day is 14th

October 2006?

- A. Tuesday
- B. Saturday
- C. Thursday
- D. Friday

Answer: B

22.If today is Monday then which day of the week is

after 59 days.

- A. Tuesday

Olevel/Alevel

- B. Wednesday
- C. Thursday
- D. Friday

Answer: B

23. If 14th October 2005 is Friday then which day is 14th October 2009?

- A. Tuesday
- B. Wednesday
- C. Thursday
- D. Friday

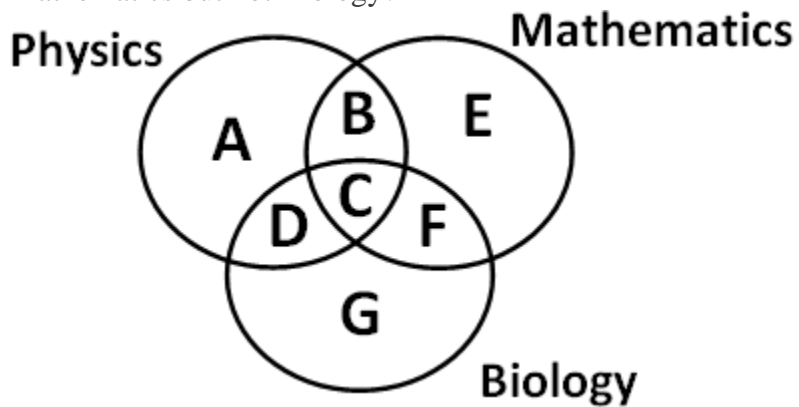
Answer: B

24. Kunal walks 10 kilometres towards North. From there, he walks 6 kilometres towards south. Then, he walks 3 kilometres towards east. How far and in which direction is he with reference to his starting point?

- A. 5 kilometres West
- B. 5 kilometres North-east
- C. 7 kilometres East
- D. 7 kilometres West
- E. None of these

Answer: E

25. Which of the region in the following figure represents students who study both Physics and Mathematics but not Biology?

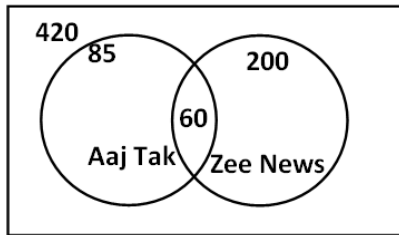


- A. B+C+D+F
- B. C
- C. A+E
- D. B

Answer: D

Olevel/Alevel

26. From the figure given below, determine the number of people who did not watch any news channel.

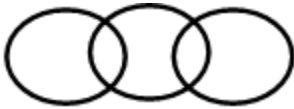


- A. 135
- B. 75
- C. 195
- D. 175

Answer: C

27. Which of the following figures correctly represents the relation between Machine, Lathe and Thermodynamics?

A.



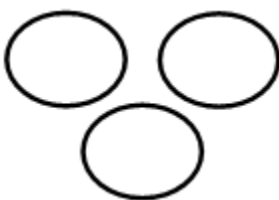
B.



C.

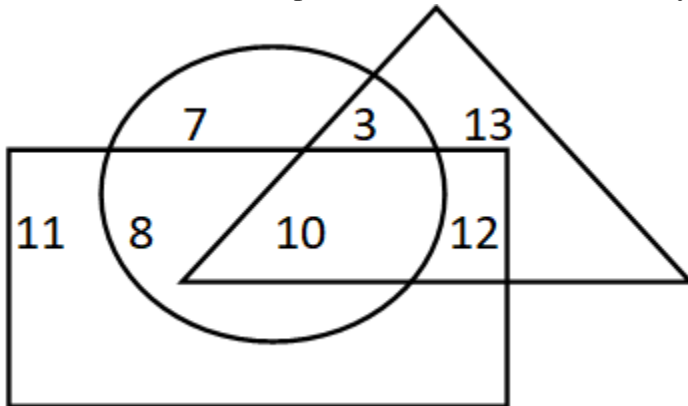


D.



Answer: B

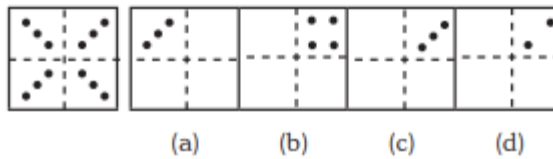
28. If triangle represents Women, rectangle represents Doctors and circle represents Lawyers.
Then which number represents Women that are Lawyer but not Doctor?



- A. 10
- B. 12
- C. 8
- D. 3

Answer: D

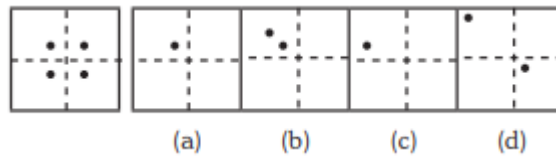
29.



- A. Only C
- B. Only D
- C. Both C & D
- D. None of these

Answer: A

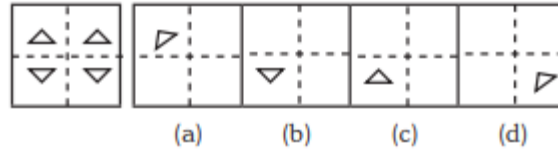
30.



- A. Only A
- B. Both A and B
- C. Only C
- D. Only D

Answer: A

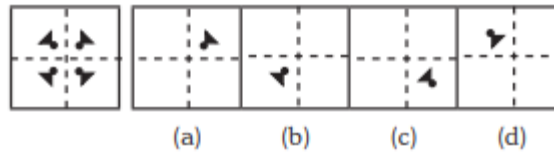
31.



- A. Option B
- B. Option A
- C. Both A & C
- D. Only D

Answer: A

32.



- A. Only A
- B. B
- C. C
- D. D

Answer: A

33. 3 pipes A, B and C can fill a tank in 30 minutes, 40 minutes, and 120 minutes, respectively. If all the pipes are opened together, how much time is required to fill the tank?

- A. 12 minutes
- B. 15 minutes
- C. 18 minutes
- D. 20 minutes

Answer: B

34. 3 pipes can fill a bucket in 20minutes, 30 minutes and 60 minutes, respectively. If all the pipes are opened for 5 minutes what percentage of the tank will be filled.

- A. 50%
- B. 60%
- C. 75%
- D. 100%

Answer: A

35. There are three pipes connected to a tank. The first two can fill the tank in 20 minutes and 30 minutes, respectively. The third pipe can empty the entire tank in 5 minutes. If all the pipes are opened simultaneously, what time will it take to empty the tank?

- A. 8.55 minutes
- B. 8.56 minutes

Olevel/Alevel

- C. 8.57 minutes
- D. 8.58 minutes

Answer: C

36. 2 pipes can empty a tank in 70 minutes and 140 minutes, respectively. If a third pipe can fill the tank in 7 minutes, find the time required to fill the tank if all the pipes are opened simultaneously.

- A. 7.23 minutes
- B. 8.23 minutes
- C. 8.57 minutes
- D. 8.88 minutes

Answer: B

37. A mixture containing 20% milk is mixed with another mixture containing 60% milk in the ratio 8 : 13. Find the percentage of milk in the new mixture.

- A. 37.14%
- B. 36.65%
- C. 35.57%
- D. 34.24%

Answer:A

38. A mixture containing 66% of acid is mixed with another mixture containing 35% of acid in the ratio 2 : 5. Find the percentage of acid in the mixture formed.

- A. 45%
- B. 46%
- C. 47%
- D. 48%

Answer: B

39. Introducing a woman, a man said, "Her husband is the only son of my father". How is that woman related to the man?

- A. Husband
- B. Sister
- C. Wife
- D. Mother

Answer: C

40. Q's mother is the sister of P and daughter of S. A is the son of P and Brother of H. G is the father of H. How is S related to G?

- A. Nephew
- B. Son-in-law
- C. Grandfather

Olevel/Alevel

D. Father-in-law

Answer: D

41. R is the son of A's father's sister. S is son of D, who is the mother of G and grandmother of A. H is the father of T and grandfather of R. D is wife of H. How is R related to D?

- A. Nephew
- B. Son
- C. Grandson
- D. Insufficient Data

Answer: C

42. Pointing towards a person a woman said to man, "His father is the only son of your mother". How is the man related to that person?

- A. Brother
- B. Father
- C. Son
- D. Husband

Answer: B

43. Introducing a child, a woman said, "He is the son of my father's only daughter". How is that woman related to the child?

- A. Mother
- B. Sister
- C. Wife
- D. Daughter

Answer: A

44. HSNT : EPKQ :: DTHL : ?

- A. ABCD
- B. UEJM
- C. WXYZ
- D. AQEI

Answer: D

45. Umbriel : Uranus :: Janus : ?

- A. Jupiter
- B. Mars
- C. Uranus
- D. Saturn

Answer: D

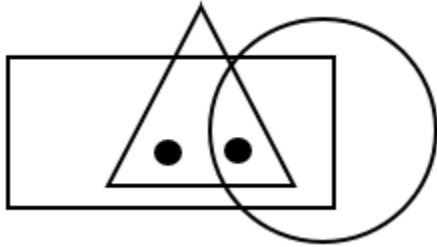
46. Kurnool : Andhra Pradesh :: Aizawl : ?

Olevel/Alevel

- A. Nagaland
- B. Meghalaya
- C. West Bengal
- D. Mizoram

Answer: D

47. Identify the figure which satisfies the same condition of placement of dots as in given figure.



- A.
- B.
- C.
- D.

Answer: C

48. Find odd one out from the given jumbled words: LNUAIMMIU, ELEST, OPERPC, NMKOYE, INCKLE

- A. NMKOYE
- B. OPERPC
- C. INCKLE
- D. ELEST

Answer: A

49. Find the odd one out.

- A. BEK
- B. CFL

Olevel/Alevel

C. MPS

D. GJP

Answer: C

50. In a certain code “564” means “study very hard”, “736” means “hard work pays” and “423” means “study and work”. Which of the following is the code for “work”?

A. 5

B. 3

C. 6

D. 4

Answer: B

51. If ‘white’ is called ‘yellow’, ‘yellow’ is called ‘blue’, ‘blue’ is called ‘red’, ‘red’ is called ‘black’, ‘black’ is called ‘violet’ and ‘violet’ is called ‘green’, then what would be the colour of light emitting from bulb?

A. Blue

B. Red

C. Yellow

D. Black

Answer: A

52. If the letters of the word “PRODUCT” are arranged alphabetically, then which letter would be farthest from the second letter of word?

A. T

B. R

C. U

D. P

Answer: C

53. Milly introduced a boy as the son of the only daughter of the mother of her maternal uncle. How is Milly related to that boy?

A. Nephew

B. Son

C. Brother

D. Sister

Answer: D

54. If ‘A&B’ means A is father of B, ‘A*B’ means A is brother of B, ‘A\$B’ means A is mother of B then which of the following is correct about K\$T&M?

A. M is brother of T

B. T is son of K

C. M is father of T

Olevel/Alevel

D. K is mother of M

Answer: B

55. Ankita's younger brother Bobby is older than Nilu. Shweta is younger than Rahul but elder than Ankita. Who is the eldest?

- A. Rahul
- B. Shweta
- C. Ankita
- D. Bobby

Answer: A

56. How many even numbers are there in the following series of numbers, each of which is immediately preceded by an odd number, but not immediately followed by an even number?

"6 2 8 9 1 3 4 5 7 5 8 9 7 9 10 8 1 4 9 2 6"

- A. 4
- B. 3
- C. 2
- D. 1

Answer: B

57. ADLK : CFNM :: GRSP : ?

- A. WXYZ
- B. GHJK
- C. ABCD
- D. ITUR

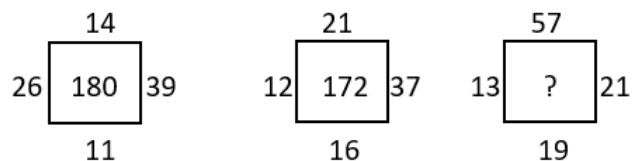
Answer: D

58. Pointing towards a person a woman said to man, "His father is the only son of your mother". How is the man related to that person?

- A. Husband
- B. Son
- C. Father
- D. Brother

Answer: C

59. Find the correct alternative which will replace the question mark?



- A. 107
- B. 220

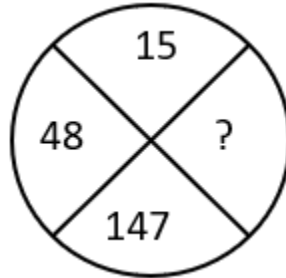
Olevel/Alevel

C. 285

D. 164

Answer: B

60. Find the correct alternative which will replace the question mark?



A. 444

B. 445

C. 446

D. 447

Answer: A

61. Choose the figure which is different from the rest?



(A)

(B)

(C)

(D)

A. Fig A

B. Fig B

C. Fig C

D. Fig D

Answer: A

62. A cage had 15 birds. All but seven manages to escape. How many birds remain?

A. 7

B. 12

C. 15

D. 8

Answer: A

63. Find the angle between minute hand and hour hand at 6:30 AM

A. 25°

B. 22.5°

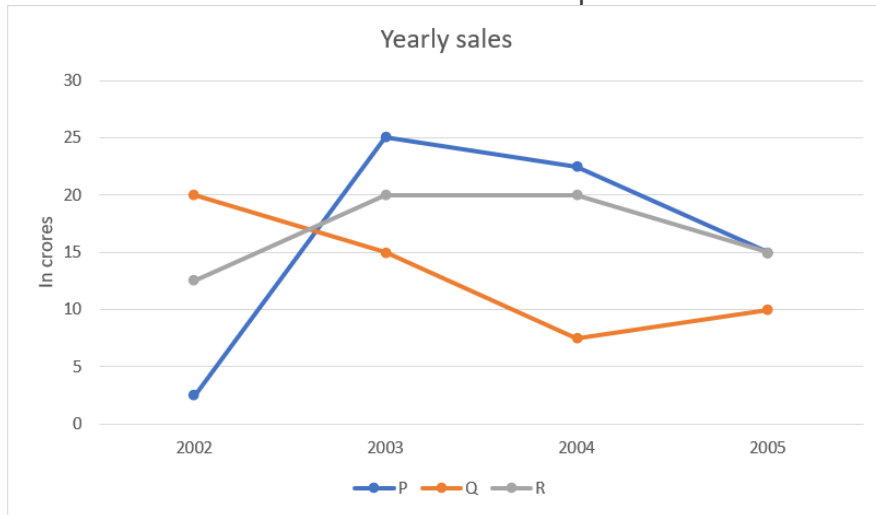
C. 15°

D. None of these

Olevel/Alevel

Answer: C

64. Study the graph and find what is the difference between maximum and minimum sales of p.



- A. 22.5
- B. 25
- C. 27.5
- D. 35

Answer: A

65. An unbiased dice is thrown. What is the probability of getting 5 or a greater number?

- A. $\frac{2}{3}$
- B. $\frac{5}{6}$
- C. $\frac{1}{3}$
- D. $\frac{1}{6}$

Answer: D

66. A and B are brothers. M is the mother of A and D is brother of S. K is sister of B and mother of S. What is the relationship between K and M?

- A. Sister and Brother
- B. Grandson and Grandmother
- C. Nephew and Aunt
- D. Daughter and Mother

Answer: D

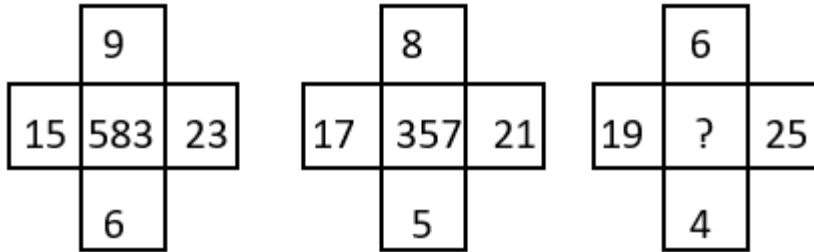
67. When my parents married their age was in a ratio 11 : 10 (father's age : mother's age). This year they celebrated 15th anniversary. If the total of

their ages at their silver jubilee anniversary will be 113, find my father's age now.

- A. 33 years
- B. 40 years
- C. 42 years
- D. 43 years

Answer: D

68. Find the correct alternative which will replace the question mark?



- A. 765
- B. 254
- C. 356
- D. 432

Answer: D

69. Mathematics is related to numbers in the same way as History is related to _____?

- A. People
- B. Events
- C. Dates
- D. Wars

Answer: B

70. Bag is related to Luggage in the same way as Ship is related to _____?

- A. Coal
- B. Stock
- C. Cargo
- D. Weight

Answer: C

71. Mirror is related to Reflection in the same way as Water is related to _____?

- A. Conduction
- B. Dispersion
- C. Immersion
- D. Refraction

Answer: D

72. What will come next in the following series?

35 45 ? 65 75

Olevel/Alevel

- A. 55
- B. 80
- C. 47
- D. 84

Answer: A

73. If SKYLAND is coded as 7948312, then LAND is coded as _____

- A. 8312
- B. 7948
- C. 9483
- D. 8321
- E. None

Answer: A

74. If STRANGER is to 97524687, then ANGER is to _____

- A. 24687
- B. 26487
- C. 64287
- D. 26489
- E. 98462

Answer: A

75. Which one is different from the rest?

- A. Similar
- B. Equivalent
- C. Like
- D. Same
- E. Distinguish

Answer: E

76. Which one is different from the rest?

- A. Fullback
- B. Fine leg
- C. Centre half
- D. Defender
- E. Half side

Answer: B

77. Which one is different from the rest?

- A. Tooth

Olevel/Alevel

- B. Spoon
 - C. Plate
 - D. Tray
 - E. Knife
- Answer: A

78. If SHOUT is to 81397 then HOT is to _____

- A. 137
- B. 237
- C. 731
- D. 813
- E. 318

Answer: A

79. Which one is different from the rest?

- A. Kiwi
- B. Sparrow
- C. Crow
- D. Eagle
- E. Parrot

Answer: A

80. Find out the odd man out?

- A. Cloth
- B. Thin
- C. Colorful
- D. Glitter
- E. Bright

Answer: A

81. If RIVER is coded as 12345 and FEAVER is to 647345 then what stand for EAR

- A. 375
- B. 465
- C. 275
- D. 475
- E. 654

Answer: D

82. If SECRET is coded as 102807 then ERRECT is coded as _____

- A. 088027

Olevel/Alevel

B. 088007

C. 808027

D. 088072

E. 008827

Answer: A

83. If TOMORROW is to 56768869 then ROW is to _____

A. 576

B. 688

C. 896

D. 869

Answer: D

84. If the highest number is added to the first number and divided by the third number.

What will be the answer?

10 15 5

A. 4

B. 2

C. 6

D. 5

Answer: 5

85. What will comes next in the following series?

BAC EDF KJL ? QPR

A. MNO

B. NMO

C. OMN

D. PQR

E. NONE

Answer: B

86. If G=7, H=8, I=9, then DEF?

A. 455

B. 456

C. 564

D. 465

Answer: B

Olevel/Alevel

C. Q

D. W

Answer: A

92. Which one is different from the rest?

A. Sword

B. Knife

C. Fork

D. Dagger

Answer: C

93. Looking on a portrait, a man said, that man is my father's son.

I have no brother & sister what is He to Me?

A. Cousin

B. Uncle

C. Brother

D. Own picture

Answer: D

94. Which one is different from the rest?

A. Certain

B. Vague

C. Sure

D. True

Answer: B

95. Saw is to Cut as Iron is to _____

A. Press

B. Metal

C. Oven

D. Hard

Answer: A

96. Which one is different from the rest?

A. 2

B. 4

C. 20

D. 5

Answer: D

Olevel/Alevel

97. Which one is different from the rest?

- A. Foot
- B. Kilometer
- C. Length
- D. Yard

Answer: C

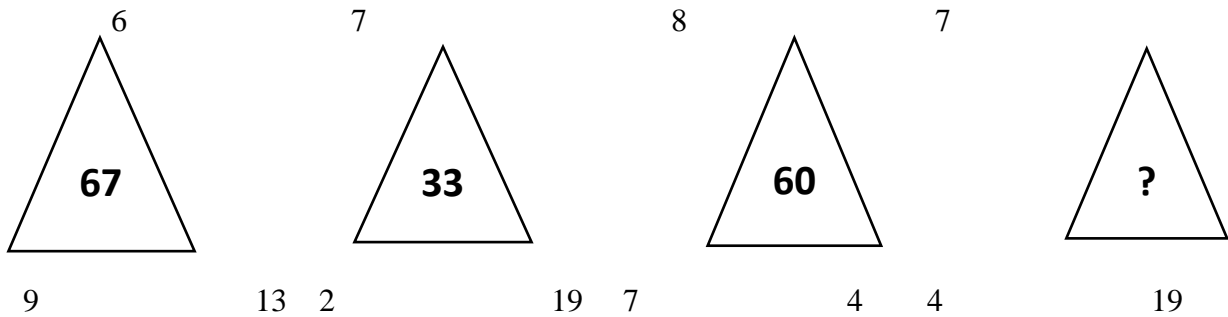
98. What number comes next in the following series?

3412 4223 2334 3442 _____

- A. 4253
- B. 4255
- C. 5342
- D. None

Answer: A

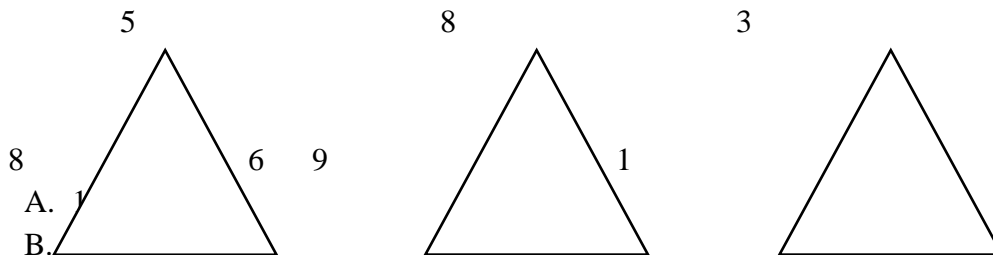
99. What number should replace the question mark?



- A. 49
- B. 7
- C. 40
- D. 2

Answer: A

100. What no should replace the question mark?



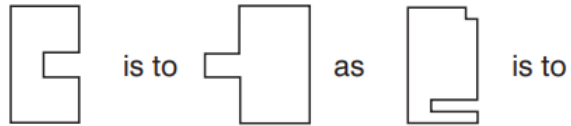
- A. 1
- B. 11
- C. 11
- D. 8

Answer: A

Olevel/Alevel

8th Class Intelligence Questions (IQ) Past Paper

1. Which shape completes the second pair in the same way as the first pair?



A.



B.



C.



D.



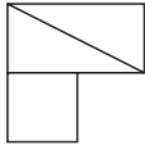
Answer: D.

2. In which larger shape is the shape on the left hidden?

8th Class Intelligence Questions (IQ) Past Paper



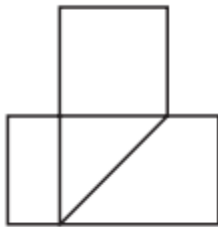
A.



B.



C.



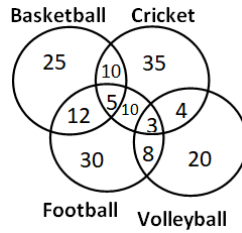
D.



Answer: C.

3. The following diagram shows the number of children playing Basketball, Cricket, Football and Volleyball. If the total number of children is 400, what is the percentage of children playing at least two games?

8th Class Intelligence Questions (IQ) Past Paper



- A. 8
- B. 6
- C. 9.25
- D. 13

Answer: D

4. Which of the following diagram correctly represents the relationship among Teacher, Scientist and Graduate?

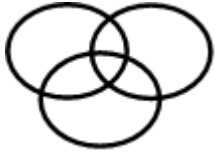
- A.
- B.
- C.
- D.

Answer: A

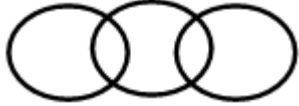
5. Which of the following diagram depicts the relation among Currency, Dinar and Rupee.

8th Class Intelligence Questions (IQ) Past Paper

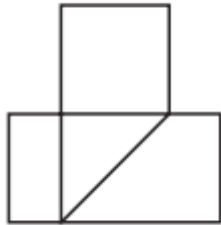
A.



B.



C.



D.



Answer: D

6. The purchase price of an article is 20% less than the profit made. Find the profit if the selling price is 360 rupees.

Olevel/Alevel

- A. 180 rupees
- B. 240 rupees
- C. 200 rupees
- D. 160 rupees

Answer: C

7. The cost price of an article is 1.56 times the selling price. Find the loss percentage.

- A. 37.8%
- B. 35.9%
- C. 39.5%
- D. 34.5%

Answer: B

8. A shopkeeper purchased an article for 500 rupees. At what price should he mark the article to allow a discount of 35% and still earn 100% profit.

- A. 1599 rupees
- B. 1523 rupees
- C. 1575 rupees
- D. 1539 rupees

Answer: D

9. A group of 5 men or 12 women can do a task in 78 days. find the time taken by 5 men and 12 women to complete the task.

- A. 39 days
- B. 36 days
- C. 29 days
- D. 26 days

Answer: A

10. The speed of a train is 120 kmph and the length of the train is 240 m. find the time it will take to cross a pole.

- A. 9.6 seconds
- B. 7.2 seconds
- C. 4.8 seconds
- D. 2.4 seconds

Answer: C

11. If triangle represents women, rectangle represents educated person and circle represent government jobs. Then which number represents educated women who are not in government job?

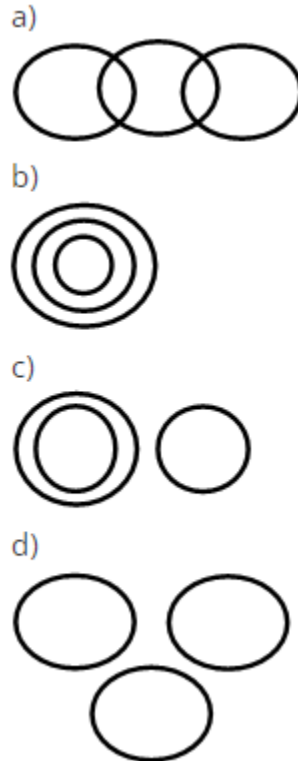
- A. 10

Olevel/Alevel

- B. 12
- C. 8
- D. 3

Answer: B

12. Which of the following figures shows relation between Trains, Goods and Truck?



- A. Only a)
- B. Both a & d
- C. Only c)
- D. None of Above

Answer: A

13.If 14th October 2005 is Friday then which day is 14th

October 2006?

- A. Tuesday
- B. Saturday
- C. Thursday
- D. Friday

Answer: B

14.If today is Monday then which day of the week is

after 59 days.

- A. Tuesday

Olevel/Alevel

- B. Wednesday
- C. Thursday
- D. Friday

Answer: B

15. If 14th October 2005 is Friday then which day is 14th October 2009?

- A. Tuesday
- B. Wednesday
- C. Thursday
- D. Friday

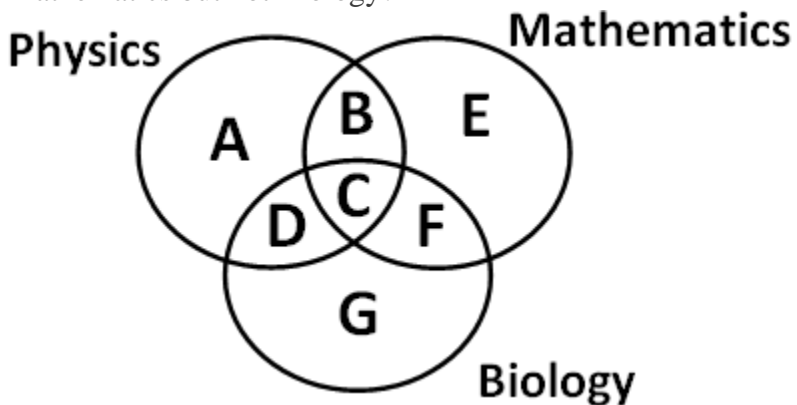
Answer: B

16. Kunal walks 10 kilometres towards North. From there, he walks 6 kilometres towards south. Then, he walks 3 kilometres towards east. How far and in which direction is he with reference to his starting point?

- A. 5 kilometres West
- B. 5 kilometres North-east
- C. 7 kilometres East
- D. 7 kilometres West
- E. None of these

Answer: E

17. Which of the region in the following figure represents students who study both Physics and Mathematics but not Biology?

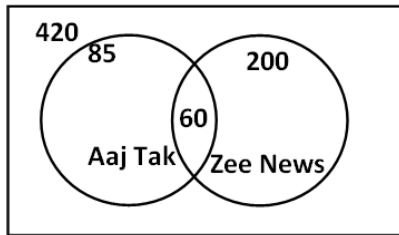


- A. B+C+D+F
- B. C
- C. A+E
- D. B

Answer: D

Olevel/Alevel

18. From the figure given below, determine the number of people who did not watch any news channel.

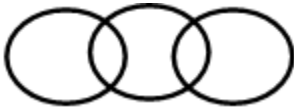


- A. 135
- B. 75
- C. 195
- D. 175

Answer: C

19. Which of the following figures correctly represents the relation between Machine, Lathe and Thermodynamics?

A.



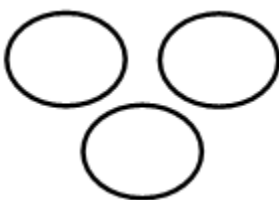
B.



C.

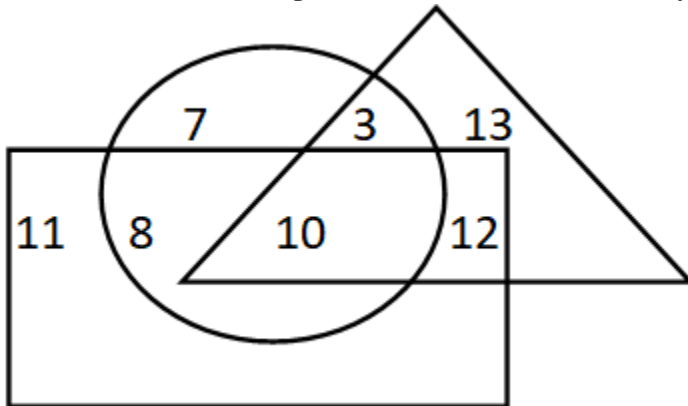


D.



Answer: B

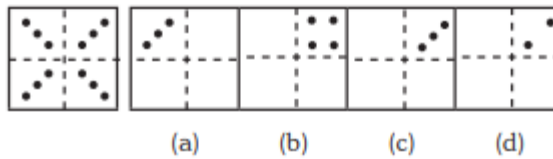
20. If triangle represents Women, rectangle represents Doctors and circle represents Lawyers.
Then which number represents Women that are Lawyer but not Doctor?



- A. 10
- B. 12
- C. 8
- D. 3

Answer: D

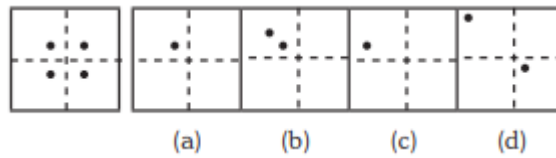
21.



- A. Only C
- B. Only D
- C. Both C & D
- D. None of these

Answer: A

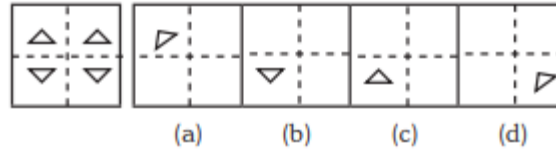
22.



- A. Only A
- B. Both A and B
- C. Only C
- D. Only D

Answer: A

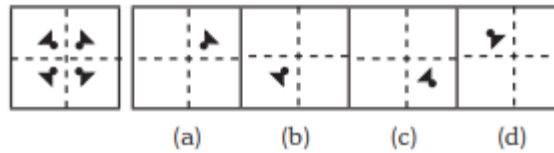
23.



- A. Option B
- B. Option A
- C. Both A & C
- D. Only D

Answer: A

24.



- A. Only A
- B. B
- C. C
- D. D

Answer: A

25. 3 pipes A, B and C can fill a tank in 30 minutes, 40 minutes, and 120 minutes, respectively. If all the pipes are opened together, how much time is required to fill the tank?

- A. 12 minutes
- B. 15 minutes
- C. 18 minutes
- D. 20 minutes

Answer: B

26. 3 pipes can fill a bucket in 20minutes, 30 minutes and 60 minutes, respectively. If all the pipes are opened for 5 minutes what percentage of the tank will be filled.

- A. 50%
- B. 60%
- C. 75%
- D. 100%

Answer: A

27. There are three pipes connected to a tank. The first two can fill the tank in 20 minutes and 30 minutes, respectively. The third pipe can empty the entire tank in 5 minutes. If all the pipes are opened simultaneously, what time will it take to empty the tank?

- A. 8.55 minutes
- B. 8.56 minutes

Olevel/Alevel

- C. 8.57 minutes
- D. 8.58 minutes

Answer: C

28. 2 pipes can empty a tank in 70 minutes and 140 minutes, respectively. If a third pipe can fill the tank in 7 minutes, find the time required to fill the tank if all the pipes are opened simultaneously.

- A. 7.23 minutes
- B. 8.23 minutes
- C. 8.57 minutes
- D. 8.88 minutes

Answer: B

29. A mixture containing 20% milk is mixed with another mixture containing 60% milk in the ratio 8 : 13. Find the percentage of milk in the new mixture.

- A. 37.14%
- B. 36.65%
- C. 35.57%
- D. 34.24%

Answer:A

30. A mixture containing 66% of acid is mixed with another mixture containing 35% of acid in the ratio 2 : 5. Find the percentage of acid in the mixture formed.

- A. 45%
- B. 46%
- C. 47%
- D. 48%

Answer: B

31. Introducing a woman, a man said, "Her husband is the only son of my father". How is that woman related to the man?

- A. Husband
- B. Sister
- C. Wife
- D. Mother

Answer: C

32. Q's mother is the sister of P and daughter of S. A is the son of P and Brother of H. G is the father of H. How is S related to G?

- A. Nephew
- B. Son-in-law
- C. Grandfather

Olevel/Alevel

D. Father-in-law

Answer: D

33. R is the son of A's father's sister. S is son of D, who is the mother of G and grandmother of A. H is the father of T and grandfather of R. D is wife of H. How is R related to D?

A. Nephew

B. Son

C. Grandson

D. Insufficient Data

Answer: C

34. Pointing towards a person a woman said to man, "His father is the only son of your mother". How is the man related to that person?

A. Brother

B. Father

C. Son

D. Husband

Answer: B

35. Introducing a child, a woman said, "He is the son of my father's only daughter". How is that woman related to the child?

A. Mother

B. Sister

C. Wife

D. Daughter

Answer: A

36. HSNT : EPKQ :: DTHL : ?

A. ABCD

B. UEJM

C. WXYZ

D. AQEI

Answer: D

37. Umbriel : Uranus :: Janus : ?

A. Jupiter

B. Mars

C. Uranus

D. Saturn

Answer: D

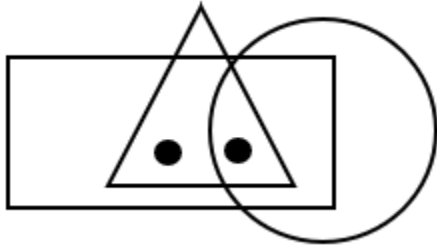
38. Kurnool : Andhra Pradesh :: Aizawl : ?

Olevel/Alevel

- A. Nagaland
- B. Meghalaya
- C. West Bengal
- D. Mizoram

Answer: D

39. Identify the figure which satisfies the same condition of placement of dots as in given figure.



- A.
- B.
- C.
- D.

Answer: C

40. Find odd one out from the given jumbled words: LNUAIMMIU, ELEST, OPERPC, NMKOYE, INCKLE

- A. NMKOYE
- B. OPERPC
- C. INCKLE
- D. ELEST

Answer: A

41. Find the odd one out.

- A. BEK
- B. CFL

Olevel/Alevel

C. MPS

D. GJP

Answer: C

42. In a certain code “564” means “study very hard”, “736” means “hard work pays” and “423” means “study and work”. Which of the following is the code for “work”?

A. 5

B. 3

C. 6

D. 4

Answer: B

43. If ‘white’ is called ‘yellow’, ‘yellow’ is called ‘blue’, ‘blue’ is called ‘red’, ‘red’ is called ‘black’, ‘black’ is called ‘violet’ and ‘violet’ is called ‘green’, then what would be the colour of light emitting from bulb?

A. Blue

B. Red

C. Yellow

D. Black

Answer: A

44. If the letters of the word “PRODUCT” are arranged alphabetically, then which letter would be farthest from the second letter of word?

A. T

B. R

C. U

D. P

Answer: C

45. Milly introduced a boy as the son of the only daughter of the mother of her maternal uncle. How is Milly related to that boy?

A. Nephew

B. Son

C. Brother

D. Sister

Answer: D

46. If ‘A&B’ means A is father of B, ‘A*B’ means A is brother of B, ‘A\$B’ means A is mother of B then which of the following is correct about K\$T&M?

A. M is brother of T

B. T is son of K

C. M is father of T

Olevel/Alevel

D. K is mother of M

Answer: B

47. Ankita's younger brother Bobby is older than Nilu. Shweta is younger than Rahul but elder than Ankita. Who is the eldest?

- A. Rahul
- B. Shweta
- C. Ankita
- D. Bobby

Answer: A

48. How many even numbers are there in the following series of numbers, each of which is immediately preceded by an odd number, but not immediately followed by an even number?

"6 2 8 9 1 3 4 5 7 5 8 9 7 9 10 8 1 4 9 2 6"

- A. 4
- B. 3
- C. 2
- D. 1

Answer: B

49. ADLK : CFNM :: GRSP : ?

- A. WXYZ
- B. GHJK
- C. ABCD
- D. ITUR

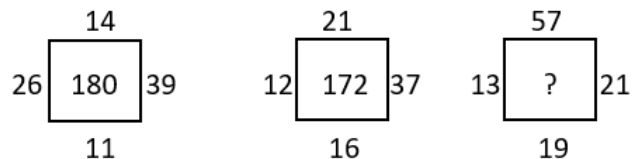
Answer: D

50. Pointing towards a person a woman said to man, "His father is the only son of your mother". How is the man related to that person?

- A. Husband
- B. Son
- C. Father
- D. Brother

Answer: C

51. Find the correct alternative which will replace the question mark?



- A. 107
- B. 220

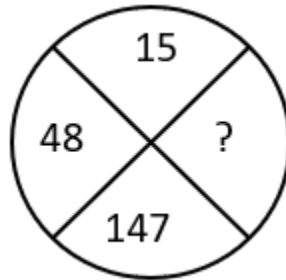
Olevel/Alevel

C. 285

D. 164

Answer: B

52. Find the correct alternative which will replace the question mark?



A. 444

B. 445

C. 446

D. 447

Answer: A

53. Choose the figure which is different from the rest?



(A)

(B)

(C)

(D)

A. Fig A

B. Fig B

C. Fig C

D. Fig D

Answer: A

54. A cage had 15 birds. All but seven manages to escape. How many birds remain?

A. 7

B. 12

C. 15

D. 8

Answer: A

55. Find the angle between minute hand and hour hand at 6:30 AM

A. 25°

B. 22.5°

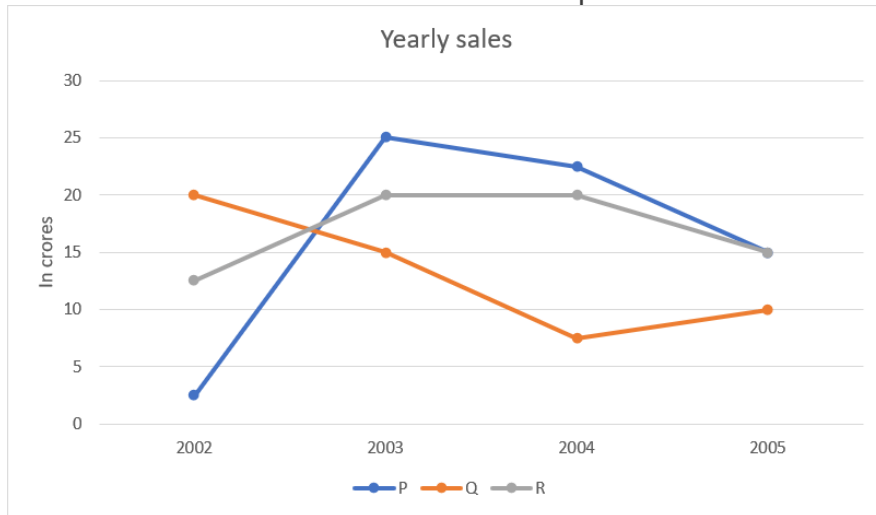
C. 15°

D. None of these

Olevel/Alevel

Answer: C

56. Study the graph and find what is the difference between maximum and minimum sales of p.



- A. 22.5
- B. 25
- C. 27.5
- D. 35

Answer: A

57. An unbiased dice is thrown. What is the probability of getting 5 or a greater number?

- A. $\frac{2}{3}$
- B. $\frac{5}{6}$
- C. $\frac{1}{3}$
- D. $\frac{1}{6}$

Answer: D

58. A and B are brothers. M is the mother of A and D is brother of S. K is sister of B and mother of S. What is the relationship between K and M?

- A. Sister and Brother
- B. Grandson and Grandmother
- C. Nephew and Aunt
- D. Daughter and Mother

Answer: D

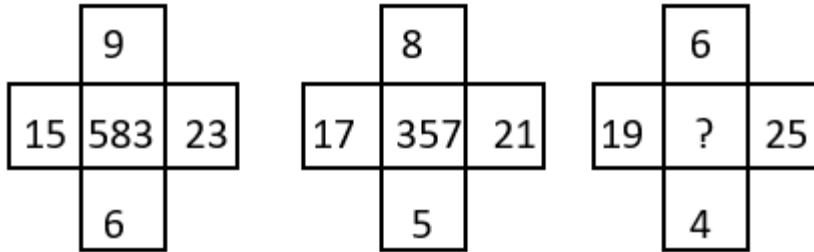
59. When my parents married their age was in a ratio 11 : 10 (father's age : mother's age). This year they celebrated 15th anniversary. If the total of

their ages at their silver jubilee anniversary will be 113, find my father's age now.

- A. 33 years
- B. 40 years
- C. 42 years
- D. 43 years

Answer: D

60. Find the correct alternative which will replace the question mark?



- A. 765
- B. 254
- C. 356
- D. 432

Answer: D

61. Mathematics is related to numbers in the same way as History is related to _____?

- A. People
- B. Events
- C. Dates
- D. Wars

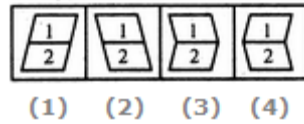
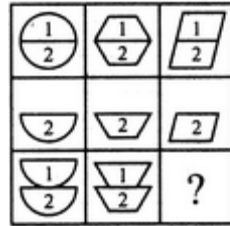
Answer: B

62. Bag is related to Luggage in the same way as Ship is related to _____?

- A. Coal
- B. Stock
- C. Cargo
- D. Weight

Answer: C

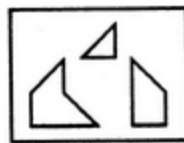
63. Select a suitable figure from the four alternatives that would complete the figure matrix.



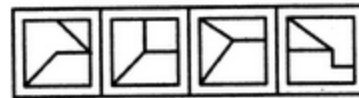
- A. 1
- B. 2
- C. 3
- D. 4

Answer: C

64. Find out which of the figures (1), (2), (3) and (4) can be formed from the pieces given in figure (X).



(X)



(1) (2) (3) (4)

- A. 1
- B. 2
- C. 3
- D. 4

Answer: A

65. Find out which of the figures (1), (2), (3) and (4) can be formed from the pieces given in figure (X).



(X)

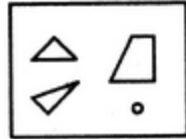


(1) (2) (3) (4)

- A. 1
- B. 2
- C. 3
- D. 4

Answer: C

66. Find out which of the figures (1), (2), (3) and (4) can be formed from the pieces given in figure (X).



(X)



(1) (2) (3) (4)

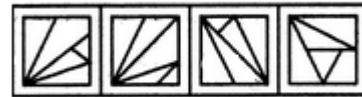
- A. 1
- B. 2
- C. 3
- D. 4

Answer: C

67. Find out which of the figures (1), (2), (3) and (4) can be formed from the pieces given in figure (X).



(X)

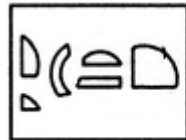


(1) (2) (3) (4)

- A. 1
- B. 2
- C. 3
- D. 4

Answer: 3

68. Find out which of the figures (1), (2), (3) and (4) can be formed from the pieces given in figure (X).



(X)

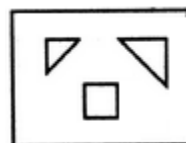


(1) (2) (3) (4)

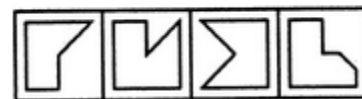
- A. 1
- B. 2
- C. 3
- D. 4

Answer: A

69. Find out which of the figures (1), (2), (3) and (4) can be formed from the pieces given in figure (X).



(X)



(1) (2) (3) (4)

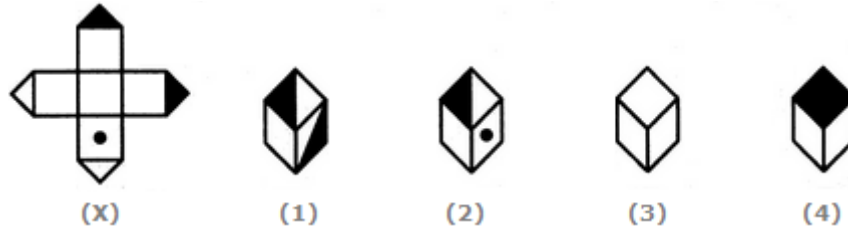
- A. 1
- B. 2

Olevel/Alevel

- C. 3
- D. 4

Answer: A

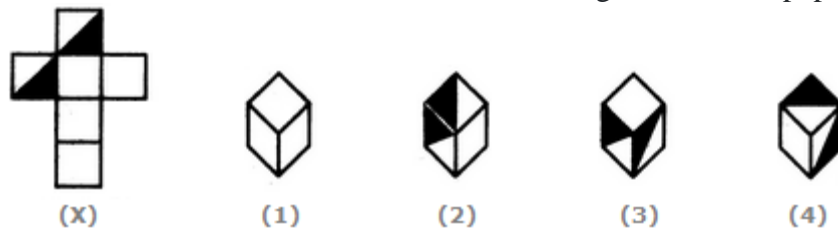
70. Choose the box that is similar to the box formed from the given sheet of paper (X).



- A. 1 and 2 only
- B. 2 and 4 only
- C. 2 and 3 only
- D. 1 and 4 only

Answer: C

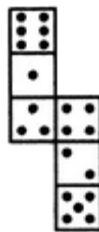
71. Choose the box that is similar to the box formed from the given sheet of paper (X).



- A. 1 and 4 only
- B. 3 and 4 only
- C. 1 and 2 only
- D. 2 and 3 only

Answer: A

72. How many dots lie opposite to the face having three dots, when the given figure is folded to form a cube?



- A. 2
- B. 4
- C. 5
- D. 6

Answer: D

73. Mirror is related to Reflection in the same way as Water is related to _____?

Olevel/Alevel

- A. Conduction
 - B. Dispersion
 - C. Immersion
 - D. Refraction
- Answer: D

74. What will comes next in the following series?

35 45 ? 65 75

- A. 55
- B. 80
- C. 47
- D. 84

Answer: A

75. If SKYLAND is coded as 7948312, then LAND is coded as _____

- A. 8312
- B. 7948
- C. 9483
- D. 8321
- E. None

Answer: A

76. If STRANGER is to 97524687, then ANGER is to _____

- A. 24687
- B. 26487
- C. 64287
- D. 26489
- E. 98462

Answer: A

77. Which one is different from the rest?

- A. Similar
- B. Equivalent
- C. Like
- D. Same
- E. Distinguish

Answer: E

78. Which one is different from the rest?

- A. Fullback
- B. Fine leg

Olevel/Alevel

- C. Centre half
 - D. Defender
 - E. Half side
- Answer: B

79. Which one is different from the rest?

- A. Tooth
 - B. Spoon
 - C. Plate
 - D. Tray
 - E. Knife
- Answer: A

80. If SHOUT is to 81397 then HOT is to _____

- A. 137
- B. 237
- C. 731
- D. 813
- E. 318

Answer: A

81. Which one is different from the rest?

- A. Kiwi
- B. Sparrow
- C. Crow
- D. Eagle
- E. Parrot

Answer: A

82. Find out the odd man out?

- A. Cloth
- B. Thin
- C. Colorful
- D. Glitter
- E. Bright

Answer: A

83. If RIVER is coded as 12345 and FEAVER is to 647345 then what stand for EAR

- A. 375
- B. 465

Olevel/Alevel

C. 275

D. 475

E. 654

Answer: D

84. If SECRET is coded as 102807 then ERRECT is coded as _____

A. 088027

B. 088007

C. 808027

D. 088072

E. 008827

Answer: A

85. If TOMORROW is to 56768869 then ROW is to _____

A. 576

B. 688

C. 896

D. 869

Answer: D

86. If the highest number is added to the first number and divided by the third number.

What will be the answer?

10 15 5

A. 4

B. 2

C. 6

D. 5

Answer: 5

87. What will comes next in the following series?

BAC EDF KJL ? QPR

A. MNO

B. NMO

C. OMN

D. PQR

E. NONE

Answer: B

93. What will come next?

$$7+2-1 = H$$

$$22+6-5 = W$$

$$11+6-2 = ?$$

A. O

B. P

C. Q

D. W

Answer: A

94. Which one is different from the rest?

A. 2

B. 4

C. 20

D. 5

Answer: D

95. Which one is different from the rest?

A. Foot

B. Kilometer

C. Length

D. Yard

Answer: C

96. What number comes next in the following series?

3412

4223

2334

3442

A. 4253


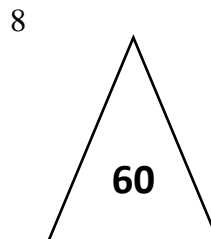
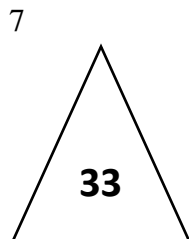
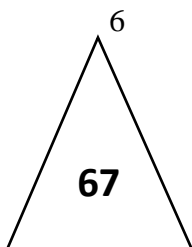
B. 4255

C. 5342

D. None

Answer: A

97. What number should replace the question mark?



Olevel/Alevel

- 9 13 2 19 7 4 4 19
- A. 49
 - B. 7
 - C. 40
 - D. 2

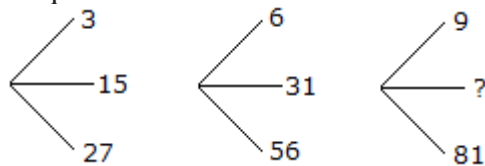
Answer: A

98. Which word does NOT belong with the others?

- A. unimportant
- B. trivial
- C. insignificant
- D. familiar

Answer: D

99. Which one will replace the question mark ?



- A. 45
- B. 46
- C. 49
- D. 50

Answer: A

100. Which one of the following is always in 'Sentiment'?

- A. Cruelty
- B. Insight
- C. Neutrality
- D. Emotion

Answer: D

9th Class Intelligence Questions (IQ) Past Paper

1. If total number of cuts is 10 then find the minimum number of pieces that can be obtained.
- A. 10
 - B. 11
 - C. 25
 - D. None of these

Answer: B

2. If total number of cuts is 10 then find the maximum number of pieces that can be obtained.
- A. 80
 - B. 48
 - C. 120
 - D. None of these

Answer: A

3. If total number of cuts is 20 then find the ratio of maximum and minimum number of pieces that can be obtained.
- A. 448: 63
 - B. 446:21
 - C. 122:21
 - D. None of these

Answer: B

4. If total number of pieces (Smaller cubes/cuboids) is 45 then find the possible number of cuts.
- A. 18 or 16
 - B. 8 or 12
 - C. 12 or 18
 - D. None of these

Answer: B

5. Find the maximum number of cuts required to get 50 pieces.
- A. 50
 - B. 51
 - C. 49
 - D. None of these

Answer: A

6. Find the minimum number of cuts required to get 50 pieces.
- A. 10
 - B. 11
 - C. 9
 - D. None of these

Answer: C

7. How many of the cubes have 0 faces painted?
- A. 64
 - B. 125
 - C. 27
 - D. None of these

Answer: A

9th Class Intelligence Questions (IQ) Past Paper

8. How many of the cubes have 2 faces painted?

- A. 144
- B. 125
- C. 96
- D. None of these

Answer: C

9. How many of the cubes have at most faces painted?

- A. 208
- B. 144
- C. 210
- D. None of these

Answer: A

10. How many of the cubes have at least 2 faces painted?

- A. 104
- B. 144
- C. 120
- D. None of these

Answer: B

11. How many of the cubes have 0 faces painted?

- A. 64
- B. 125
- C. 240
- D. None of these

Answer: D

12. How many of the cubes have 2 faces painted?

- A. 14
- B. 18
- C. 16
- D. None of these

Answer: B

13. How many of the cubes have at most faces painted?

- A. 208
- B. 244
- C. 342
- D. None of these

Answer: C

14. All flowers are pretty. Some plants are flowers. Which conclusion follows?

- A. All plants are pretty.
- B. Some plants are not pretty.
- C. Some plants are pretty.
- D. No plants are pretty.

Answer: C

15. All books are pages. All pages are words. Which conclusion follows?

- A. Some words are not books.

9th Class Intelligence Questions (IQ) Past Paper

- B. All books are words.
- C. Some books are not words.
- D. All words are books.

Answer: B

16. Some mammals are cats. All cats are animals. Which conclusion follows?
- A. Some animals are not mammals.
 - B. All mammals are animals.
 - C. Some mammals are not animals.
 - D. Some animals are mammals.

Answer: D

17. All cars are vehicles. No bikes are cars. Which conclusion follows?
- A. Some vehicles are not bikes.
 - B. All bikes are vehicles.
 - C. No bikes are vehicles.
 - D. Some bikes are not vehicles.

Answer: A

18. Every student loves studying. Some readers are students. Which conclusion follows?
- A. All readers love studying.
 - B. Some readers love studying.
 - C. No readers love studying.
 - D. All students are readers.

Answer: B

19. Which of the following is a perfect square?
- A. 1057
 - B. 625
 - C. 7928
 - D. 64000

Answer: B

20. Which of the following will have 6 at unit place?
- A. 19^2
 - B. 11^2
 - C. 24^2
 - D. 13^2

Answer: C

21. If 5278 is squared, then what will be at unit place?
- A. 8
 - B. 7
 - C. 6
 - D. 4

Answer: D

22. What will be the number of zeros in square of 400?
- A. 2
 - B. 3
 - C. 4
 - D. 6

Answer: C

9th Class Intelligence Questions (IQ) Past Paper

23. How many natural numbers lie between 9^2 and 10^2 ?

- A. 17
- B. 18
- C. 19
- D. 20

Answer: B

24. What is the sum of the first four odd natural numbers?

- A. 16
- B. 17
- C. 18
- D. 20

Answer: A

25. The value of $9^2 - 1$ is equal to:

- A. 81
- B. 80
- C. 79
- D. None of the above

Answer: B

26. The sum of $1 + 3 + 5 + 7 + 9 + 11 + 13 + 15 + 17 + 19$ is:

- A. 121
- B. 120
- C. 100
- D. 110

Answer: C

27. The square of 42 is:

- A. 1764
- B. 1664
- C. 1564
- D. 1504

Answer: A

28. Aircraft is to air as hovercraft is to:

- A. Space
- B. Stream
- C. Vacuum
- D. Surface

Answer: D

29. House is to human as nest is to:

- A. Birds
- B. Kids
- C. Animals
- D. Elders

Answer: A

30. Water is to flow as air is to:

- A. Carry
- B. Rage
- C. Drive
- D. Blow

9th Class Intelligence Questions (IQ) Past Paper

Answer: D

31. Train is to track as car is to:

- A. Jungle
- B. Road
- C. Oil
- D. Wheels

Answer: B

32. Kitten is to cat as cub is to:

- A. Monkey
- B. Goat
- C. Cow
- D. Leopard

Answer: D

33. Pension is to retirement as pay is to:

- A. Old age
- B. Employment
- C. Development
- D. Hard work

Answer: B

34. Neck is to head as foot is to:

- A. Hairs
- B. Arms
- C. Legs
- D. Body

Answer: C

35. What is the sum of $3+3 \times 4$:

- A. 16
- B. 24
- C. 22
- D. 15

Answer: D

36. Lamb is to sheep, as calf is to:

- A. Cow
- B. Sheep
- C. Zebra
- D. Dog

Answer: A

37. But is to tub as 2343 is to:

- A. 2343
- B. 4323
- C. 3234
- D. 3432

Answer: D

38. What will come next?

$$7+2-1 = H$$
$$22+6-5 = W$$
$$11+6-2 = ?$$

A. O

9th Class Intelligence Questions (IQ) Past Paper

- B. N
- C. P
- D. M

Answer: A

39. Which one is different from the rest?

- A. Dagger
- B. Sword
- C. Knife
- D. Fork

Answer: D

40. Looking on a portrait, a man said, that man is my father's son.

I have no brother & sister what is He to Me?

- A. Cousin
- B. Uncle
- C. Brother
- D. Own picture

Answer: D

41. Which one is different from the rest?

- A. True
- B. Certain
- C. Vague
- D. Sure

Answer: C

42. Saw is to Cut as Iron is to _____

- A. Press
- B. Metal
- C. Oven
- D. Hard

Answer: A

43. Which one is different from the rest?

- A. Two
- B. Four
- C. Twenty
- D. Five

Answer: D

44. How many of the cubes have at least 2 faces painted?

- A. 19
- B. 144
- C. 120
- D. None of these

Answer: A

45. How many of the cubes have 3 faces painted?

- A. 0
- B. 3
- C. 5
- D. None of these

9th Class Intelligence Questions (IQ) Past Paper

Answer: D

46. How many of the cubes have 0 faces painted?

- A. 64
- B. 125
- C. 240
- D. None of these

Answer: D

47. How many of the cubes have 2 faces painted?

- A. 23
- B. 29
- C. 31
- D. None of these

Answer: B

48. How many of the cubes have at most faces painted?

- A. 341
- B. 244
- C. 342
- D. None of these

Answer: A

49. How many of the cubes have at least 2 faces painted?

- A. 31
- B. 44
- C. 12
- D. None of these

Answer: A

50. How many of the cubes have 3 faces painted?

- A. 0
- B. 3
- C. 5
- D. None of these

Answer: D

51. All cats are animals. All animals are living things. Which conclusion follows?

- A. Some cats are not living things.
- B. All cats are living things.
- C. No cats are living things.
- D. Some living things are not cats.

Answer: B

52. No squares are circles. All circles are shapes. Which conclusion follows?

- A. Some shapes are squares.
- B. No squares are shapes.
- C. All squares are shapes.
- D. No shapes are squares.

Answer: A

9th Class Intelligence Questions (IQ) Past Paper

53. All poets are dreamers. No dreamers are dull. Which conclusion follows?

- A. Some poets are dull.
- B. No poets are dull.
- C. All poets are dull.
- D. Some poets are not dreamers.

Answer: B

54. Some fruits are apples. All apples are tasty. Which conclusion follows?

- A. Some fruits are not tasty.
- B. All fruits are tasty.
- C. Some fruits are tasty.
- D. No fruits are tasty.

Answer: C

55. No birds are dogs. Some dogs are pets. Which conclusion follows?

- A. Some pets are birds.
- B. No pets are birds.
- C. Some pets are not birds.
- D. All pets are dogs.

Answer: C

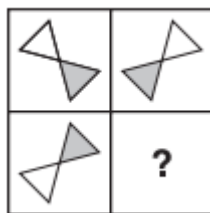
56. Electricity-Gas=100

Jack -Jill

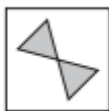
- A. 0
- B. 1
- C. 2
- D. 3

Answer: A

57. Which Shape completes the larger square?



A.



B.



9th Class Intelligence Questions (IQ) Past Paper

C.



D.



Answer: C.

58. Which one comes next?



A.



B.



C.

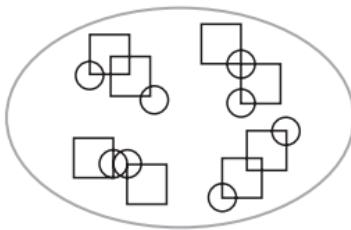


D.

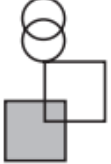
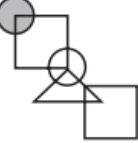




Answer: D.

59. Which pattern on the right belongs in the group on the left?

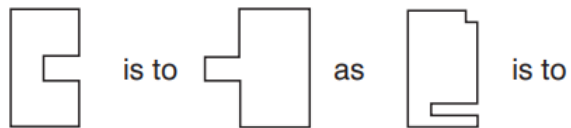




9th Class Intelligence Questions (IQ) Past Paper

- A. 
- B. 
- C. 
- D. 

Answer: D.

60. Which shape completes the second pair in the same way as the first pair?



- A. 
- B. 

9th Class Intelligence Questions (IQ) Past Paper

C.



D.

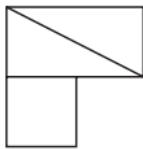


Answer: D.

61. In which larger shape is the shape on the left hidden?



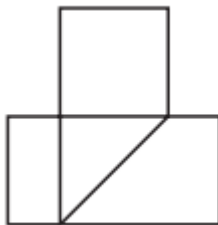
A.



B.



C.



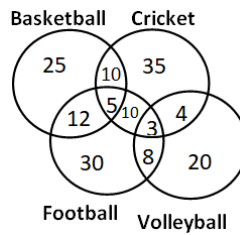
9th Class Intelligence Questions (IQ) Past Paper

D.



Answer: C.

62. The following diagram shows the number of children playing Basketball, Cricket, Football and Volleyball. If the total number of children is 400, what is the percentage of children playing at least two games?

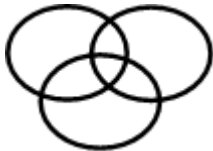


- A. 8
- B. 6
- C. 9.25
- D. 13

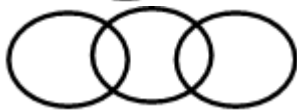
Answer: D

63. Which of the following diagram correctly represents the relationship among Teacher, Scientist and Graduate?

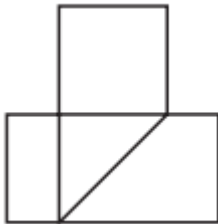
A.



B.



C.



9th Class Intelligence Questions (IQ) Past Paper

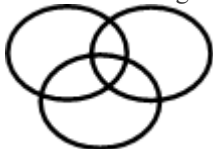
D.



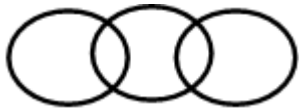
Answer: A

64. Which of the following diagram depicts the relation among Currency, Dinar and Rupee.

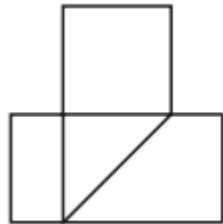
A.



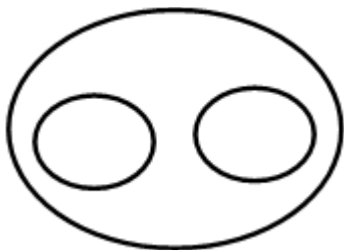
B.



C.



D.



Answer: D

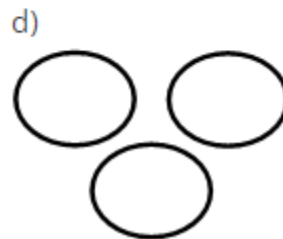
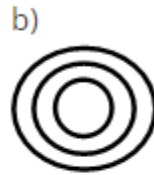
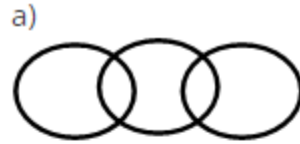
65. If triangle represents women, rectangle represents educated person and circle represent government jobs. Then which number represents educated women who are not in government job?

- A. 10
- B. 12
- C. 8
- D. 3

Answer: B

66. Which of the following figures shows relation between Trains, Goods and Truck?

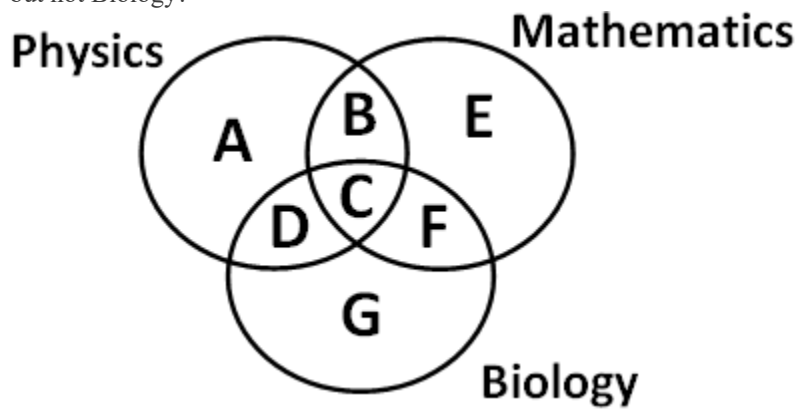
9th Class Intelligence Questions (IQ) Past Paper



- A. Only a)
- B. Both a & d
- C. Only c)
- D. None of Above

Answer: A

67. Which of the region in the following figure represents students who study both Physics and Mathematics but not Biology?

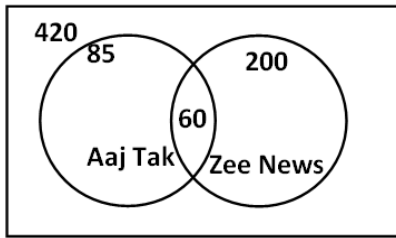


- A. B+C+D+F
- B. C
- C. A+E
- D. B

Answer: D

9th Class Intelligence Questions (IQ) Past Paper

68. From the figure given below, determine the number of people who did not watch any news channel.

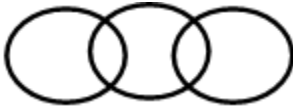


- A. 135
- B. 75
- C. 195
- D. 175

Answer: C

69. Which of the following figures correctly represents the relation between Machine, Lathe and Thermodynamics?

A.



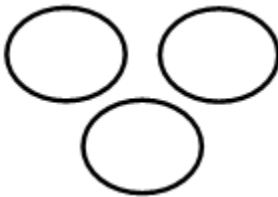
B.



C.



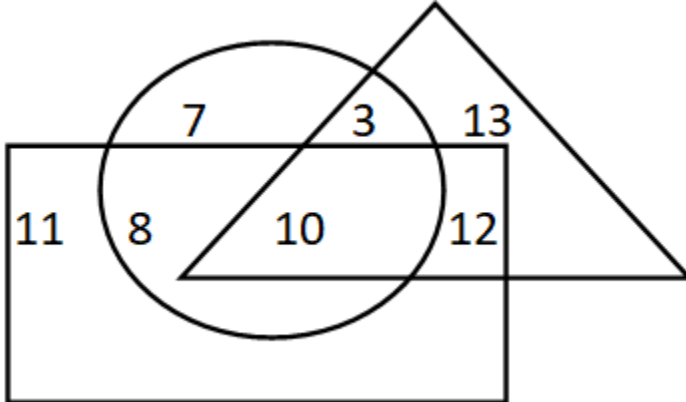
D.



Answer: B

9th Class Intelligence Questions (IQ) Past Paper

70. If triangle represents Women, rectangle represents Doctors and circle represents Lawyers. Then which number represents Women that are Lawyer but not Doctor?



- A. 10
- B. 12
- C. 8
- D. 3

Answer: D

71. In a certain code “ENTER” is written as “FPWIW”. How is “SHIFT” written in that code?

- A. SRLFE
- B. JDKAL
- C. TJLJY
- D. UDQKA

Answer: C

72. In a certain code “ERASE” is written as “DQZRD”. How is “DELETE” written in that code?

- A. BWKXUA
- B. CDKDS
- C. SHXHLH
- D. GWPNCV

Answer: B

73. In a certain code “ROBOT” is written as “SPCPU”. How “VISION” is written in that code?

- A. WJTJPO
- B. SPUPSR
- C. NJELVP
- D. ESAPTO

Answer: A

74. In a certain code “564” means “study very hard”, “736” means “hard work pays” and “423” means “study and work”. Which of the following is the code for “study”?

- A. 6
- B. 4
- C. 5
- D. 7

Answer: B

75. In a certain code “POTASSIUM” is written as “PoTassium”. How is “GRAPHITE” written in that code?

- A. GrAphItE

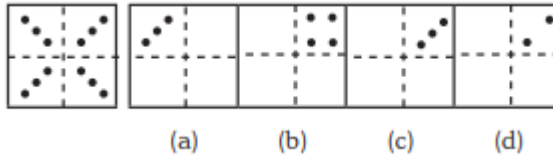
9th Class Intelligence Questions (IQ) Past Paper

- B. GrApHiTe
- C. gRaPHiTe
- D. GRAPhiTE

Answer: C

Direction (Q 76- 85): If a paper is folded in a particular manner and a punch is made, when unfolded this paper appears as given below in this question figure. Find out the manner in which the paper is folded and the punch is made from the answer figures given.

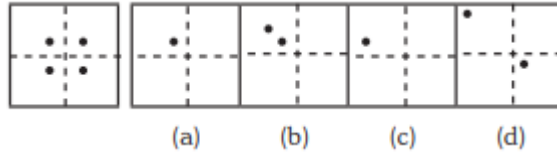
76.



- A. Only C
- B. Only D
- C. Both C & D
- D. None of these

Answer: A

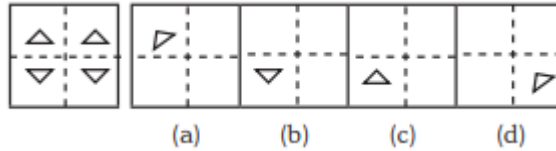
77.



- A. Only A
- B. Both A and B
- C. Only C
- D. Only D

Answer: A

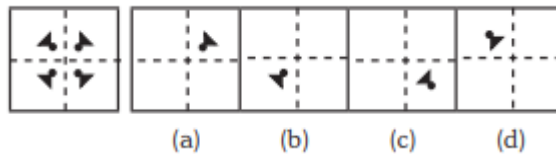
78.



- A. Option B
- B. Option A
- C. Both A & C
- D. Only D

Answer: A

79.

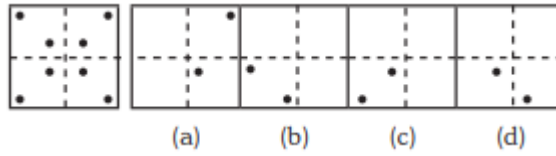


- A. Only A
- B. B
- C. C
- D. D

Answer: A

9th Class Intelligence Questions (IQ) Past Paper

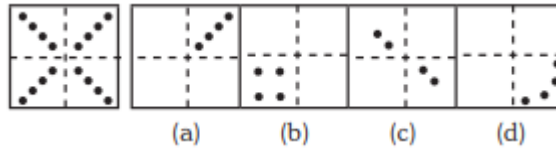
80.



- A. A
- B. B
- C. C
- D. D

Answer: C

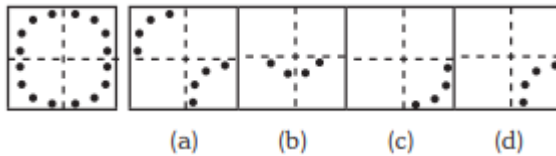
81.



- A. A
- B. B
- C. C
- D. D

Answer: A

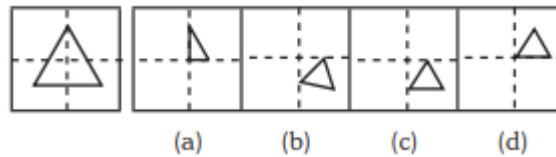
82.



- A. A
- B. B
- C. C
- D. D

Answer: C

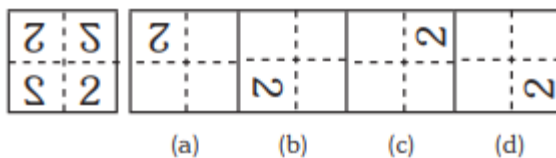
83.



- A. A
- B. B
- C. C
- D. D

Answer: C

84.

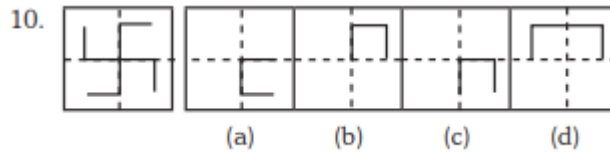


- A. A
- B. B
- C. C
- D. D

Answer: A

9th Class Intelligence Questions (IQ) Past Paper

85.



- A. A
- B. B
- C. C
- D. D

Answer: B

86. 3 pipes A, B and C can fill a tank in 30 minutes, 40 minutes, and 120 minutes, respectively. If all the pipes are opened together, how much time is required to fill the tank?

- A. 12 minutes
- B. 15 minutes
- C. 18 minutes
- D. 20 minutes

Answer: B

87. 3 pipes can fill a bucket in 20 minutes, 30 minutes and 60 minutes, respectively. If all the pipes are opened for 5 minutes what percentage of the tank will be filled.

- A. 50%
- B. 60%
- C. 75%
- D. 100%

Answer: A

88. There are three pipes connected to a tank. The first two can fill the tank in 20 minutes and 30 minutes, respectively. The third pipe can empty the entire tank in 5 minutes. If all the pipes are opened simultaneously, what time will it take to empty the tank?

- A. 8.55 minutes
- B. 8.56 minutes
- C. 8.57 minutes
- D. 8.58 minutes

Answer: C

89. 2 pipes can empty a tank in 70 minutes and 140 minutes, respectively. If a third pipe can fill the tank in 7 minutes, find the time required to fill the tank if all the pipes are opened simultaneously.

- A. 7.23 minutes
- B. 8.23 minutes
- C. 8.57 minutes
- D. 8.88 minutes

Answer: B

90. A mixture containing 20% milk is mixed with another mixture containing 60% milk in the ratio 8 : 13. Find the percentage of milk in the new mixture.

- A. 37.14%
- B. 36.65%
- C. 35.57%
- D. 34.24%

9th Class Intelligence Questions (IQ) Past Paper

Answer: A

91. A mixture containing 66% of acid is mixed with another mixture containing 35% of acid in the ratio 2 : 5. Find the percentage of acid in the mixture formed.

- A. 45%
- B. 46%
- C. 47%
- D. 48%

Answer: B

92. Introducing a woman, a man said, "Her husband is the only son of my father". How is that woman related to the man?

- A. Husband
- B. Sister
- C. Wife
- D. Mother

Answer: C

93. Q's mother is the sister of P and daughter of S. A is the son of P and Brother of H. G is the father of H. How is S related to G?

- A. Nephew
- B. Son-in-law
- C. Grandfather
- D. Father-in-law

Answer: D

94. R is the son of A's father's sister. S is son of D, who is the mother of G and grandmother of A. H is the father of T and grandfather of R. D is wife of H. How is R related to D?

- A. Nephew
- B. Son
- C. Grandson
- D. Insufficient Data

Answer: C

95. Pointing towards a person a woman said to man, "His father is the only son of your mother". How is the man related to that person?

- A. Brother
- B. Father
- C. Son
- D. Husband

Answer: B

96. Introducing a child, a woman said, "He is the son of my father's only daughter". How is that woman related to the child?

- A. Mother
- B. Sister
- C. Wife
- D. Daughter

Answer: A

97. HSNT : EPKQ :: DTHL : ?

- A. ABCD

9th Class Intelligence Questions (IQ) Past Paper

- B. UEJM
- C. WXYZ
- D. AQEI

Answer: D

98. Umbriel : Uranus :: Janus : ?

- A. Jupiter
- B. Mars
- C. Uranus
- D. Saturn

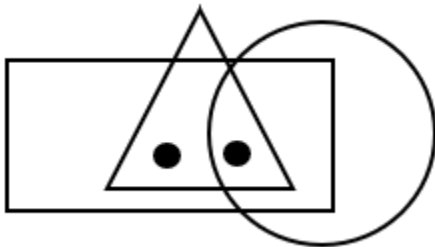
Answer: D

99. Kurnool : Andhra Pradesh :: Aizawl : ?

- A. Nagaland
- B. Meghalaya
- C. West Bengal
- D. Mizoram

Answer: D

100. Identify the figure which satisfies the same condition of placement of dots as in given figure.




- A.
- B.
- C.
- D.

Answer: C

10th Class Intelligence Questions (IQ) Past Paper

1. Which Shape completes the larger square?



A.



B.



C.



D.



Answer: C.

2. Which one comes next?



A.



B.



C.



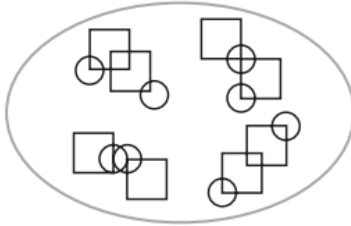
10th Class Intelligence Questions (IQ) Past Paper

D.

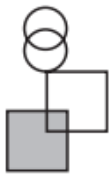


Answer: D.

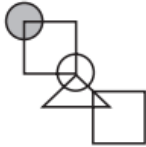
3. Which pattern on the right belongs in the group on the left?



A.



B.



C.



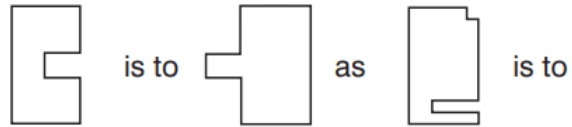
D.



Answer: D.

4. Which shape completes the second pair in the same way as the first pair?

10th Class Intelligence Questions (IQ) Past Paper



A.



B.



C.



D.

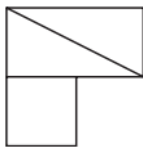


Answer: D.

5. In which larger shape is the shape on the left hidden?



A.

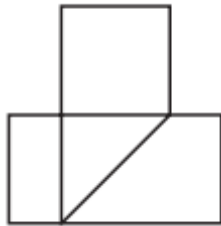


10th Class Intelligence Questions (IQ) Past Paper

B.



C.

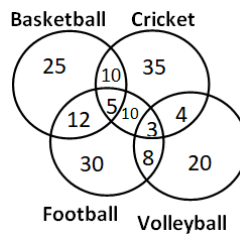


D.



Answer: C.

6. The following diagram shows the number of children playing Basketball, Cricket, Football and Volleyball. If the total number of children is 400, what is the percentage of children playing at least two games?

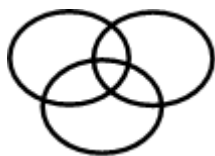


- A. 8
 B. 6
 C. 9.25
 D. 13

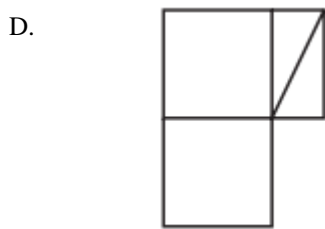
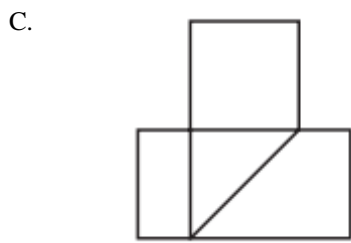
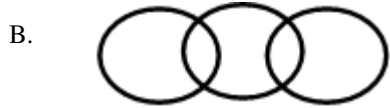
Answer: D

7. Which of the following diagram correctly represents the relationship among Teacher, Scientist and Graduate?

A.

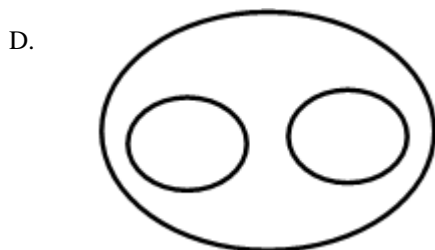
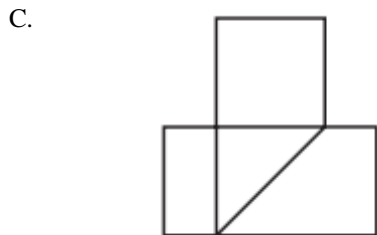
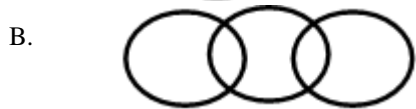
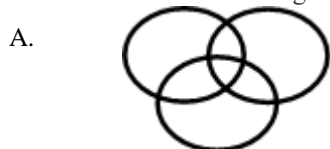


10th Class Intelligence Questions (IQ) Past Paper



Answer: A

8. Which of the following diagram depicts the relation among Currency, Dinar and Rupee.



Answer: D

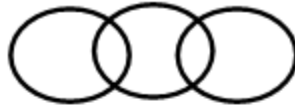
10th Class Intelligence Questions (IQ) Past Paper

9. If triangle represents women, rectangle represents educated person and circle represent government jobs. Then which number represents educated women who are not in government job?
- A. 10
 - B. 12
 - C. 8
 - D. 3

Answer: B

10. Which of the following figures shows relation between Trains, Goods and Truck?

a)



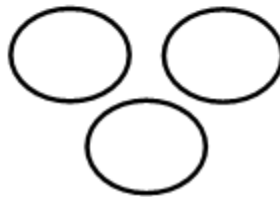
b)



c)



d)

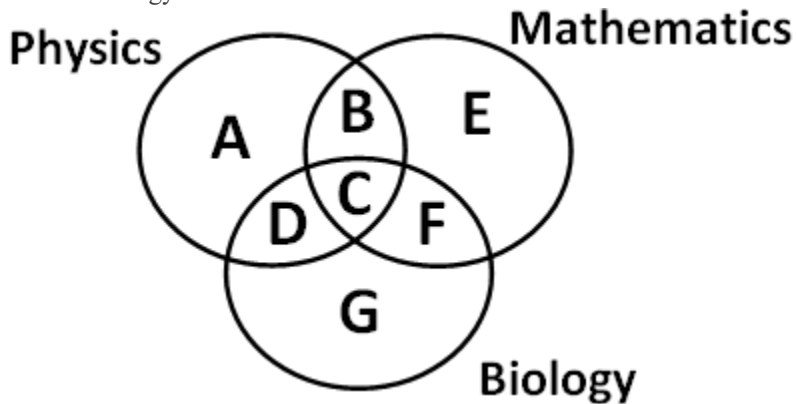


- A. Only a)
- B. Both a & d
- C. Only c)
- D. None of Above

Answer: A

10th Class Intelligence Questions (IQ) Past Paper

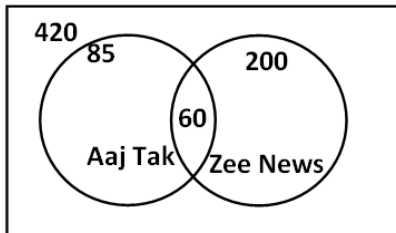
11. Which of the region in the following figure represents students who study both Physics and Mathematics but not Biology?



- A. $B+C+D+F$
- B. C
- C. $A+E$
- D. B

Answer: D

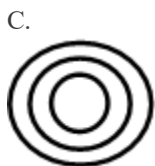
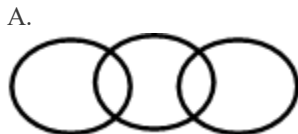
12. From the figure given below, determine the number of people who did not watch any news channel.



- A. 135
- B. 75
- C. 195
- D. 175

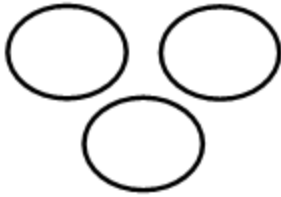
Answer: C

13. Which of the following figures correctly represents the relation between Machine, Lathe and Thermodynamics?



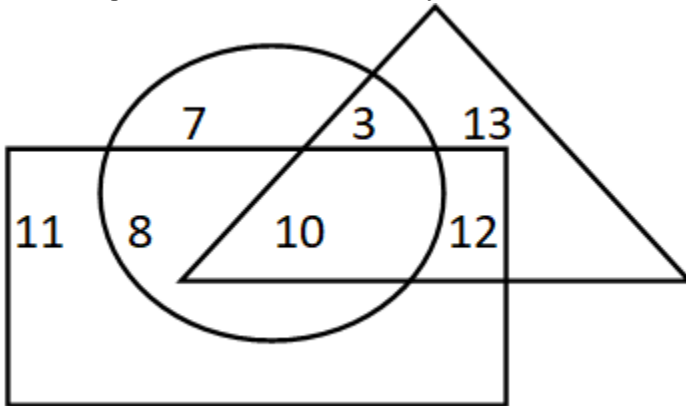
10th Class Intelligence Questions (IQ) Past Paper

D.



Answer: B

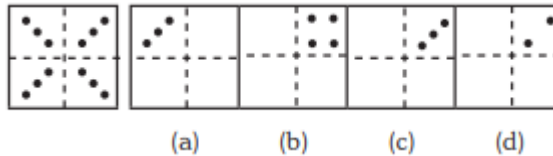
14. If triangle represents Women, rectangle represents Doctors and circle represents Lawyers. Then which number represents Women that are Lawyer but not Doctor?



- A. 10
- B. 12
- C. 8
- D. 3

Answer: D

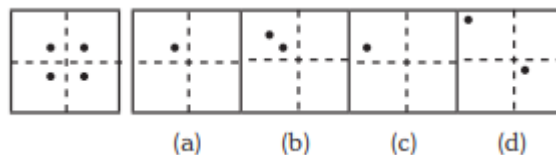
15.



- A. Only C
- B. Only D
- C. Both C & D
- D. None of these

Answer: A

16.

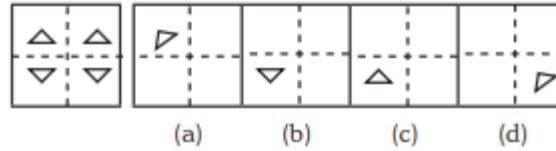


- A. Only A
- B. Both A and B
- C. Only C
- D. Only D

Answer: A

10th Class Intelligence Questions (IQ) Past Paper

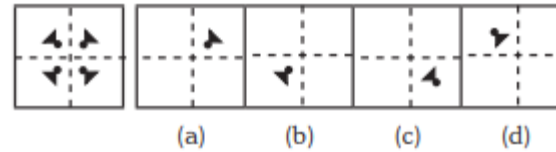
17.



- A. Option B
- B. Option A
- C. Both A & C
- D. Only D

Answer: A

18.



- A. Only A
- B. B
- C. C
- D. D

Answer: A

19. 3 pipes A, B and C can fill a tank in 30 minutes, 40 minutes, and 120 minutes, respectively. If all the pipes are opened together, how much time is required to fill the tank?

- A. 12 minutes
- B. 15 minutes
- C. 18 minutes
- D. 20 minutes

Answer: B

20. 3 pipes can fill a bucket in 20 minutes, 30 minutes and 60 minutes, respectively. If all the pipes are opened for 5 minutes what percentage of the tank will be filled.

- A. 50%
- B. 60%
- C. 75%
- D. 100%

Answer: A

21. There are three pipes connected to a tank. The first two can fill the tank in 20 minutes and 30 minutes, respectively. The third pipe can empty the entire tank in 5 minutes. If all the pipes are opened simultaneously, what time will it take to empty the tank?

- A. 8.55 minutes
- B. 8.56 minutes
- C. 8.57 minutes
- D. 8.58 minutes

Answer: C

22. 2 pipes can empty a tank in 70 minutes and 140 minutes, respectively. If a third pipe can fill the tank in 7 minutes, find the time required to fill the tank if all the pipes are opened simultaneously.

- A. 7.23 minutes
- B. 8.23 minutes
- C. 8.57 minutes
- D. 8.88 minutes

10th Class Intelligence Questions (IQ) Past Paper

Answer: B

23. A mixture containing 20% milk is mixed with another mixture containing 60% milk in the ratio 8 : 13. Find the percentage of milk in the new mixture.

- A. 37.14%
- B. 36.65%
- C. 35.57%
- D. 34.24%

Answer:A

24. A mixture containing 66% of acid is mixed with another mixture containing 35% of acid in the ratio 2 : 5. Find the percentage of acid in the mixture formed.

- A. 45%
- B. 46%
- C. 47%
- D. 48%

Answer: B

25. Introducing a woman, a man said, “Her husband is the only son of my father”. How is that woman related to the man?

- A. Husband
- B. Sister
- C. Wife
- D. Mother

Answer: C

26. Q’s mother is the sister of P and daughter of S. A is the son of P and Brother of H. G is the father of H. How is S related to G?

- A. Nephew
- B. Son-in-law
- C. Grandfather
- D. Father-in-law

Answer: D

27. R is the son of A’s father’s sister. S is son of D, who is the mother of G and grandmother of A. H is the father of T and grandfather of R. D is wife of H. How is R related to D?

- A. Nephew
- B. Son
- C. Grandson
- D. Insufficient Data

Answer: C

28. Pointing towards a person a woman said to man, “His father is the only son of your mother”. How is the man related to that person?

- A. Brother
- B. Father
- C. Son
- D. Husband

Answer: B

29. Introducing a child, a woman said, “He is the son of my father’s only daughter”. How is that woman related to the child?

10th Class Intelligence Questions (IQ) Past Paper

- A. Mother
- B. Sister
- C. Wife
- D. Daughter

Answer: A

30. HSNT : EPKQ :: DTHL : ?

- A. ABCD
- B. UEJM
- C. WXYZ
- D. AQEI

Answer: D

31. Umbriel : Uranus :: Janus : ?

- A. Jupiter
- B. Mars
- C. Uranus
- D. Saturn

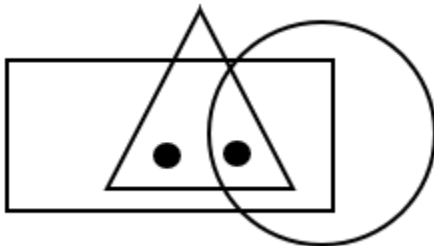
Answer: D

32. Kurnool : Andhra Pradesh :: Aizawl : ?

- A. Nagaland
- B. Meghalaya
- C. West Bengal
- D. Mizoram

Answer: D

33. Identify the figure which satisfies the same condition of placement of dots as in given figure.

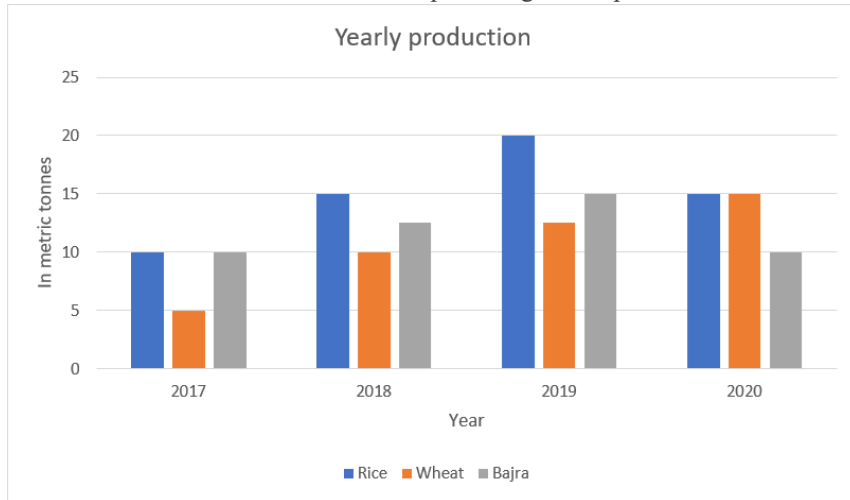


- A.
- B.
- C.
- D.

Answer: C

10th Class Intelligence Questions (IQ) Past Paper

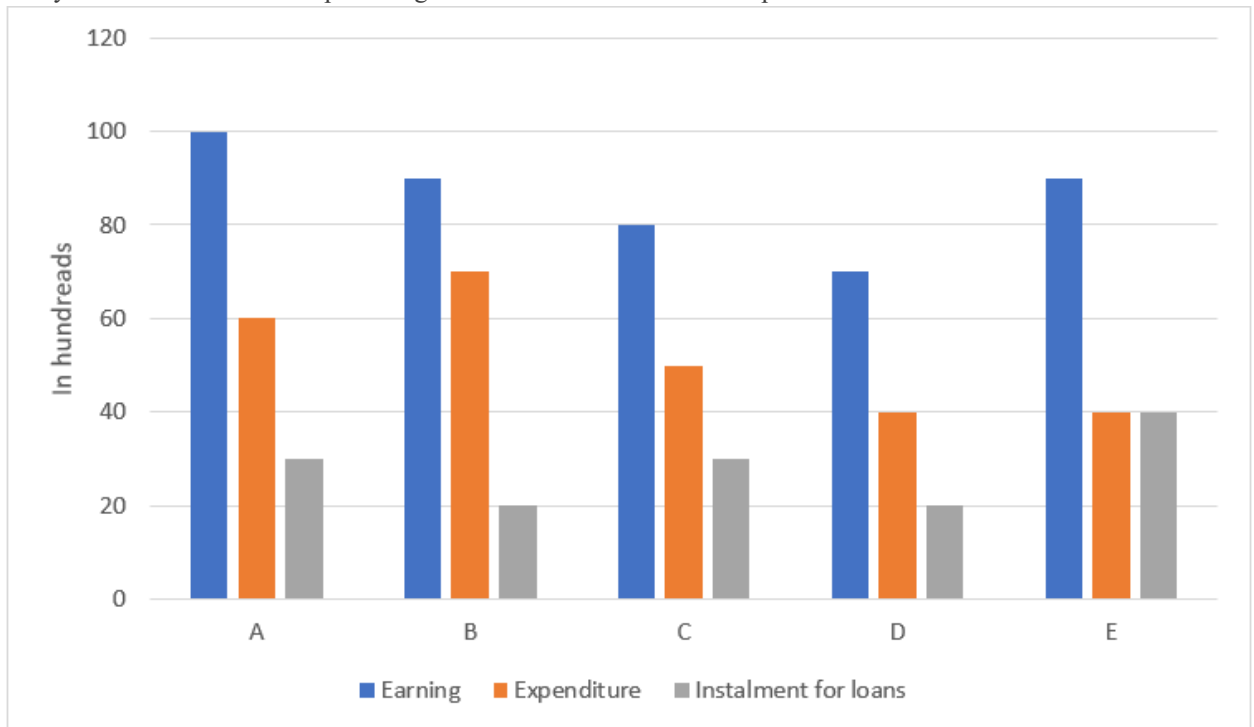
34. Production of wheat in 2019 and 2020 is what percentage of its production in 2018 and 2017?



- A. 200%
- B. 183.33%
- C. 150%
- D. 133.33%

Answer: B

35. Study the table and find what percentage of A's income is utilised in expenditure?



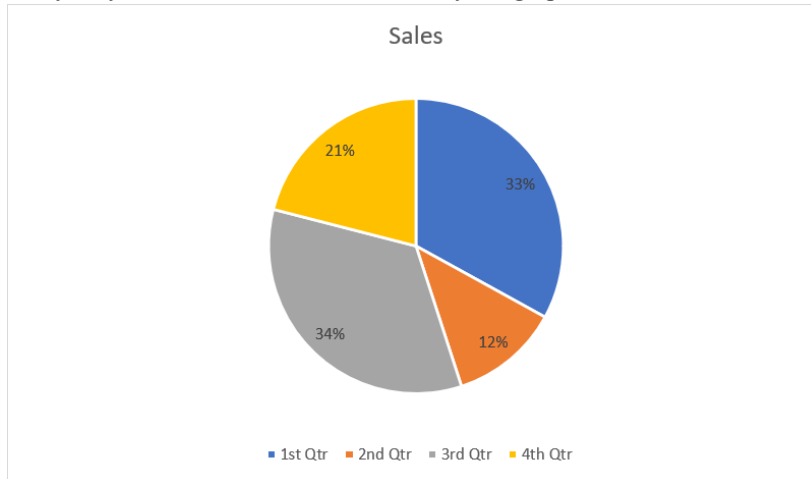
The chart represents monthly incomes of A, B, C, D and E.

- A. 100%
- B. 40%
- C. 60%
- D. 70%

10th Class Intelligence Questions (IQ) Past Paper

Answer: C

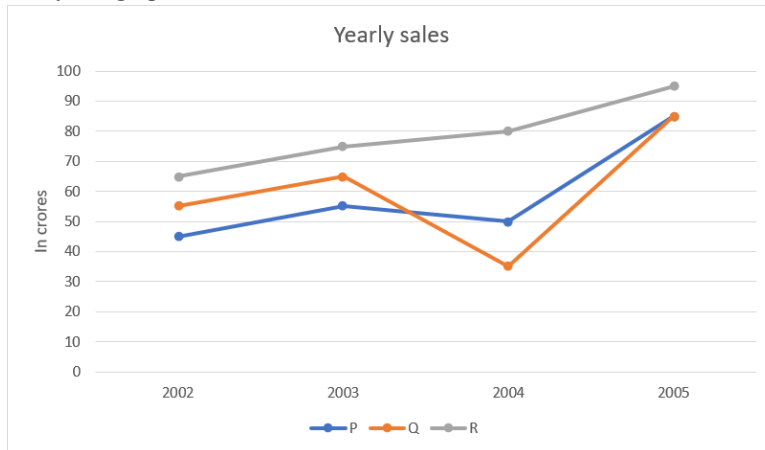
36. The yearly sales were 2,36,250 units, study the graph and find the sales in 3rd quarter.



- A. 83025 units
- B. 80325 units
- C. 82035 units
- D. 82503 units

Answer: B

37. Study the graph and find what is the difference between maximum and minimum sales of p.



- A. 40 crores
- B. 45 crores
- C. 50 crores
- D. 60 crores

Answer: A

38. In a certain code "CODE" is written as "DPEF". How is "DEFENCE" is written in that code?

- A. KWMCJFL
- B. ELDFSAP
- C. EFGFODF
- D. HRAOSCV

Answer: C

10th Class Intelligence Questions (IQ) Past Paper

39. Find the odd one out from the given set of numbers: 14, 28, 35, 46, 56, 84

- A. 56
- B. 84
- C. 35
- D. 46

Answer: D

40. Find odd one out from the given jumbled words: LNUAIMMIU, ELEST, OPERPC, NMKOYE, INCKLE

- A. NMKOYE
- B. OPERPC
- C. INCKLE
- D. ELEST

Answer: A

41. Find the odd one out.

- A. BEK
- B. CFL
- C. MPS
- D. GJP

Answer: C

42. In a certain code “564” means “study very hard”, “736” means “hard work pays” and “423” means “study and work”. Which of the following is the code for “work”?

- A. 5
- B. 3
- C. 6
- D. 4

Answer: B

43. If ‘white’ is called ‘yellow’, ‘yellow’ is called ‘blue’, ‘blue’ is called ‘red’, ‘red’ is called ‘black’, ‘black’ is called ‘violet’ and ‘violet’ is called ‘green’, then what would be the colour of light emitting from bulb?

- A. Blue
- B. Red
- C. Yellow
- D. Black

Answer: A

44. If the letters of the word “PRODUCT” are arranged alphabetically, then which letter would be farthest from the second letter of word?

- A. T
- B. R
- C. U
- D. P

Answer: C

45. Milly introduced a boy as the son of the only daughter of the mother of her maternal uncle. How is Milly related to that boy?

- A. Nephew
- B. Son
- C. Brother
- D. Sister

Answer: D

10th Class Intelligence Questions (IQ) Past Paper

46. If 'A&B' means A is father of B, 'A*B' means A is brother of B, 'A\$B' means A is mother of B then which of the following is correct about K\$T&M?

- A. M is brother of T
- B. T is son of K
- C. M is father of T
- D. K is mother of M

Answer: B

47. Ankita's younger brother Bobby is older than Nilu. Shweta is younger than Rahul but elder than Ankita. Who is the eldest?

- A. Rahul
- B. Shweta
- C. Ankita
- D. Bobby

Answer: A

48. How many even numbers are there in the following series of numbers, each of which is immediately preceded by an odd number, but not immediately followed by an even number?

"6 2 8 9 1 3 4 5 7 5 8 9 7 9 10 8 1 4 9 2 6"

- A. 4
- B. 3
- C. 2
- D. 1

Answer: B

49. ADLK : CFNM :: GRSP : ?

- A. WXYZ
- B. GHJK
- C. ABCD
- D. ITUR

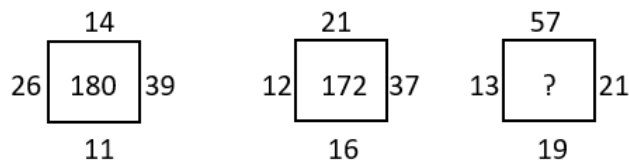
Answer: D

50. Pointing towards a person a woman said to man, "His father is the only son of your mother". How is the man related to that person?

- A. Husband
- B. Son
- C. Father
- D. Brother

Answer: C

51. Find the correct alternative which will replace the question mark?

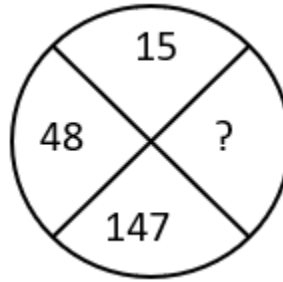


- A. 107
- B. 220
- C. 285
- D. 164

Answer: B

10th Class Intelligence Questions (IQ) Past Paper

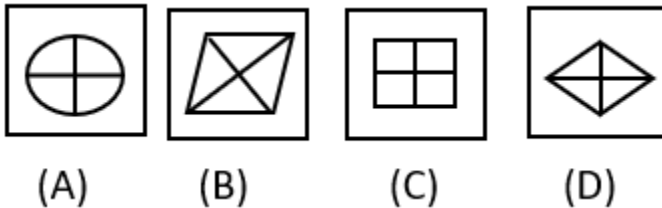
52. Find the correct alternative which will replace the question mark?



- A. 444
- B. 445
- C. 446
- D. 447

Answer: A

53. Choose the figure which is different from the rest?



- A. Fig A
- B. Fig B
- C. Fig C
- D. Fig D

Answer: A

54. A cage had 15 birds. All but seven manages to escape. How many birds remain?

- A. 7
- B. 12
- C. 15
- D. 8

Answer: A

55. Find the angle between minute hand and hour hand at 6:30 AM

- A. 25°
- B. 22.5°
- C. 15°
- D. None of these

Answer: C

56. Find the angle between minute hand and hour hand at 11:50 AM

- A. 55°
- B. 22.5°
- C. 15°
- D. None of these

Answer: A

10th Class Intelligence Questions (IQ) Past Paper

57. Find the angle between minute hand and hour hand at 4:20 AM

- A. 10°
- B. 12.5°
- C. 15°
- D. None of these

Answer: A

58. Find the angle between minute hand and hour hand at 1:40 AM

- A. 180°
- B. 190°
- C. 175°
- D. None of these

Answer: B

59. Find the angle between minute hand and hour hand at 10:10 AM

- A. 245°
- B. 195°
- C. 175°
- D. None of these

Answer: A

60. If 14th October 2005 is Friday then which day is 14th October 2006?

- A. Tuesday
- B. Saturday
- C. Thursday
- D. Friday

Answer: B

61. If today is Monday then which day of the week is after 59 days.

- A. Tuesday
- B. Wednesday
- C. Thursday
- D. Friday

Answer: B

62. If 14th October 2005 is Friday then which day is 14th October 2009?

- A. Tuesday
- B. Wednesday
- C. Thursday
- D. Friday

Answer: B

63. If 2nd June 2012 is Saturday then which day is 7th July 2012?

- A. Tuesday
- B. Wednesday
- C. Thursday
- D. Saturday

Answer: D

10th Class Intelligence Questions (IQ) Past Paper

64. Either Sam is ill, or he is drunk.

- A. Sam is ill.
- B. Sam is not ill.
- C. Sam is drunk.
- D. Sam is not drunk.

- A. AB
- B. DA
- C. AC
- D. CD

Answer: B

65. Whenever Ram hears of a tragedy, he loses sleep.

- A. Ram heard of a tragedy.
- B. Ram did not hear of a tragedy.
- C. Ram lost sleep.
- D. Ram did not lose sleep.

- A. CA
- B. BD
- C. DB
- D. AD

Answer: C

66. Either the train is late, or it has derailed.

- A. The train is late.
- B. The train is not late.
- C. The train is derailed.
- D. The train is not derailed.

- A. AB
- B. DB
- C. CA
- D. BC

Answer: D

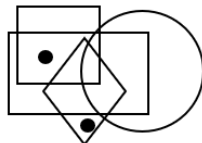
67. When I read a horror story I have a nightmare.

- A. I read a story.
- B. I did not read a horror story.
- C. I did not have a nightmare.
- D. I had a nightmare.

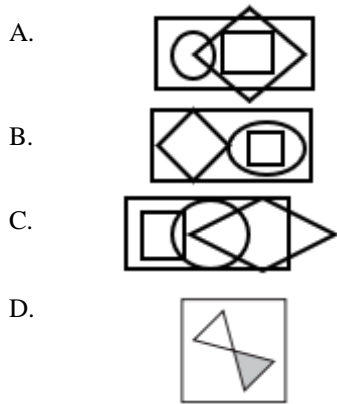
- A. CB
- B. AD
- C. BC
- D. AC

Answer: A

68. Identify the figure which satisfies the same condition of placement of dots as in given figure.



10th Class Intelligence Questions (IQ) Past Paper



Answer: C

69. YX, UTS, ONML, ?

- A. FEDCB
- B. GFEDC
- C. IHGFE
- D. HGFED

Answer: B

70. DA, HE, LI, ? TN

- A. PJ
- B. PT
- C. PM
- D. PK

Answer: A

71. B E I N T ?

- A. X
- B. Y
- C. A
- D. Z

Answer: C

72. AZ, CX, EV, ?

- A. HT
- B. HU
- C. GS
- D. GT

Answer: D

73. D9Y, J27S, P81M, V243G, ?

- A. A324B
- B. C729B
- C. B729A
- D. A729B

Answer: C

10th Class Intelligence Questions (IQ) Past Paper

74. BCFG, JKNO, RSVW, ?

- A. ZADE
- B. HIKL
- C. STUX
- D. MNPQ

Answer: A

75. CIM, HNR, MSW, ?

- A. SXA
- B. UYB
- C. RXB
- D. ZEH

Answer: C

76. 2, 3, 6, 7, 14, 15, ?

- A. 16
- B. 30
- C. 31
- D. 32

Answer: B

77. 3120, ?, 122, 23, 4

- A. 488
- B. 621
- C. 610
- D. 732

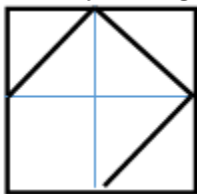
Answer: B

78. 0, 5, 60, 615, ?

- A. 6030
- B. 6170
- C. 6130
- D. 6000

Answer: C

79. Identify the figure which completes the pattern.



A.



B.



C.

10th Class Intelligence Questions (IQ) Past Paper

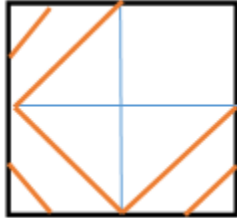


D.



Answer: C

80. Identify the figure which completes the pattern.



A.



B.



C.

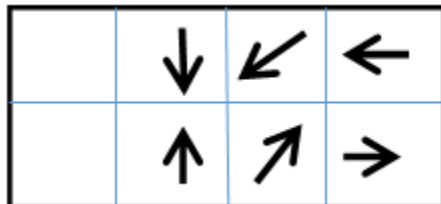


D.



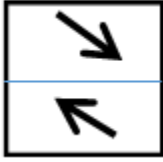
Answer: B

81. Identify the figure which completes the pattern.

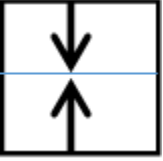


A.

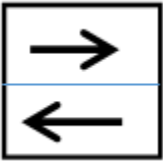
10th Class Intelligence Questions (IQ) Past Paper



B.



C.



D.



Answer: A

Direction: (Qs. 82-87): Study the following information and answer the questions given below:

M, N, P, R, T, W, F and H are sitting around a circle facing the centre. P is third to the left of M and second to the right of T. N is second to the right of P. R is second to the right of W, who is second to the right of M. F is not an immediate neighbour of P.

82. Who is to the immediate right of P?

- A. H
- B. F
- C. R
- D. Data inadequate
- E. None of these

Answer: A

83. Who is to the immediate right of H?

- A. R
- B. F
- C. M
- D. Data inadequate
- E. None of these

Answer: E

84. Who is to the immediate left of R?

- A. P
- B. H
- C. W
- D. T

10th Class Intelligence Questions (IQ) Past Paper

E. Data inadequate

Answer: D

85. Who is third to the right of H?

A. T

B. W

C. R

D. F

E. Data inadequate

Answer: D

86. Who is second to the right of F?

A. M

B. R

C. T

D. Data inadequate

E. None of these

Answer: C

87. In which of the following is the first person sitting in between the second and the third person?

A. NHM

B. PHN

C. TRP

D. TWF

E. None of these

Answer: A

88. If the sum of two numbers is 35 and their difference is 7, what is the larger number?

A. 14

B. 21

C. 28

D. 35

Answer: C

89. A train travels at a speed of 80 km/h for the first half of its journey and then at a speed of 60 km/h for the second half. What is its average speed for the whole journey?

A. 64 km/h

B. 68 km/h

C. 72 km/h

D. 76 km/h

Answer: A

90. A store is offering a 20% discount on all items. If the original price of an item is \$80, what is the sale price?

A. \$16

B. \$20

C. \$64

D. \$80

Answer: C

91. In how many ways can the letters of the word "APPLE" be arranged?

A. 60

B. 120

10th Class Intelligence Questions (IQ) Past Paper

C. 240

D. 720

Answer: B

92. A committee of 5 people is to be formed from a group of 8. How many different committees can be formed?

A. 8

B. 10

C. 56

D. 120

Answer: C

93. In how many ways can 3 boys and 4 girls be seated in a row if the boys and girls are to alternate?

A. 24

B. 48

C. 144

D. 288

Answer: C

94. How many 3-digit numbers can be formed using the digits 1, 2, 3, and 4 without repetition?

A. 6

B. 12

C. 18

D. 24

Answer: D

95. A man is facing towards west and turns through 45° clockwise, again 180° clockwise and then turns through 270° anti-clockwise. In which direction is he

facing now?

A. West

B. North-west

C. South

D. South-west

E. None of these

Answer: D

96. I am facing east. I turn 100° in the clockwise direction and then 145° in the anti clock wise direction. Which direction am I facing now?

A. East

B. North-east

C. North

D. South-west

E. None of these

Answer: B

97. A river flows from west to east and on the way turns left and goes in a semi-circle round a hillock, and then turns left at right angle. In which direction is the river finally flowing?

A. West

B. East

C. North

D. South

E. None of these

10th Class Intelligence Questions (IQ) Past Paper

Answer: B

98. You go north, turn right, then right again and then go to the left. In which direction are you now?
- A. North
 - B. South
 - C. East
 - D. West
 - E. None of these

Answer: C

99. Kunal walks 10 kilometres towards North. From there, he walks 6 kilometres towards south. Then, he walks 3 kilometres towards east. How far and in which direction is he with reference to his starting point?
- A. 5 kilometres West
 - B. 5 kilometres North-east
 - C. 7 kilometres East
 - D. 7 kilometres West
 - E. None of these

Answer: E

100. Rohan walks a distance of 3 km towards North, then turns to his left and walks for 2 km. He again turns left and walks for 3 km. At this point he turns to his left and walks for 3 km. How many kilometres is he from the starting point?
- A. 1km
 - B. 2km
 - C. 3km
 - D. 5 km
 - E. None of these

Answer: A

11th Class Intelligence Questions (IQ) Past Paper

1. A train travels at a speed of 80 km/h for the first half of its journey and then at a speed of 60 km/h for the second half. What is its average speed for the whole journey?
- A. 64 km/h
 - B. 68 km/h
 - C. 72 km/h
 - D. 76 km/h

Answer: A

2. A store is offering a 20% discount on all items. If the original price of an item is \$80, what is the sale price?
- A. \$16
 - B. \$20
 - C. \$64
 - D. \$80

Answer: C

3. In how many ways can the letters of the word "APPLE" be arranged?
- A. 60
 - B. 120
 - C. 240
 - D. 720

Answer: B

4. A committee of 5 people is to be formed from a group of 8. How many different committees can be formed?
- A. 8
 - B. 10
 - C. 56
 - D. 120

Answer: C

5. In how many ways can 3 boys and 4 girls be seated in a row if the boys and girls are to alternate?
- A. 24
 - B. 48
 - C. 144
 - D. 288

Answer: C

6. How many 3-digit numbers can be formed using the digits 1, 2, 3, and 4 without repetition?
- A. 6
 - B. 12

11th Class Intelligence Questions (IQ) Past Paper

C. 18

D. 24

Answer: D

7. A man is facing towards west and turns through 45° clockwise, again 180° clockwise and then turns through 270° anti-clockwise. In which direction is he facing now?

A. West

B. North-west

C. South

D. South-west

E. None of these

Answer: D

8. I am facing east. I turn 100° in the clockwise direction and then 145° in the anti clockwise direction. Which direction am I facing now?

A. East

B. North-east

C. North

D. South-west

E. None of these

Answer: B

9. A river flows from west to east and on the way turns left and goes in a semi-circle round a hillock, and then turns left at right angle. In which direction is the river finally flowing?

A. West

B. East

C. North

D. South

E. None of these

Answer: B

10. You go north, turn right, then right again and then go to the left. In which direction are you now?

A. North

B. South

C. East

D. West

E. None of these

Answer: C

11th Class Intelligence Questions (IQ) Past Paper

11. Kunal walks 10 kilometres towards North. From there, he walks 6 kilometres towards south. Then, he walks 3 kilometres towards east. How far and in which direction is he with reference to his starting point?

- A. 5 kilometres West
- B. 5 kilometres North-east
- C. 7 kilometres East
- D. 7 kilometres West
- E. None of these

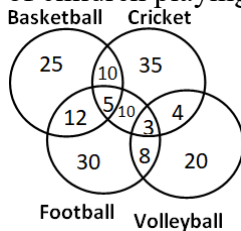
Answer: E

12. Rohan walks a distance of 3 km towards North, then turns to his left and walks for 2 km. He again turns left and walks for 3 km. At this point he turns to his left and walks for 3 km. How many kilometres is he from the starting point?

- A. 1km
- B. 2km
- C. 3km
- D. 5 km
- E. None of these

Answer: A

13. The following diagram shows the number of children playing Basketball, Cricket, Football and Volleyball. If the total number of children is 400, what is the percentage of children playing at least two games?



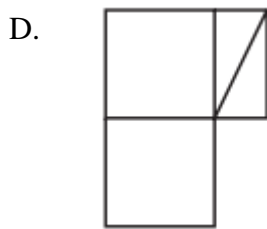
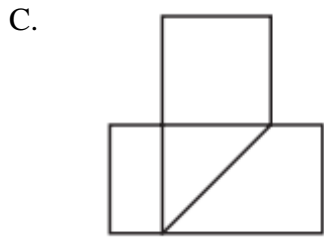
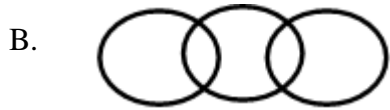
- A. 8
- B. 6
- C. 9.25
- D. 13

Answer: D

14. Which of the following diagram correctly represents the relationship among Teacher, Scientist and Graduate?

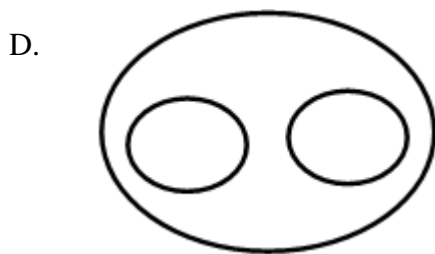
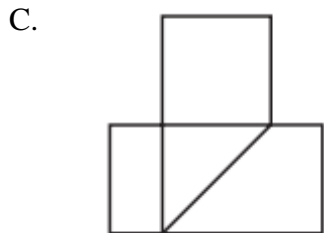
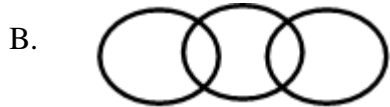
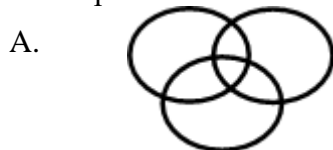


11th Class Intelligence Questions (IQ) Past Paper



Answer: A

15. Which of the following diagram depicts the relation among Currency, Dinar and Rupee.



11th Class Intelligence Questions (IQ) Past Paper

Answer: D

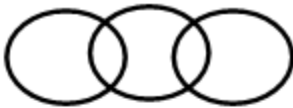
16. If triangle represents women, rectangle represents educated person and circle represent government jobs. Then which number represents educated women who are not in government job?

- A. 10
- B. 12
- C. 8
- D. 3

Answer: B

17. Which of the following figures shows relation between Trains, Goods and Truck?

a)



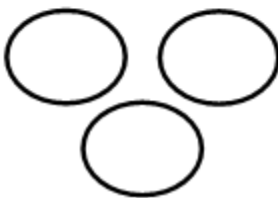
b)



c)



d)

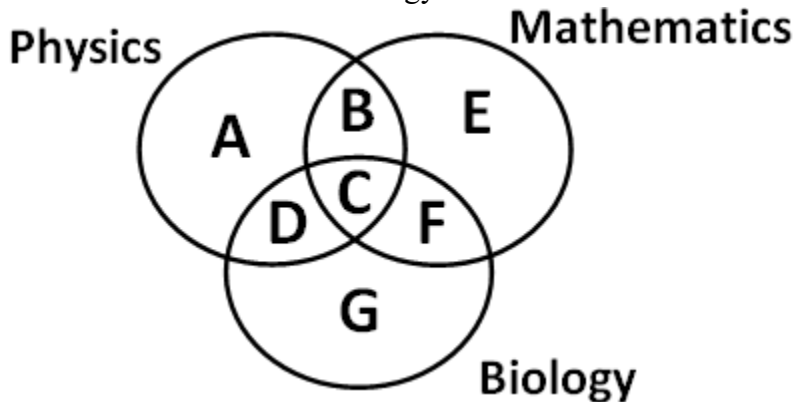


- A. Only a)
- B. Both a & d
- C. Only c)
- D. None of Above

Answer: A

11th Class Intelligence Questions (IQ) Past Paper

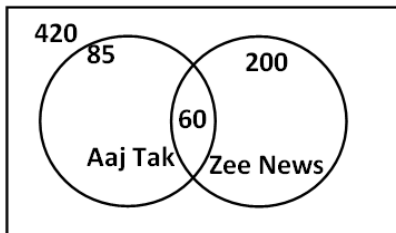
18. Which of the region in the following figure represents students who study both Physics and Mathematics but not Biology?



- A. $B+C+D+F$
- B. C
- C. $A+E$
- D. B

Answer: D

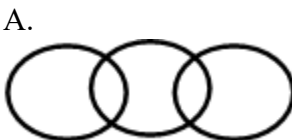
19. From the figure given below, determine the number of people who did not watch any news channel.



- A. 135
- B. 75
- C. 195
- D. 175

Answer: C

20. Which of the following figures correctly represents the relation between Machine, Lathe and Thermodynamics?

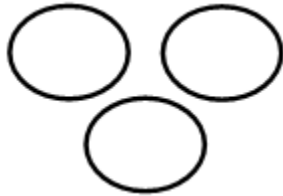


C.

11th Class Intelligence Questions (IQ) Past Paper

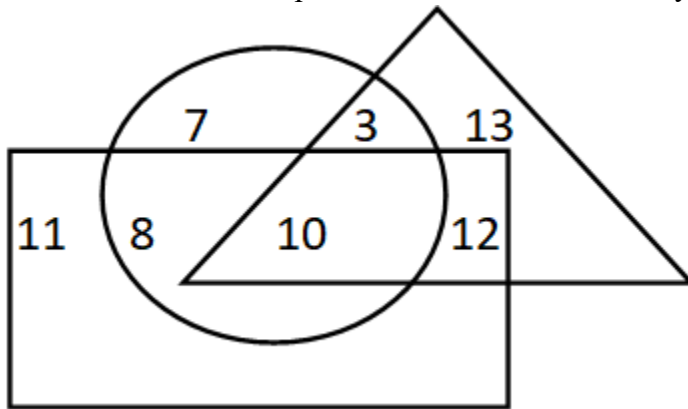


D.



Answer: B

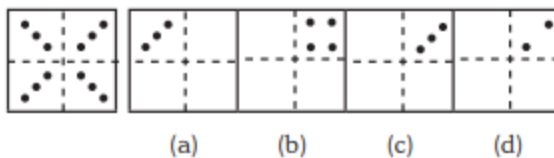
21. If triangle represents Women, rectangle represents Doctors and circle represents Lawyers. Then which number represents Women that are Lawyer but not Doctor?



- A. 10
- B. 12
- C. 8
- D. 3

Answer: D

22.

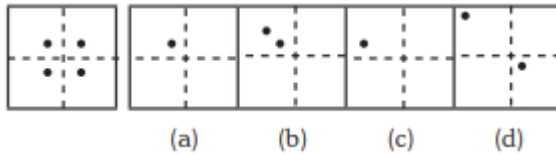


- A. Only C
- B. Only D
- C. Both C & D
- D. None of these

Answer: A

11th Class Intelligence Questions (IQ) Past Paper

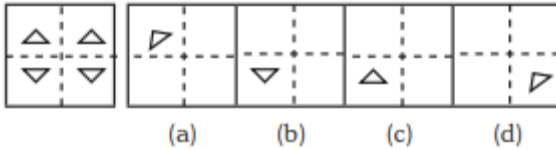
23.



- A. Only A
- B. Both A and B
- C. Only C
- D. Only D

Answer: A

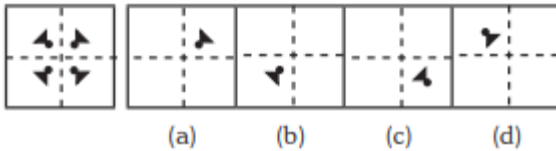
24.



- A. Option B
- B. Option A
- C. Both A & C
- D. Only D

Answer: A

25.



- A. Only A
- B. B
- C. C
- D. D

Answer: A

26. 3 pipes A, B and C can fill a tank in 30 minutes, 40 minutes, and 120 minutes, respectively. If all the pipes are opened together, how much time is required to fill the tank?

- A. 12 minutes
- B. 15 minutes
- C. 18 minutes
- D. 20 minutes

Answer: B

27. 3 pipes can fill a bucket in 20minutes, 30 minutes and 60 minutes, respectively. If all the pipes are opened for 5 minutes what percentage of the tank will be filled.

- A. 50%
- B. 60%
- C. 75%
- D. 100%

11th Class Intelligence Questions (IQ) Past Paper

Answer: A

28. There are three pipes connected to a tank. The first two can fill the tank in 20 minutes and 30 minutes, respectively. The third pipe can empty the entire tank in 5 minutes. If all the pipes are opened simultaneously, what time will it take to empty the tank?
- A. 8.55 minutes
 - B. 8.56 minutes
 - C. 8.57 minutes
 - D. 8.58 minutes

Answer: C

29. 2 pipes can empty a tank in 70 minutes and 140 minutes, respectively. If a third pipe can fill the tank in 7 minutes, find the time required to fill the tank if all the pipes are opened simultaneously.
- A. 7.23 minutes
 - B. 8.23 minutes
 - C. 8.57 minutes
 - D. 8.88 minutes

Answer: B

30. A mixture containing 20% milk is mixed with another mixture containing 60% milk in the ratio 8 : 13. Find the percentage of milk in the new mixture.
- A. 37.14%
 - B. 36.65%
 - C. 35.57%
 - D. 34.24%

Answer:A

31. A mixture containing 66% of acid is mixed with another mixture containing 35% of acid in the ratio 2 : 5. Find the percentage of acid in the mixture formed.
- A. 45%
 - B. 46%
 - C. 47%
 - D. 48%

Answer: B

32. Introducing a woman, a man said, "Her husband is the only son of my father". How is that woman related to the man?
- A. Husband
 - B. Sister
 - C. Wife
 - D. Mother

Answer: C

11th Class Intelligence Questions (IQ) Past Paper

33. Q's mother is the sister of P and daughter of S. A is the son of P and Brother of H. G is the father of H. How is S related to G?

- A. Nephew
- B. Son-in-law
- C. Grandfather
- D. Father-in-law

Answer: D

34. R is the son of A's father's sister. S is son of D, who is the mother of G and grandmother of A. H is the father of T and grandfather of R. D is wife of H. How is R related to D?

- A. Nephew
- B. Son
- C. Grandson
- D. Insufficient Data

Answer: C

35. Pointing towards a person a woman said to man, "His father is the only son of your mother". How is the man related to that person?

- A. Brother
- B. Father
- C. Son
- D. Husband

Answer: B

36. Introducing a child, a woman said, "He is the son of my father's only daughter". How is that woman related to the child?

- A. Mother
- B. Sister
- C. Wife
- D. Daughter

Answer: A

37. HSNT : EPKQ :: DTHL : ?

- A. ABCD
- B. UEJM
- C. WXYZ
- D. AQEI

Answer: D

38. Umbriel : Uranus :: Janus : ?

- A. Jupiter
- B. Mars

11th Class Intelligence Questions (IQ) Past Paper

- C. Uranus
- D. Saturn

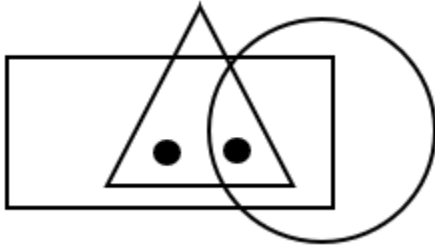
Answer: D

39. Kurnool : Andhra Pradesh :: Aizawl : ?

- A. Nagaland
- B. Meghalaya
- C. West Bengal
- D. Mizoram

Answer: D

40. Identify the figure which satisfies the same condition of placement of dots as in given figure.

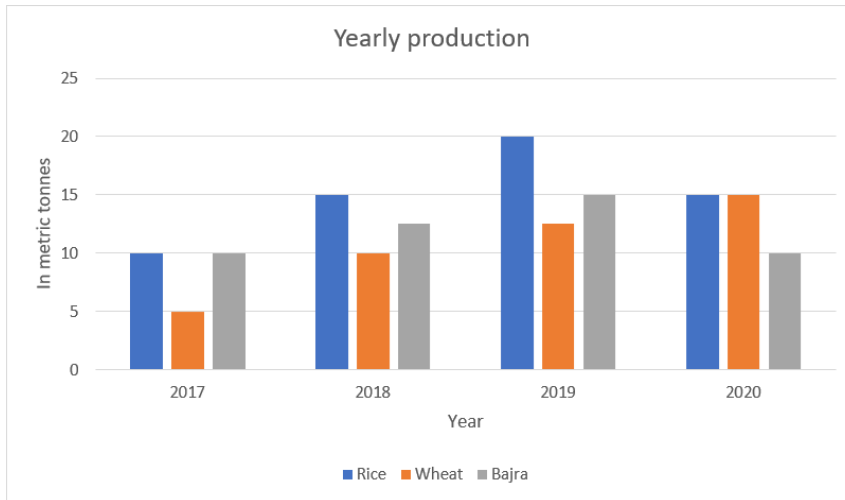


- A.
- B.
- C.
- D.

Answer: C

11th Class Intelligence Questions (IQ) Past Paper

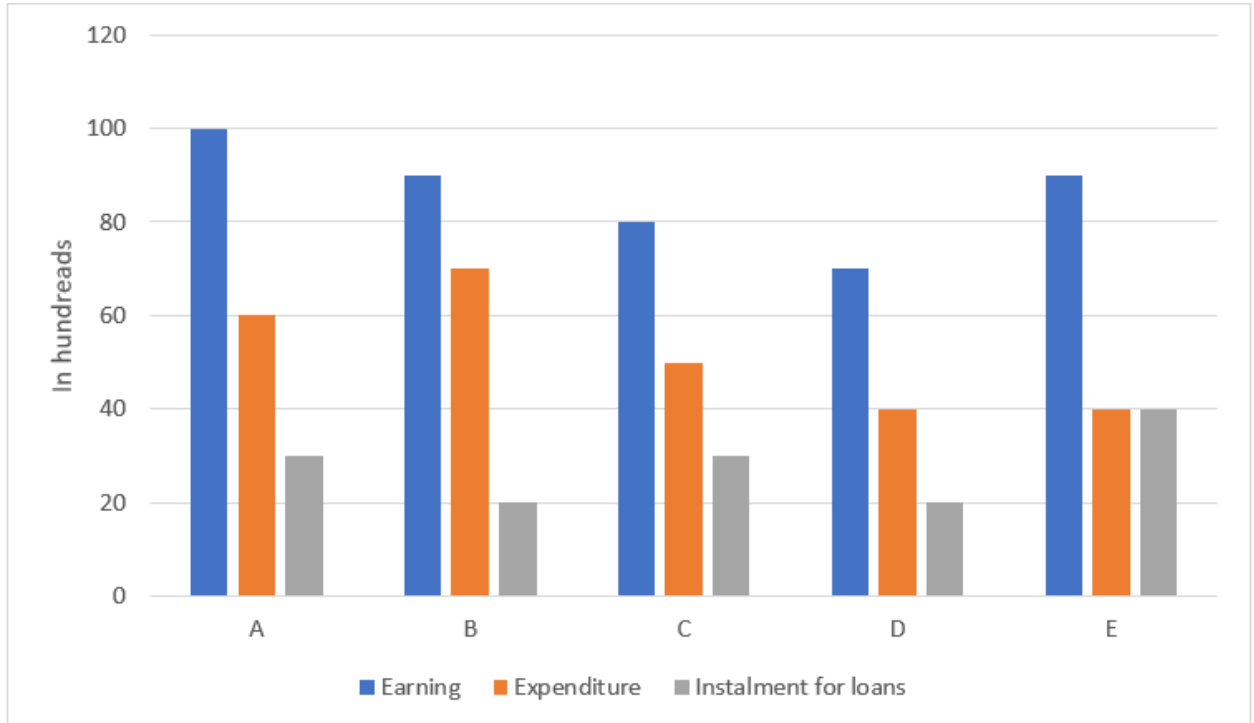
41. Production of wheat in 2019 and 2020 is what percentage of its production in 2018 and 2017?



- A. 200%
- B. 183.33%
- C. 150%
- D. 133.33%

Answer: B

42. Study the table and find what percentage of A's income is utilised in expenditure?



The chart represents monthly incomes of A, B, C, D and E.

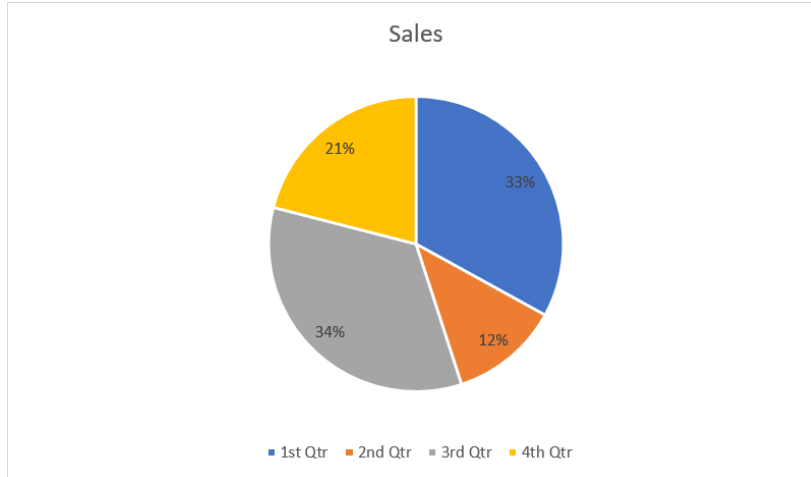
- A. 100%

11th Class Intelligence Questions (IQ) Past Paper

- B. 40%
- C. 60%
- D. 70%

Answer: C

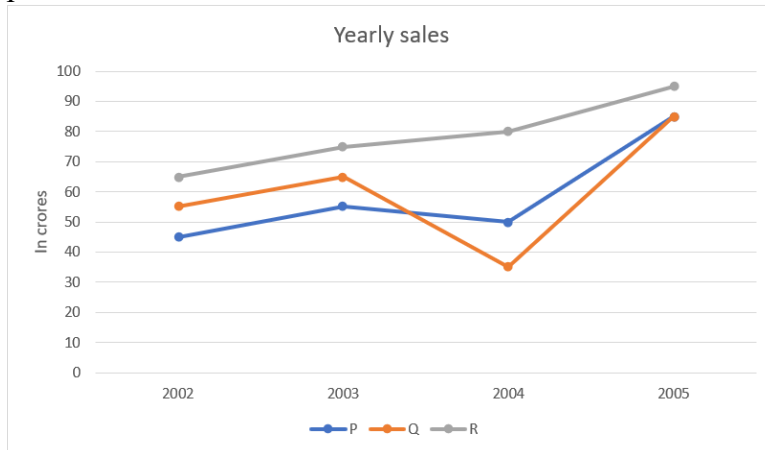
43. The yearly sales were 2,36,250 units, study the graph and find the sales in 3rd quarter.



- A. 83025 units
- B. 80325 units
- C. 82035 units
- D. 82503 units

Answer: B

44. Study the graph and find what is the difference between maximum and minimum sales of p.



- A. 40 crores
- B. 45 crores
- C. 50 crores
- D. 60 crores

Answer: A

11th Class Intelligence Questions (IQ) Past Paper

45. In a certain code "CODE" is written as "DPEF". How is "DEFENCE" is written in that code?

- A. KWMCJFL
- B. ELDFSAP
- C. EFGFODF
- D. HRAOSCV

Answer: C

46. Find the odd one out from the given set of numbers: 14, 28, 35, 46, 56, 84

- A. 56
- B. 84
- C. 35
- D. 46

Answer: D

47. Find odd one out from the given jumbled words: LNUAIMMIU, ELEST, OPERPC, NMKOYE, INCKLE

- A. NMKOYE
- B. OPERPC
- C. INCKLE
- D. ELEST

Answer: A

48. Find the odd one out.

- A. BEK
- B. CFL
- C. MPS
- D. GJP

Answer: C

49. In a certain code "564" means "study very hard", "736" means "hard work pays" and "423" means "study and work". Which of the following is the code for "work"?

- A. 5
- B. 3
- C. 6
- D. 4

Answer: B

50. If 'white' is called 'yellow', 'yellow' is called 'blue', 'blue' is called 'red', 'red' is called 'black', 'black' is called 'violet' and 'violet' is called 'green', then what would be the colour of light emitting from bulb?

- A. Blue

11th Class Intelligence Questions (IQ) Past Paper

- B. Red
- C. Yellow
- D. Black

Answer: A

51. If the letters of the word "PRODUCT" are arranged alphabetically, then which letter would be farthest from the second letter of word?

- A. T
- B. R
- C. U
- D. P

Answer: C

52. Milly introduced a boy as the son of the only daughter of the mother of her maternal uncle. How is Milly related to that boy?

- A. Nephew
- B. Son
- C. Brother
- D. Sister

Answer: D

53. If 'A&B' means A is father of B, 'A*B' means A is brother of B, 'A\$B' means A is mother of B then which of the following is correct about K\$T&M?

- A. M is brother of T
- B. T is son of K
- C. M is father of T
- D. K is mother of M

Answer: B

54. Ankita's younger brother Bobby is older than Nilu. Shweta is younger than Rahul but elder than Ankita. Who is the eldest?

- A. Rahul
- B. Shweta
- C. Ankita
- D. Bobby

Answer: A

55. How many even numbers are there in the following series of numbers, each of which is immediately preceded by an odd number, but not immediately followed by an even number?

"6 2 8 9 1 3 4 5 7 5 8 9 7 9 10 8 1 4 9 2 6"

- A. 4
- B. 3

11th Class Intelligence Questions (IQ) Past Paper

- C. 2
- D. 1

Answer: B

56. ADLK : CFNM :: GRSP : ?

- A. WXYZ
- B. GHJK
- C. ABCD
- D. ITUR

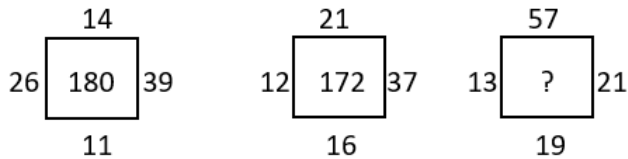
Answer: D

57. Pointing towards a person a woman said to man, "His father is the only son of your mother". How is the man related to that person?

- A. Husband
- B. Son
- C. Father
- D. Brother

Answer: C

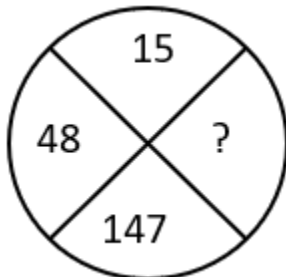
58. Find the correct alternative which will replace the question mark?



- A. 107
- B. 220
- C. 285
- D. 164

Answer: B

59. Find the correct alternative which will replace the question mark?

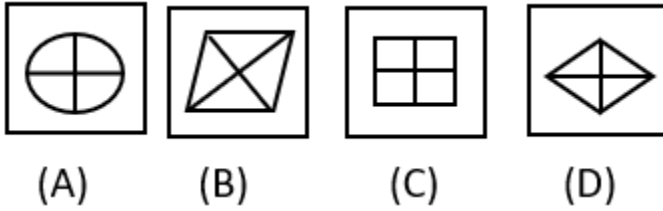


- A. 444
- B. 445
- C. 446
- D. 447

11th Class Intelligence Questions (IQ) Past Paper

Answer: A

60. Choose the figure which is different from the rest?



- (A) Fig A
- (B) Fig B
- (C) Fig C
- (D) Fig D

Answer: A

61. A cage had 15 birds. All but seven manages to escape. How many birds remain?

- A. 7
- B. 12
- C. 15
- D. 8

Answer: A

62. Find the angle between minute hand and hour hand at 6:30 AM

- A. 25°
- B. 22.5°
- C. 15°
- D. None of these

Answer: C

63. Find the angle between minute hand and hour hand at 11:50 AM

- A. 55°
- B. 22.5°
- C. 15°
- D. None of these

Answer: A

64. Find the angle between minute hand and hour hand at 4:20 AM

- A. 10°
- B. 12.5°
- C. 15°
- D. None of these

Answer: A

11th Class Intelligence Questions (IQ) Past Paper

65. Find the angle between minute hand and hour hand at 1:40 AM

- A. 180°
- B. 190°
- C. 175°
- D. None of these

Answer: B

66. Find the angle between minute hand and hour hand at 10:10 AM

- A. 245°
- B. 195°
- C. 175°
- D. None of these

Answer: A

67. If 14th October 2005 is Friday then which day is 14th

October 2006?

- A. Tuesday
- B. Saturday
- C. Thursday
- D. Friday

Answer: B

68. If today is Monday then which day of the week is

after 59 days.

- A. Tuesday
- B. Wednesday
- C. Thursday
- D. Friday

Answer: B

69. If 14th October 2005 is Friday then which day is 14th

October 2009?

- A. Tuesday
- B. Wednesday
- C. Thursday
- D. Friday

Answer: B

70. If 2nd June 2012 is Saturday then which day is 7th

July 2012?

11th Class Intelligence Questions (IQ) Past Paper

- A. Tuesday
- B. Wednesday
- C. Thursday
- D. Saturday

Answer: D

71. Either Sam is ill, or he is drunk.

- A. Sam is ill.
- B. Sam is not ill.
- C. Sam is drunk.
- D. Sam is not drunk.

- A. AB
- B. DA
- C. AC
- D. CD

Answer: B

72. Whenever Ram hears of a tragedy, he loses sleep.

- A. Ram heard of a tragedy.
- B. Ram did not hear of a tragedy.
- C. Ram lost sleep.
- D. Ram did not lose sleep.

- A. CA
- B. BD
- C. DB
- D. AD

Answer: C

73. Either the train is late, or it has derailed.

- A. The train is late.
- B. The train is not late.
- C. The train is derailed.
- D. The train is not derailed.

- A. AB
- B. DB
- C. CA
- D. BC

Answer: D

74. When I read a horror story I have a nightmare.

- A. I read a story.
- B. I did not read a horror story.
- C. I did not have a nightmare.

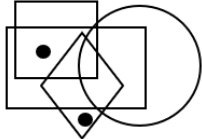
11th Class Intelligence Questions (IQ) Past Paper

D. I had a nightmare.

- A. CB
- B. AD
- C. BC
- D. AC

Answer: A

75. Identify the figure which satisfies the same condition of placement of dots as in given figure.



- A.
- B.
- C.
- D.

Answer: C

76. YX, UTS, ONML, ?

- A. FEDCB
- B. GFEDC
- C. IHGFE
- D. HGFED

Answer: B

77. DA, HE, LI, ? TN

- A. PJ
- B. PT
- C. PM
- D. PK

Answer: A

78. B E I N T ?

11th Class Intelligence Questions (IQ) Past Paper

- A. X
- B. Y
- C. A
- D. Z

Answer: C

79. AZ, CX, EV, ?

- A. HT
- B. HU
- C. GS
- D. GT

Answer: D

80. D9Y, J27S, P81M, V243G, ?

- A. A324B
- B. C729B
- C. B729A
- D. A729B

Answer: C

81. BCFG, JKNO, RSVW, ?

- A. ZADE
- B. HIKL
- C. STUX
- D. MNPQ

Answer: A

82. CIM, HNR, MSW, ?

- A. SXA
- B. UYB
- C. RXB
- D. ZEH

Answer: C

83. 2, 3, 6, 7, 14, 15, ?

- A. 16
- B. 30
- C. 31
- D. 32

Answer: B

84. 3120, ?, 122, 23, 4

- A. 488

11th Class Intelligence Questions (IQ) Past Paper

- B. 621
- C. 610
- D. 732

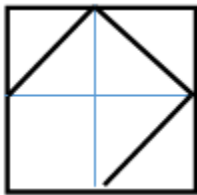
Answer: B

85. 0, 5, 60, 615, ?

- A. 6030
- B. 6170
- C. 6130
- D. 6000

Answer: C

86. Identify the figure which completes the pattern.



A.



B.



C.

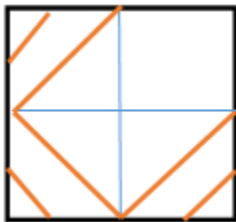


D.



Answer: C

87. Identify the figure which completes the pattern.



A.

11th Class Intelligence Questions (IQ) Past Paper



B.



C.

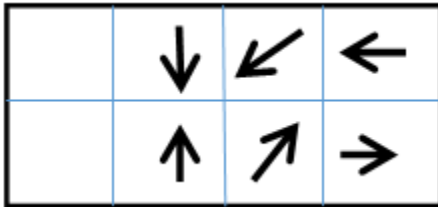


D.

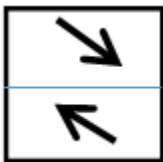


Answer: B

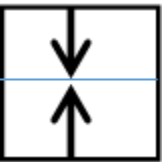
88. Identify the figure which completes the pattern.



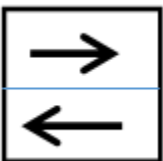
A.



B.

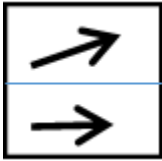


C.



11th Class Intelligence Questions (IQ) Past Paper

D.



Answer: A

89. If the sum of two numbers is 35 and their difference is 7, what is the larger number?

- A. 14
- B. 21
- C. 28
- D. 35

Answer: C

90. The probability of event equal to zero is called;

- A. Impossible event
- B. Sure event
- C. Unsure event

Answer: A

91. The probability that cannot exist among the following;

- A. -1.5
- B. 1
- C. 15%

Answer: A

92. A bag has 3 red balls and 5 green balls. If we take a ball from the bag, then what is the probability of getting red balls only?

- A. $\frac{3}{8}$
- B. $\frac{8}{3}$
- C. None of these

Answer: A

93. A die is thrown in the air. The probability of getting an even number is;

- A. $\frac{1}{2}$
- B. 3
- C. 6

Answer: A

94. A fish tank has 5 male fish and 8 female fish. The probability of fish taken out is a male fish:

- A. $\frac{5}{13}$
- B. $\frac{8}{13}$

11th Class Intelligence Questions (IQ) Past Paper

C. None of these

Answer: A

95. The surface area of a cube whose edge equals to 3cm is:

- A. 62 sq.cm
- B. 30 sq.cm
- C. 54 sq.cm
- D. 90 sq.cm

Answer: C

96. The volume of a hemisphere whose radius is r is:

- a. $\frac{4}{3} \pi r^3$
- b. $4\pi r^3$
- c. $2\pi r^3$
- d. $\frac{2}{3} \pi r^3$

Answer: D

97. If the radius of a cylinder is 4cm and height is 10cm, then the total surface area of a cylinder is:

- A. 440 sq.cm
- B. 352 sq.cm.
- C. 400 sq.cm
- D. 412 sq.cm

Answer: B


98. The curved surface area of a right circular cylinder of height 14 cm is 88 cm^2 . The diameter of the base is:

- A. 2 cm
- B. 3cm
- C. 4cm
- D. 6cm

Answer: a

99. Which Shape completes the larger square?

11th Class Intelligence Questions (IQ) Past Paper



- A.
- B.
- C.
- D.

Answer: C.

100. Which one comes next?



- A.
- B.
- C.

11th Class Intelligence Questions (IQ) Past Paper

D.



Answer: D

12th Class Intelligence Questions (IQ) Past Paper

1. Ecology is related to Environment in the same way as Histology is related to _____?

- A. Fossils
- B. History
- C. Tissues
- D. Hormones

Answer: B

2. Life is related to Death in the same way as Hope is related to _____?

- A. Sad
- B. Despair
- C. Pain
- D. Cry

Answer: B

3. Captain is related to Ship in the same way as Pilot is related to _____?

- A. Train
- B. Aeroplane
- C. Car
- D. Boat

Answer: B

4. Needle is related to Thread in the same way as Pen is related to _____?

- A. Ink
- B. Cap
- C. Paper
- D. Word

Answer: A

5. Wood is related to Carpenter in the same way as Shoe is related to _____?

- A. Sculptor
- B. Cobbler
- C. Chef
- D. Mason

Answer: B

6. Radical is related to Moderate in the same way as Revolution is related to _____?

- A. Change
- B. Chaos
- C. Peace
- D. Reformation

Answer: C

7. Mathematics is related to numbers in the same way as History is related to _____?

- A. People
- B. Events
- C. Dates

12th Class Intelligence Questions (IQ) Past Paper

D. Wars
Answer: B

8. Bag is related to Luggage in the same way as Ship is related to _____?

- A. Coal
- B. Stock
- C. Cargo
- D. Weight

Answer: C

9. Mirror is related to Reflection in the same way as Water is related to _____?

- A. Conduction
- B. Dispersion
- C. Immersion
- D. Refraction

Answer: D

10. What will comes next in the following series?

35 45 ? 65 75

- A. 55
- B. 80
- C. 47
- D. 84

Answer: A

11. If SKYLAND is coded as 7948312, then LAND is coded as _____

- A. 8312
- B. 7948
- C. 9483
- D. 8321
- E. None

Answer: A

12. If STRANGER is to 97524687, then ANGER is to _____

- A. 24687
- B. 26487
- C. 64287
- D. 26489
- E. 98462

Answer: A

13. Which one is different from the rest?

- A. Similar

12th Class Intelligence Questions (IQ) Past Paper

- B. Equivalent
- C. Like
- D. Same
- E. Distinguish

Answer: E

14. Which one is different from the rest?

- A. Fullback
- B. Fine leg
- C. Centre half
- D. Defender
- E. Half side

Answer: B

15. Which one is different from the rest?

- A. Tooth
- B. Spoon
- C. Plate
- D. Tray
- E. Knife

Answer: A

16. If SHOUT is to 81397 then HOT is to _____

- A. 137
- B. 237
- C. 731
- D. 813
- E. 318

Answer: A

17. Which one is different from the rest?

- A. Kiwi
- B. Sparrow
- C. Crow
- D. Eagle
- E. Parrot

Answer: A

18. Find out the odd man out?

- A. Cloth

12th Class Intelligence Questions (IQ) Past Paper

- B. Thin
- C. Colorful
- D. Glitter
- E. Bright

Answer: A

19. If RIVER is coded as 12345 and FEAVER is to 647345 then what stand for EAR

- A. 375
- B. 465
- C. 275
- D. 475
- E. 654

Answer: D

20. If SECRET is coded as 102807 then ERRECT is coded as _____

- A. 088027
- B. 088007
- C. 808027
- D. 088072
- E. 008827

Answer: A

21. If TOMORROW is to 56768869 then ROW is to _____

- A. 576
- B. 688
- C. 896
- D. 869

Answer: D

22. If the highest number is added to the first number and divided by the third number.

What will be the answer?

10 15 5

- A. 4
- B. 2
- C. 6
- D. 5

Answer: 5

23. What will comes next in the following series?

12th Class Intelligence Questions (IQ) Past Paper

D. 79

Answer: D

28. What will come next in the following series?

48 24 20 10 6 _____

A. 1

B. 0

C. -1

D. None of above

Answer: C

29. What will come next?

7+2-1 = H

22+6-5 = W

11+6-2 = ?

A. O

B. P

C. Q

D. W

Answer: A

30. Which one is different from the rest?

A. Sword

B. Knife

C. Fork

D. Dagger

Answer: C

31. Looking on a portrait, a man said, that man is my father's son.

I have no brother & sister what is He to Me?

A. Cousin

B. Uncle

C. Brother

D. Own picture

Answer: D

32. Which one is different from the rest?

A. Certain

B. Vague

C. Sure

12th Class Intelligence Questions (IQ) Past Paper

D. True

Answer: B

33. Saw is to Cut as Iron is to _____

A. Press

B. Metal

C. Oven

D. Hard

Answer: A

34. Which one is different from the rest?

A. 2

B. 4

C. 20

D. 5

Answer: D

35. Which one is different from the rest?

A. Foot

B. Kilometer

C. Length

D. Yard

Answer: C

36. What number comes next in the following series?

3412

4223

2334

3442

A. 4253

B. 4255

C. 5342

D. None

Answer: A

37. What number should replace the question mark?

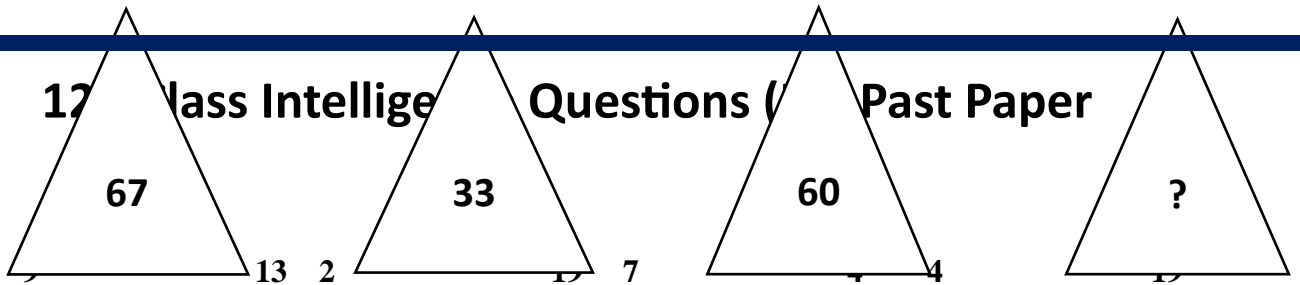
6

7

8

7

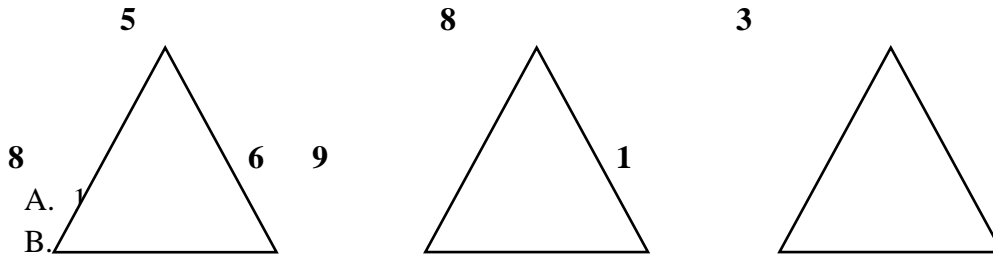
17 Class Intelligence Questions (Past Paper



- A. 49
- B. 7
- C. 40
- D. 2

Answer: A

38. What no should replace the question mark?



- A. 1
- B. 11
- C. 11
- D. 8

Answer: A

39. Which word does not belong to the list?

- A. Oil
- B. Petrol
- C. **Liquid**
- D. Spirit
- E. Water

Answer: C

40. December is to October as June is to _____.

- A. May
- B. August
- C. October
- D. **April**

Answer: D

41. What number comes next in the following series?

20 15 18 13 16 11

- A. 10
- B. 19

12th Class Intelligence Questions (IQ) Past Paper

- C. 26
- D. 14

Answer: D

42. What will be the answer if you add all even numbers in series and divide it by the middle figure?

3 4 5 6 7 8 9

- A. 4
- B. 11
- C. 3
- D. 7

Answer: 3

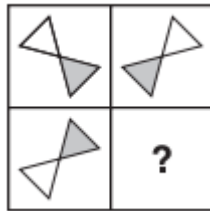
43. What number comes next in the following series?

2 4 5 10 11 22 23 46 _____

- A. 47
- B. 48
- C. 50
- D. 55

Answer: A

44. Which Shape completes the larger square?



- A.
- B.
- C.

12th Class Intelligence Questions (IQ) Past Paper

D.



Answer: C.

45. Which one comes next?



A.



B.



C.

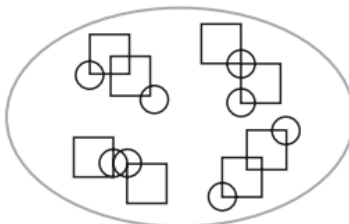


D.



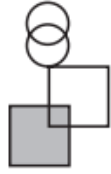
Answer: D.

46. Which pattern on the right belongs in the group on the left?



12th Class Intelligence Questions (IQ) Past Paper

A.



B.



C.

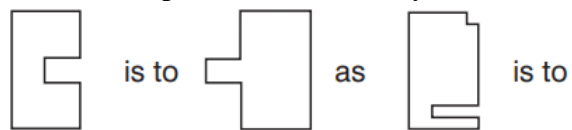


D.



Answer: D.

47. Which shape completes the second pair in the same way as the first pair?



A.



12th Class Intelligence Questions (IQ) Past Paper

B.



C.



D.

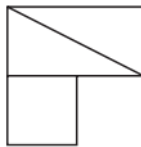


Answer: D.

48. In which larger shape is the shape on the left hidden?



A.

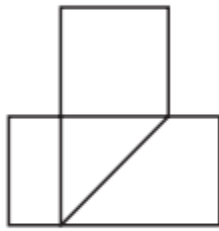


B.



12th Class Intelligence Questions (IQ) Past Paper

C.

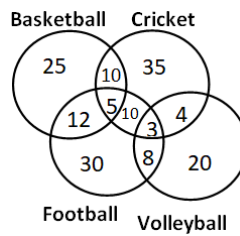


D.



Answer: C.

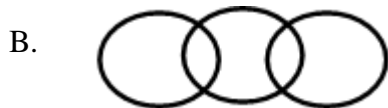
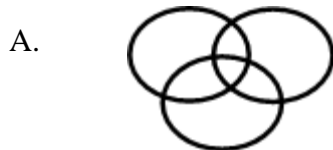
49. The following diagram shows the number of children playing Basketball, Cricket, Football and Volleyball. If the total number of children is 400, what is the percentage of children playing at least two games?



- A. 8
- B. 6
- C. 9.25
- D. 13

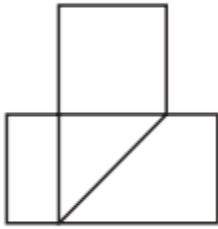
Answer: D

50. Which of the following diagram correctly represents the relationship among Teacher, Scientist and Graduate?



12th Class Intelligence Questions (IQ) Past Paper

C.




D.



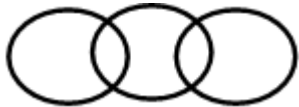
Answer: A

51. Which of the following diagram depicts the relation among Currency, Dinar and Rupee.

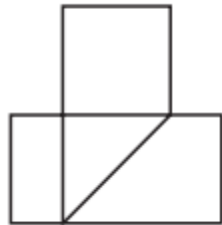
A.



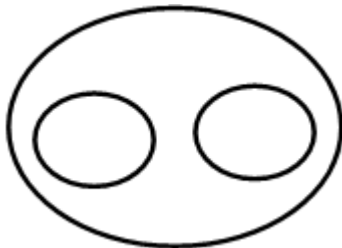
B.



C.



D.



12th Class Intelligence Questions (IQ) Past Paper

Answer: D

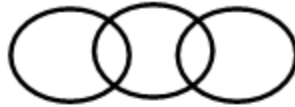
52. If triangle represents women, rectangle represents educated person and circle represent government jobs. Then which number represents educated women who are not in government job?

- A. 10
- B. 12
- C. 8
- D. 3

Answer: B

53. Which of the following figures shows relation between Trains, Goods and Truck?

a)



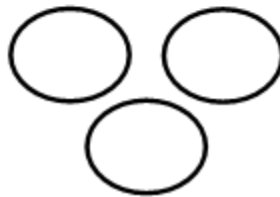
b)



c)



d)

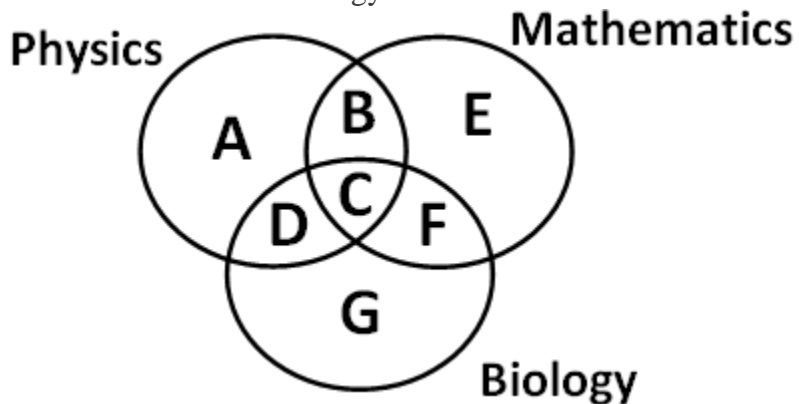


- A. Only a)
- B. Both a & d
- C. Only c)
- D. None of Above

Answer: A

12th Class Intelligence Questions (IQ) Past Paper

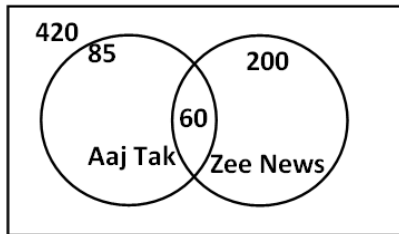
54. Which of the region in the following figure represents students who study both Physics and Mathematics but not Biology?



- A. B+C+D+F
- B. C
- C. A+E
- D. B

Answer: D

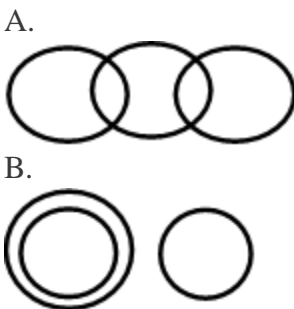
55. From the figure given below, determine the number of people who did not watch any news channel.



- A. 135
- B. 75
- C. 195
- D. 175

Answer: C

56. Which of the following figures correctly represents the relation between Machine, Lathe and Thermodynamics?

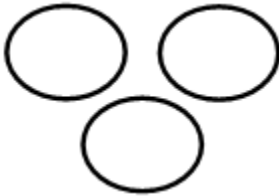


12th Class Intelligence Questions (IQ) Past Paper

C.

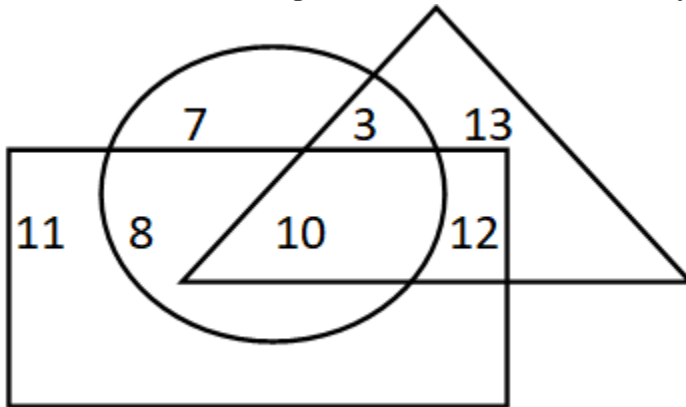


D.



Answer: B

57. If triangle represents Women, rectangle represents Doctors and circle represents Lawyers. Then which number represents Women that are Lawyer but not Doctor?



- A. 10
- B. 12
- C. 8
- D. 3

Answer: D

58.



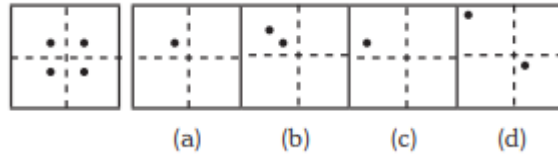
(a) (b) (c) (d)

- A. Only C
- B. Only D
- C. Both C & D
- D. None of these

12th Class Intelligence Questions (IQ) Past Paper

Answer: A

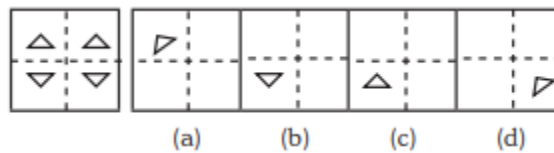
59.



- A. Only A
- B. Both A and B
- C. Only C
- D. Only D

Answer: A

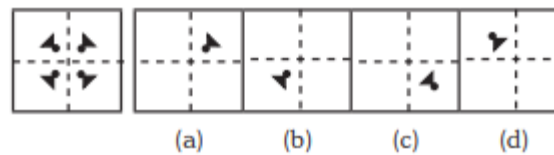
60.



- A. Option B
- B. Option A
- C. Both A & C
- D. Only D

Answer: A

61.



- A. Only A
- B. B
- C. C
- D. D

Answer: A

62. 3 pipes A, B and C can fill a tank in 30 minutes, 40 minutes, and 120 minutes, respectively.

If all the pipes are opened together, how much time is required to fill the tank?

- A. 12 minutes
- B. 15 minutes
- C. 18 minutes
- D. 20 minutes

Answer: B

12th Class Intelligence Questions (IQ) Past Paper

63. 3 pipes can fill a bucket in 20minutes, 30 minutes and 60 minutes, respectively. If all the pipes are opened for 5 minutes what percentage of the tank will be filled.

- A. 50%
- B. 60%
- C. 75%
- D. 100%

Answer: A

64. There are three pipes connected to a tank. The first two can fill the tank in 20 minutes and 30 minutes, respectively. The third pipe can empty the entire tank in 5 minutes. If all the pipes are opened simultaneously, what time will it take to empty the tank?

- A. 8.55 minutes
- B. 8.56 minutes
- C. 8.57 minutes
- D. 8.58 minutes

Answer: C

65. 2 pipes can empty a tank in 70 minutes and 140 minutes, respectively. If a third pipe can fill the tank in 7 minutes, find the time required to fill the tank if all the pipes are opened simultaneously.

- A. 7.23 minutes
- B. 8.23 minutes
- C. 8.57 minutes
- D. 8.88 minutes

Answer: B

66. A mixture containing 20% milk is mixed with another mixture containing 60% milk in the ratio 8 : 13. Find the percentage of milk in the new mixture.

- A. 37.14%
- B. 36.65%
- C. 35.57%
- D. 34.24%

Answer:A

67. A mixture containing 66% of acid is mixed with another mixture containing 35% of acid in the ratio 2 : 5. Find the percentage of acid in the mixture formed.

- A. 45%
- B. 46%
- C. 47%
- D. 48%

Answer: B

12th Class Intelligence Questions (IQ) Past Paper

68. Introducing a woman, a man said, "Her husband is the only son of my father". How is that woman related to the man?

- A. Husband
- B. Sister
- C. Wife
- D. Mother

Answer: C

69. Q's mother is the sister of P and daughter of S. A is the son of P and Brother of H. G is the father of H. How is S related to G?

- A. Nephew
- B. Son-in-law
- C. Grandfather
- D. Father-in-law

Answer: D

70. R is the son of A's father's sister. S is son of D, who is the mother of G and grandmother of A. H is the father of T and grandfather of R. D is wife of H. How is R related to D?

- A. Nephew
- B. Son
- C. Grandson
- D. Insufficient Data

Answer: C

71. Pointing towards a person a woman said to man, "His father is the only son of your mother". How is the man related to that person?

- A. Brother
- B. Father
- C. Son
- D. Husband

Answer: B

72. Introducing a child, a woman said, "He is the son of my father's only daughter". How is that woman related to the child?

- A. Mother
- B. Sister
- C. Wife
- D. Daughter

Answer: A

73. HSNT : EPKQ :: DTHL : ?

- A. ABCD

12th Class Intelligence Questions (IQ) Past Paper

- B. UEJM
- C. WXYZ
- D. AQEI

Answer: D

74. Umbriel : Uranus :: Janus : ?

- A. Jupiter
- B. Mars
- C. Uranus
- D. Saturn

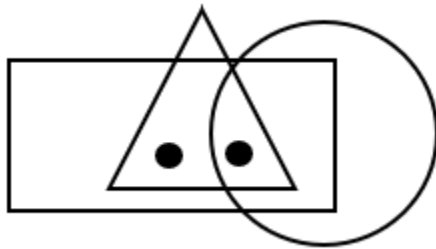
Answer: D

75. Kurnool : Andhra Pradesh :: Aizawl : ?

- A. Nagaland
- B. Meghalaya
- C. West Bengal
- D. Mizoram

Answer: D

76. Identify the figure which satisfies the same condition of placement of dots as in given figure.



- A.
- B.
- C.
- D.

12th Class Intelligence Questions (IQ) Past Paper

Answer: C

77. Find odd one out from the given jumbled words: LNUAIMMIU, ELEST, OPERPC, NMKOYE, INCKLE

- A. NMKOYE
- B. OPERPC
- C. INCKLE
- D. ELEST

Answer: A

78. Find the odd one out.

- A. BEK
- B. CFL
- C. MPS
- D. GJP

Answer: C

79. In a certain code “564” means “study very hard”, “736” means “hard work pays” and “423” means “study and work”. Which of the following is the code for “work”?

- A. 5
- B. 3
- C. 6
- D. 4

Answer: B

80. If ‘white’ is called ‘yellow’, ‘yellow’ is called ‘blue’, ‘blue’ is called ‘red’, ‘red’ is called ‘black’, ‘black’ is called ‘violet’ and ‘violet’ is called ‘green’, then what would be the colour of light emitting from bulb?

- A. Blue
- B. Red
- C. Yellow
- D. Black

Answer: A

81. If the letters of the word “PRODUCT” are arranged alphabetically, then which letter would be farthest from the second letter of word?

- A. T
- B. R
- C. U
- D. P

Answer: C

12th Class Intelligence Questions (IQ) Past Paper

82. Milly introduced a boy as the son of the only daughter of the mother of her maternal uncle.
How is Milly related to that boy?

- A. Nephew
- B. Son
- C. Brother
- D. Sister

Answer: D

83. If 'A&B' means A is father of B, 'A*B' means A is brother of B, 'A\$B' means A is mother of B then which of the following is correct about K\$T&M?

- A. M is brother of T
- B. T is son of K
- C. M is father of T
- D. K is mother of M

Answer: B

84. Ankita's younger brother Bobby is older than Nilu. Shweta is younger than Rahul but elder than Ankita. Who is the eldest?

- A. Rahul
- B. Shweta
- C. Ankita
- D. Bobby

Answer: A

85. How many even numbers are there in the following series of numbers, each of which is immediately preceded by an odd number, but not immediately followed by an even number?

"6 2 8 9 1 3 4 5 7 5 8 9 7 9 10 8 1 4 9 2 6"

- A. 4
- B. 3
- C. 2
- D. 1

Answer: B

86. ADLK : CFNM :: GRSP : ?

- A. WXYZ
- B. GHJK
- C. ABCD
- D. ITUR

Answer: D

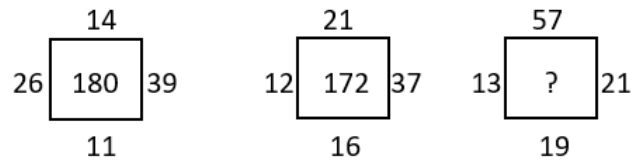
87. Pointing towards a person a woman said to man, "His father is the only son of your mother".
How is the man related to that person?

12th Class Intelligence Questions (IQ) Past Paper

- A. Husband
- B. Son
- C. Father
- D. Brother

Answer: C

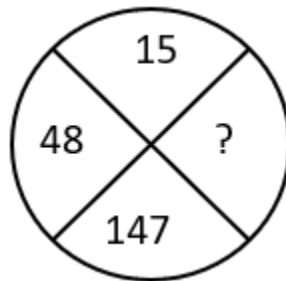
88. Find the correct alternative which will replace the question mark?



- A. 107
- B. 220
- C. 285
- D. 164

Answer: B

89. Find the correct alternative which will replace the question mark?



- A. 444
- B. 445
- C. 446
- D. 447

Answer: A

90. Choose the figure which is different from the rest?



- (A)
- (B)
- (C)
- (D)

- A. Fig A
- B. Fig B
- C. Fig C
- D. Fig D

Answer: A

12th Class Intelligence Questions (IQ) Past Paper

91. A cage had 15 birds. All but seven manages to escape. How many birds remain?

- A. 7
- B. 12
- C. 15
- D. 8

Answer: A

92. Find the angle between minute hand and hour hand at 6:30 AM

- A. 25°
- B. 22.5°
- C. 15°
- D. None of these

Answer: C

93. Find the angle between minute hand and hour hand at 11:50 AM

- A. 55°
- B. 22.5°
- C. 15°
- D. None of these

Answer: A

94. Find the angle between minute hand and hour hand at 4:20 AM

- A. 10°
- B. 12.5°
- C. 15°
- D. None of these

Answer: A

95. Find the angle between minute hand and hour hand at 1:40 AM

- A. 180°
- B. 190°
- C. 175°
- D. None of these

Answer: B

96. Find the angle between minute hand and hour hand at 10:10 AM

- A. 245°
- B. 195°
- C. 175°
- D. None of these

Answer: A

12th Class Intelligence Questions (IQ) Past Paper

97.If 14th October 2005 is Friday then which day is
14th

October 2006?

- A. Tuesday
- B. Saturday
- C. Thursday
- D. Friday

Answer: B

98.If today is Monday then which day of the week
is

after 59 days.

- A. Tuesday
- B. Wednesday
- C. Thursday
- D. Friday

Answer: B

99.If 14th October 2005 is Friday then which day is
14th

October 2009?

- A. Tuesday
- B. Wednesday
- C. Thursday
- D. Friday

Answer: B

100. Kunal walks 10 kilometres towards North. From there, he walks 6 kilometres towards south. Then, he walks 3 kilometres towards east. How far and in which direction is he with reference to his starting point?

- A. 5 kilometres West
- B. 5 kilometres North-east
- C. 7 kilometres East
- D. 7 kilometres West
- E. None of these

Answer: E

O-Levels Intelligence Questions (IQ) Past Paper

1. Mathematics is related to numbers in the same way as History is related to _____?

- A. People
- B. Events
- C. Dates
- D. Wars

Answer: B

2. Bag is related to Luggage in the same way as Ship is related to _____?

- A. Coal
- B. Stock
- C. Cargo
- D. Weight

Answer: C

3. Mirror is related to Reflection in the same way as Water is related to _____?

- A. Conduction
- B. Dispersion
- C. Immersion
- D. Refraction

Answer: D

4. What will come next in the following series?

35 45 ? 65 75

- A. 55
- B. 80
- C. 47
- D. 84

Answer: A

5. If SKYLAND is coded as 7948312, then LAND is coded as _____

- A. 8312
- B. 7948
- C. 9483
- D. 8321
- E. None

Answer: A

6. If STRANGER is to 97524687, then ANGER is to _____

- A. 24687
- B. 26487
- C. 64287
- D. 26489

O-Levels Intelligence Questions (IQ) Past Paper

E. 98462

Answer: A

7. Which one is different from the rest?

- A. Similar
- B. Equivalent
- C. Like
- D. Same
- E. Distinguish

Answer: E

8. Which one is different from the rest?

- A. Fullback
- B. Fine leg
- C. Centre half
- D. Defender
- E. Half side

Answer: B

9. Which one is different from the rest?

- A. Tooth
- B. Spoon
- C. Plate
- D. Tray
- E. Knife

Answer: A

10. If SHOUT is to 81397 then HOT is to _____

- A. 137
- B. 237
- C. 731
- D. 813
- E. 318

Answer: A

11. Which one is different from the rest?

- A. Kiwi
- B. Sparrow
- C. Crow
- D. Eagle

O-Levels Intelligence Questions (IQ) Past Paper

E. Parrot

Answer: A

12. Find out the odd man out?

- A. Cloth
- B. Thin
- C. Colorful
- D. Glitter
- E. Bright

Answer: A

13. If RIVER is coded as 12345 and FEAVER is to 647345 then what stand for EAR

- A. 375
- B. 465
- C. 275
- D. 475
- E. 654

Answer: D

14. If SECRET is coded as 102807 then ERRECT is coded as _____

- A. 088027
- B. 088007
- C. 808027
- D. 088072
- E. 008827

Answer: A

15. If TOMORROW is to 56768869 then ROW is to _____

- A. 576
- B. 688
- C. 896
- D. 869

Answer: D

16. If the highest number is added to the first number and divided by the third number.

What will be the answer?

10 15 5

- A. 4
- B. 2
- C. 6

O-Levels Intelligence Questions (IQ) Past Paper

21. What will come next in the following series?

7 4 12 17 30 48 _____

- A. 11
- B. 36
- C. 48
- D. 79

Answer: D

22. What will come next in the following series?

48 24 20 10 6 _____

- A. 1
- B. 0
- C. -1
- D. None of above

Answer: C

23. What will come next?

$$7+2-1 = H$$

$$22+6-5 = W$$

$$11+6-2 = ?$$

- A. O
- B. P
- C. Q
- D. W

Answer: A

24. Which one is different from the rest?

- A. Sword
- B. Knife
- C. **Fork**
- D. Dagger

Answer: C

25. Looking on a portrait, a man said, that man is my father's son.

I have no brother & sister what is He to Me?

- A. Cousin
- B. Uncle
- C. Brother
- D. **Own picture**

Answer: D

O-Levels Intelligence Questions (IQ) Past Paper

26. Which one is different from the rest?

- A. Certain
- B. **Vague**
- C. Sure
- D. True

Answer: B

27. Saw is to Cut as Iron is to _____

- A. **Press**
- B. Metal
- C. Oven
- D. Hard

Answer: A

28. Which one is different from the rest?

- A. 2
- B. 4
- C. 20
- D. 5

Answer: D

29. Which one is different from the rest?

- A. Foot
- B. Kilometer
- C. **Length**
- D. Yard

Answer: C

30. What number comes next in the following series?

3412 4223 2334 3442 _____

- A. 4253
- B. 4255
- C. 5342
- D. None

Answer: A

31. What number should replace the question mark?

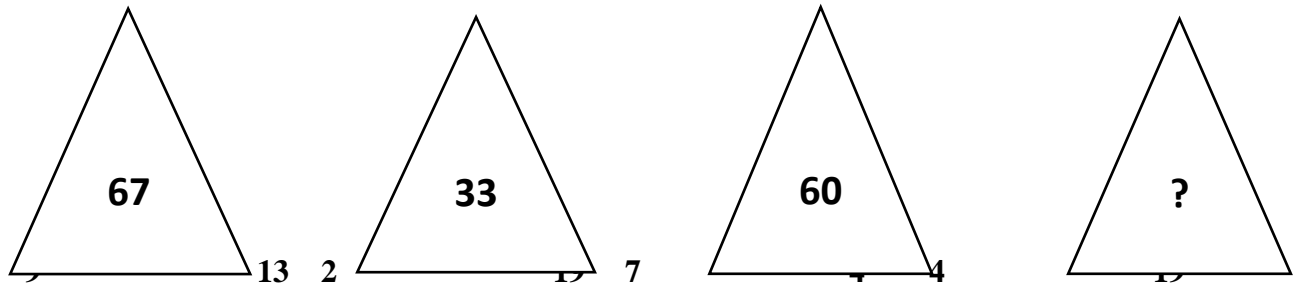
6

7

8

7

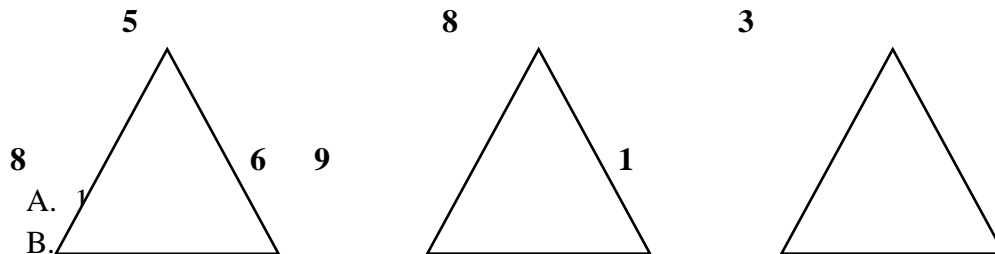
O-Levels Intelligence Questions (IQ) Past Paper



- A. 49
- B. 7
- C. 40
- D. 2

Answer: A

32. What no should replace the question mark?



- A. 1
- B. 11
- C. 11
- D. 8

Answer: A

33. Which word does not belong to the list?

- A. Oil
- B. Petrol
- C. **Liquid**
- D. Spirit
- E. Water

Answer: C

34. December is to October as June is to _____.

- A. May
- B. August
- C. October
- D. **April**

Answer: D

O-Levels Intelligence Questions (IQ) Past Paper

35. What number comes next in the following series?

20 15 18 13 16 11

- A. 10
- B. 19
- C. 26
- D. 14

Answer: D

36. What will be the answer if you add all even numbers in series and divide it by the middle figure?

3 4 5 6 7 8 9

- A. 4
- B. 11
- C. 3
- D. 7

Answer: 3

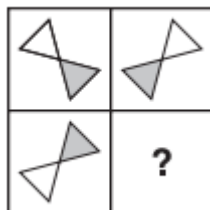
37. What number comes next in the following series?

2 4 5 10 11 22 23 46 _____

- A. 47
- B. 48
- C. 50
- D. 55

Answer: A

38. Which Shape completes the larger square?



O-Levels Intelligence Questions (IQ) Past Paper

C.



D.



Answer: C.

39. Which one comes next?



A.



B.



C.



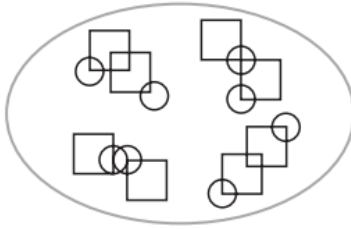
D.



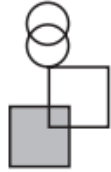
Answer: D.

40. Which pattern on the right belongs in the group on the left?

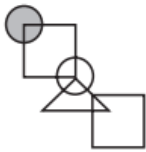
O-Levels Intelligence Questions (IQ) Past Paper



A.



B.



C.

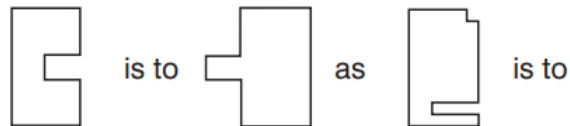


D.



Answer: D.

41. Which shape completes the second pair in the same way as the first pair?



O-Levels Intelligence Questions (IQ) Past Paper

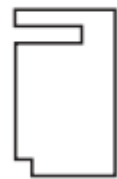
A.



B.



C.



D.

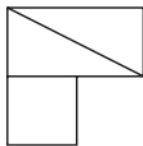


Answer: D.

42. In which larger shape is the shape on the left hidden?



A.

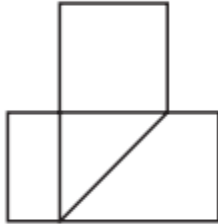


O-Levels Intelligence Questions (IQ) Past Paper

B.



C.

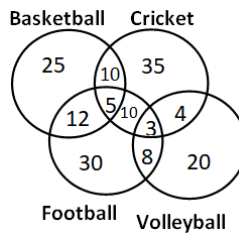


D.



Answer: C.

43. The following diagram shows the number of children playing Basketball, Cricket, Football and Volleyball. If the total number of children is 400, what is the percentage of children playing at least two games?



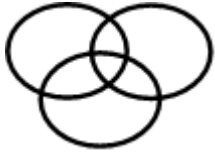
- A. 8
- B. 6
- C. 9.25
- D. 13

Answer: D

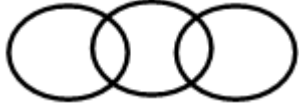
44. Which of the following diagram correctly represents the relationship among Teacher, Scientist and Graduate?

O-Levels Intelligence Questions (IQ) Past Paper

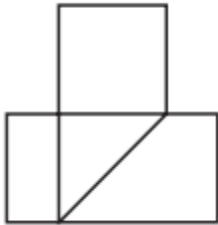
A.



B.



C.




D.



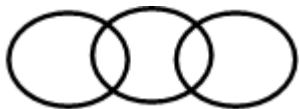
Answer: A

45. Which of the following diagram depicts the relation among Currency, Dinar and Rupee.

A.

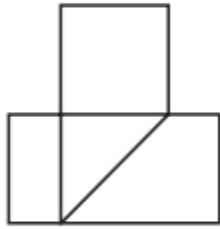


B.

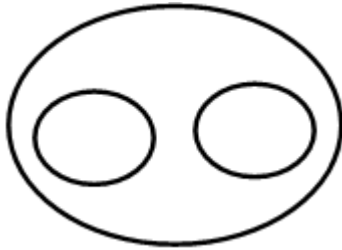


O-Levels Intelligence Questions (IQ) Past Paper

C.



D.



Answer: D

46. The purchase price of an article is 20% less than the profit made. Find the profit if the selling price is 360 rupees.

Olevel/Alevel

- A. 180 rupees
- B. 240 rupees
- C. 200 rupees
- D. 160 rupees

Answer: C

47. The cost price of an article is 1.56 times the selling price. Find the loss percentage.

- A. 37.8%
- B. 35.9%
- C. 39.5%
- D. 34.5%

Answer: B

48. A shopkeeper purchased an article for 500 rupees. At what price should he mark the article to allow a discount of 35% and still earn 100% profit.

- A. 1599 rupees
- B. 1523 rupees
- C. 1575 rupees
- D. 1539 rupees

Answer: D

49. A group of 5 men or 12 women can do a task in 78 days. Find the time taken by 5 men and 12 women to complete the task.

- A. 39 days
- B. 36 days
- C. 29 days
- D. 26 days

Answer: A

50. The speed of a train is 120 kmph and the length of the train is 240 m. Find the time it will take to cross a pole.

- A. 9.6 seconds
- B. 7.2 seconds
- C. 4.8 seconds
- D. 2.4 seconds

Answer: C

51. If triangle represents women, rectangle represents educated person and circle represent government jobs. Then which number represents educated women who are not in government job?

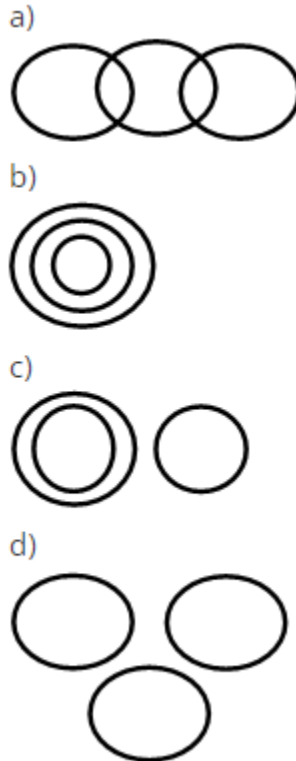
- A. 10

Olevel/Alevel

- B. 12
- C. 8
- D. 3

Answer: B

52. Which of the following figures shows relation between Trains, Goods and Truck?



- A. Only a)
- B. Both a & d
- C. Only c)
- D. None of Above

Answer: A

53.If 14th October 2005 is Friday then which day is 14th

October 2006?

- A. Tuesday
- B. Saturday
- C. Thursday
- D. Friday

Answer: B

54.If today is Monday then which day of the week is

after 59 days.

- A. Tuesday

Olevel/Alevel

- B. Wednesday
- C. Thursday
- D. Friday

Answer: B

55. If 14th October 2005 is Friday then which day is 14th October 2009?

- A. Tuesday
- B. Wednesday
- C. Thursday
- D. Friday

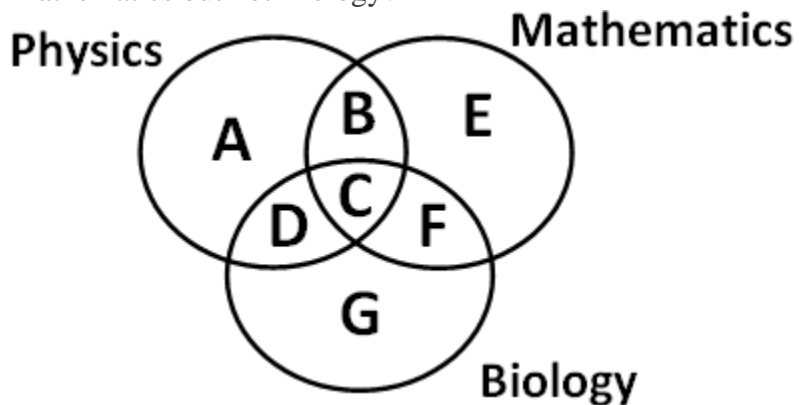
Answer: B

56. Kunal walks 10 kilometres towards North. From there, he walks 6 kilometres towards south. Then, he walks 3 kilometres towards east. How far and in which direction is he with reference to his starting point?

- A. 5 kilometres West
- B. 5 kilometres North-east
- C. 7 kilometres East
- D. 7 kilometres West
- E. None of these

Answer: E

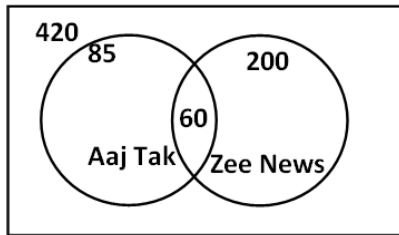
57. Which of the region in the following figure represents students who study both Physics and Mathematics but not Biology?



- A. B+C+D+F
- B. C
- C. A+E
- D. B

Answer: D

58. From the figure given below, determine the number of people who did not watch any news channel.

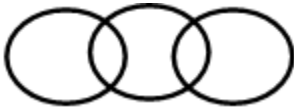


- A. 135
- B. 75
- C. 195
- D. 175

Answer: C

59. Which of the following figures correctly represents the relation between Machine, Lathe and Thermodynamics?

A.



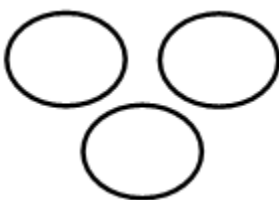
B.



C.

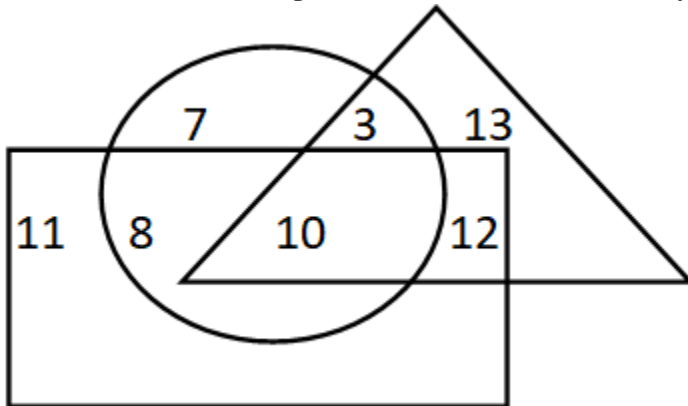


D.



Answer: B

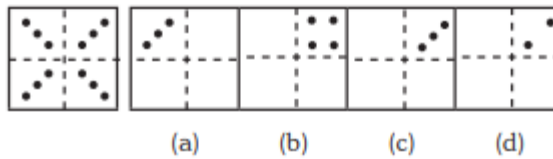
60. If triangle represents Women, rectangle represents Doctors and circle represents Lawyers.
Then which number represents Women that are Lawyer but not Doctor?



- A. 10
- B. 12
- C. 8
- D. 3

Answer: D

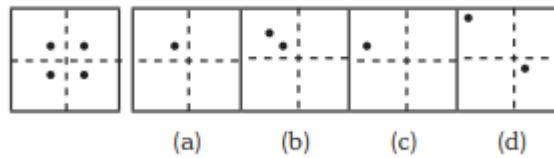
61.



- A. Only C
- B. Only D
- C. Both C & D
- D. None of these

Answer: A

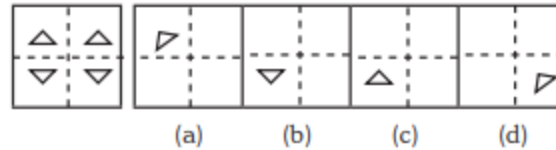
62.



- A. Only A
- B. Both A and B
- C. Only C
- D. Only D

Answer: A

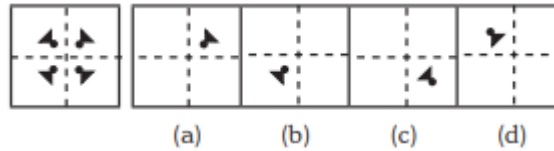
63.



- A. Option B
- B. Option A
- C. Both A & C
- D. Only D

Answer: A

64.



- A. Only A
- B. B
- C. C
- D. D

Answer: A

65. 3 pipes A, B and C can fill a tank in 30 minutes, 40 minutes, and 120 minutes, respectively. If all the pipes are opened together, how much time is required to fill the tank?

- A. 12 minutes
- B. 15 minutes
- C. 18 minutes
- D. 20 minutes

Answer: B

66. 3 pipes can fill a bucket in 20minutes, 30 minutes and 60 minutes, respectively. If all the pipes are opened for 5 minutes what percentage of the tank will be filled.

- A. 50%
- B. 60%
- C. 75%
- D. 100%

Answer: A

67. There are three pipes connected to a tank. The first two can fill the tank in 20 minutes and 30 minutes, respectively. The third pipe can empty the entire tank in 5 minutes. If all the pipes are opened simultaneously, what time will it take to empty the tank?

- A. 8.55 minutes
- B. 8.56 minutes

Olevel/Alevel

- C. 8.57 minutes
- D. 8.58 minutes

Answer: C

68. 2 pipes can empty a tank in 70 minutes and 140 minutes, respectively. If a third pipe can fill the tank in 7 minutes, find the time required to fill the tank if all the pipes are opened simultaneously.

- A. 7.23 minutes
- B. 8.23 minutes
- C. 8.57 minutes
- D. 8.88 minutes

Answer: B

69. A mixture containing 20% milk is mixed with another mixture containing 60% milk in the ratio 8 : 13. Find the percentage of milk in the new mixture.

- A. 37.14%
- B. 36.65%
- C. 35.57%
- D. 34.24%

Answer:A

70. A mixture containing 66% of acid is mixed with another mixture containing 35% of acid in the ratio 2 : 5. Find the percentage of acid in the mixture formed.

- A. 45%
- B. 46%
- C. 47%
- D. 48%

Answer: B

71. Introducing a woman, a man said, "Her husband is the only son of my father". How is that woman related to the man?

- A. Husband
- B. Sister
- C. Wife
- D. Mother

Answer: C

72. Q's mother is the sister of P and daughter of S. A is the son of P and Brother of H. G is the father of H. How is S related to G?

- A. Nephew
- B. Son-in-law
- C. Grandfather

Olevel/Alevel

D. Father-in-law

Answer: D

73. R is the son of A's father's sister. S is son of D, who is the mother of G and grandmother of A. H is the father of T and grandfather of R. D is wife of H. How is R related to D?

- A. Nephew
- B. Son
- C. Grandson
- D. Insufficient Data

Answer: C

74. Pointing towards a person a woman said to man, "His father is the only son of your mother". How is the man related to that person?

- A. Brother
- B. Father
- C. Son
- D. Husband

Answer: B

75. Introducing a child, a woman said, "He is the son of my father's only daughter". How is that woman related to the child?

- A. Mother
- B. Sister
- C. Wife
- D. Daughter

Answer: A

76. HSNT : EPKQ :: DTHL : ?

- A. ABCD
- B. UEJM
- C. WXYZ
- D. AQEI

Answer: D

77. Umbriel : Uranus :: Janus : ?

- A. Jupiter
- B. Mars
- C. Uranus
- D. Saturn

Answer: D

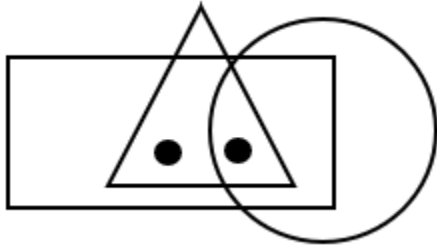
78. Kurnool : Andhra Pradesh :: Aizawl : ?

Olevel/Alevel

- A. Nagaland
- B. Meghalaya
- C. West Bengal
- D. Mizoram

Answer: D

79. Identify the figure which satisfies the same condition of placement of dots as in given figure.



- A.
- B.
- C.
- D.

Answer: C

80. Find odd one out from the given jumbled words: LNUAIMMIU, ELEST, OPERPC, NMKOYE, INCKLE

- A. NMKOYE
- B. OPERPC
- C. INCKLE
- D. ELEST

Answer: A

81. Find the odd one out.

- A. BEK
- B. CFL

Olevel/Alevel

C. MPS

D. GJP

Answer: C

82. In a certain code “564” means “study very hard”, “736” means “hard work pays” and “423” means “study and work”. Which of the following is the code for “work”?

A. 5

B. 3

C. 6

D. 4

Answer: B

83. If ‘white’ is called ‘yellow’, ‘yellow’ is called ‘blue’, ‘blue’ is called ‘red’, ‘red’ is called ‘black’, ‘black’ is called ‘violet’ and ‘violet’ is called ‘green’, then what would be the colour of light emitting from bulb?

A. Blue

B. Red

C. Yellow

D. Black

Answer: A

84. If the letters of the word “PRODUCT” are arranged alphabetically, then which letter would be farthest from the second letter of word?

A. T

B. R

C. U

D. P

Answer: C

85. Milly introduced a boy as the son of the only daughter of the mother of her maternal uncle. How is Milly related to that boy?

A. Nephew

B. Son

C. Brother

D. Sister

Answer: D

86. If ‘A&B’ means A is father of B, ‘A*B’ means A is brother of B, ‘A\$B’ means A is mother of B then which of the following is correct about K\$T&M?

A. M is brother of T

B. T is son of K

C. M is father of T

Olevel/Alevel

D. K is mother of M

Answer: B

87. Ankita's younger brother Bobby is older than Nilu. Shweta is younger than Rahul but elder than Ankita. Who is the eldest?

- A. Rahul
- B. Shweta
- C. Ankita
- D. Bobby

Answer: A

88. How many even numbers are there in the following series of numbers, each of which is immediately preceded by an odd number, but not immediately followed by an even number?

"6 2 8 9 1 3 4 5 7 5 8 9 7 9 10 8 1 4 9 2 6"

- A. 4
- B. 3
- C. 2
- D. 1

Answer: B

89. ADLK : CFNM :: GRSP : ?

- A. WXYZ
- B. GHJK
- C. ABCD
- D. ITUR

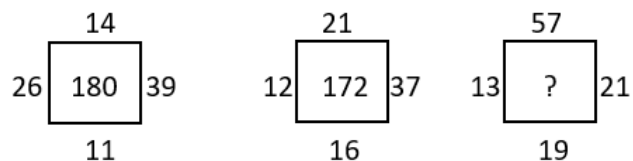
Answer: D

90. Pointing towards a person a woman said to man, "His father is the only son of your mother". How is the man related to that person?

- A. Husband
- B. Son
- C. Father
- D. Brother

Answer: C

91. Find the correct alternative which will replace the question mark?



- A. 107
- B. 220

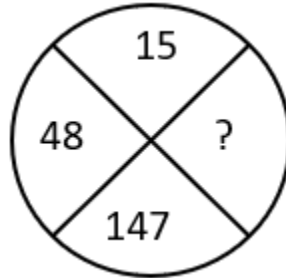
Olevel/Alevel

C. 285

D. 164

Answer: B

92. Find the correct alternative which will replace the question mark?



A. 444

B. 445

C. 446

D. 447

Answer: A

93. Choose the figure which is different from the rest?



(A)

(B)

(C)

(D)

A. Fig A

B. Fig B

C. Fig C

D. Fig D

Answer: A

94. A cage had 15 birds. All but seven manages to escape. How many birds remain?

A. 7

B. 12

C. 15

D. 8

Answer: A

95. Find the angle between minute hand and hour hand at 6:30 AM

A. 25°

B. 22.5°

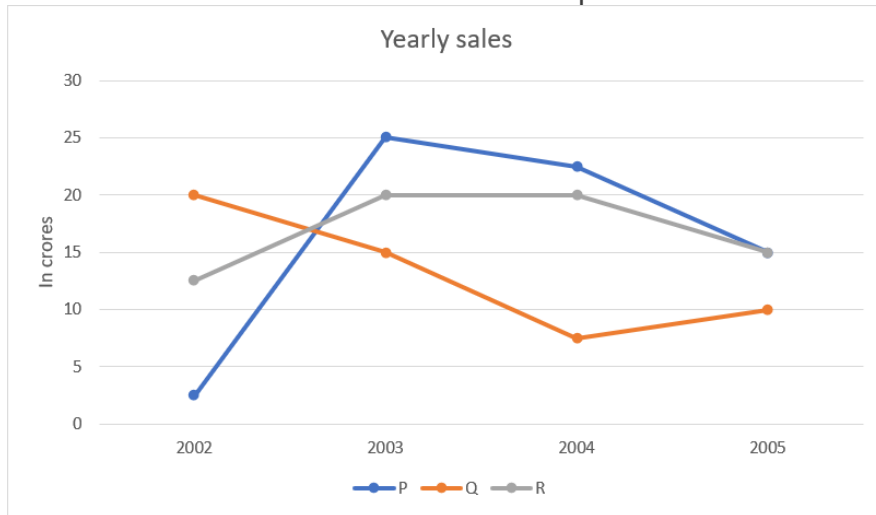
C. 15°

D. None of these

Olevel/Alevel

Answer: C

96. Study the graph and find what is the difference between maximum and minimum sales of p.



- A. 22.5
- B. 25
- C. 27.5
- D. 35

Answer: A

97. An unbiased dice is thrown. What is the probability of getting 5 or a greater number?

- A. $\frac{2}{3}$
- B. $\frac{5}{6}$
- C. $\frac{1}{3}$
- D. $\frac{1}{6}$

Answer: D

98. A and B are brothers. M is the mother of A and D is brother of S. K is sister of B and mother of S. What is the relationship between K and M?

- A. Sister and Brother
- B. Grandson and Grandmother
- C. Nephew and Aunt
- D. Daughter and Mother

Answer: D

99. When my parents married their age was in a ratio 11 : 10 (father's age : mother's age). This year they celebrated 15th anniversary. If the total of

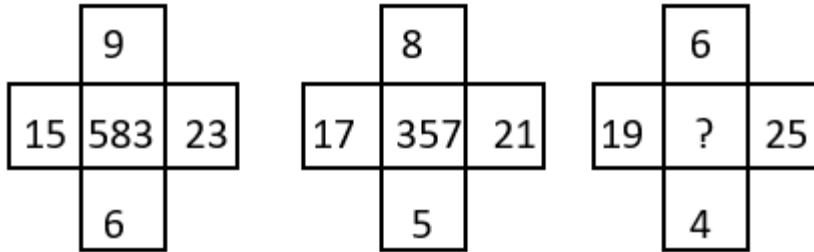
Olevel/Alevel

their ages at their silver jubilee anniversary will be 113, find my father's age now.

- A. 33 years
- B. 40 years
- C. 42 years
- D. 43 years

Answer: D

100. Find the correct alternative which will replace the question mark?



- A. 765
- B. 254
- C. 356
- D. 432

Answer: D

A-Levels Intelligence Questions (IQ) Past Paper

1. Mathematics is related to numbers in the same way as History is related to _____?

- A. People
- B. Events
- C. Dates
- D. Wars

Answer: B

2. Bag is related to Luggage in the same way as Ship is related to _____?

- A. Coal
- B. Stock
- C. Cargo
- D. Weight

Answer: C

3. Mirror is related to Reflection in the same way as Water is related to _____?

- A. Conduction
- B. Dispersion
- C. Immersion
- D. Refraction

Answer: D

4. What will come next in the following series?

35 45 ? 65 75

- A. 55
- B. 80
- C. 47
- D. 84

Answer: A

5. If SKYLAND is coded as 7948312, then LAND is coded as _____

- A. 8312
- B. 7948
- C. 9483
- D. 8321
- E. None

Answer: A

6. If STRANGER is to 97524687, then ANGER is to _____

- A. 24687
- B. 26487
- C. 64287
- D. 26489

A-Levels Intelligence Questions (IQ) Past Paper

E. 98462

Answer: A

7. Which one is different from the rest?

- A. Similar
- B. Equivalent
- C. Like
- D. Same
- E. Distinguish

Answer: E

8. Which one is different from the rest?

- A. Fullback
- B. Fine leg
- C. Centre half
- D. Defender
- E. Half side

Answer: B

9. Which one is different from the rest?

- A. Tooth
- B. Spoon
- C. Plate
- D. Tray
- E. Knife

Answer: A

10. If SHOUT is to 81397 then HOT is to _____

- A. 137
- B. 237
- C. 731
- D. 813
- E. 318

Answer: A

11. Which one is different from the rest?

- A. Kiwi
- B. Sparrow
- C. Crow
- D. Eagle

A-Levels Intelligence Questions (IQ) Past Paper

E. Parrot

Answer: A

12. Find out the odd man out?

- A. Cloth
- B. Thin
- C. Colorful
- D. Glitter
- E. Bright

Answer: A

13. If RIVER is coded as 12345 and FEAVER is to 647345 then what stand for EAR

- A. 375
- B. 465
- C. 275
- D. 475
- E. 654

Answer: D

14. If SECRET is coded as 102807 then ERRECT is coded as _____

- A. 088027
- B. 088007
- C. 808027
- D. 088072
- E. 008827

Answer: A

15. If TOMORROW is to 56768869 then ROW is to _____

- A. 576
- B. 688
- C. 896
- D. 869

Answer: D

16. If the highest number is added to the first number and divided by the third number.

What will be the answer?

10 15 5

- A. 4
- B. 2
- C. 6

A-Levels Intelligence Questions (IQ) Past Paper

21. What will come next in the following series?

7 4 12 17 30 48 _____

- A. 11
- B. 36
- C. 48
- D. **79**

Answer: D

22. What will come next in the following series?

48 24 20 10 6 _____

- A. 1
- B. 0
- C. **-1**
- D. None of above

Answer: C

23. What will come next?

$$7+2-1 = H$$

$$22+6-5 = W$$

$$11+6-2 = ?$$

- A. **O**
- B. P
- C. Q
- D. W

Answer: A

24. Which one is different from the rest?

- A. Sword
- B. Knife
- C. **Fork**
- D. Dagger

Answer: C

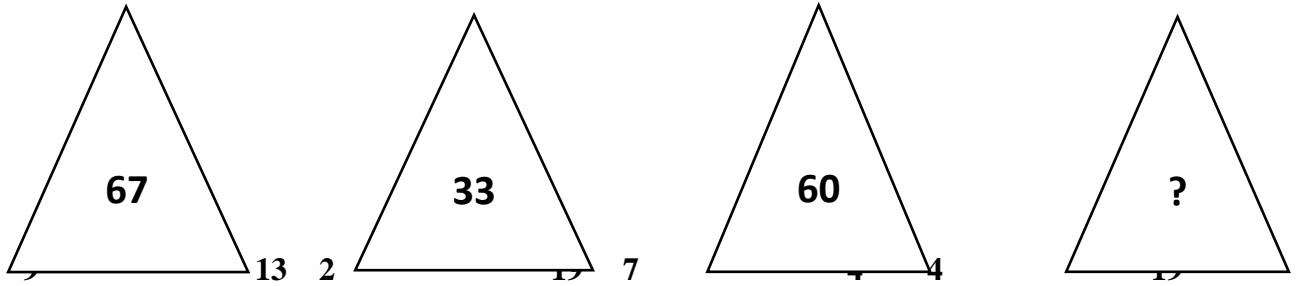
25. Looking on a portrait, a man said, that man is my father's son.

I have no brother & sister what is He to Me?

- A. Cousin
- B. Uncle
- C. Brother
- D. **Own picture**

Answer: D

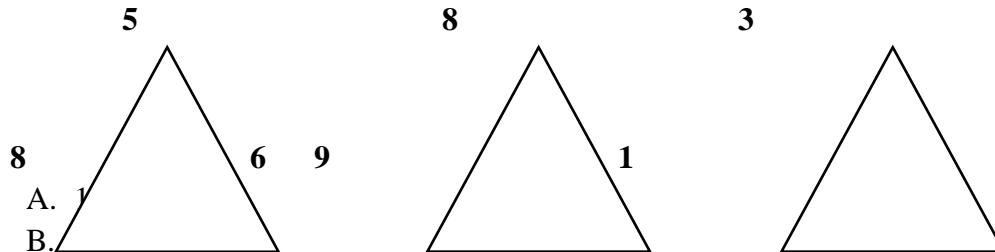
A-Levels Intelligence Questions (IQ) Past Paper



- A. 49
- B. 7
- C. 40
- D. 2

Answer: A

32. What no should replace the question mark?



- A. 1
- B. 11
- C. 11
- D. 8

Answer: A

33. Which word does not belong to the list?

- A. Oil
- B. Petrol
- C. **Liquid**
- D. Spirit
- E. Water

Answer: C

34. December is to October as June is to _____.

- A. May
- B. August
- C. October
- D. **April**

Answer: D

A-Levels Intelligence Questions (IQ) Past Paper

35. What number comes next in the following series?

20 15 18 13 16 11

- A. 10
- B. 19
- C. 26
- D. 14

Answer: D

36. What will be the answer if you add all even numbers in series and divide it by the middle figure?

3 4 5 6 7 8 9

- A. 4
- B. 11
- C. 3
- D. 7

Answer: 3

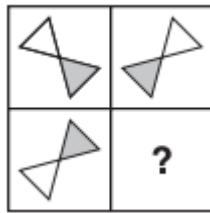
37. What number comes next in the following series?

2 4 5 10 11 22 23 46 _____

- A. 47
- B. 48
- C. 50
- D. 55

Answer: A

38. Which Shape completes the larger square?



A.



B.




A-Levels Intelligence Questions (IQ) Past Paper



Answer: C.

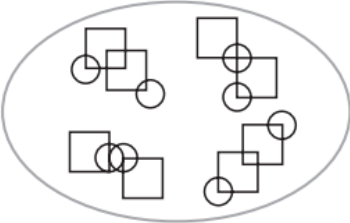
39. Which one comes next?



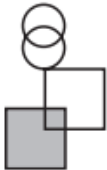
Answer: D.

40. Which pattern on the right belongs in the group on the left?

A-Levels Intelligence Questions (IQ) Past Paper



A.



B.



C.

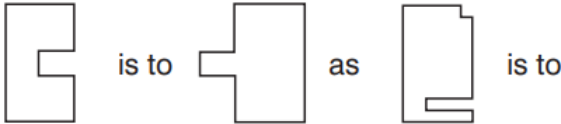


D.



Answer: D.

41. Which shape completes the second pair in the same way as the first pair?



A-Levels Intelligence Questions (IQ) Past Paper

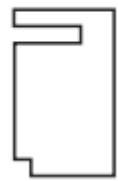
A.



B.



C.



D.

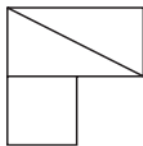


Answer: D.

42. In which larger shape is the shape on the left hidden?



A.

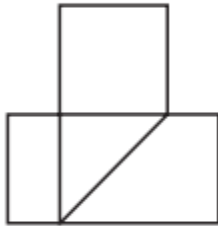


A-Levels Intelligence Questions (IQ) Past Paper

B.



C.

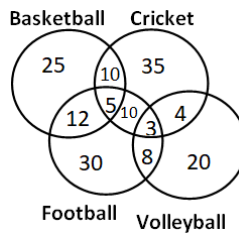


D.



Answer: C.

43. The following diagram shows the number of children playing Basketball, Cricket, Football and Volleyball. If the total number of children is 400, what is the percentage of children playing at least two games?



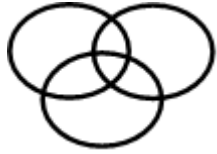
- A. 8
- B. 6
- C. 9.25
- D. 13

Answer: D

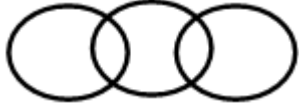
44. Which of the following diagram correctly represents the relationship among Teacher, Scientist and Graduate?

A-Levels Intelligence Questions (IQ) Past Paper

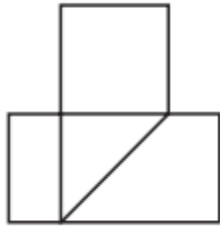
A.



B.



C.



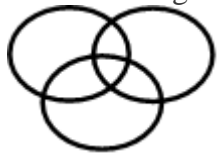
D.



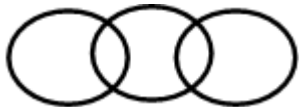
Answer: A

45. Which of the following diagram depicts the relation among Currency, Dinar and Rupee.

A.

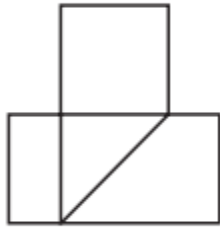


B.

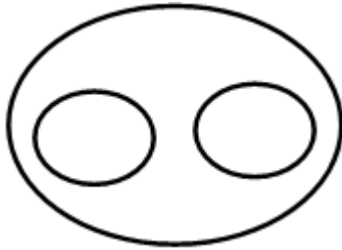


A-Levels Intelligence Questions (IQ) Past Paper

C.



D.



Answer: D

46. The purchase price of an article is 20% less than the profit made. Find the profit if the selling price is 360 rupees.

Olevel/Alevel

- A. 180 rupees
- B. 240 rupees
- C. 200 rupees
- D. 160 rupees

Answer: C

47. The cost price of an article is 1.56 times the selling price. Find the loss percentage.

- A. 37.8%
- B. 35.9%
- C. 39.5%
- D. 34.5%

Answer: B

48. A shopkeeper purchased an article for 500 rupees. At what price should he mark the article to allow a discount of 35% and still earn 100% profit.

- A. 1599 rupees
- B. 1523 rupees
- C. 1575 rupees
- D. 1539 rupees

Answer: D

49. A group of 5 men or 12 women can do a task in 78 days. Find the time taken by 5 men and 12 women to complete the task.

- A. 39 days
- B. 36 days
- C. 29 days
- D. 26 days

Answer: A

50. The speed of a train is 120 kmph and the length of the train is 240 m. Find the time it will take to cross a pole.

- A. 9.6 seconds
- B. 7.2 seconds
- C. 4.8 seconds
- D. 2.4 seconds

Answer: C

51. If triangle represents women, rectangle represents educated person and circle represent government jobs. Then which number represents educated women who are not in government job?

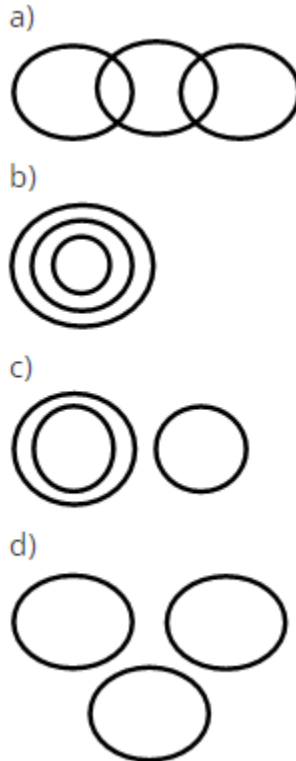
- A. 10

Olevel/Alevel

- B. 12
- C. 8
- D. 3

Answer: B

52. Which of the following figures shows relation between Trains, Goods and Truck?



- A. Only a)
- B. Both a & d
- C. Only c)
- D. None of Above

Answer: A

53.If 14th October 2005 is Friday then which day is 14th

October 2006?

- A. Tuesday
- B. Saturday
- C. Thursday
- D. Friday

Answer: B

54.If today is Monday then which day of the week is

after 59 days.

- A. Tuesday

Olevel/Alevel

- B. Wednesday
- C. Thursday
- D. Friday

Answer: B

55. If 14th October 2005 is Friday then which day is 14th October 2009?

- A. Tuesday
- B. Wednesday
- C. Thursday
- D. Friday

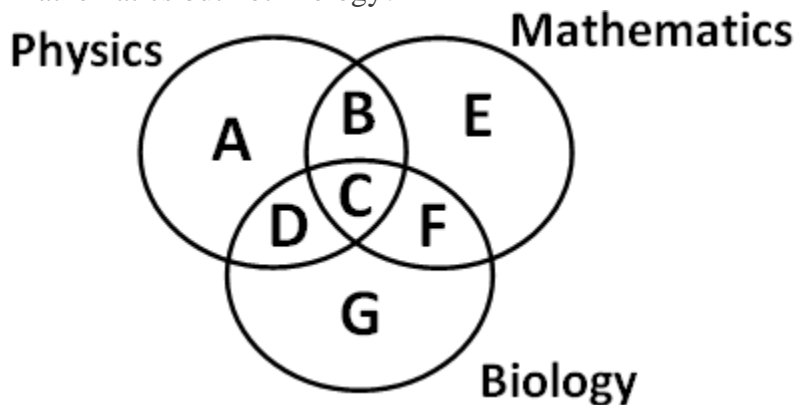
Answer: B

56. Kunal walks 10 kilometres towards North. From there, he walks 6 kilometres towards south. Then, he walks 3 kilometres towards east. How far and in which direction is he with reference to his starting point?

- A. 5 kilometres West
- B. 5 kilometres North-east
- C. 7 kilometres East
- D. 7 kilometres West
- E. None of these

Answer: E

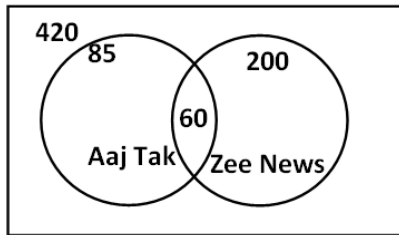
57. Which of the region in the following figure represents students who study both Physics and Mathematics but not Biology?



- A. B+C+D+F
- B. C
- C. A+E
- D. B

Answer: D

58. From the figure given below, determine the number of people who did not watch any news channel.

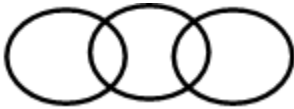


- A. 135
- B. 75
- C. 195
- D. 175

Answer: C

59. Which of the following figures correctly represents the relation between Machine, Lathe and Thermodynamics?

A.



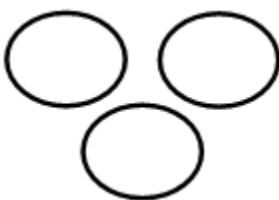
B.



C.

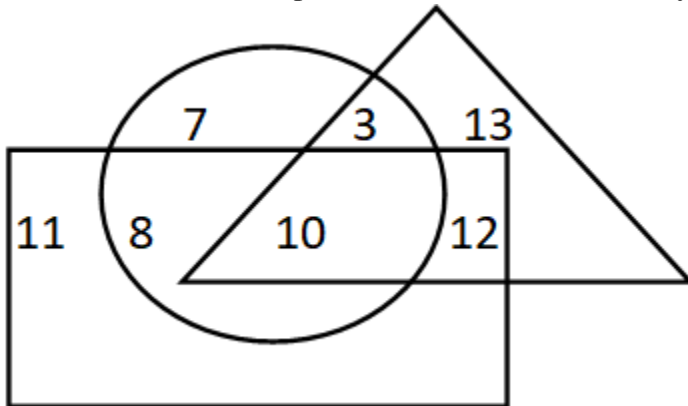


D.



Answer: B

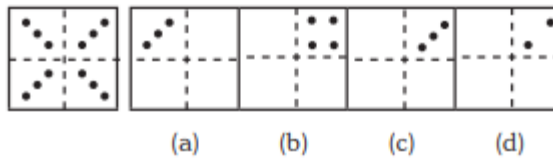
60. If triangle represents Women, rectangle represents Doctors and circle represents Lawyers.
Then which number represents Women that are Lawyer but not Doctor?



- A. 10
- B. 12
- C. 8
- D. 3

Answer: D

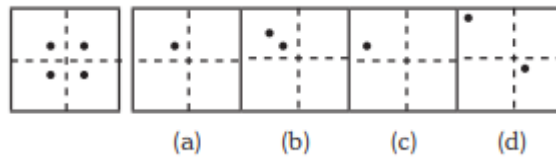
61.



- A. Only C
- B. Only D
- C. Both C & D
- D. None of these

Answer: A

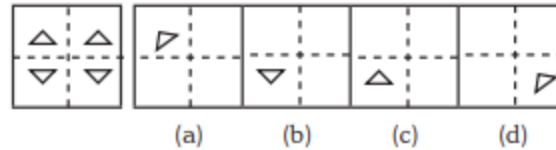
62.



- A. Only A
- B. Both A and B
- C. Only C
- D. Only D

Answer: A

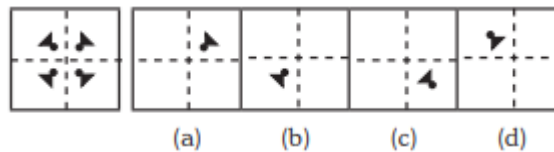
63.



- A. Option B
- B. Option A
- C. Both A & C
- D. Only D

Answer: A

64.



- A. Only A
- B. B
- C. C
- D. D

Answer: A

65. 3 pipes A, B and C can fill a tank in 30 minutes, 40 minutes, and 120 minutes, respectively. If all the pipes are opened together, how much time is required to fill the tank?

- A. 12 minutes
- B. 15 minutes
- C. 18 minutes
- D. 20 minutes

Answer: B

66. 3 pipes can fill a bucket in 20minutes, 30 minutes and 60 minutes, respectively. If all the pipes are opened for 5 minutes what percentage of the tank will be filled.

- A. 50%
- B. 60%
- C. 75%
- D. 100%

Answer: A

67. There are three pipes connected to a tank. The first two can fill the tank in 20 minutes and 30 minutes, respectively. The third pipe can empty the entire tank in 5 minutes. If all the pipes are opened simultaneously, what time will it take to empty the tank?

- A. 8.55 minutes
- B. 8.56 minutes

Olevel/Alevel

- C. 8.57 minutes
- D. 8.58 minutes

Answer: C

68. 2 pipes can empty a tank in 70 minutes and 140 minutes, respectively. If a third pipe can fill the tank in 7 minutes, find the time required to fill the tank if all the pipes are opened simultaneously.

- A. 7.23 minutes
- B. 8.23 minutes
- C. 8.57 minutes
- D. 8.88 minutes

Answer: B

69. A mixture containing 20% milk is mixed with another mixture containing 60% milk in the ratio 8 : 13. Find the percentage of milk in the new mixture.

- A. 37.14%
- B. 36.65%
- C. 35.57%
- D. 34.24%

Answer:A

70. A mixture containing 66% of acid is mixed with another mixture containing 35% of acid in the ratio 2 : 5. Find the percentage of acid in the mixture formed.

- A. 45%
- B. 46%
- C. 47%
- D. 48%

Answer: B

71. Introducing a woman, a man said, "Her husband is the only son of my father". How is that woman related to the man?

- A. Husband
- B. Sister
- C. Wife
- D. Mother

Answer: C

72. Q's mother is the sister of P and daughter of S. A is the son of P and Brother of H. G is the father of H. How is S related to G?

- A. Nephew
- B. Son-in-law
- C. Grandfather

Olevel/Alevel

D. Father-in-law

Answer: D

73. R is the son of A's father's sister. S is son of D, who is the mother of G and grandmother of A. H is the father of T and grandfather of R. D is wife of H. How is R related to D?

- A. Nephew
- B. Son
- C. Grandson
- D. Insufficient Data

Answer: C

74. Pointing towards a person a woman said to man, "His father is the only son of your mother". How is the man related to that person?

- A. Brother
- B. Father
- C. Son
- D. Husband

Answer: B

75. Introducing a child, a woman said, "He is the son of my father's only daughter". How is that woman related to the child?

- A. Mother
- B. Sister
- C. Wife
- D. Daughter

Answer: A

76. HSNT : EPKQ :: DTHL : ?

- A. ABCD
- B. UEJM
- C. WXYZ
- D. AQEI

Answer: D

77. Umbriel : Uranus :: Janus : ?

- A. Jupiter
- B. Mars
- C. Uranus
- D. Saturn

Answer: D

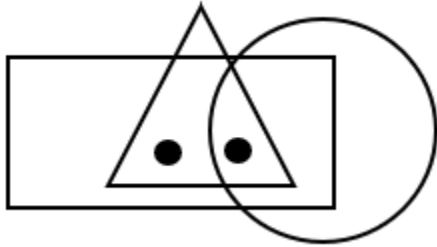
78. Kurnool : Andhra Pradesh :: Aizawl : ?

Olevel/Alevel

- A. Nagaland
- B. Meghalaya
- C. West Bengal
- D. Mizoram

Answer: D

79. Identify the figure which satisfies the same condition of placement of dots as in given figure.



- A.
- B.
- C.
- D.

Answer: C

80. Find odd one out from the given jumbled words: LNUAIMMIU, ELEST, OPERPC, NMKOYE, INCKLE

- A. NMKOYE
- B. OPERPC
- C. INCKLE
- D. ELEST

Answer: A

81. Find the odd one out.

- A. BEK
- B. CFL

Olevel/Alevel

C. MPS

D. GJP

Answer: C

82. In a certain code “564” means “study very hard”, “736” means “hard work pays” and “423” means “study and work”. Which of the following is the code for “work”?

A. 5

B. 3

C. 6

D. 4

Answer: B

83. If ‘white’ is called ‘yellow’, ‘yellow’ is called ‘blue’, ‘blue’ is called ‘red’, ‘red’ is called ‘black’, ‘black’ is called ‘violet’ and ‘violet’ is called ‘green’, then what would be the colour of light emitting from bulb?

A. Blue

B. Red

C. Yellow

D. Black

Answer: A

84. If the letters of the word “PRODUCT” are arranged alphabetically, then which letter would be farthest from the second letter of word?

A. T

B. R

C. U

D. P

Answer: C

85. Milly introduced a boy as the son of the only daughter of the mother of her maternal uncle. How is Milly related to that boy?

A. Nephew

B. Son

C. Brother

D. Sister

Answer: D

86. If ‘A&B’ means A is father of B, ‘A*B’ means A is brother of B, ‘A\$B’ means A is mother of B then which of the following is correct about K\$T&M?

A. M is brother of T

B. T is son of K

C. M is father of T

Olevel/Alevel

D. K is mother of M

Answer: B

87. Ankita's younger brother Bobby is older than Nilu. Shweta is younger than Rahul but elder than Ankita. Who is the eldest?

- A. Rahul
- B. Shweta
- C. Ankita
- D. Bobby

Answer: A

88. How many even numbers are there in the following series of numbers, each of which is immediately preceded by an odd number, but not immediately followed by an even number?

"6 2 8 9 1 3 4 5 7 5 8 9 7 9 10 8 1 4 9 2 6"

- A. 4
- B. 3
- C. 2
- D. 1

Answer: B

89. ADLK : CFNM :: GRSP : ?

- A. WXYZ
- B. GHJK
- C. ABCD
- D. ITUR

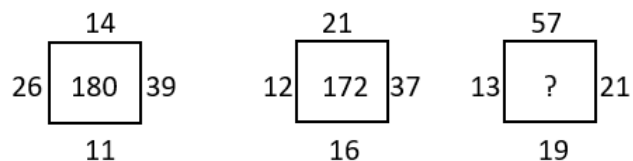
Answer: D

90. Pointing towards a person a woman said to man, "His father is the only son of your mother". How is the man related to that person?

- A. Husband
- B. Son
- C. Father
- D. Brother

Answer: C

91. Find the correct alternative which will replace the question mark?



- A. 107
- B. 220

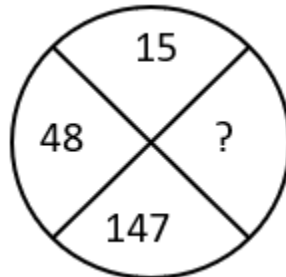
Olevel/Alevel

C. 285

D. 164

Answer: B

92. Find the correct alternative which will replace the question mark?



A. 444

B. 445

C. 446

D. 447

Answer: A

93. Choose the figure which is different from the rest?



(A)

(B)

(C)

(D)

A. Fig A

B. Fig B

C. Fig C

D. Fig D

Answer: A

94. A cage had 15 birds. All but seven manages to escape. How many birds remain?

A. 7

B. 12

C. 15

D. 8

Answer: A

95. Find the angle between minute hand and hour hand at 6:30 AM

A. 25°

B. 22.5°

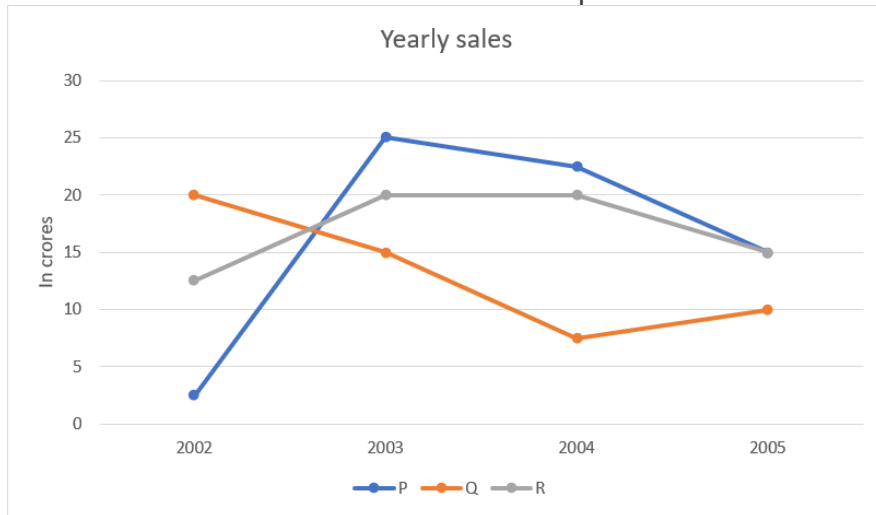
C. 15°

D. None of these

Olevel/Alevel

Answer: C

96. Study the graph and find what is the difference between maximum and minimum sales of p.



- A. 22.5
- B. 25
- C. 27.5
- D. 35

Answer: A

97. An unbiased dice is thrown. What is the probability of getting 5 or a greater number?

- A. $\frac{2}{3}$
- B. $\frac{5}{6}$
- C. $\frac{1}{3}$
- D. $\frac{1}{6}$

Answer: D

98. A and B are brothers. M is the mother of A and D is brother of S. K is sister of B and mother of S. What is the relationship between K and M?

- A. Sister and Brother
- B. Grandson and Grandmother
- C. Nephew and Aunt
- D. Daughter and Mother

Answer: D

99. When my parents married their age was in a ratio 11 : 10 (father's age : mother's age). This year they celebrated 15th anniversary. If the total of

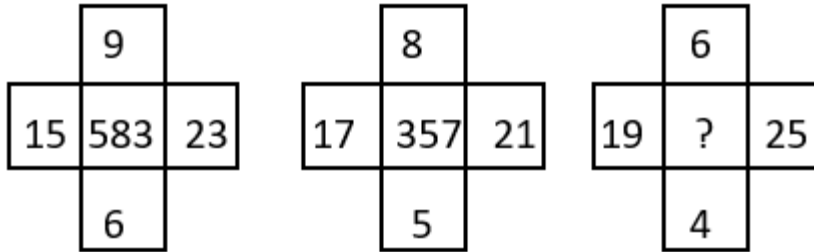
Olevel/Alevel

their ages at their silver jubilee anniversary will be 113, find my father's age now.

- A. 33 years
- B. 40 years
- C. 42 years
- D. 43 years

Answer: D

100. Find the correct alternative which will replace the question mark?



- A. 765
- B. 254
- C. 356
- D. 432

Answer: D

IGCSEs Intelligence Questions (IQ) Past Paper

1. Mathematics is related to numbers in the same way as History is related to _____?

- A. People
- B. Events
- C. Dates
- D. Wars

Answer: B

2. Bag is related to Luggage in the same way as Ship is related to _____?

- A. Coal
- B. Stock
- C. Cargo
- D. Weight

Answer: C

3. Mirror is related to Reflection in the same way as Water is related to _____?

- A. Conduction
- B. Dispersion
- C. Immersion
- D. Refraction

Answer: D

4. What will come next in the following series?

35 45 ? 65 75

- A. 55
- B. 80
- C. 47
- D. 84

Answer: A

5. If SKYLAND is coded as 7948312, then LAND is coded as _____

- A. 8312
- B. 7948
- C. 9483
- D. 8321
- E. None

Answer: A

6. If STRANGER is to 97524687, then ANGER is to _____

- A. 24687
- B. 26487
- C. 64287
- D. 26489

IGCSEs Intelligence Questions (IQ) Past Paper

E. 98462

Answer: A

7. Which one is different from the rest?

- A. Similar
- B. Equivalent
- C. Like
- D. Same
- E. Distinguish

Answer: E

8. Which one is different from the rest?

- A. Fullback
- B. Fine leg
- C. Centre half
- D. Defender
- E. Half side

Answer: B

9. Which one is different from the rest?

- A. Tooth
- B. Spoon
- C. Plate
- D. Tray
- E. Knife

Answer: A

10. If SHOUT is to 81397 then HOT is to _____

- A. 137
- B. 237
- C. 731
- D. 813
- E. 318

Answer: A

11. Which one is different from the rest?

- A. Kiwi
- B. Sparrow
- C. Crow
- D. Eagle

IGCSEs Intelligence Questions (IQ) Past Paper

E. Parrot

Answer: A

12. Find out the odd man out?

- A. Cloth
- B. Thin
- C. Colorful
- D. Glitter
- E. Bright

Answer: A

13. If RIVER is coded as 12345 and FEAVER is to 647345 then what stand for EAR

- A. 375
- B. 465
- C. 275
- D. 475
- E. 654

Answer: D

14. If SECRET is coded as 102807 then ERRECT is coded as _____

- A. 088027
- B. 088007
- C. 808027
- D. 088072
- E. 008827

Answer: A

15. If TOMORROW is to 56768869 then ROW is to _____

- A. 576
- B. 688
- C. 896
- D. 869

Answer: D

16. If the highest number is added to the first number and divided by the third number.

What will be the answer?

10 15 5

- A. 4
- B. 2
- C. 6

IGCSEs Intelligence Questions (IQ) Past Paper

21. What will come next in the following series?

7 4 12 17 30 48 _____

- A. 11
- B. 36
- C. 48
- D. 79

Answer: D

22. What will come next in the following series?

48 24 20 10 6 _____

- A. 1
- B. 0
- C. -1
- D. None of above

Answer: C

23. What will come next?

$$7+2-1 = H$$

$$22+6-5 = W$$

$$11+6-2 = ?$$

- A. O
- B. P
- C. Q
- D. W

Answer: A

24. Which one is different from the rest?

- A. Sword
- B. Knife
- C. **Fork**
- D. Dagger

Answer: C

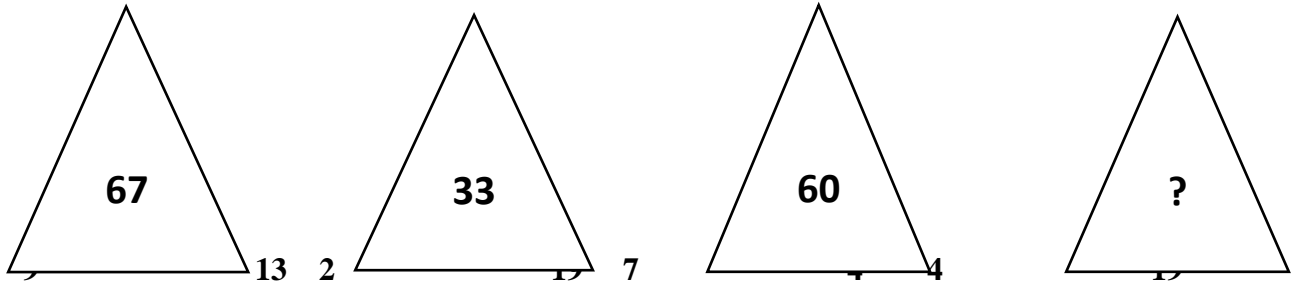
25. Looking on a portrait, a man said, that man is my father's son.

I have no brother & sister what is He to Me?

- A. Cousin
- B. Uncle
- C. Brother
- D. **Own picture**

Answer: D

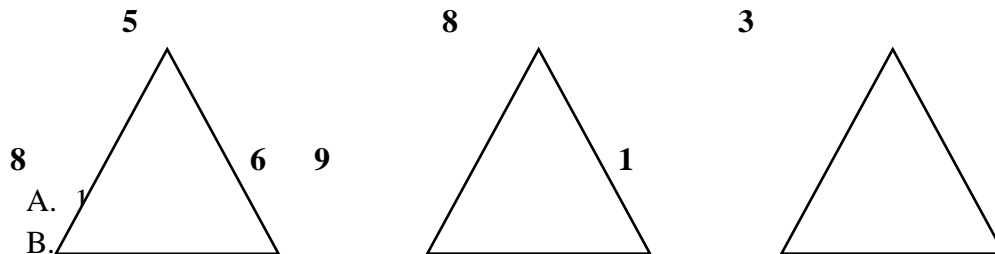
IGCSEs Intelligence Questions (IQ) Past Paper



- A. 49
- B. 7
- C. 40
- D. 2

Answer: A

32. What no should replace the question mark?



- A. 1
- B. 11
- C. 11
- D. 8

Answer: A

33. Which word does not belong to the list?

- A. Oil
- B. Petrol
- C. **Liquid**
- D. Spirit
- E. Water

Answer: C

34. December is to October as June is to _____.

- A. May
- B. August
- C. October
- D. **April**

Answer: D

IGCSEs Intelligence Questions (IQ) Past Paper

35. What number comes next in the following series?

20 15 18 13 16 11

- A. 10
- B. 19
- C. 26
- D. 14

Answer: D

36. What will be the answer if you add all even numbers in series and divide it by the middle figure?

3 4 5 6 7 8 9

- A. 4
- B. 11
- C. 3
- D. 7

Answer: 3

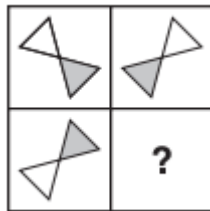
37. What number comes next in the following series?

2 4 5 10 11 22 23 46 _____

- A. 47
- B. 48
- C. 50
- D. 55

Answer: A

38. Which Shape completes the larger square?



A.



B.



IGCSEs Intelligence Questions (IQ) Past Paper

C.



D.



Asnwer: C.

39. Which one comes next?



A.




B.



C.



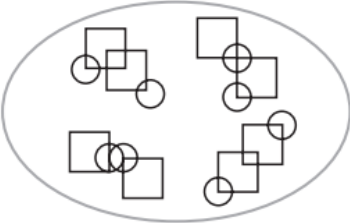
D.



Asnwer: D.

40. Which pattern on the right belongs in the group on the left?

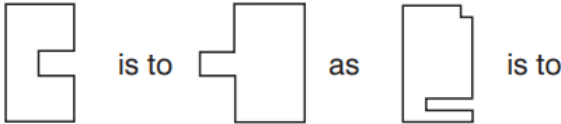
IGCSEs Intelligence Questions (IQ) Past Paper



- A.
- B.
- C.
- D.

Answer: D.

41. Which shape completes the second pair in the same way as the first pair?



IGCSEs Intelligence Questions (IQ) Past Paper

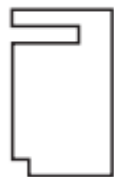
A.



B.



C.

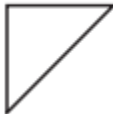


D.

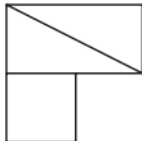


Answer: D.

42. In which larger shape is the shape on the left hidden?



A.

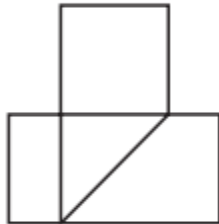


IGCSEs Intelligence Questions (IQ) Past Paper

B.



C.

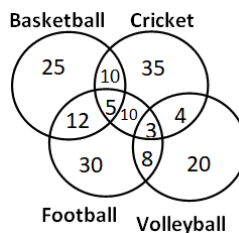


D.



Answer: C.

43. The following diagram shows the number of children playing Basketball, Cricket, Football and Volleyball. If the total number of children is 400, what is the percentage of children playing at least two games?




- A. 8
- B. 6
- C. 9.25
- D. 13

Answer: D

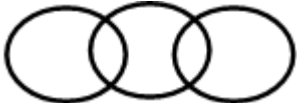
44. Which of the following diagram correctly represents the relationship among Teacher, Scientist and Graduate?

IGCSEs Intelligence Questions (IQ) Past Paper

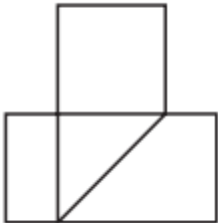
A.



B.



C.




D.



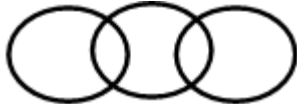
Answer: A

45. Which of the following diagram depicts the relation among Currency, Dinar and Rupee.

A.

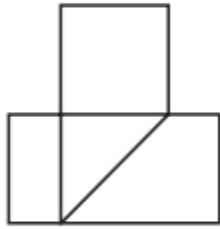


B.

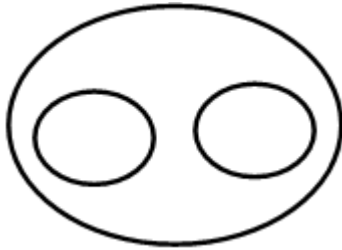


IGCSEs Intelligence Questions (IQ) Past Paper

C.



D.



Answer: D

46. The purchase price of an article is 20% less than the profit made. Find the profit if the selling price is 360 rupees.

Olevel/Alevel

- A. 180 rupees
- B. 240 rupees
- C. 200 rupees
- D. 160 rupees

Answer: C

47. The cost price of an article is 1.56 times the selling price. Find the loss percentage.

- A. 37.8%
- B. 35.9%
- C. 39.5%
- D. 34.5%

Answer: B

48. A shopkeeper purchased an article for 500 rupees. At what price should he mark the article to allow a discount of 35% and still earn 100% profit.

- A. 1599 rupees
- B. 1523 rupees
- C. 1575 rupees
- D. 1539 rupees

Answer: D

49. A group of 5 men or 12 women can do a task in 78 days. Find the time taken by 5 men and 12 women to complete the task.

- A. 39 days
- B. 36 days
- C. 29 days
- D. 26 days

Answer: A

50. The speed of a train is 120 kmph and the length of the train is 240 m. Find the time it will take to cross a pole.

- A. 9.6 seconds
- B. 7.2 seconds
- C. 4.8 seconds
- D. 2.4 seconds

Answer: C

51. If triangle represents women, rectangle represents educated person and circle represent government jobs. Then which number represents educated women who are not in government job?

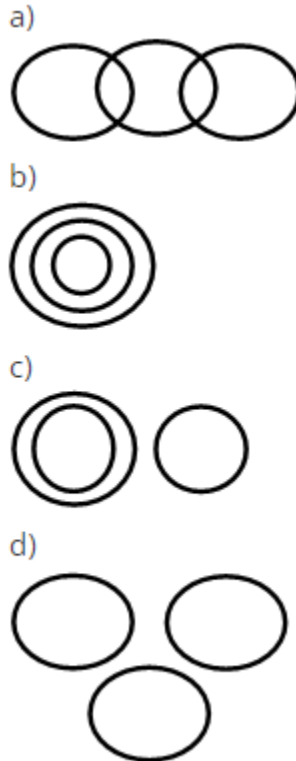
- A. 10

Olevel/Alevel

- B. 12
- C. 8
- D. 3

Answer: B

52. Which of the following figures shows relation between Trains, Goods and Truck?



- A. Only a)
- B. Both a & d
- C. Only c)
- D. None of Above

Answer: A

53.If 14th October 2005 is Friday then which day is 14th

October 2006?

- A. Tuesday
- B. Saturday
- C. Thursday
- D. Friday

Answer: B

54.If today is Monday then which day of the week is

after 59 days.

- A. Tuesday

Olevel/Alevel

- B. Wednesday
- C. Thursday
- D. Friday

Answer: B

55. If 14th October 2005 is Friday then which day is 14th October 2009?

- A. Tuesday
- B. Wednesday
- C. Thursday
- D. Friday

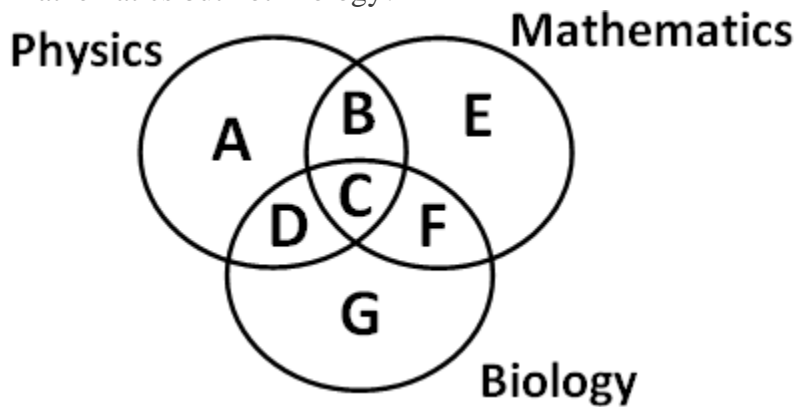
Answer: B

56. Kunal walks 10 kilometres towards North. From there, he walks 6 kilometres towards south. Then, he walks 3 kilometres towards east. How far and in which direction is he with reference to his starting point?

- A. 5 kilometres West
- B. 5 kilometres North-east
- C. 7 kilometres East
- D. 7 kilometres West
- E. None of these

Answer: E

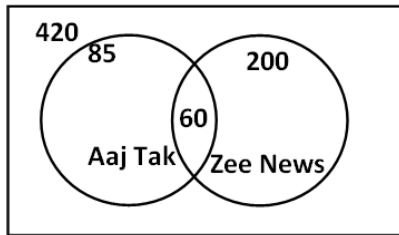
57. Which of the region in the following figure represents students who study both Physics and Mathematics but not Biology?



- A. B+C+D+F
- B. C
- C. A+E
- D. B

Answer: D

58. From the figure given below, determine the number of people who did not watch any news channel.

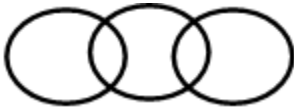


- A. 135
- B. 75
- C. 195
- D. 175

Answer: C

59. Which of the following figures correctly represents the relation between Machine, Lathe and Thermodynamics?

A.



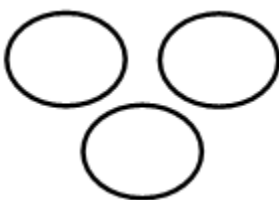
B.



C.

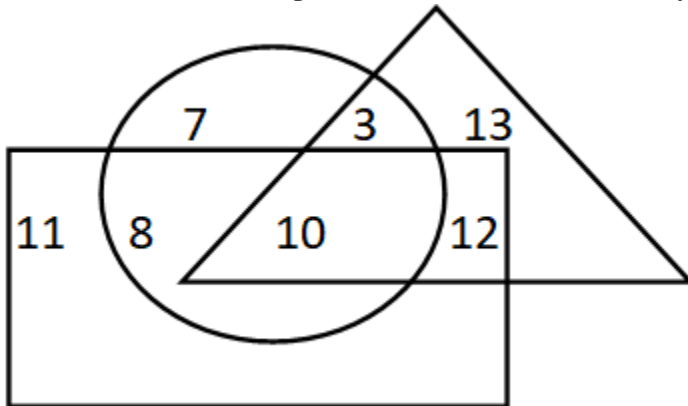


D.



Answer: B

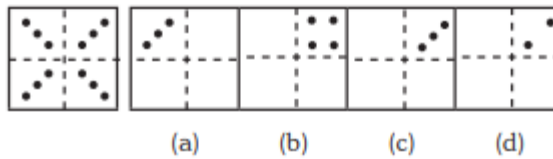
60. If triangle represents Women, rectangle represents Doctors and circle represents Lawyers.
Then which number represents Women that are Lawyer but not Doctor?



- A. 10
- B. 12
- C. 8
- D. 3

Answer: D

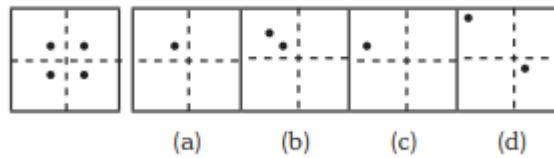
61.



- A. Only C
- B. Only D
- C. Both C & D
- D. None of these

Answer: A

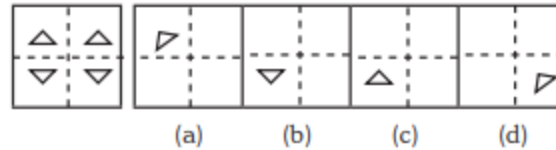
62.



- A. Only A
- B. Both A and B
- C. Only C
- D. Only D

Answer: A

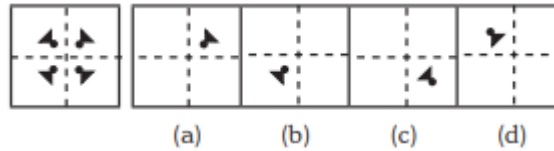
63.



- A. Option B
- B. Option A
- C. Both A & C
- D. Only D

Answer: A

64.



- A. Only A
- B. B
- C. C
- D. D

Answer: A

65. 3 pipes A, B and C can fill a tank in 30 minutes, 40 minutes, and 120 minutes, respectively. If all the pipes are opened together, how much time is required to fill the tank?

- A. 12 minutes
- B. 15 minutes
- C. 18 minutes
- D. 20 minutes

Answer: B

66. 3 pipes can fill a bucket in 20minutes, 30 minutes and 60 minutes, respectively. If all the pipes are opened for 5 minutes what percentage of the tank will be filled.

- A. 50%
- B. 60%
- C. 75%
- D. 100%

Answer: A

67. There are three pipes connected to a tank. The first two can fill the tank in 20 minutes and 30 minutes, respectively. The third pipe can empty the entire tank in 5 minutes. If all the pipes are opened simultaneously, what time will it take to empty the tank?

- A. 8.55 minutes
- B. 8.56 minutes

Olevel/Alevel

- C. 8.57 minutes
- D. 8.58 minutes

Answer: C

68. 2 pipes can empty a tank in 70 minutes and 140 minutes, respectively. If a third pipe can fill the tank in 7 minutes, find the time required to fill the tank if all the pipes are opened simultaneously.

- A. 7.23 minutes
- B. 8.23 minutes
- C. 8.57 minutes
- D. 8.88 minutes

Answer: B

69. A mixture containing 20% milk is mixed with another mixture containing 60% milk in the ratio 8 : 13. Find the percentage of milk in the new mixture.

- A. 37.14%
- B. 36.65%
- C. 35.57%
- D. 34.24%

Answer:A

70. A mixture containing 66% of acid is mixed with another mixture containing 35% of acid in the ratio 2 : 5. Find the percentage of acid in the mixture formed.

- A. 45%
- B. 46%
- C. 47%
- D. 48%

Answer: B

71. Introducing a woman, a man said, "Her husband is the only son of my father". How is that woman related to the man?

- A. Husband
- B. Sister
- C. Wife
- D. Mother

Answer: C

72. Q's mother is the sister of P and daughter of S. A is the son of P and Brother of H. G is the father of H. How is S related to G?

- A. Nephew
- B. Son-in-law
- C. Grandfather

Olevel/Alevel

D. Father-in-law

Answer: D

73. R is the son of A's father's sister. S is son of D, who is the mother of G and grandmother of A. H is the father of T and grandfather of R. D is wife of H. How is R related to D?

- A. Nephew
- B. Son
- C. Grandson
- D. Insufficient Data

Answer: C

74. Pointing towards a person a woman said to man, "His father is the only son of your mother". How is the man related to that person?

- A. Brother
- B. Father
- C. Son
- D. Husband

Answer: B

75. Introducing a child, a woman said, "He is the son of my father's only daughter". How is that woman related to the child?

- A. Mother
- B. Sister
- C. Wife
- D. Daughter

Answer: A

76. HSNT : EPKQ :: DTHL : ?

- A. ABCD
- B. UEJM
- C. WXYZ
- D. AQEI

Answer: D

77. Umbriel : Uranus :: Janus : ?

- A. Jupiter
- B. Mars
- C. Uranus
- D. Saturn

Answer: D

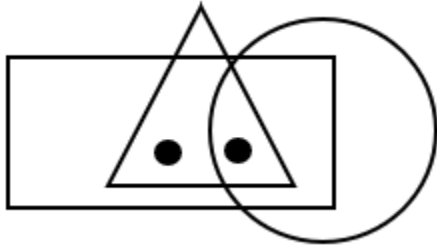
78. Kurnool : Andhra Pradesh :: Aizawl : ?

Olevel/Alevel

- A. Nagaland
- B. Meghalaya
- C. West Bengal
- D. Mizoram

Answer: D

79. Identify the figure which satisfies the same condition of placement of dots as in given figure.



- A.
- B.
- C.
- D.

Answer: C

80. Find odd one out from the given jumbled words: LNUAIMMIU, ELEST, OPERPC, NMKOYE, INCKLE

- A. NMKOYE
- B. OPERPC
- C. INCKLE
- D. ELEST

Answer: A

81. Find the odd one out.

- A. BEK
- B. CFL

Olevel/Alevel

C. MPS

D. GJP

Answer: C

82. In a certain code “564” means “study very hard”, “736” means “hard work pays” and “423” means “study and work”. Which of the following is the code for “work”?

A. 5

B. 3

C. 6

D. 4

Answer: B

83. If ‘white’ is called ‘yellow’, ‘yellow’ is called ‘blue’, ‘blue’ is called ‘red’, ‘red’ is called ‘black’, ‘black’ is called ‘violet’ and ‘violet’ is called ‘green’, then what would be the colour of light emitting from bulb?

A. Blue

B. Red

C. Yellow

D. Black

Answer: A

84. If the letters of the word “PRODUCT” are arranged alphabetically, then which letter would be farthest from the second letter of word?

A. T

B. R

C. U

D. P

Answer: C

85. Milly introduced a boy as the son of the only daughter of the mother of her maternal uncle. How is Milly related to that boy?

A. Nephew

B. Son

C. Brother

D. Sister

Answer: D

86. If ‘A&B’ means A is father of B, ‘A*B’ means A is brother of B, ‘A\$B’ means A is mother of B then which of the following is correct about K\$T&M?

A. M is brother of T

B. T is son of K

C. M is father of T

Olevel/Alevel

D. K is mother of M

Answer: B

87. Ankita's younger brother Bobby is older than Nilu. Shweta is younger than Rahul but elder than Ankita. Who is the eldest?

- A. Rahul
- B. Shweta
- C. Ankita
- D. Bobby

Answer: A

88. How many even numbers are there in the following series of numbers, each of which is immediately preceded by an odd number, but not immediately followed by an even number?

"6 2 8 9 1 3 4 5 7 5 8 9 7 9 10 8 1 4 9 2 6"

- A. 4
- B. 3
- C. 2
- D. 1

Answer: B

89. ADLK : CFNM :: GRSP : ?

- A. WXYZ
- B. GHJK
- C. ABCD
- D. ITUR

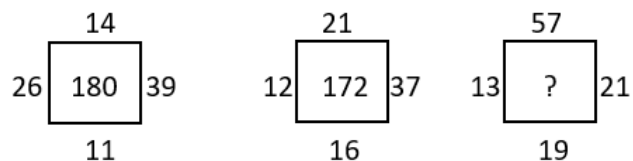
Answer: D

90. Pointing towards a person a woman said to man, "His father is the only son of your mother". How is the man related to that person?

- A. Husband
- B. Son
- C. Father
- D. Brother

Answer: C

91. Find the correct alternative which will replace the question mark?



- A. 107
- B. 220

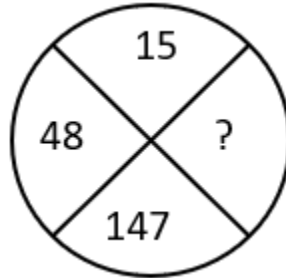
Olevel/Alevel

C. 285

D. 164

Answer: B

92. Find the correct alternative which will replace the question mark?



A. 444

B. 445

C. 446

D. 447

Answer: A

93. Choose the figure which is different from the rest?



(A)

(B)

(C)

(D)

A. Fig A

B. Fig B

C. Fig C

D. Fig D

Answer: A

94. A cage had 15 birds. All but seven manages to escape. How many birds remain?

A. 7

B. 12

C. 15

D. 8

Answer: A

95. Find the angle between minute hand and hour hand at 6:30 AM

A. 25°

B. 22.5°

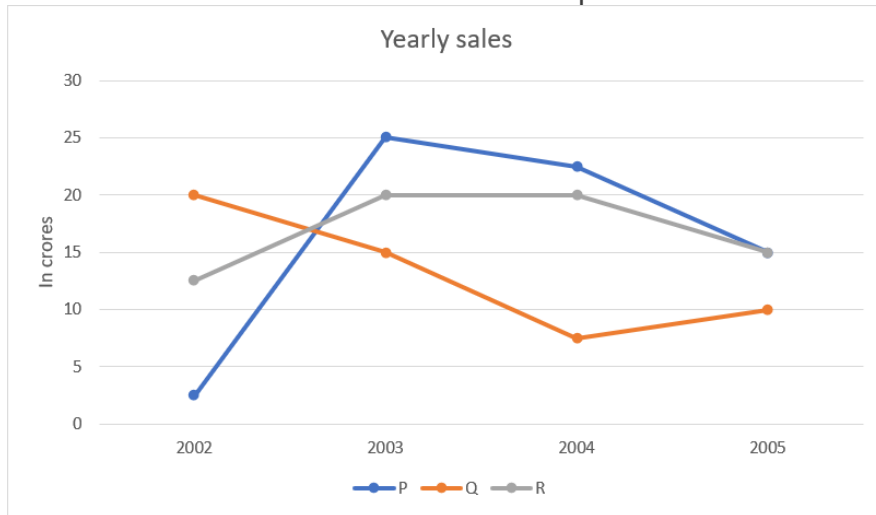
C. 15°

D. None of these

Olevel/Alevel

Answer: C

96. Study the graph and find what is the difference between maximum and minimum sales of p.



- A. 22.5
- B. 25
- C. 27.5
- D. 35

Answer: A

97. An unbiased dice is thrown. What is the probability of getting 5 or a greater number?

- A. $\frac{2}{3}$
- B. $\frac{5}{6}$
- C. $\frac{1}{3}$
- D. $\frac{1}{6}$

Answer: D

98. A and B are brothers. M is the mother of A and D is brother of S. K is sister of B and mother of S. What is the relationship between K and M?

- A. Sister and Brother
- B. Grandson and Grandmother
- C. Nephew and Aunt
- D. Daughter and Mother

Answer: D

99. When my parents married their age was in a ratio 11 : 10 (father's age : mother's age). This year they celebrated 15th anniversary. If the total of

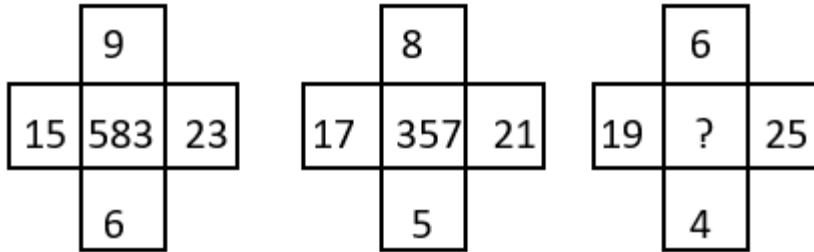
Olevel/Alevel

their ages at their silver jubilee anniversary will be 113, find my father's age now.

- A. 33 years
- B. 40 years
- C. 42 years
- D. 43 years

Answer: D

100. Find the correct alternative which will replace the question mark?

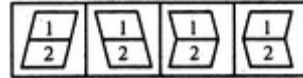
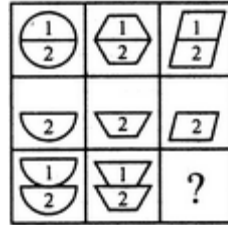


- A. 765
- B. 254
- C. 356
- D. 432

Answer: D

Bachelors Intelligence Questions (IQ) Past Paper

1. Select a suitable figure from the four alternatives that would complete the figure matrix.

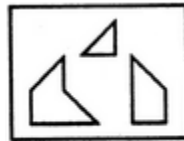


(1) (2) (3) (4)

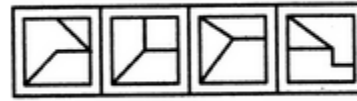
- A. 1
B. 2
C. 3
D. 4

Answer: C

2. Find out which of the figures (1), (2), (3) and (4) can be formed from the pieces given in figure (X).



(X)



(1) (2) (3) (4)

- A. 1
B. 2
C. 3
D. 4

Answer: A

3. Find out which of the figures (1), (2), (3) and (4) can be formed from the pieces given in figure (X).



(X)



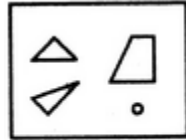
(1) (2) (3) (4)

- A. 1
B. 2
C. 3
D. 4

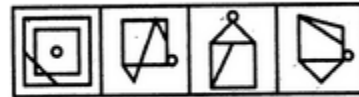
Answer: C

4. Find out which of the figures (1), (2), (3) and (4) can be formed from the pieces given in figure (X).

Bachelors Intelligence Questions (IQ) Past Paper



(X)



(1) (2) (3) (4)

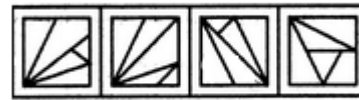
- A. 1
- B. 2
- C. 3
- D. 4

Answer: C

5. Find out which of the figures (1), (2), (3) and (4) can be formed from the pieces given in figure (X).



(X)

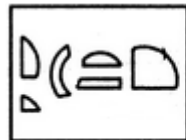


(1) (2) (3) (4)

- A. 1
- B. 2
- C. 3
- D. 4

Answer: 3

6. Find out which of the figures (1), (2), (3) and (4) can be formed from the pieces given in figure (X).



(X)

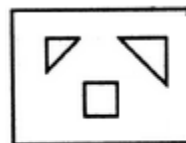


(1) (2) (3) (4)

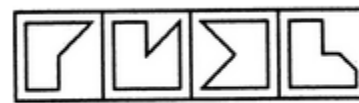
- A. 1
- B. 2
- C. 3
- D. 4

Answer: A

7. Find out which of the figures (1), (2), (3) and (4) can be formed from the pieces given in figure (X).



(X)



(1) (2) (3) (4)

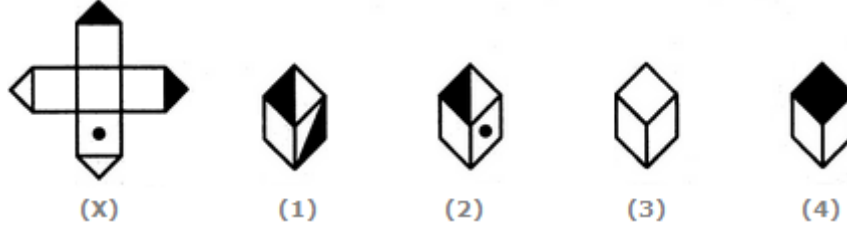
- A. 1
- B. 2

Bachelors Intelligence Questions (IQ) Past Paper

- C. 3
- D. 4

Answer: A

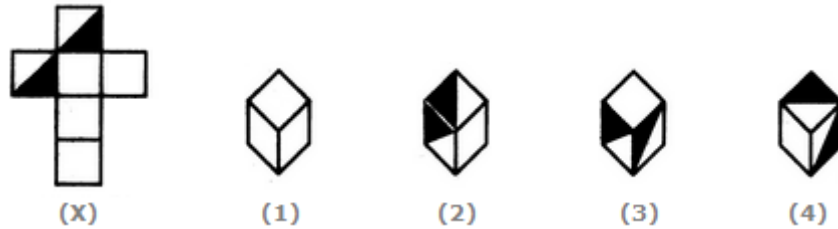
8. Choose the box that is similar to the box formed from the given sheet of paper (X).



- A. 1 and 2 only
- B. 2 and 4 only
- C. 2 and 3 only
- D. 1 and 4 only

Answer: C

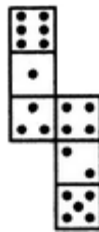
9. Choose the box that is similar to the box formed from the given sheet of paper (X).



- A. 1 and 4 only
- B. 3 and 4 only
- C. 1 and 2 only
- D. 2 and 3 only

Answer: A

10. How many dots lie opposite to the face having three dots, when the given figure is folded to form a cube?

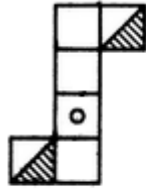


- A. 2
- B. 4
- C. 5
- D. 6

Answer: D

11. Choose the box that is similar to the box formed from the given sheet of paper (X).

Bachelors Intelligence Questions (IQ) Past Paper



(X)



(1)



(2)



(3)

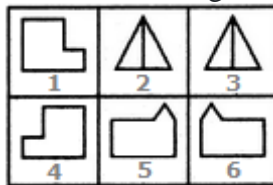


(4)

- A. 1 and 3 only
- B. 1 and 4 only
- C. 2 and 4 only
- D. 3 and 4 only

Answer: A

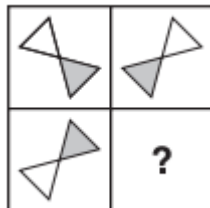
12. Group the given figures into three classes using each figure only once.



- A. 1,4 ; 2,3 ; 5,6
- B. 1,5 ; 2,6 ; 4,3
- C. 1,6 ; 2,3 ; 4,5
- D. 1,2 ; 3,6 ; 4,5

Answer: A

13. Which Shape completes the larger square?



A.



B.



C.



Bachelors Intelligence Questions (IQ) Past Paper

D.



Answer: C.

14. Which one comes next?



A.



B.



C.

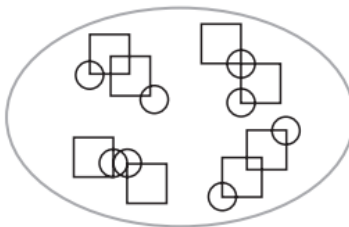


D.

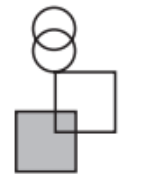
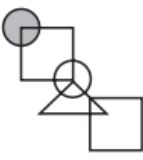
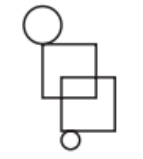
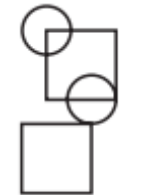


Answer: D.

15. Which pattern on the right belongs in the group on the left?

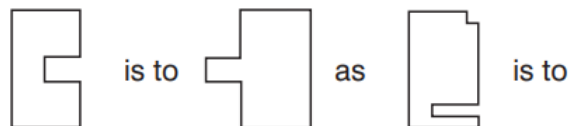




Bachelors Intelligence Questions (IQ) Past Paper

- A. 
- B. 
- C. 
- D. 

Answer: D.

16. Which shape completes the second pair in the same way as the first pair?



- A. 
- B. 

Bachelors Intelligence Questions (IQ) Past Paper

C.



D.

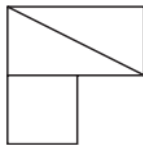


Answer: D.

17. In which larger shape is the shape on the left hidden?



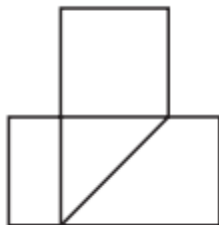
A.



B.



C.



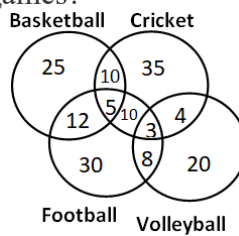
Bachelors Intelligence Questions (IQ) Past Paper

D.



Answer: C.

18. The following diagram shows the number of children playing Basketball, Cricket, Football and Volleyball. If the total number of children is 400, what is the percentage of children playing at least two games?

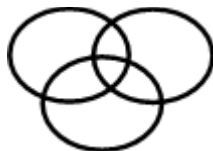


- A. 8
- B. 6
- C. 9.25
- D. 13

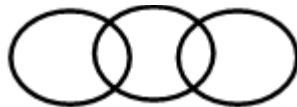
Answer: D

19. Which of the following diagram correctly represents the relationship among Teacher, Scientist and Graduate?

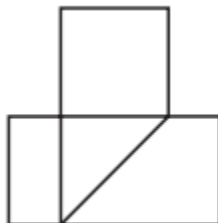
A.



B.



C.



Bachelors Intelligence Questions (IQ) Past Paper

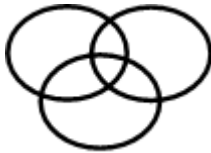
D.



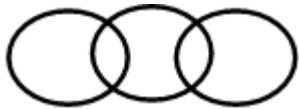
Answer: A

20. Which of the following diagram depicts the relation among Currency, Dinar and Rupee.

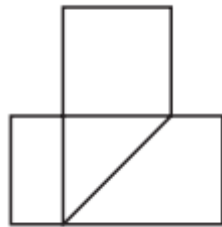
A.



B.



C.



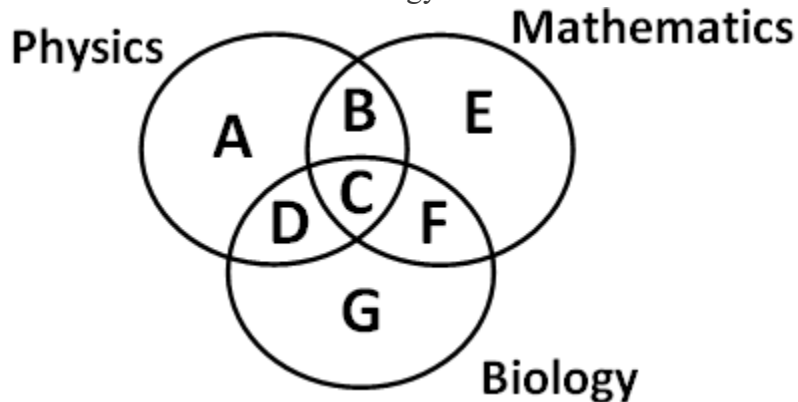
D.



Answer: D

Bachelors Intelligence Questions (IQ) Past Paper

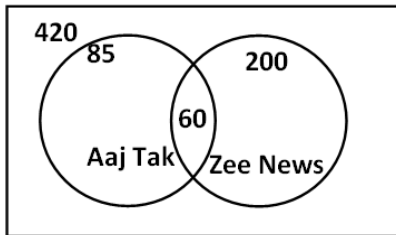
21. Which of the region in the following figure represents students who study both Physics and Mathematics but not Biology?



- a. $B+C+D+F$
- b. C
- c. $A+E$
- d. B

Answer: D

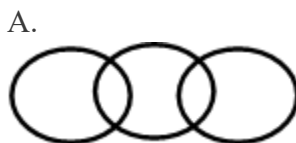
22. From the figure given below, determine the number of people who did not watch any news channel.



- a. 135
- b. 75
- c. 195
- d. 175

Answer: C

23. Which of the following figures correctly represents the relation between Machine, Lathe and Thermodynamics?

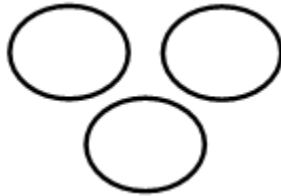


C.

Bachelors Intelligence Questions (IQ) Past Paper

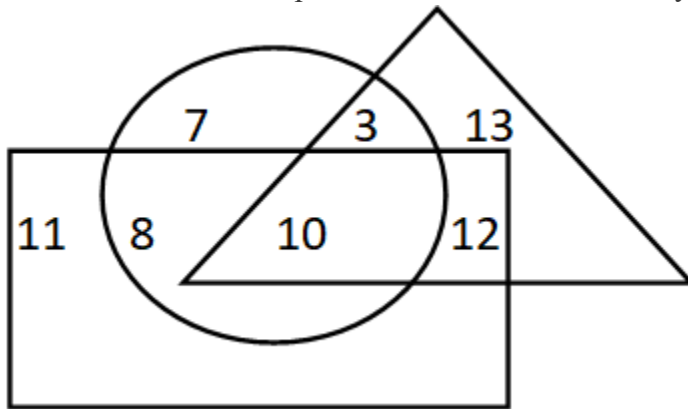


D.



Answer: B

24. If triangle represents Women, rectangle represents Doctors and circle represents Lawyers. Then which number represents Women that are Lawyer but not Doctor?



- a. 10
- b. 12
- c. 8
- d. 3

Answer: D

25.

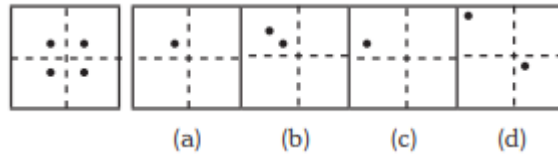


- a. Only C
- b. Only D
- c. Both C & D
- d. None of these

Answer: A

Bachelors Intelligence Questions (IQ) Past Paper

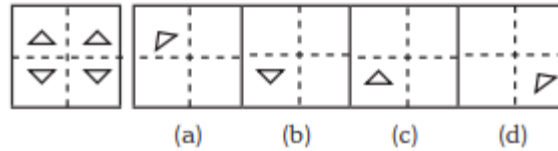
26.



- a. Only A
- b. Both A and B
- c. Only C
- d. Only D

Answer: A

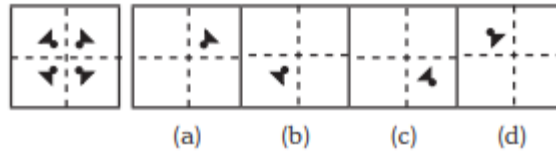
27.



- a. Option B
- b. Option A
- c. Both A & C
- d. Only D

Answer: A

28.



- a. Only A
- b. B
- c. C
- d. D

Answer: A

29. Statements: Some dogs are bats. Some bats are cats.

Conclusions:

1. Some dogs are cats.
 2. Some cats are dogs.
- A. Only (1) conclusion follows
 - B. Only (2) conclusion follows
 - C. Either (1) or (2) follows
 - D. Neither (1) nor (2) follows

Answer: D

30. Arrange the words given below in a meaningful sequence.

1. Income 2. Status 3. Education 4. Well-being 5. Job

- A. 3, 1, 5, 2, 4
- B. 1, 3, 2, 5, 4
- C. 1, 2, 5, 3, 4

Bachelors Intelligence Questions (IQ) Past Paper

D. 3, 5, 1, 2, 4

Answer: D

31. 3 pipes A, B and C can fill a tank in 30 minutes, 40 minutes, and 120 minutes, respectively. If all the pipes are opened together, how much time is required to fill the tank?
- A. 12 minutes
 - B. 15 minutes
 - C. 18 minutes
 - D. 20 minutes

Answer: B

32. A lady meets a person in the market who is the wife of the brother of her husband. How is the lady related to the person?
- A. cousin
 - B. sister
 - C. sister-in-law
 - D. nephew
 - E. None of these

Answer: C

33. Pointing out to a photograph, Swati said, “ he is the uncle of my brother’s sister”. How is the person in photograph related to Swati?
- A. uncle
 - B. father-in-law
 - C. brother
 - D. Grand father
 - E. None of these

Answer: A

34. Pointing to a lady, Vimal said, “she is the wife of my Grandfather’s son”. How is the lady related to Vimal?
- A. aunty
 - B. mother
 - C. grandmother
 - D. sister
 - E. None of these

Answer: B

35. A boy meets a girl in the party who introduces herself as the daughter of his grandfather’s daughter’s brother. How is the boy related to the girl?
- A. brother-in-law
 - B. uncle
 - C. brother
 - D. sister
 - E. None of these

Bachelors Intelligence Questions (IQ) Past Paper

Answer: C

36. When Rani saw Vinit, she recollected, "He is the brother of my grandfather's son". How is rani related to Vinit?
- A. Nephew
 - B. aunt
 - C. Daughter
 - D. sister
 - E. None of these

Answer: A

37. 3 pipes can fill a bucket in 20minutes, 30 minutes and 60 minutes, respectively. If all the pipes are opened for 5 minutes what percentage of the tank will be filled.
- A. 50%
 - B. 60%
 - C. 75%
 - D. 100%

Answer: A

38. There are three pipes connected to a tank. The first two can fill the tank in 20 minutes and 30 minutes, respectively. The third pipe can empty the entire tank in 5 minutes. If all the pipes are opened simultaneously, what time will it take to empty the tank?
- A. 8.55 minutes
 - B. 8.56 minutes
 - C. 8.57 minutes
 - D. 8.58 minutes

Answer: C

39. 2 pipes can empty a tank in 70 minutes and 140 minutes, respectively. If a third pipe can fill the tank in 7 minutes, find the time required to fill the tank if all the pipes are opened simultaneously.
- A. 7.23 minutes
 - B. 8.23 minutes
 - C. 8.57 minutes
 - D. 8.88 minutes

Answer: B

40. A mixture containing 20% milk is mixed with another mixture containing 60% milk in the ratio 8 : 13. Find the percentage of milk in the new mixture.
- A. 37.14%
 - B. 36.65%
 - C. 35.57%
 - D. 34.24%

Answer:A

Bachelors Intelligence Questions (IQ) Past Paper

41. A mixture containing 66% of acid is mixed with another mixture containing 35% of acid in the ratio 2 : 5. Find the percentage of acid in the mixture formed.

- A. 45%
- B. 46%
- C. 47%
- D. 48%

Answer: B

42. Introducing a woman, a man said, "Her husband is the only son of my father". How is that woman related to the man?

- A. Husband
- B. Sister
- C. Wife
- D. Mother

Answer: C

43. Q's mother is the sister of P and daughter of S. A is the son of P and Brother of H. G is the father of H. How is S related to G?

- A. Nephew
- B. Son-in-law
- C. Grandfather
- D. Father-in-law

Answer: D

44. R is the son of A's father's sister. S is son of D, who is the mother of G and grandmother of A. H is the father of T and grandfather of R. D is wife of H. How is R related to D?

- A. Nephew
- B. Son
- C. Grandson
- D. Insufficient Data

Answer: C

45. Pointing towards a person a woman said to man, "His father is the only son of your mother". How is the man related to that person?

- A. Brother
- B. Father
- C. Son
- D. Husband

Answer: B

46. Introducing a child, a woman said, "He is the son of my father's only daughter". How is that woman related to the child?

Bachelors Intelligence Questions (IQ) Past Paper

- A. Mother
- B. Sister
- C. Wife
- D. Daughter

Answer: A

47. HSNT : EPKQ :: DTHL : ?

- A. ABCD
- B. UEJM
- C. WXYZ
- D. AQEI

Answer: D

48. Umbriel : Uranus :: Janus : ?

- A. Jupiter
- B. Mars
- C. Uranus
- D. Saturn

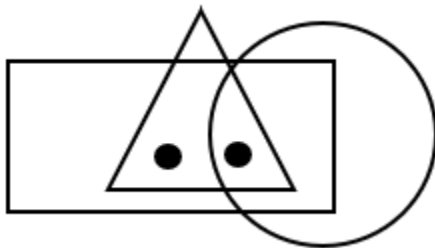
Answer: D

49. Kurnool : Andhra Pradesh :: Aizawl : ?

- A. Nagaland
- B. Meghalaya
- C. West Bengal
- D. Mizoram

Answer: D

50. Identify the figure which satisfies the same condition of placement of dots as in given figure.



E.



F.



Bachelors Intelligence Questions (IQ) Past Paper

G.



H.



Answer: C

51. Find odd one out from the given jumbled words: LNUAIMMIU, ELEST, OPERPC, NMKOYE, INCKLE

- A. NMKOYE
- B. OPERPC
- C. INCKLE
- D. ELEST

Answer: A

52. In the following question find out the alternative which will replace the question mark.

Conference : Chairman :: Newspaper : ?

- A. Reporter
- B. Distributor
- C. Printer
- D. Editor

Answer: D

53. The 30 members of a club decided to play a badminton singles tournament. Every time a member loses a game he is out of the tournament. There are no ties. What is the minimum number of matches that must be played to determine the winner ?

- A. 29
- B. 45
- C. 55
- D. None of These

Answer: A

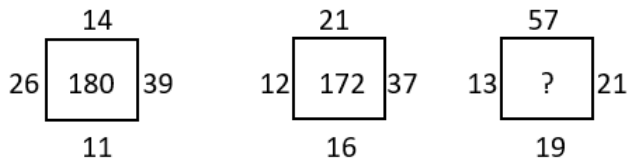
54. In a garden, there are 10 rows and 12 columns of mango trees. The distance between the two trees is 2 metres and a distance of one metre is left from all sides of the boundary of the garden. The length of the garden is

- A. 24 m
- B. 25 m
- C. 26 m
- D. 24 km

Answer: A

Bachelors Intelligence Questions (IQ) Past Paper

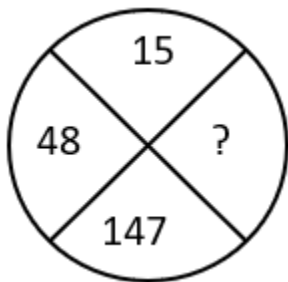
55. Find the correct alternative which will replace the question mark?



- A. 107
- B. 220
- C. 285
- D. 164

Answer: B

56. Find the correct alternative which will replace the question mark?



- A. 444
- B. 445
- C. 446
- D. 447

Answer: A

57. Choose the figure which is different from the rest?



(A) (B) (C) (D)

- A. Fig A
- B. Fig B
- C. Fig C
- D. Fig D

Answer: A

58. A cage had 15 birds. All but seven manages to escape. How many birds remain?

- A. 7
- B. 12
- C. 15
- D. 8

Bachelors Intelligence Questions (IQ) Past Paper

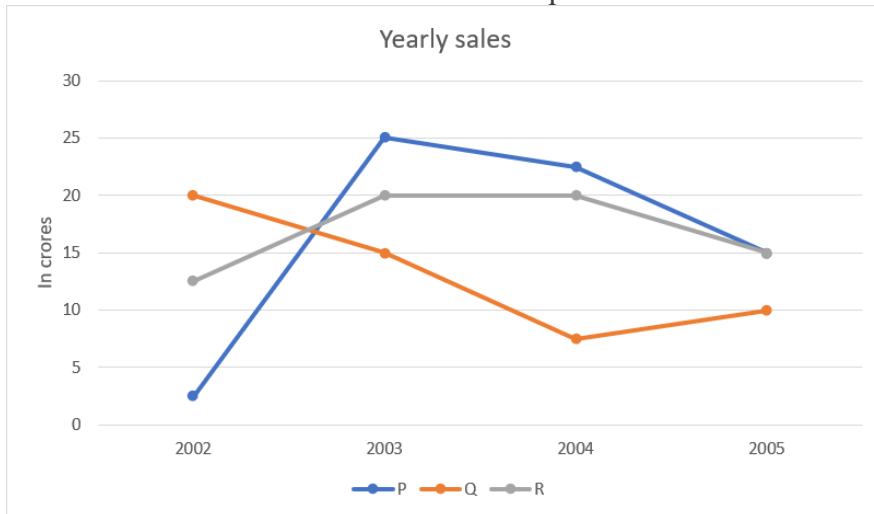
Answer: A

59. Find the angle between minute hand and hour hand at 6:30 AM

- A. 25°
- B. 22.5°
- C. 15°
- D. None of these

Answer: C

60. Study the graph and find what is the difference between maximum and minimum sales of p.



- A. 22.5
- B. 25
- C. 27.5
- D. 35

Answer: A

61. Which one will replace the question mark ?


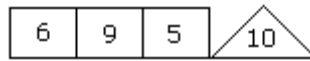
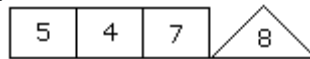
A ₂	C ₄	E ₆
G ₃	I ₅	?
M ₅	O ₉	Q ₁₄

- A. L₁₀
- B. K₁₅
- C. I₁₅
- D. K₈

Answer: D

Bachelors Intelligence Questions (IQ) Past Paper

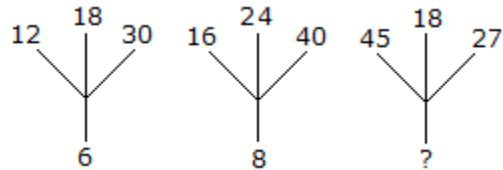
62. Which one will replace the question mark ?



- A. 2
- B. 4
- C. 5
- D. 6

Answer: D

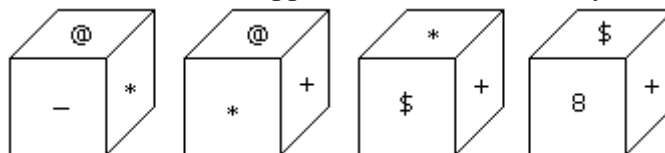
63. Which one will replace the question mark ?



- A. 3
- B. 9
- C. 18
- D. None of Above

Answer: B

64. Which symbol will be on the face opposite to the face with symbol * ?

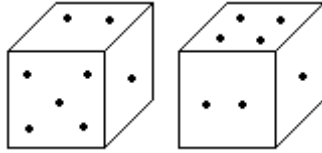


- A. @
- B. \$
- C. 8
- D. +

Answer: C

65. Two positions of dice are shown below. How many points will appear on the opposite to the face containing 5 points?

Bachelors Intelligence Questions (IQ) Past Paper



- A. 1
- B. 2
- C. 3
- D. 4

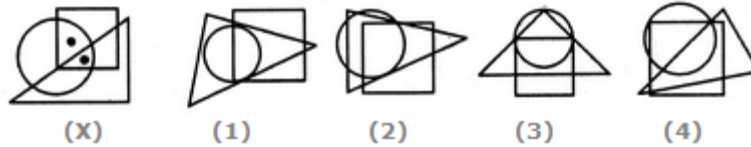
Answer: D

66. A train running at the speed of 60 km/hr crosses a pole in 9 seconds. What is the length of the train?

- A. 120 metres
- B. 180 metres
- C. 324 metres
- D. 150 metres

Answer: D

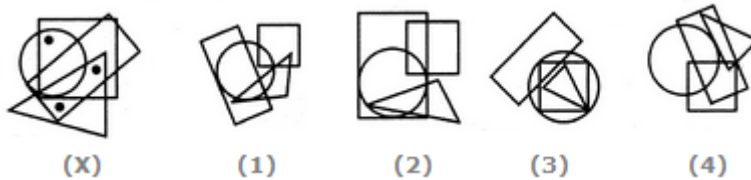
67. Select the figure which satisfies the same conditions of placement of the dots as in Figure-X.



- A. 1
- B. 2
- C. 3
- D. 4

Answer: D

68. Select the figure which satisfies the same conditions of placement of the dots as in Figure-X.

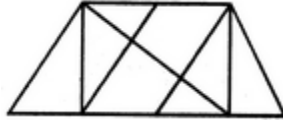


- A. 1
- B. 2
- C. 3
- D. 4

Answer: D

69. Find the number of triangles in the given figure.

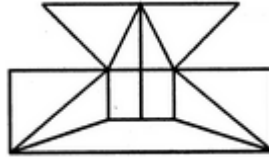
Bachelors Intelligence Questions (IQ) Past Paper



- A. 8
- B. 9
- C. 12
- D. 14

Answer: D

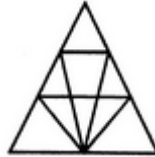
70. Find the minimum number of straight lines required to make the given figure.



- A. 16
- B. 17
- C. 18
- D. 19

Answer: B

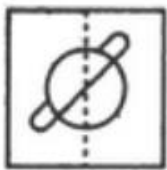
71. Find the number of triangles in the given figure.




- A. 16
- B. 17
- C. 18
- D. 19

Answer: C


72. Find out from amongst the four alternatives as to how the pattern would appear when the transparent sheet is folded at the dotted line.



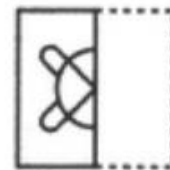
(X)



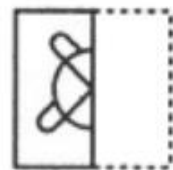
(1)



(2)



(3)



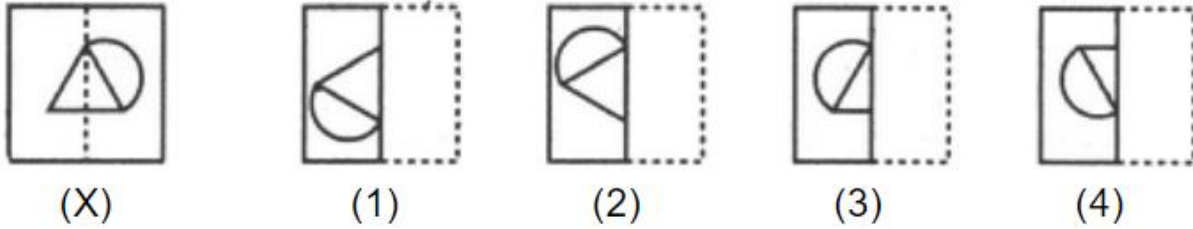
(4)

- A. 1
- B. 2
- C. 3
- D. 4

Answer: D

Bachelors Intelligence Questions (IQ) Past Paper

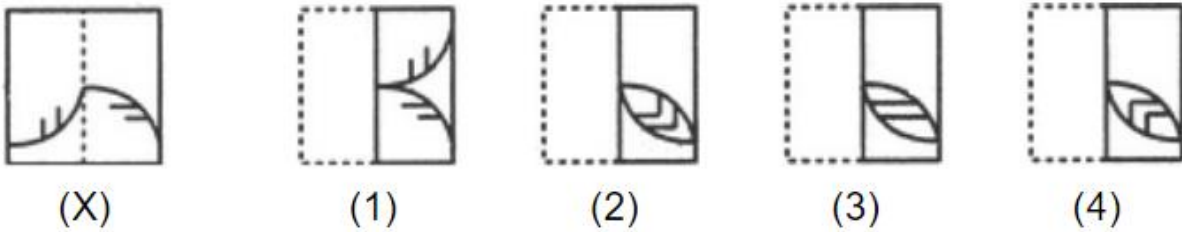
73. Find out from amongst the four alternatives as to how the pattern would appear when the transparent sheet is folded at the dotted line.



- A. 1
- B. 2
- C. 3
- D. 4

Answer: C

74. Find out from amongst the four alternatives as to how the pattern would appear when the transparent sheet is folded at the dotted line.



- A. 1
- B. 2
- C. 3
- D. 4

Answer: D

75. Choose the alternative which is closely resembles the mirror image of the given combination.

ANS43Q12
 (1) ANS43Q12 (2) S1Q342NA
 (3) 2NAE4Q51 (4) 1SQ4EANS

- A. 1
- B. 2
- C. 3
- D. 4

Answer: B

76. Choose the alternative which is closely resembles the water-image of the given combination.

Bachelors Intelligence Questions (IQ) Past Paper

NUCLEAR

(1) ВΔΕΓCUII

(3) ИUCГЭAВ

(2) ИИCГEAB

(4) ИИCГEAB

- A. 1
- B. 2
- C. 3
- D. 4

Answer: D

77. Choose the alternative which is closely resembles the water-image of the given combination.

bridge

(1) p1|qde

(3) p1|qde

(2) p1|qde

(4) p1|pde

- A. 1
- B. 2
- C. 3
- D. 4

Answer: 2

78. Odometer is to mileage as compass is to

- A. speed
- B. hiking
- C. needle
- D. direction

Answer: D

79. Marathon is to race as hibernation is to

- A. winter
- B. bear
- C. dream
- D. sleep

Answer: D

80. Window is to pane as book is to

- A. Novel
- B. Glass
- C. Cover
- D. Page

Answer: D

81. Cup is to coffee as bowl is to

- A. Dish
- B. Soup
- C. Spoon

Bachelors Intelligence Questions (IQ) Past Paper

D. Food

Answer: B

82. Yard is to inch as quart is to

- A. Gallon
- B. Ounce
- C. Milk
- D. Liquid

Answer: B

83. Anu's father is the only son of Vimal's mother how is Anu related to Vimal's son?

- A. Sister-in-law
- B. Sister
- C. Cousin
- D. Aunt
- E. None of these

Answer: C

84. Ronit's son Rohit, says to a girl, "your father is the only brother of my mother who is the only child of Mr. Rakesh". how is rohit related to girl?

- A. sister
- B. Cousin
- C. brother
- D. brother-in-law
- E. None of these

Answer: B

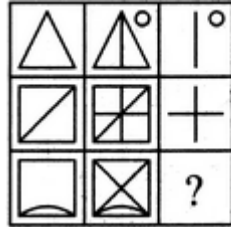
85. Pointing to a man, a lady said, "he is the son of my husband's daughter". How is the man related to this lady?

- A. Grand Son
- B. son
- C. Daughter
- D. none of these
- E. None of these

Answer: A

86. Select a suitable figure from the four alternatives that would complete the figure matrix.

Bachelors Intelligence Questions (IQ) Past Paper

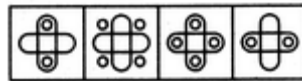



(1) (2) (3) (4)

- A. 1
- B. 2
- C. 3
- D. 4

Answer: D

87. Select a suitable figure from the four alternatives that would complete the figure matrix.

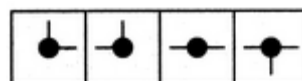
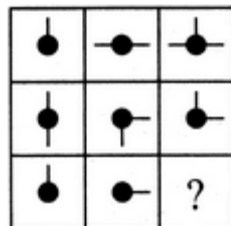


(1) (2) (3) (4)

- A. 1
- B. 2
- C. 3
- D. 4

Answer: B

88. Select a suitable figure from the four alternatives that would complete the figure matrix.



(1) (2) (3) (4)

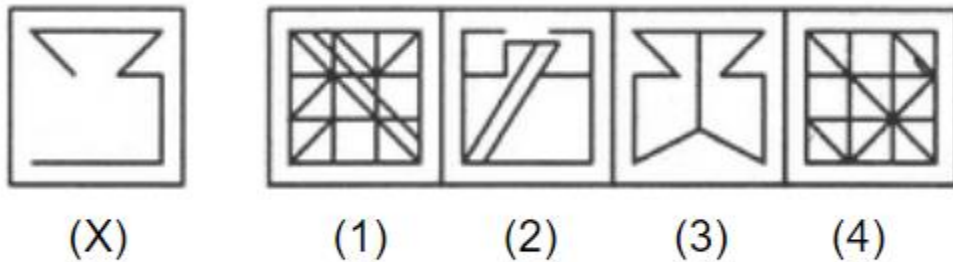
- A. 1

Bachelors Intelligence Questions (IQ) Past Paper

- B. 2
- C. 3
- D. 4

Answer: A

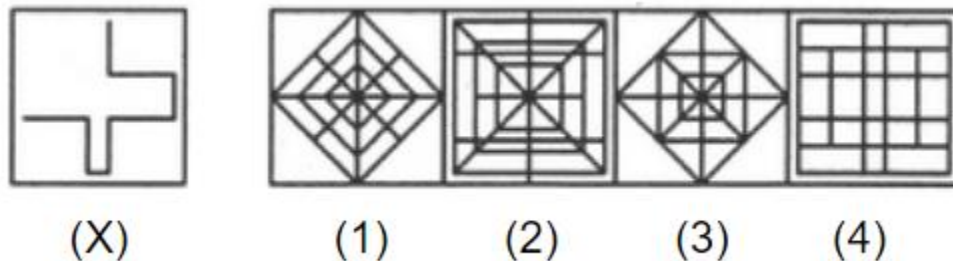
89. In the following question, you are given a figure (X) followed by four alternative figures (1), (2), (3) and (4) such that figure (X) is embedded in one of them. Find out the alternative figure which contains figure (X) as its part.



- A. 1
- B. 2
- C. 3
- D. 4

Answer: A

90. In the following question, you are given a figure (X) followed by four alternative figures (1), (2), (3) and (4) such that figure (X) is embedded in one of them. Find out the alternative figure which contains figure (X) as its part.



- A. 1
- B. 2
- C. 3
- D. 4

Answer: D

91. Here are some words translated from an artificial language.

dionot means oak tree

blyonot means oak leaf

blycrin means maple leaf

Which word could mean "maple syrup"?

- A. blymuth

Bachelors Intelligence Questions (IQ) Past Paper

- B. hupponot
- C. patricrin
- D. crinweel

Answer: C

92. Here are some words translated from an artificial language.

tamceno means sky blue

cenorax means blue cheese

aplmitl means star bright

Which word could mean "bright sky"?

- A. cenotam
- B. mitltam
- C. raxmitl
- D. aplceno

Answer: B

93. SCD, TEF, UGH, ____, WKL

- A. CMN
- B. UJI
- C. VIJ
- D. IJT

Answer: C

94. B2CD, ____, BCD4, B5CD, BC6D

- A. B2C2D
- B. BC3D
- C. B2C3D
- D. BCD7

Answer: B

95. Which word does NOT belong with the others?

- A. book
- B. index
- C. glossary
- D. chapter

Answer: A

96. Which word does NOT belong with the others?

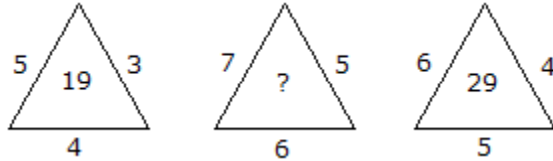
- A. unimportant
- B. trivial

Bachelors Intelligence Questions (IQ) Past Paper

- C. insignificant
- D. familiar

Answer: D

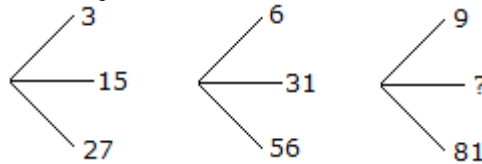
97. Which one will replace the question mark ?



- A. 41
- B. 42
- C. 45
- D. 54

Answer: A

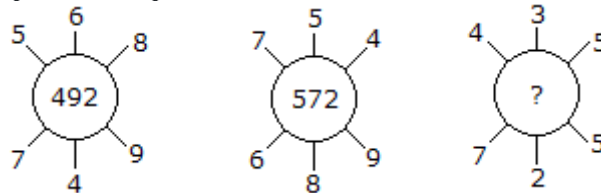
98. Which one will replace the question mark ?



- A. 45
- B. 46
- C. 49
- D. 50

Answer: A

99. Which one will replace the question mark ?



- A. 130
- B. 149
- C. 134
- D. 135

Answer: A

100. Which one of the following is always in 'Sentiment'?

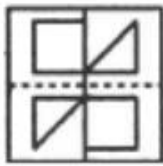
- A. Cruelty
- B. Insight
- C. Neutrality
- D. Emotion

Bachelors Intelligence Questions (IQ) Past Paper

Answer: D

Masters/M.Phil Intelligence Questions (IQ) Past Paper

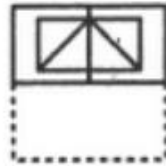
1. Find out from amongst the four alternatives as to how the pattern would appear when the transparent sheet is folded at the dotted line.



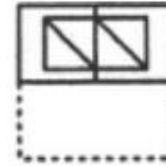
(X)



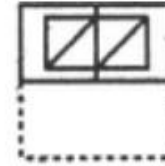
(1)



(2)



(3)

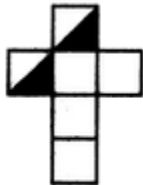


(4)

- A. 1
- B. 2
- C. 3
- D. 4

Answer: A

2. Choose the box that is similar to the box formed from the given sheet of paper (X).



(X)



(1)



(2)



(3)

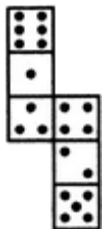


(4)

- A. 1 and 4 only
- B. 3 and 4 only
- C. 1 and 2 only
- D. 2 and 3 only

Answer: A

3. How many dots lie opposite to the face having three dots, when the given figure is folded to form a cube?

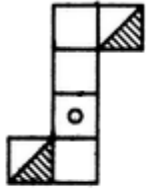


- A. 2
- B. 4
- C. 5
- D. 6

Answer: D

4. Choose the box that is similar to the box formed from the given sheet of paper (X).

Masters/M.Phil Intelligence Questions (IQ) Past Paper



(X)



(1)



(2)



(3)

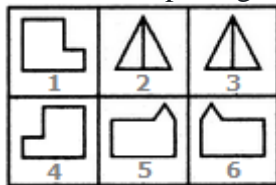


(4)

- A. 1 and 3 only
- B. 1 and 4 only
- C. 2 and 4 only
- D. 3 and 4 only

Answer: A

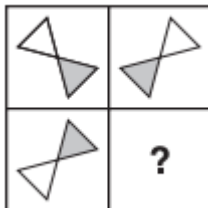
5. Group the given figures into three classes using each figure only once.



- A. 1,4 ; 2,3 ; 5,6
- B. 1,5 ; 2,6 ; 4,3
- C. 1,6 ; 2,3 ; 4,5
- D. 1,2 ; 3,6 ; 4,5

Answer: A

6. Which Shape completes the larger square?



Masters/M.Phil Intelligence Questions (IQ) Past Paper

D.



Answer: C.

7. Which one comes next?



A.



B.



C.

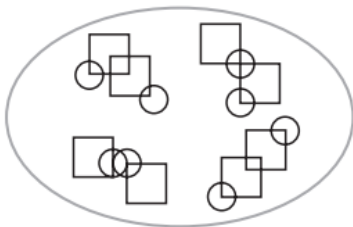


D.

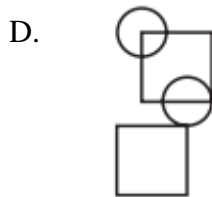
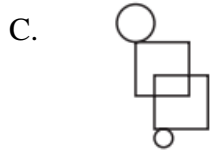
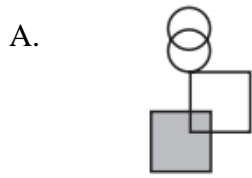


Answer: D.

8. Which pattern on the right belongs in the group on the left?

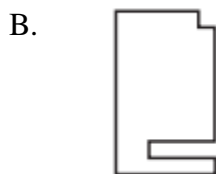
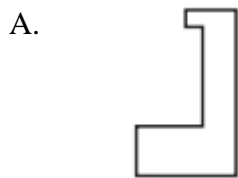
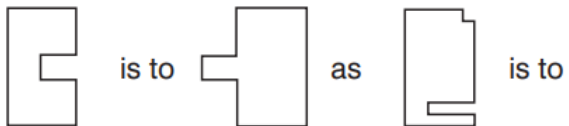


Masters/M.Phil Intelligence Questions (IQ) Past Paper

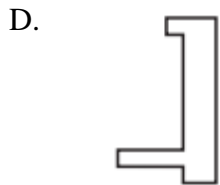
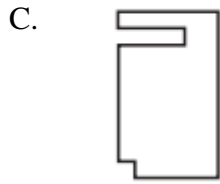


Answer: D.

9. Which shape completes the second pair in the same way as the first pair?

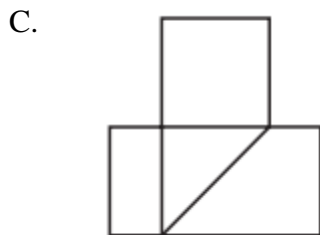
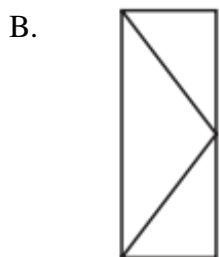
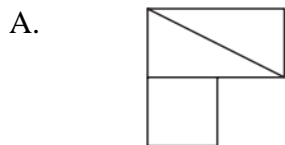


Masters/M.Phil Intelligence Questions (IQ) Past Paper



Answer: D.

10. In which larger shape is the shape on the left hidden?



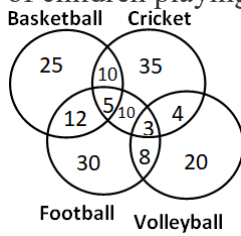
Masters/M.Phil Intelligence Questions (IQ) Past Paper

D.



Answer: C.

11. The following diagram shows the number of children playing Basketball, Cricket, Football and Volleyball. If the total number of children is 400, what is the percentage of children playing at least two games?




- A. 8
B. 6
C. 9.25
D. 13

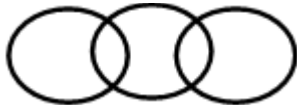
Answer: D

12. Which of the following diagram correctly represents the relationship among Teacher, Scientist and Graduate?

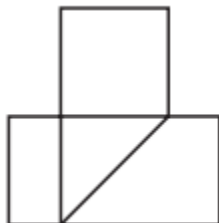
A.



B.



C.



Masters/M.Phil Intelligence Questions (IQ) Past Paper

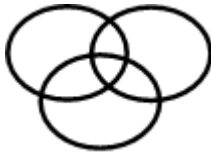
D.



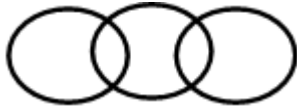
Answer: A

13. Which of the following diagram depicts the relation among Currency, Dinar and Rupee.

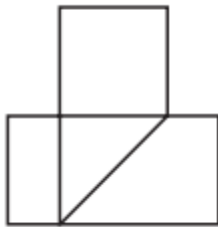
A.



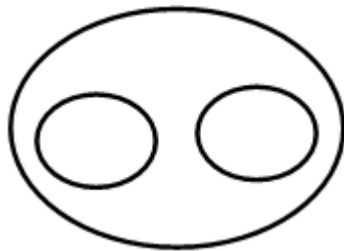
B.



C.



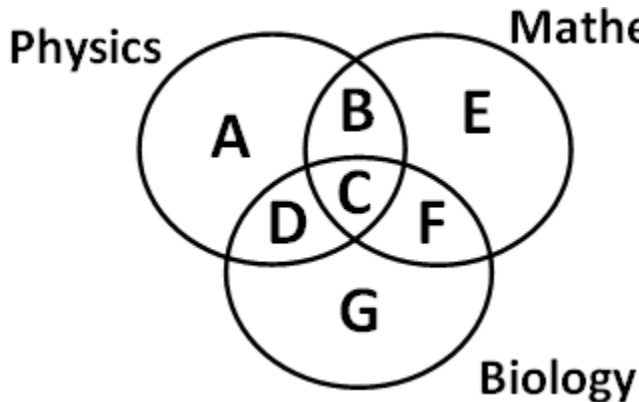
D.



Answer: D

Masters/M.Phil Intelligence Questions (IQ) Past Paper

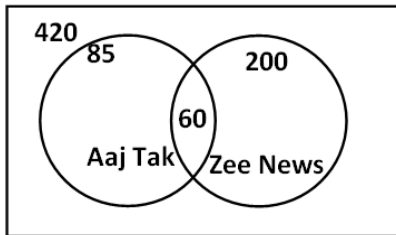
14. Which of the region in the following figure represents students who study both Physics and Mathematics but not Biology?



- a. B+C+D+F
- b. C
- c. A+E
- d. B

Answer: D

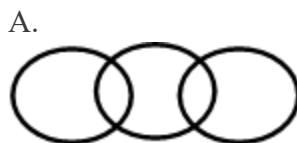
15. From the figure given below, determine the number of people who did not watch any news channel.



- a. 135
- b. 75
- c. 195
- d. 175

Answer: C

16. Which of the following figures correctly represents the relation between Machine, Lathe and Thermodynamics?

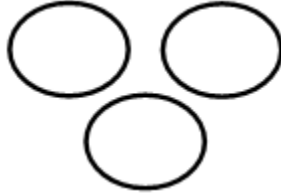


C.

Masters/M.Phil Intelligence Questions (IQ) Past Paper

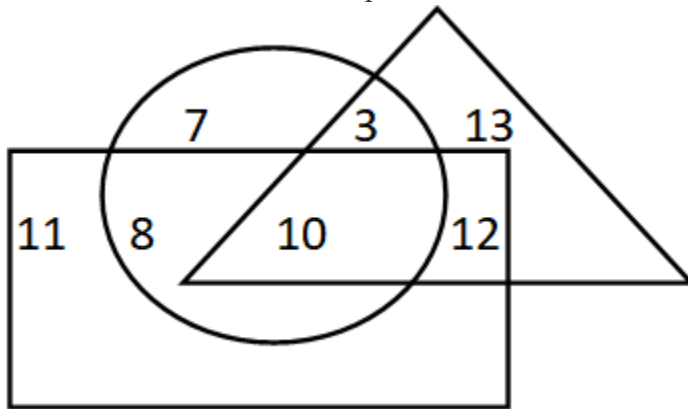


D.



Answer: B

17. If triangle represents Women, rectangle represents Doctors and circle represents Lawyers. Then which number represents Women that are Lawyer but not Doctor?



- a. 10
- b. 12
- c. 8
- d. 3

Answer: D

18.



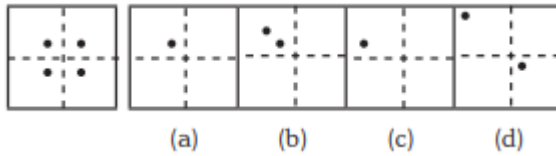
(a) (b) (c) (d)

- a. Only C
- b. Only D
- c. Both C & D
- d. None of these

Answer: A

Masters/M.Phil Intelligence Questions (IQ) Past Paper

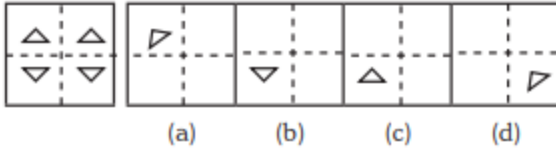
19.



- a. Only A
- b. Both A and B
- c. Only C
- d. Only D

Answer: A

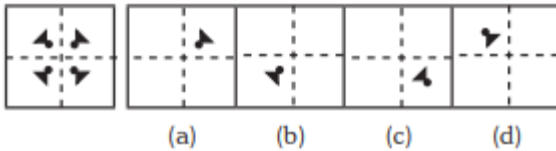
20.



- a. Option B
- b. Option A
- c. Both A & C
- d. Only D

Answer: A

21.



- a. Only A
- b. B
- c. C
- d. D

Answer: A

22. Statements: Some dogs are bats. Some bats are cats.

Conclusions:

1. Some dogs are cats.

2. Some cats are dogs.

- A. Only (1) conclusion follows
- B. Only (2) conclusion follows
- C. Either (1) or (2) follows
- D. Neither (1) nor (2) follows

Answer: D

23. Arrange the words given below in a meaningful sequence.

1. Income 2. Status 3. Education 4. Well-being 5. Job

- A. 3, 1, 5, 2, 4
- B. 1, 3, 2, 5, 4
- C. 1, 2, 5, 3, 4

Masters/M.Phil Intelligence Questions (IQ) Past Paper

D. 3, 5, 1, 2, 4

Answer: D

24. 3 pipes A, B and C can fill a tank in 30 minutes, 40 minutes, and 120 minutes, respectively. If all the pipes are opened together, how much time is required to fill the tank?
- A. 12 minutes
 - B. 15 minutes
 - C. 18 minutes
 - D. 20 minutes

Answer: B

25. A lady meets a person in the market who is the wife of the brother of her husband. How is the lady related to the person?
- A. cousin
 - B. sister
 - C. sister-in-law
 - D. nephew
 - E. None of these

Answer: C

26. Pointing out to a photograph, Swati said, “ he is the uncle of my brother’s sister”. How is the person in photograph related to Swati?
- A. uncle
 - B. father-in-law
 - C. brother
 - D. Grand father
 - E. None of these

Answer: A

27. Pointing to a lady, Vimal said, “she is the wife of my Grandfather’s son”. How is the lady related to Vimal?
- A. aunty
 - B. mother
 - C. grandmother
 - D. sister
 - E. None of these

Answer: B

28. A boy meets a girl in the party who introduces herself as the daughter of his grandfather’s daughter’s brother. How is the boy related to the girl?
- A. brother-in-law
 - B. uncle
 - C. brother
 - D. sister
 - E. None of these

Masters/M.Phil Intelligence Questions (IQ) Past Paper

Answer: C

29. When Rani saw Vinit, she recollected, "He is the brother of my grandfather's son". How is Rani related to Vinit?
- A. Nephew
 - B. aunt
 - C. Daughter
 - D. sister
 - E. None of these

Answer: A

30. 3 pipes can fill a bucket in 20 minutes, 30 minutes and 60 minutes, respectively. If all the pipes are opened for 5 minutes what percentage of the tank will be filled.
- A. 50%
 - B. 60%
 - C. 75%
 - D. 100%

Answer: A

31. There are three pipes connected to a tank. The first two can fill the tank in 20 minutes and 30 minutes, respectively. The third pipe can empty the entire tank in 5 minutes. If all the pipes are opened simultaneously, what time will it take to empty the tank?
- A. 8.55 minutes
 - B. 8.56 minutes
 - C. 8.57 minutes
 - D. 8.58 minutes

Answer: C

32. 2 pipes can empty a tank in 70 minutes and 140 minutes, respectively. If a third pipe can fill the tank in 7 minutes, find the time required to fill the tank if all the pipes are opened simultaneously.
- A. 7.23 minutes
 - B. 8.23 minutes
 - C. 8.57 minutes
 - D. 8.88 minutes

Answer: B

33. A mixture containing 20% milk is mixed with another mixture containing 60% milk in the ratio 8 : 13. Find the percentage of milk in the new mixture.
- A. 37.14%
 - B. 36.65%
 - C. 35.57%
 - D. 34.24%

Answer: A

Masters/M.Phil Intelligence Questions (IQ) Past Paper

34. A mixture containing 66% of acid is mixed with another mixture containing 35% of acid in the ratio 2 : 5. Find the percentage of acid in the mixture formed.

- A. 45%
- B. 46%
- C. 47%
- D. 48%

Answer: B

35. Introducing a woman, a man said, "Her husband is the only son of my father". How is that woman related to the man?

- A. Husband
- B. Sister
- C. Wife
- D. Mother

Answer: C

36. Q's mother is the sister of P and daughter of S. A is the son of P and Brother of H. G is the father of H. How is S related to G?

- A. Nephew
- B. Son-in-law
- C. Grandfather
- D. Father-in-law

Answer: D

37. R is the son of A's father's sister. S is son of D, who is the mother of G and grandmother of A. H is the father of T and grandfather of R. D is wife of H. How is R related to D?

- A. Nephew
- B. Son
- C. Grandson
- D. Insufficient Data

Answer: C

38. Pointing towards a person a woman said to man, "His father is the only son of your mother". How is the man related to that person?

- A. Brother
- B. Father
- C. Son
- D. Husband

Answer: B

39. Introducing a child, a woman said, "He is the son of my father's only daughter". How is that woman related to the child?

Masters/M.Phil Intelligence Questions (IQ) Past Paper

- A. Mother
- B. Sister
- C. Wife
- D. Daughter

Answer: A

40. HSNT : EPKQ :: DTHL : ?

- A. ABCD
- B. UEJM
- C. WXYZ
- D. AQEI

Answer: D

41. Umbriel : Uranus :: Janus : ?

- A. Jupiter
- B. Mars
- C. Uranus
- D. Saturn

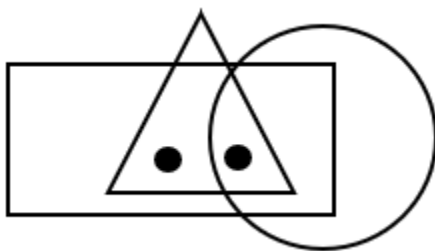
Answer: D

42. Kurnool : Andhra Pradesh :: Aizawl : ?

- A. Nagaland
- B. Meghalaya
- C. West Bengal
- D. Mizoram

Answer: D

43. Identify the figure which satisfies the same condition of placement of dots as in given figure.



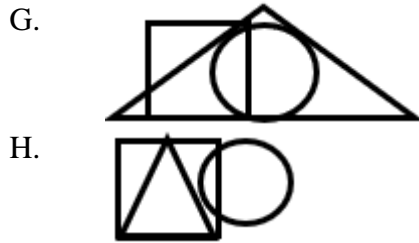
E.



F.



Masters/M.Phil Intelligence Questions (IQ) Past Paper



Answer: C

44. Find odd one out from the given jumbled words: LNUAIMMIU, ELEST, OPERPC, NMKOYE, INCKLE

- A. NMKOYE
- B. OPERPC
- C. INCKLE
- D. ELEST

Answer: A

45. In the following question find out the alternative which will replace the question mark.

Conference : Chairman :: Newspaper : ?

- A. Reporter
- B. Distributor
- C. Printer
- D. Editor

Answer: D

46. The 30 members of a club decided to play a badminton singles tournament. Every time a member loses a game he is out of the tournament. There are no ties. What is the minimum number of matches that must be played to determine the winner ?

- A. 29
- B. 45
- C. 55
- D. None of These

Answer: A

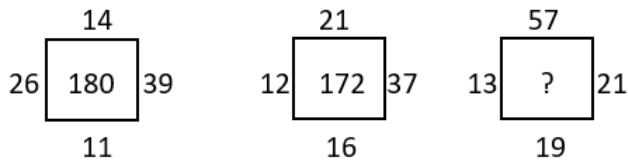
47. In a garden, there are 10 rows and 12 columns of mango trees. The distance between the two trees is 2 metres and a distance of one metre is left from all sides of the boundary of the garden. The length of the garden is

- A. 24 m
- B. 25 m
- C. 26 m
- D. 24 km

Answer: A

Masters/M.Phil Intelligence Questions (IQ) Past Paper

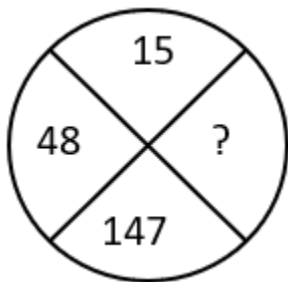
48. Find the correct alternative which will replace the question mark?



- A. 107
- B. 220
- C. 285
- D. 164

Answer: B

49. Find the correct alternative which will replace the question mark?



- A. 444
- B. 445
- C. 446
- D. 447

Answer: A

50. Choose the figure which is different from the rest?



(A) (B) (C) (D)

- A. Fig A
- B. Fig B
- C. Fig C
- D. Fig D

Answer: A

51. A cage had 15 birds. All but seven manages to escape. How many birds remain?

- A. 7
- B. 12
- C. 15
- D. 8

Masters/M.Phil Intelligence Questions (IQ) Past Paper

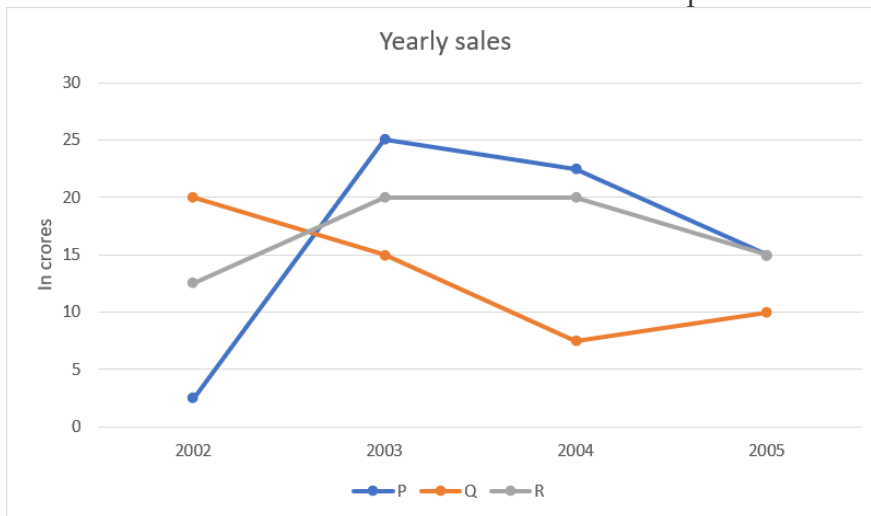
Answer: A

52. Find the angle between minute hand and hour hand at 6:30 AM

- A. 25°
- B. 22.5°
- C. 15°
- D. None of these

Answer: C

53. Study the graph and find what is the difference between maximum and minimum sales of p.



- A. 22.5
- B. 25
- C. 27.5
- D. 35

Answer: A

54. Which one will replace the question mark ?

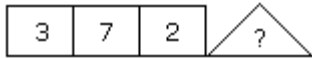
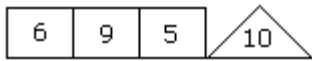
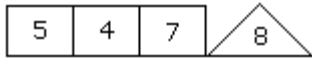
A ₂	C ₄	E ₆
G ₃	I ₅	?
M ₅	O ₉	Q ₁₄

- A. L₁₀
- B. K₁₅
- C. I₁₅
- D. K₈

Answer: D

Masters/M.Phil Intelligence Questions (IQ) Past Paper

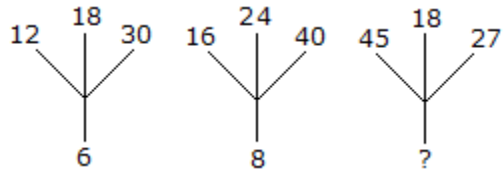
55. Which one will replace the question mark ?



- A. 2
- B. 4
- C. 5
- D. 6

Answer: D

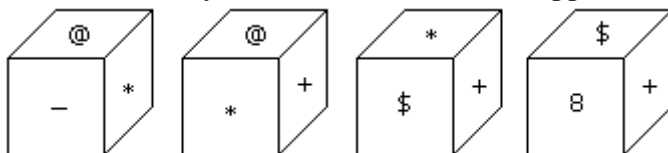
56. Which one will replace the question mark ?



- A. 3
- B. 9
- C. 18
- D. None of Above

Answer: B

57. Which symbol will be on the face opposite to the face with symbol * ?

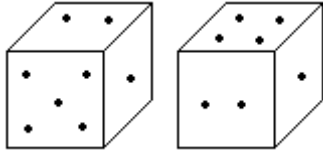


- A. @
- B. \$
- C. 8
- D. +

Answer: C

58. Two positions of dice are shown below. How many points will appear on the opposite to the face containing 5 points?

Masters/M.Phil Intelligence Questions (IQ) Past Paper



- A. 1
- B. 2
- C. 3
- D. 4

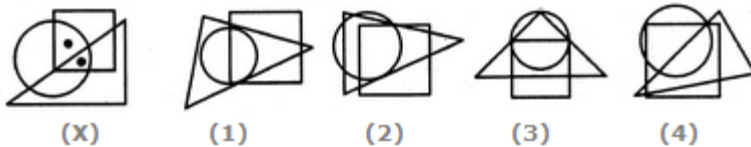
Answer: D

59. A train running at the speed of 60 km/hr crosses a pole in 9 seconds. What is the length of the train?

- A. 120 metres
- B. 180 metres
- C. 324 metres
- D. 150 metres

Answer: D

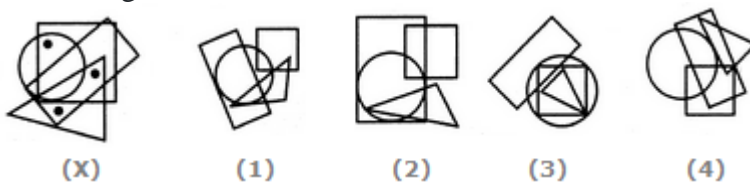
60. Select the figure which satisfies the same conditions of placement of the dots as in Figure-X.



- A. 1
- B. 2
- C. 3
- D. 4

Answer: D

61. Select the figure which satisfies the same conditions of placement of the dots as in Figure-X.

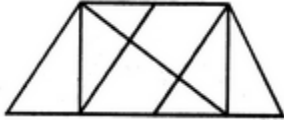


- A. 1
- B. 2
- C. 3
- D. 4

Answer: D

62. Find the number of triangles in the given figure.

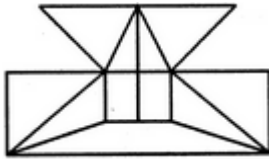
Masters/M.Phil Intelligence Questions (IQ) Past Paper



- A. 8
- B. 9
- C. 12
- D. 14

Answer: D

63. Find the minimum number of straight lines required to make the given figure.



- A. 16
- B. 17
- C. 18
- D. 19

Answer: B

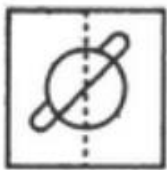
64. Find the number of triangles in the given figure.




- A. 16
- B. 17
- C. 18
- D. 19

Answer: C


65. Find out from amongst the four alternatives as to how the pattern would appear when the transparent sheet is folded at the dotted line.



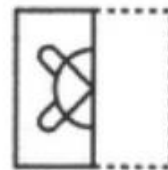
(X)



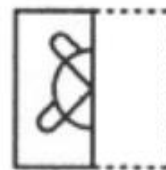
(1)



(2)



(3)



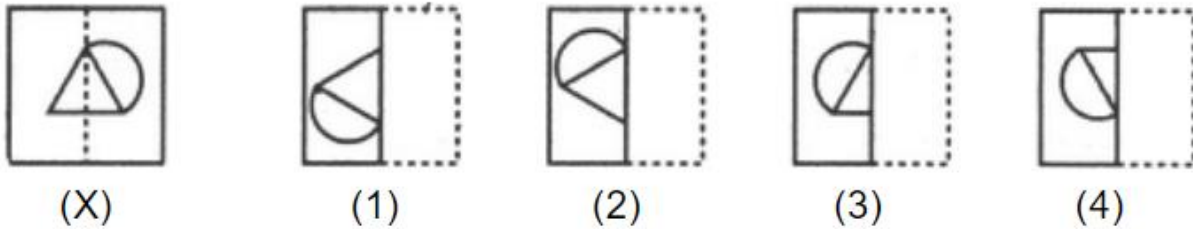
(4)

- A. 1
- B. 2
- C. 3
- D. 4

Answer: D

Masters/M.Phil Intelligence Questions (IQ) Past Paper

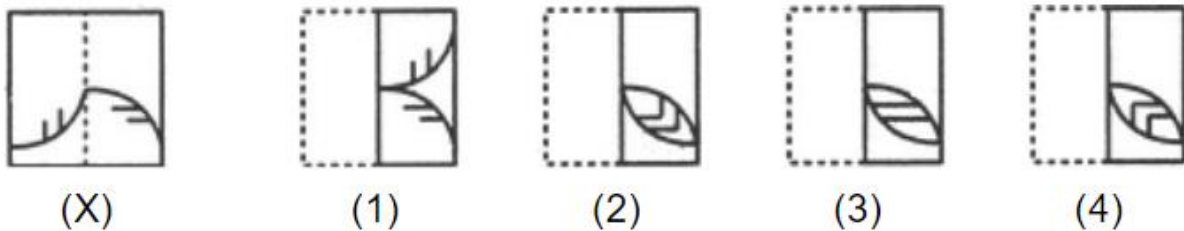
66. Find out from amongst the four alternatives as to how the pattern would appear when the transparent sheet is folded at the dotted line.



- A. 1
- B. 2
- C. 3
- D. 4

Answer: C

67. Find out from amongst the four alternatives as to how the pattern would appear when the transparent sheet is folded at the dotted line.



- A. 1
- B. 2
- C. 3
- D. 4

Answer: D

68. Choose the alternative which is closely resembles the mirror image of the given combination.

ANS43Q12

(1) AN2P3Q12

(2) 21Q3P2NA

(3) 2NA3PQ21

(4) 12Q3P2NA

- A. 1
- B. 2
- C. 3
- D. 4

Answer: B

69. Choose the alternative which is closely resembles the water-image of the given combination.

Masters/M.Phil Intelligence Questions (IQ) Past Paper

NUCLEAR

(1) ВАЕГСУИ

(2) ИИСТЕВВ

(3) ИИСТЕВВ

(4) ИИСТЕВВ

- A. 1
- B. 2
- C. 3
- D. 4

Answer: D

70. Choose the alternative which is closely resembles the water-image of the given combination.

bridge

(1) riqde

(2) riqde

(3) riqde

(4) riqde

- A. 1
- B. 2
- C. 3
- D. 4

Answer: 2

71. Odometer is to mileage as compass is to

- A. speed
- B. hiking
- C. needle
- D. direction

Answer: D

72. Marathon is to race as hibernation is to

- A. winter
- B. bear
- C. dream
- D. sleep

Answer: D

73. Window is to pane as book is to

- A. Novel
- B. Glass
- C. Cover
- D. Page

Answer: D

74. Cup is to coffee as bowl is to

- A. Dish
- B. Soup
- C. Spoon

Masters/M.Phil Intelligence Questions (IQ) Past Paper

D. Food

Answer: B

75. Yard is to inch as quart is to

- A. Gallon
- B. Ounce
- C. Milk
- D. Liquid

Answer: B

76. Anu's father is the only son of Vimal's mother how is Anu related to Vimal's son?

- A. Sister-in-law
- B. Sister
- C. Cousin
- D. Aunt
- E. None of these

Answer: C

77. Ronit's son Rohit, says to a girl, "your father is the only brother of my mother who is the only child of Mr. Rakesh". how is rohit related to girl?

- A. sister
- B. Cousin
- C. brother
- D. brother-in-law
- E. None of these

Answer: B

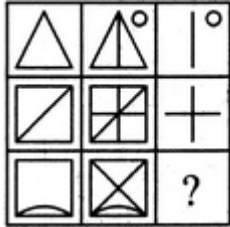
78. Pointing to a man, a lady said, "he is the son of my husband's daughter". How is the man related to this lady?

- A. Grand Son
- B. son
- C. Daughter
- D. none of these
- E. None of these

Answer: A

79. Select a suitable figure from the four alternatives that would complete the figure matrix.

Masters/M.Phil Intelligence Questions (IQ) Past Paper

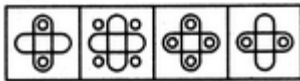



(1) (2) (3) (4)

- A. 1
- B. 2
- C. 3
- D. 4

Answer: D

80. Select a suitable figure from the four alternatives that would complete the figure matrix.

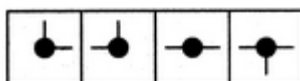
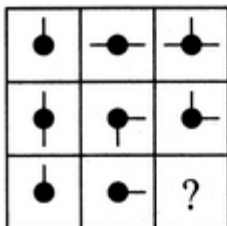


(1) (2) (3) (4)

- A. 1
- B. 2
- C. 3
- D. 4

Answer: B

81. Select a suitable figure from the four alternatives that would complete the figure matrix.



(1) (2) (3) (4)

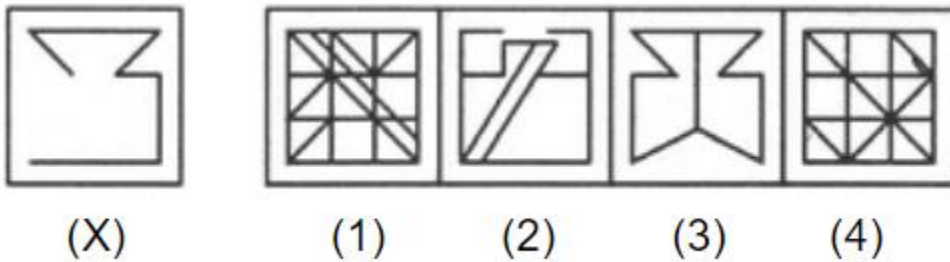
- A. 1

Masters/M.Phil Intelligence Questions (IQ) Past Paper

- B. 2
- C. 3
- D. 4

Answer: A

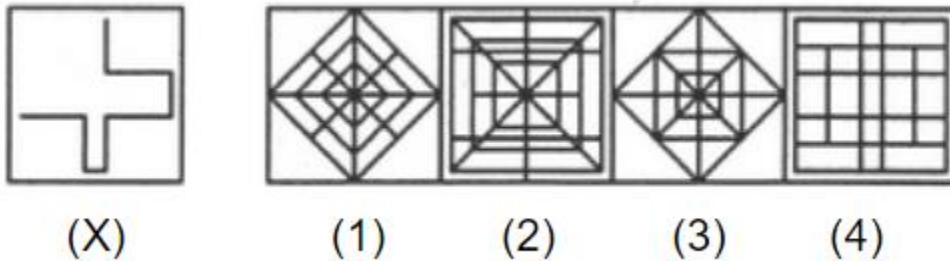
82. In the following question, you are given a figure (X) followed by four alternative figures (1), (2), (3) and (4) such that figure (X) is embedded in one of them. Find out the alternative figure which contains figure (X) as its part.



- A. 1
- B. 2
- C. 3
- D. 4

Answer: A

83. In the following question, you are given a figure (X) followed by four alternative figures (1), (2), (3) and (4) such that figure (X) is embedded in one of them. Find out the alternative figure which contains figure (X) as its part.



- A. 1
- B. 2
- C. 3
- D. 4

Answer: D

84. Here are some words translated from an artificial language.
 dionot means oak tree
 blyonot means oak leaf
 blycrin means maple leaf

Which word could mean "maple syrup"?

- A. blymuth

Masters/M.Phil Intelligence Questions (IQ) Past Paper

- B. hupponot
- C. patricrin
- D. crinweel

Answer: C

85. Here are some words translated from an artificial language.
tamceno means sky blue
cenorax means blue cheese
aplmitl means star bright
Which word could mean "bright sky"?

- A. cenotam
- B. mitltam
- C. raxmitl
- D. aplceno

Answer: B

86. SCD, TEF, UGH, _____, WKL
A. CMN
B. UJI
C. VIJ
D. IJT

Answer: C

87. B2CD, _____, BCD4, B5CD, BC6D
A. B2C2D
B. BC3D
C. B2C3D
D. BCD7

Answer: B

88. Which word does NOT belong with the others?
A. book
B. index
C. glossary
D. chapter

Answer: A

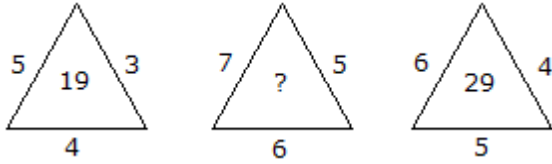
89. Which word does NOT belong with the others?
A. unimportant
B. trivial
C. insignificant

Masters/M.Phil Intelligence Questions (IQ) Past Paper

D. familiar

Answer: D

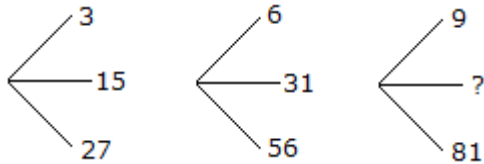
90. Which one will replace the question mark ?



- A. 41
- B. 42
- C. 45
- D. 54

Answer: A

91. Which one will replace the question mark ?



- A. 45
- B. 46
- C. 49
- D. 50

Answer: A

92. If South-East becomes North, North-East becomes West and so on. What will West become?

- A. North-East
- B. North West
- C. South East
- D. South West

Answer: C

93. Rasik walked 20 m towards north. Then he turned right and walks 30 m. Then he turns right and walks 35 m. Then he turns left and walks 15 m. Finally he turns left and walks 15 m. In which direction and how many metres is he from the starting position?

- A. 45 m East
- B. 45 m West
- C. 40 m East
- D. None

Masters/M.Phil Intelligence Questions (IQ) Past Paper

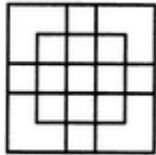
Answer: A

94. Rahul put his timepiece on the table in such a way that at 6 P.M. hour hand points to North. In which direction the minute hand will point at 9.15 P.M. ?

- A. EAST
- B. WEST
- C. NORTH
- D. SOUTH

Answer: B

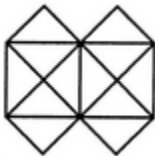
95. Count the number of squares in the given figure.



- A. 27
- B. 29
- C. 30
- D. 31

Answer: D

96. What is the minimum number of straight lines that is needed to construct the figure?



- A. 13
- B. 14
- C. 15
- D. 16

Answer: B

97. Choose the figure which is different from the rest.



- (1)
- (2)
- (3)
- (4)

- A. 1

Masters/M.Phil Intelligence Questions (IQ) Past Paper

- B. 2
- C. 3
- D. 4

Answer: B

98. Choose the figure which is different from the rest.

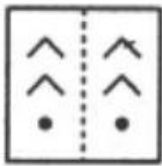


(1) (2) (3) (4)


- A. 1
- B. 2
- C. 3
- D. 4

Answer: C

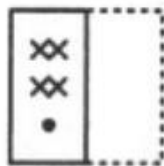
99. Find out from amongst the four alternatives as to how the pattern would appear when the transparent sheet is folded at the dotted line.




(X)



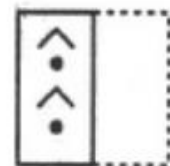
(1)



(2)



(3)



(4)

- A. 1
- B. 2
- C. 3
- D. 4

Answer: A

100. The following question consists of two sets of figures. Figures A, B, C and D constitute the Problem Set while figures 1, 2, 3, and 4 constitute the Answer Set. There is a definite relationship between figures A and B. Establish a similar relationship between figures C and D by selecting a suitable figure from the Answer Set that would replace the question mark (?) in fig. (D).

Masters/M.Phil Intelligence Questions (IQ) Past Paper

Problem Figures:



(A) (B) (C) (D)

Answer Figures:



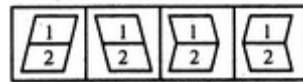
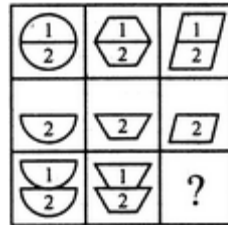
(1) (2) (3) (4)

- A. 1
- B. 2
- C. 3
- D. 4

Answer: 3

DAE & ADP Intelligence Questions (IQ) Past Paper

1. Select a suitable figure from the four alternatives that would complete the figure matrix.

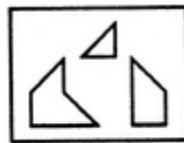


(1) (2) (3) (4)

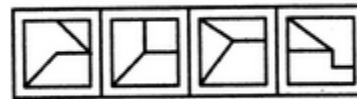
- A. 1
- B. 2
- C. 3
- D. 4

Answer: C

2. Find out which of the figures (1), (2), (3) and (4) can be formed from the pieces given in figure (X).



(X)




(1) (2) (3) (4)

- A. 1
- B. 2
- C. 3
- D. 4

Answer: A

3. Find out which of the figures (1), (2), (3) and (4) can be formed from the pieces given in figure (X).



(X)



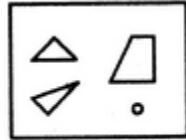
(1) (2) (3) (4)

- A. 1
- B. 2
- C. 3
- D. 4

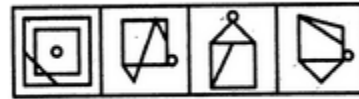
Answer: C

4. Find out which of the figures (1), (2), (3) and (4) can be formed from the pieces given in figure (X).

DAE & ADP Intelligence Questions (IQ) Past Paper



(X)



(1) (2) (3) (4)

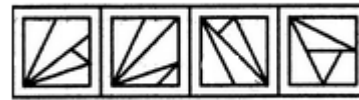
- A. 1
- B. 2
- C. 3
- D. 4

Answer: C

5. Find out which of the figures (1), (2), (3) and (4) can be formed from the pieces given in figure (X).



(X)

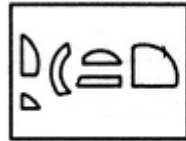


(1) (2) (3) (4)

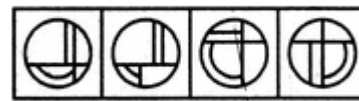
- A. 1
- B. 2
- C. 3
- D. 4

Answer: 3

6. Find out which of the figures (1), (2), (3) and (4) can be formed from the pieces given in figure (X).



(X)

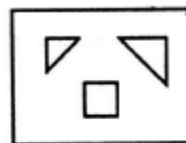


(1) (2) (3) (4)

- A. 1
- B. 2
- C. 3
- D. 4

Answer: A

7. Find out which of the figures (1), (2), (3) and (4) can be formed from the pieces given in figure (X).



(X)



(1) (2) (3) (4)

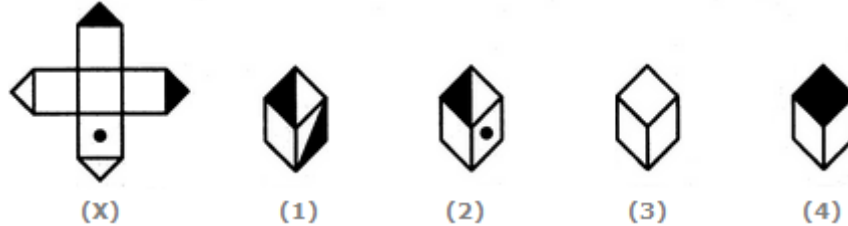
- A. 1
- B. 2

DAE & ADP Intelligence Questions (IQ) Past Paper

- C. 3
- D. 4

Answer: A

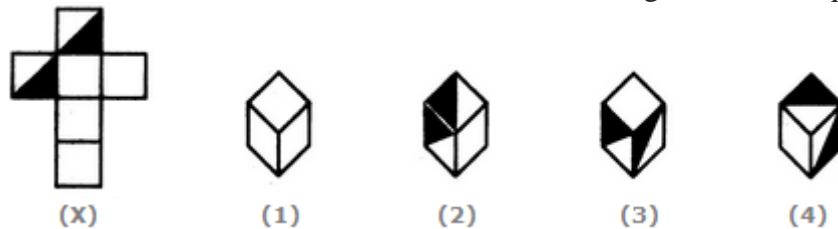
8. Choose the box that is similar to the box formed from the given sheet of paper (X).



- A. 1 and 2 only
- B. 2 and 4 only
- C. 2 and 3 only
- D. 1 and 4 only

Answer: C

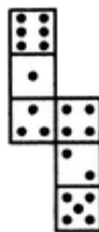
9. Choose the box that is similar to the box formed from the given sheet of paper (X).



- A. 1 and 4 only
- B. 3 and 4 only
- C. 1 and 2 only
- D. 2 and 3 only

Answer: A

10. How many dots lie opposite to the face having three dots, when the given figure is folded to form a cube?

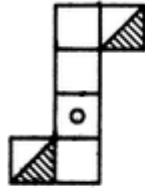


- A. 2
- B. 4
- C. 5
- D. 6

Answer: D

11. Choose the box that is similar to the box formed from the given sheet of paper (X).

DAE & ADP Intelligence Questions (IQ) Past Paper



(x)



(1)



(2)



(3)

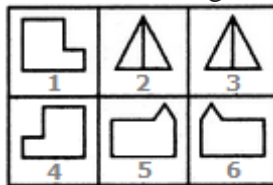


(4)

- A. 1 and 3 only
- B. 1 and 4 only
- C. 2 and 4 only
- D. 3 and 4 only

Answer: A

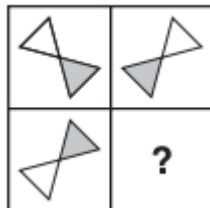
12. Group the given figures into three classes using each figure only once.



- A. 1,4 ; 2,3 ; 5,6
- B. 1,5 ; 2,6 ; 4,3
- C. 1,6 ; 2,3 ; 4,5
- D. 1,2 ; 3,6 ; 4,5

Answer: A

13. Which Shape completes the larger square?



A.



B.



C.



DAE & ADP Intelligence Questions (IQ) Past Paper

D.



Answer: C.

14. Which one comes next?



A.



B.



C.

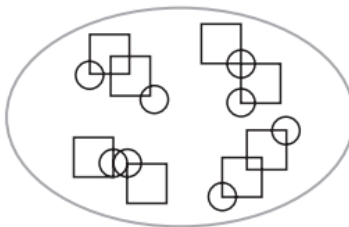


D.

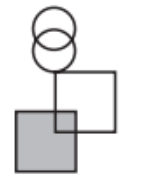
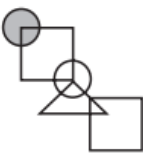
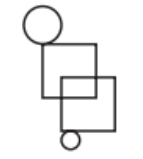
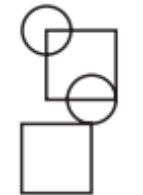


Answer: D.

15. Which pattern on the right belongs in the group on the left?

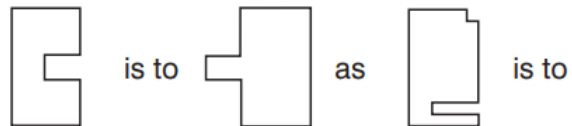




DAE & ADP Intelligence Questions (IQ) Past Paper

- A. 
- B. 
- C. 
- D. 

Answer: D.

16. Which shape completes the second pair in the same way as the first pair?



- A. 
- B. 

DAE & ADP Intelligence Questions (IQ) Past Paper

C.



D.

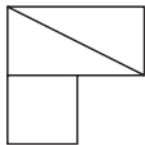


Answer: D.

17. In which larger shape is the shape on the left hidden?



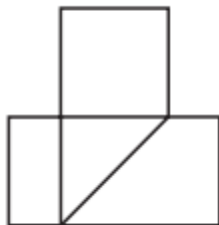
A.



B.



C.



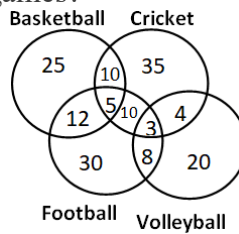
DAE & ADP Intelligence Questions (IQ) Past Paper

D.



Answer: C.

18. The following diagram shows the number of children playing Basketball, Cricket, Football and Volleyball. If the total number of children is 400, what is the percentage of children playing at least two games?




- A. 8
- B. 6
- C. 9.25
- D. 13

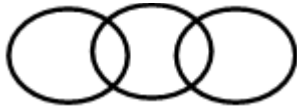
Answer: D

19. Which of the following diagram correctly represents the relationship among Teacher, Scientist and Graduate?

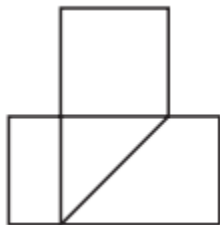
A.



B.



C.



DAE & ADP Intelligence Questions (IQ) Past Paper

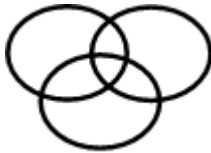
D.



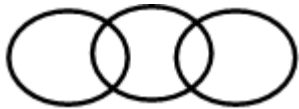
Answer: A

20. Which of the following diagram depicts the relation among Currency, Dinar and Rupee.

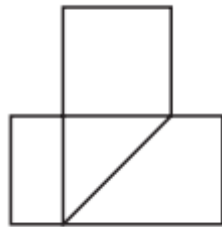
A.



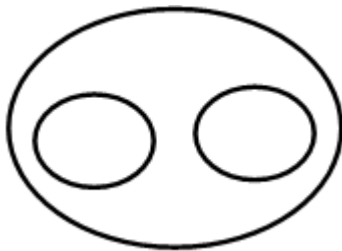
B.



C.



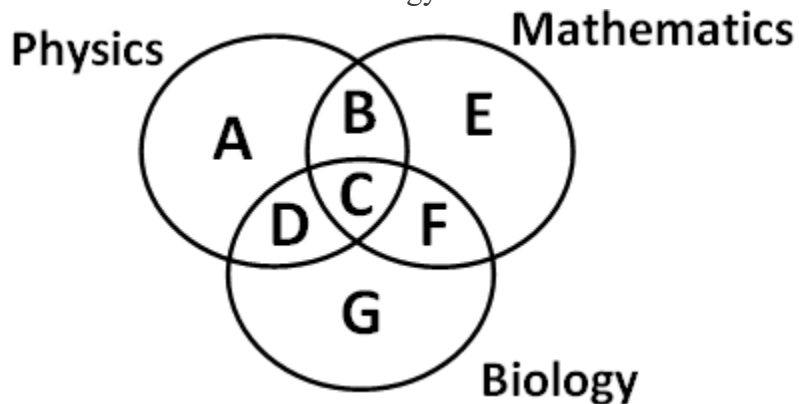
D.



Answer: D

DAE & ADP Intelligence Questions (IQ) Past Paper

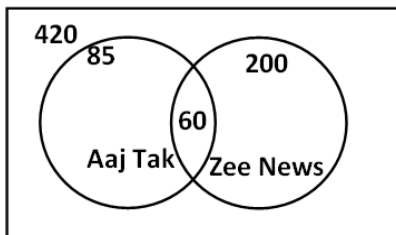
21. Which of the region in the following figure represents students who study both Physics and Mathematics but not Biology?



- a. $B+C+D+F$
- b. C
- c. $A+E$
- d. B

Answer: D

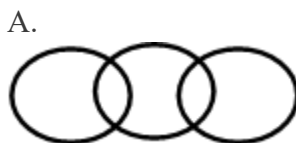
22. From the figure given below, determine the number of people who did not watch any news channel.



- a. 135
- b. 75
- c. 195
- d. 175

Answer: C

23. Which of the following figures correctly represents the relation between Machine, Lathe and Thermodynamics?

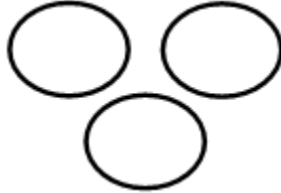


C.

DAE & ADP Intelligence Questions (IQ) Past Paper

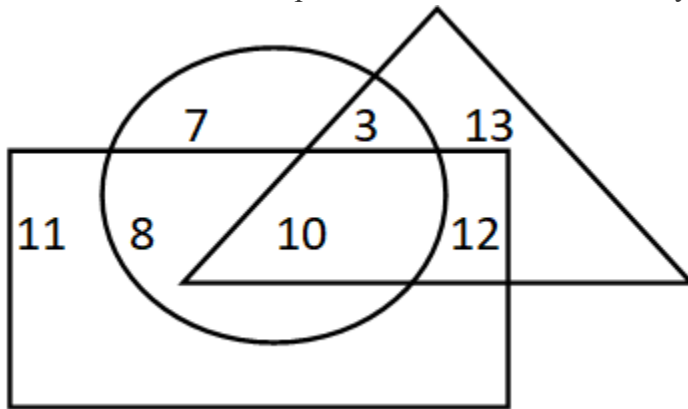


D.



Answer: B

24. If triangle represents Women, rectangle represents Doctors and circle represents Lawyers. Then which number represents Women that are Lawyer but not Doctor?



- a. 10
- b. 12
- c. 8
- d. 3

Answer: D

25.

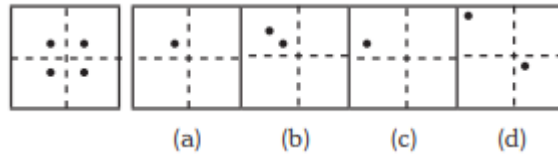


- a. Only C
- b. Only D
- c. Both C & D
- d. None of these

Answer: A

DAE & ADP Intelligence Questions (IQ) Past Paper

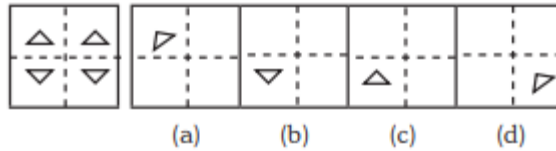
26.



- a. Only A
- b. Both A and B
- c. Only C
- d. Only D

Answer: A

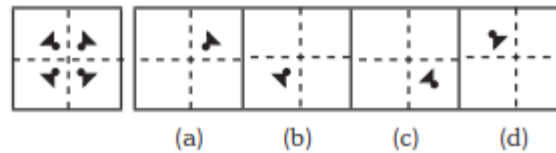
27.



- a. Option B
- b. Option A
- c. Both A & C
- d. Only D

Answer: A

28.



- a. Only A
- b. B
- c. C
- d. D

Answer: A

29. Statements: Some dogs are bats. Some bats are cats.

Conclusions:

1. Some dogs are cats.
 2. Some cats are dogs.
- A. Only (1) conclusion follows
 - B. Only (2) conclusion follows
 - C. Either (1) or (2) follows
 - D. Neither (1) nor (2) follows

Answer: D

30. Arrange the words given below in a meaningful sequence.

1. Income 2. Status 3. Education 4. Well-being 5. Job

- A. 3, 1, 5, 2, 4
- B. 1, 3, 2, 5, 4
- C. 1, 2, 5, 3, 4

DAE & ADP Intelligence Questions (IQ) Past Paper

D. 3, 5, 1, 2, 4

Answer: D

31. 3 pipes A, B and C can fill a tank in 30 minutes, 40 minutes, and 120 minutes, respectively. If all the pipes are opened together, how much time is required to fill the tank?
- A. 12 minutes
 - B. 15 minutes
 - C. 18 minutes
 - D. 20 minutes

Answer: B

32. A lady meets a person in the market who is the wife of the brother of her husband. How is the lady related to the person?
- A. cousin
 - B. sister
 - C. sister-in-law
 - D. nephew
 - E. None of these

Answer: C

33. Pointing out to a photograph, Swati said, “ he is the uncle of my brother’s sister”. How is the person in photograph related to Swati?
- A. uncle
 - B. father-in-law
 - C. brother
 - D. Grand father
 - E. None of these

Answer: A

34. Pointing to a lady, Vimal said, “she is the wife of my Grandfather’s son”. How is the lady related to Vimal?
- A. aunty
 - B. mother
 - C. grandmother
 - D. sister
 - E. None of these

Answer: B

35. A boy meets a girl in the party who introduces herself as the daughter of his grandfather’s daughter’s brother. How is the boy related to the girl?
- A. brother-in-law
 - B. uncle
 - C. brother
 - D. sister
 - E. None of these

DAE & ADP Intelligence Questions (IQ) Past Paper

Answer: C

36. When Rani saw Vinit, she recollected, "He is the brother of my grandfather's son". How is rani related to Vinit?
- A. Nephew
 - B. aunt
 - C. Daughter
 - D. sister
 - E. None of these

Answer: A

37. 3 pipes can fill a bucket in 20minutes, 30 minutes and 60 minutes, respectively. If all the pipes are opened for 5 minutes what percentage of the tank will be filled.
- A. 50%
 - B. 60%
 - C. 75%
 - D. 100%

Answer: A

38. There are three pipes connected to a tank. The first two can fill the tank in 20 minutes and 30 minutes, respectively. The third pipe can empty the entire tank in 5 minutes. If all the pipes are opened simultaneously, what time will it take to empty the tank?
- A. 8.55 minutes
 - B. 8.56 minutes
 - C. 8.57 minutes
 - D. 8.58 minutes

Answer: C

39. 2 pipes can empty a tank in 70 minutes and 140 minutes, respectively. If a third pipe can fill the tank in 7 minutes, find the time required to fill the tank if all the pipes are opened simultaneously.
- A. 7.23 minutes
 - B. 8.23 minutes
 - C. 8.57 minutes
 - D. 8.88 minutes

Answer: B

40. A mixture containing 20% milk is mixed with another mixture containing 60% milk in the ratio 8 : 13. Find the percentage of milk in the new mixture.
- A. 37.14%
 - B. 36.65%
 - C. 35.57%
 - D. 34.24%

Answer:A

DAE & ADP Intelligence Questions (IQ) Past Paper

41. A mixture containing 66% of acid is mixed with another mixture containing 35% of acid in the ratio 2 : 5. Find the percentage of acid in the mixture formed.

- A. 45%
- B. 46%
- C. 47%
- D. 48%

Answer: B

42. Introducing a woman, a man said, "Her husband is the only son of my father". How is that woman related to the man?

- A. Husband
- B. Sister
- C. Wife
- D. Mother

Answer: C

43. Q's mother is the sister of P and daughter of S. A is the son of P and Brother of H. G is the father of H. How is S related to G?

- A. Nephew
- B. Son-in-law
- C. Grandfather
- D. Father-in-law

Answer: D

44. R is the son of A's father's sister. S is son of D, who is the mother of G and grandmother of A. H is the father of T and grandfather of R. D is wife of H. How is R related to D?

- A. Nephew
- B. Son
- C. Grandson
- D. Insufficient Data

Answer: C

45. Pointing towards a person a woman said to man, "His father is the only son of your mother". How is the man related to that person?

- A. Brother
- B. Father
- C. Son
- D. Husband

Answer: B

46. Introducing a child, a woman said, "He is the son of my father's only daughter". How is that woman related to the child?

DAE & ADP Intelligence Questions (IQ) Past Paper

- A. Mother
- B. Sister
- C. Wife
- D. Daughter

Answer: A

47. HSNT : EPKQ :: DTHL : ?

- A. ABCD
- B. UEJM
- C. WXYZ
- D. AQEI

Answer: D

48. Umbriel : Uranus :: Janus : ?

- A. Jupiter
- B. Mars
- C. Uranus
- D. Saturn

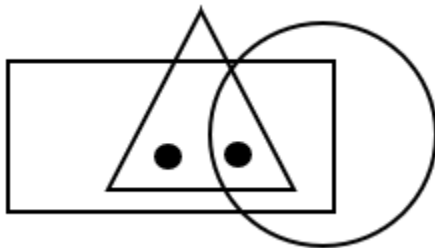
Answer: D

49. Kurnool : Andhra Pradesh :: Aizawl : ?

- A. Nagaland
- B. Meghalaya
- C. West Bengal
- D. Mizoram

Answer: D

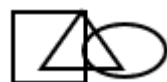
50. Identify the figure which satisfies the same condition of placement of dots as in given figure.



E.



F.



DAE & ADP Intelligence Questions (IQ) Past Paper

G.



H.



Answer: C

51. Find odd one out from the given jumbled words: LNUAIMMIU, ELEST, OPERPC, NMKOYE, INCKLE

- A. NMKOYE
- B. OPERPC
- C. INCKLE
- D. ELEST

Answer: A

52. In the following question find out the alternative which will replace the question mark.

Conference : Chairman :: Newspaper : ?

- A. Reporter
- B. Distributor
- C. Printer
- D. Editor

Answer: D

53. The 30 members of a club decided to play a badminton singles tournament. Every time a member loses a game he is out of the tournament. There are no ties. What is the minimum number of matches that must be played to determine the winner ?

- A. 29
- B. 45
- C. 55
- D. None of These

Answer: A

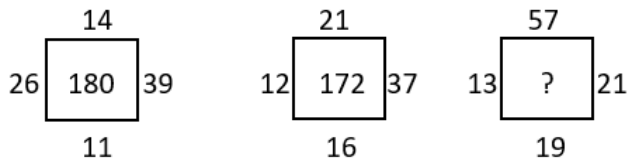
54. In a garden, there are 10 rows and 12 columns of mango trees. The distance between the two trees is 2 metres and a distance of one metre is left from all sides of the boundary of the garden. The length of the garden is

- A. 24 m
- B. 25 m
- C. 26 m
- D. 24 km

Answer: A

DAE & ADP Intelligence Questions (IQ) Past Paper

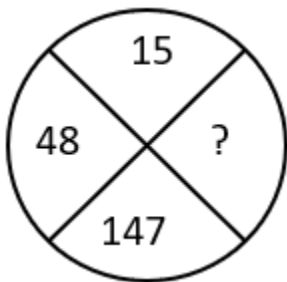
55. Find the correct alternative which will replace the question mark?



- A. 107
- B. 220
- C. 285
- D. 164

Answer: B

56. Find the correct alternative which will replace the question mark?



- A. 444
- B. 445
- C. 446
- D. 447

Answer: A

57. Choose the figure which is different from the rest?



(A) (B) (C) (D)

- A. Fig A
- B. Fig B
- C. Fig C
- D. Fig D

Answer: A

58. A cage had 15 birds. All but seven manages to escape. How many birds remain?

- A. 7
- B. 12
- C. 15
- D. 8

DAE & ADP Intelligence Questions (IQ) Past Paper

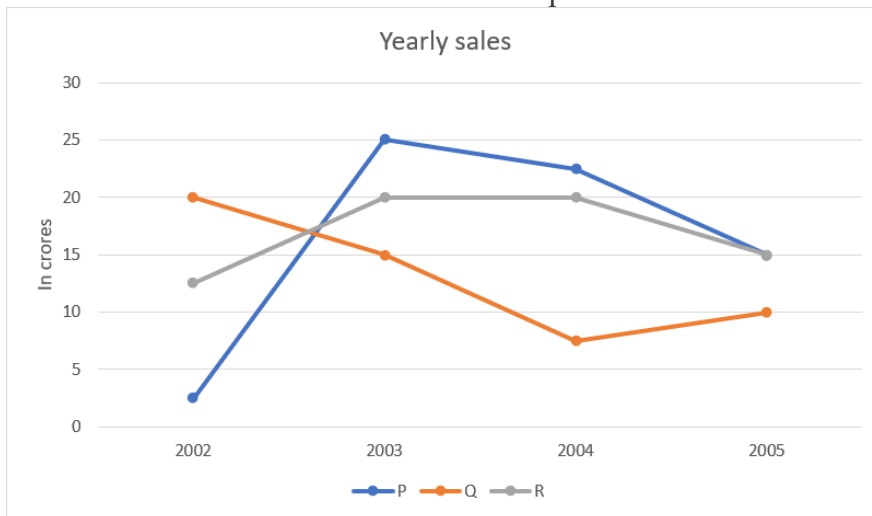
Answer: A

59. Find the angle between minute hand and hour hand at 6:30 AM

- A. 25°
- B. 22.5°
- C. 15°
- D. None of these

Answer: C

60. Study the graph and find what is the difference between maximum and minimum sales of p.



- A. 22.5
- B. 25
- C. 27.5
- D. 35

Answer: A

61. Which one will replace the question mark ?


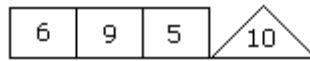
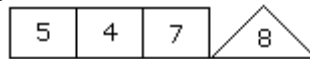
A ₂	C ₄	E ₆
G ₃	I ₅	?
M ₅	O ₉	Q ₁₄

- A. L₁₀
- B. K₁₅
- C. I₁₅
- D. K₈

Answer: D

DAE & ADP Intelligence Questions (IQ) Past Paper

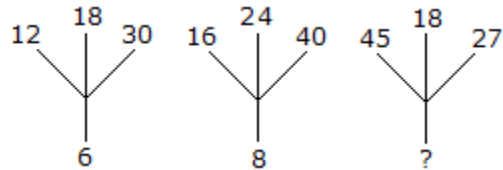
62. Which one will replace the question mark ?



- A. 2
- B. 4
- C. 5
- D. 6

Answer: D

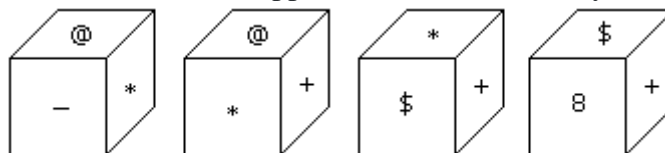
63. Which one will replace the question mark ?



- A. 3
- B. 9
- C. 18
- D. None of Above

Answer: B

64. Which symbol will be on the face opposite to the face with symbol * ?

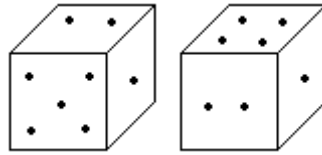


- A. @
- B. \$
- C. 8
- D. +

Answer: C

65. Two positions of dice are shown below. How many points will appear on the opposite to the face containing 5 points?

DAE & ADP Intelligence Questions (IQ) Past Paper



- A. 1
- B. 2
- C. 3
- D. 4

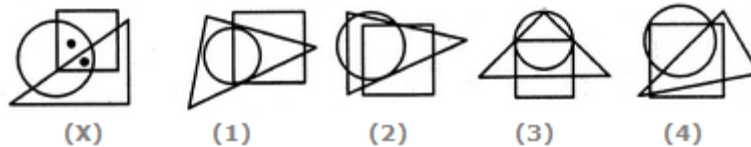
Answer: D

66. A train running at the speed of 60 km/hr crosses a pole in 9 seconds. What is the length of the train?

- A. 120 metres
- B. 180 metres
- C. 324 metres
- D. 150 metres

Answer: D

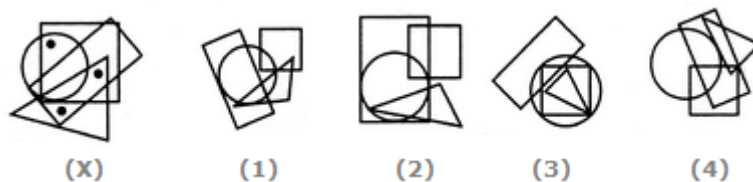
67. Select the figure which satisfies the same conditions of placement of the dots as in Figure-X.



- A. 1
- B. 2
- C. 3
- D. 4

Answer: D

68. Select the figure which satisfies the same conditions of placement of the dots as in Figure-X.

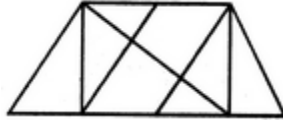


- A. 1
- B. 2
- C. 3
- D. 4

Answer: D

69. Find the number of triangles in the given figure.

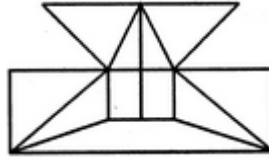
DAE & ADP Intelligence Questions (IQ) Past Paper



- A. 8
- B. 9
- C. 12
- D. 14

Answer: D

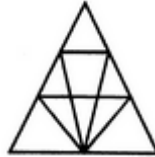
70. Find the minimum number of straight lines required to make the given figure.



- A. 16
- B. 17
- C. 18
- D. 19

Answer: B

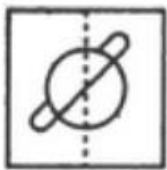
71. Find the number of triangles in the given figure.




- A. 16
- B. 17
- C. 18
- D. 19

Answer: C


72. Find out from amongst the four alternatives as to how the pattern would appear when the transparent sheet is folded at the dotted line.



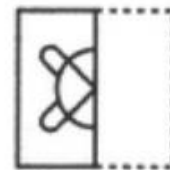
(X)



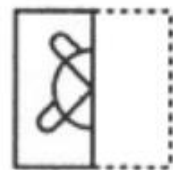
(1)



(2)



(3)



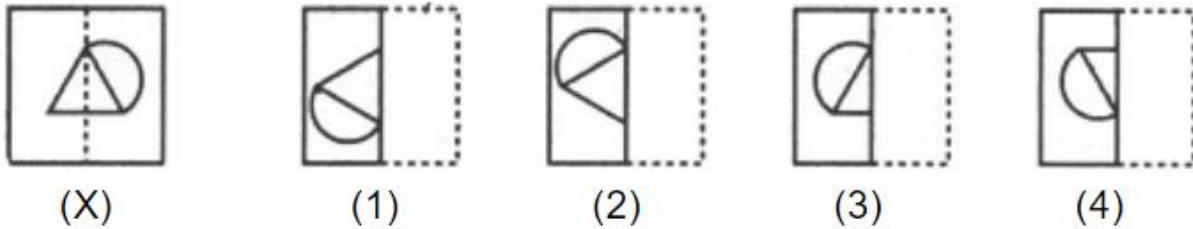
(4)

- A. 1
- B. 2
- C. 3
- D. 4

Answer: D

DAE & ADP Intelligence Questions (IQ) Past Paper

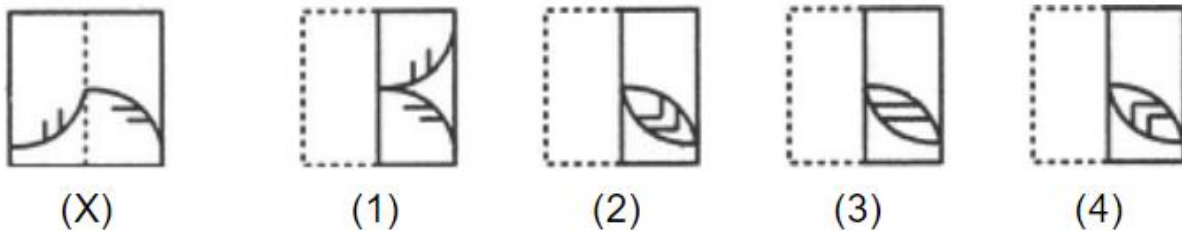
73. Find out from amongst the four alternatives as to how the pattern would appear when the transparent sheet is folded at the dotted line.



- A. 1
- B. 2
- C. 3
- D. 4

Answer: C

74. Find out from amongst the four alternatives as to how the pattern would appear when the transparent sheet is folded at the dotted line.



- A. 1
- B. 2
- C. 3
- D. 4

Answer: D

75. Choose the alternative which is closely resembles the mirror image of the given combination.

ANS43Q12

(1) ANS43Q12

(2) 21Q34SNA

(3) 21Q34SNA

(4) 12Q34SNA

- A. 1
- B. 2
- C. 3
- D. 4

Answer: B

76. Choose the alternative which is closely resembles the water-image of the given combination.

DAE & ADP Intelligence Questions (IQ) Past Paper

NUCLEAR

(1) ВΔΕΓCUII

(3) ИUCГЭВҪ

(2) ИИCГEВҪ

(4) ИИCГEВҪ

- A. 1
- B. 2
- C. 3
- D. 4

Answer: D

77. Choose the alternative which is closely resembles the water-image of the given combination.

bridge

(1) pг|qđe

(3) pг|qđe

(2) pг|qđe

(4) pг|pđe

- A. 1
- B. 2
- C. 3
- D. 4

Answer: 2

78. Odometer is to mileage as compass is to

- A. speed
- B. hiking
- C. needle
- D. direction

Answer: D

79. Marathon is to race as hibernation is to

- A. winter
- B. bear
- C. dream
- D. sleep

Answer: D

80. Window is to pane as book is to

- A. Novel
- B. Glass
- C. Cover
- D. Page

Answer: D

81. Cup is to coffee as bowl is to

- A. Dish
- B. Soup
- C. Spoon

DAE & ADP Intelligence Questions (IQ) Past Paper

D. Food

Answer: B

82. Yard is to inch as quart is to

- A. Gallon
- B. Ounce
- C. Milk
- D. Liquid

Answer: B

83. Anu's father is the only son of Vimal's mother how is Anu related to Vimal's son?

- A. Sister-in-law
- B. Sister
- C. Cousin
- D. Aunt
- E. None of these

Answer: C

84. Ronit's son Rohit, says to a girl, "your father is the only brother of my mother who is the only child of Mr. Rakesh". how is rohit related to girl?

- A. sister
- B. Cousin
- C. brother
- D. brother-in-law
- E. None of these

Answer: B

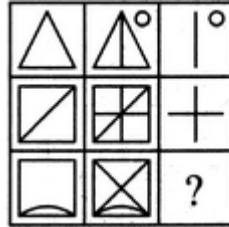
85. Pointing to a man, a lady said, "he is the son of my husband's daughter". How is the man related to this lady?

- A. Grand Son
- B. son
- C. Daughter
- D. none of these
- E. None of these

Answer: A

86. Select a suitable figure from the four alternatives that would complete the figure matrix.

DAE & ADP Intelligence Questions (IQ) Past Paper

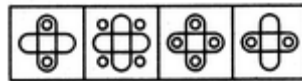



(1) (2) (3) (4)

- A. 1
- B. 2
- C. 3
- D. 4

Answer: D

87. Select a suitable figure from the four alternatives that would complete the figure matrix.

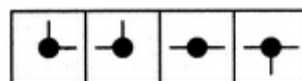
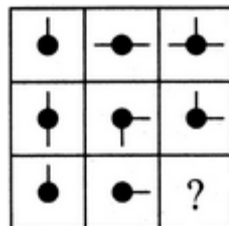


(1) (2) (3) (4)

- A. 1
- B. 2
- C. 3
- D. 4

Answer: B

88. Select a suitable figure from the four alternatives that would complete the figure matrix.



(1) (2) (3) (4)

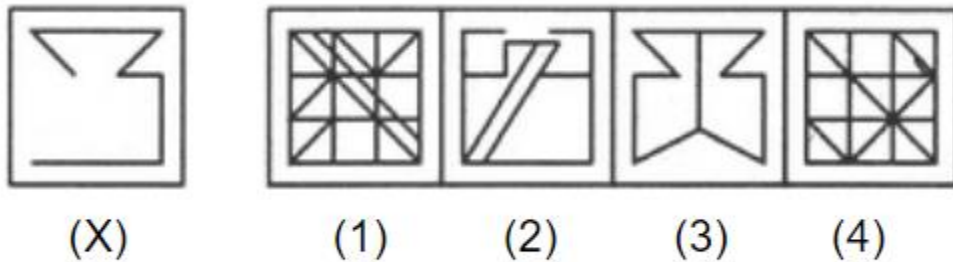
- A. 1

DAE & ADP Intelligence Questions (IQ) Past Paper

- B. 2
- C. 3
- D. 4

Answer: A

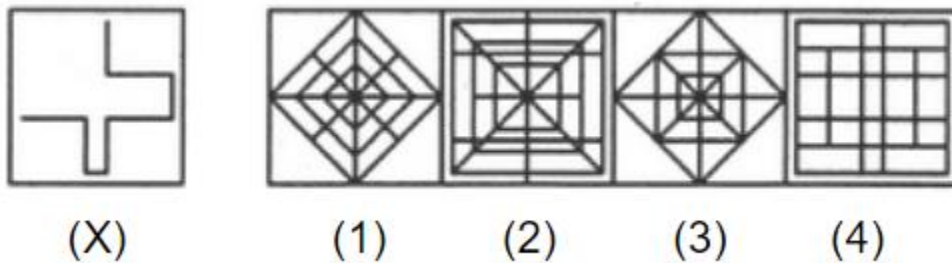
89. In the following question, you are given a figure (X) followed by four alternative figures (1), (2), (3) and (4) such that figure (X) is embedded in one of them. Find out the alternative figure which contains figure (X) as its part.



- A. 1
- B. 2
- C. 3
- D. 4

Answer: A

90. In the following question, you are given a figure (X) followed by four alternative figures (1), (2), (3) and (4) such that figure (X) is embedded in one of them. Find out the alternative figure which contains figure (X) as its part.



- A. 1
- B. 2
- C. 3
- D. 4

Answer: D

91. Here are some words translated from an artificial language.

dionot means oak tree

blynot means oak leaf

blycrin means maple leaf

Which word could mean "maple syrup"?

- A. blymuth

DAE & ADP Intelligence Questions (IQ) Past Paper

- B. hupponot
- C. patricrin
- D. crinweel

Answer: C

92. Here are some words translated from an artificial language.

tamceno means sky blue

cenorax means blue cheese

aplmitl means star bright

Which word could mean "bright sky"?

- A. cenotam
- B. mitltam
- C. raxmitl
- D. aplceno

Answer: B

93. SCD, TEF, UGH, ____, WKL

- A. CMN
- B. UJI
- C. VIJ
- D. IJT

Answer: C

94. B2CD, ____, BCD4, B5CD, BC6D

- A. B2C2D
- B. BC3D
- C. B2C3D
- D. BCD7

Answer: B

95. Which word does NOT belong with the others?

- A. book
- B. index
- C. glossary
- D. chapter

Answer: A

96. Which word does NOT belong with the others?

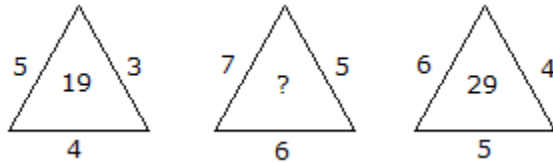
- A. unimportant
- B. trivial

DAE & ADP Intelligence Questions (IQ) Past Paper

- C. insignificant
- D. familiar

Answer: D

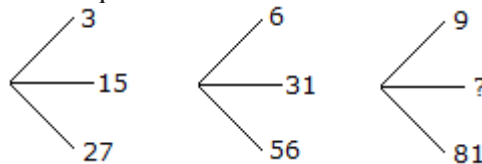
97. Which one will replace the question mark ?



- A. 41
- B. 42
- C. 45
- D. 54

Answer: A

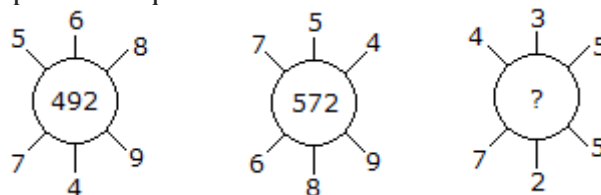
98. Which one will replace the question mark ?



- A. 45
- B. 46
- C. 49
- D. 50

Answer: A

99. Which one will replace the question mark ?



- A. 130
- B. 149
- C. 134
- D. 135

Answer: A

100. Which one of the following is always in 'Sentiment'?

- A. Cruelty
- B. Insight
- C. Neutrality
- D. Emotion

DAE & ADP Intelligence Questions (IQ) Past Paper

Answer: D

Bachelor Mcqs



GREAT FUTURE TALENT OLYMPIAD

ROUND-III

GENERAL KNOWLEDGE

PAST PAPER

General Knowledge Past Paper

1. Allama Muhammad Iqbal delivered his famous Allahabad Address in?

- A. 1929
- B. 1930
- C. 1931
- D. 1932

Answer: B

2. At the time of Independence which community was in majority in the state of Kashmir?

- A. Muslim
- B. Hindu
- C. Sikh
- D. Christian

Answer: A

3. Which state was attacked by India on 11th September 1948?

- A. State of Hyderabad Daccan
- B. State of Jammu and Kashmir
- C. State of Manavadar
- D. State of Junagarh

Answer: A

4. In which year the Kashmiris started their freedom movement against Dogra rule before the partition of the sub-continent?

- A. 1940
- B. 1930
- C. 1920
- D. 1928

Answer: B

5. In which of the following cities Indian National Congress was found?

- A. Delhi
- B. Bombay
- C. Kanpur
- D. Allahabad

Answer: B

6. In which of the following cities All India Muslim League was found?

- A. Delhi
- B. Lahore
- C. Dhaka
- D. Allahabad

Answer: C

General Knowledge Past Paper

7. Who was the Viceroy of India at the time of partition of Bengal?

- A. Lord Curzon
- B. Lord Wavell
- C. Lord Minto
- D. Lord Algan

Answer: A

8. Who was the first President of All India Muslim League?

- A. Sir Agha Khan
- B. Nawab Waqar ul Mulk
- C. Nawab Saleem ullah Khan
- D. None of them

Answer: A

9. In which year Ali Garh Trusteeship bill was passed?

- A. 1886
- B. 1887
- C. 1888
- D. 1889

Answer: D

10. In which year Syed Jamal-u-din Afghani died?

- A. 1895
- B. 1896
- C. 1897
- D. 1898

Answer: C

11. Which pass connects Pakistan with Afghanistan?

- A. Khunjerab Pass
- B. Khyber Pass
- C. Tochi Pass
- D. Gomal Pass

Answer: B

12. The highest peak of Salt Range is?

- A. Nanga Parbat
- B. Skaser
- C. Malka Parbat
- D. Everest

Answer: B

13. Which mountain range is located in Sindh Province?

- A. Himalaya

General Knowledge Past Paper

- B. Karakoram Range
- C. Kirthar Range
- D. Salt Range

Answer: C

14. Pakistan conducted nuclear tests on May 28, 1998 at?

- A. Kohe-e-Sufaid
- B. Chaghi Hills
- C. Toba Kakar
- D. Raskoh

Answer: B

15. What is the total area of Punjab Province?

- A. 74,521 Km
- B. 40,914 Km
- C. 347,190 Sq Km
- D. 205,344 Sq Km

Answer: D

16. The capital city of Gilgit Baltistan is?

- A. Ghanchay
- B. Nagar
- C. Chilas
- D. Gilgit

Answer: D

17. Who was the founder of Daily English Newspaper Dawn?

- A. Liaquat Ali Khan
- B. Z.A Sulehri
- C. Quaid-e-Azam
- D. None of them

Answer: C

18. Who was the second Prime Minister of Pakistan?

- A. Ch Muhammad Ali
- B. Kh. Nazim-ud-Din
- C. Liaquat Ali Khan
- D. Feroze Khan Noon

Answer: B

19. The 1973 Constitution of Pakistan came into force on?

- A. 23rd March 1973
- B. 14th August 1973
- C. 8th June 1973

General Knowledge Past Paper

D. 27th October 1973

Answer: B

20. The 1962 Constitution of Pakistan was passed during the regime of?

- A. Sikandar Mirza
- B. Ayoub Khan
- C. Yahya Khan
- D. Ch. Muhammad Ali

Answer: B

21. ICT stands for?

- A. Islamabad capital total
- B. Islamabad city tribes
- C. Islamabad Capital Territory
- D. Islamabad city territory

Answer: C

22. First Charter of Human Rights is?

- A. International Charter
- B. U.N. Charter
- C. Khutba-Hajjat-ul-Vida
- D. French Constitution

Answer: C

23. The members of Punjab Assembly are?

- A. 275
- B. 371
- C. 237
- D. 100

Answer: B

24. Tenure of National and Provincial Assemblies is?

- A. 4 years
- B. 5 years
- C. 6 years
- D. 3 years

Answer: B

25. Number of houses of Pakistan's Majlis-e-Shura (Parliament) is?

- A. One
- B. Two
- C. Three
- D. Four

Answer: B

General Knowledge Past Paper

26. SNGPL stands for?

- A. Sui Northern Gas Pipelines Lahore
- B. Sui Northern Gas Pipelines limited
- C. Sui Northern Gas Pakistan limited
- D. Sui Northern Gas Punjab limited

Answer: B

27. The third largest city of Pakistan is

- A. Faisalabad
- B. Rawalpindi
- C. Sialkot
- D. Hyderabad

Answer: A

28. First Census was held in Pakistan in the year?

- A. 1950
- B. 1951
- C. 1952
- D. 1953

Answer: B

29. All judges of the Federal Shariat Court are appointed by the:

- A. President
- B. Chief justice
- C. Prime Minister
- D. None

Answer: A

30. Sir Syed died on:

- A. 27th March 1888
- B. 27th March 1898
- C. 27th March 1908
- D. 27th March 1918

Answer: B

31. Which Dam project is a largest hydropower project in private sector and first dam in private sector?

- A. Nai Gaj Dam
- B. Mangla Dam
- C. Hub Dam
- D. Munda Dam

Answer: D

General Knowledge Past Paper

32. What is literally meaning of Hazarganji?

- A. Of a thousand Lakes
- B. Of a thousand Animal
- C. King of WildLife Animals
- D. Of a thousand Treasures

Answer: D

33. Which power of the president was taken away by the amendment of the article 243 of constitution?

- A. Appointment of Chief justice
- B. Appointment of chief minister
- C. Governors
- D. Army Staff

Answer: D

34. Famous Novel "The Three Musketeers" was written by

- A. Alexander Dumas
- B. George Eliot
- C. Thomas Hardy
- D. Victor Hugo.

Answer: A

35. Famous English Poet John Keats died of T.B at the age of:

- A. 30
- B. 20
- C. 25
- D. 35

Answer: C

36. Play "Othello" was written by:

- A. Shakespeare
- B. Bernard Shaw
- C. Russell
- D. Milton

Answer: A

37. Famous Economist "Karl Marx" belongs to:

- A. England
- B. U.S.A
- C. Former U.S.S.R
- D. Germany

Answer: D

38. The theme of the famous play "Caeser and Cleopatra" by

General Knowledge Past Paper

G.B. Shaw is a:

- A. Romance
- B. History
- C. Tragedy
- D. Comedy

Answer: B

39. Master piece Novels "War and Peace" and "Anana Karenina" was written by

- A. Hardly
- B. Oscar Wild
- C. Tolstoy
- D. None of the above

Answer: C

40. Famous English Poet "William Wordsworth" died in

- A. 1849
- B. 1850
- C. 1851
- D. 1852

Answer: B

41. "John Milton" was a famous English poet. What tragedy was faced by him at his old age ?

- A. Lost his son
- B. Lost his eye sight
- C. Lost his legs
- D. Lost his all property

Answer: B

42. "Khushal Khan Khattak" was a famous poet of:

- A. Balochi Language
- B. Urdu Language
- C. Barohi Language
- D. Pushto Language

Answer: D

43. "Abdul Latif Bhitai" was a famous poet of:

- A. Barohi Language
- B. Sindhi Language
- C. Urdu Language
- D. Balochi Language

Answer: B

44. Which of the following countries is under an absolute monarchy:

- A. Norway

General Knowledge Past Paper

- B. Kuwait
- C. Thailand
- D. Oman

Answer: D

45. Chenghez Khan was a Mongol conqueror who came to India during the rein of:

- A. Aibak
- B. Aurengzab
- C. Sher Shah Suri
- D. Iltutmish

Answer: D

46. Qutabuddin Aibak was the first Muslim King of Delhi Sultanate and founder of:

- A. Mughal Empire
- B. Tughluq Dynasty
- C. Slave Dynasty
- D. None of the above

Answer: C

47. "Razia Sultana" was the only Muslim Woman Monarch of Hindustan. Her regime lasted:

- A. 5 years
- B. 7 years
- C. 4 years
- D. 3 years

Answer: D

48. "Third Battle of Panipat" was fought in:

- A. 1560
- B. 1710
- C. 1761
- D. 1716

Answer: C

49. Who was the first female Governor of Pakistan's State Bank?

- A. Shamshad Akhtar
- B. Shahida Wizarat
- C. Salma Ahmed
- D. Rukhsana Asghar

Answer: a) Shamshad Akhtar

50. What is the height of K2, the second-highest mountain peak in the world?

- A. 8,516 meters
- B. 8,611 meters
- C. 8,091 meters

General Knowledge Past Paper

D. 8,035 meters

Answer: b) 8,611 meters

51. Who was Pakistan's first female Foreign Minister?

- A. Hina Rabbani Khar
- B. Benazir Bhutto
- C. Tehmina Janjua
- D. Hina Jilani

Answer: a) Hina Rabbani Khar

52. In which year did Pakistan win its first cricket World Cup?

- A. 1987
- B. 1992
- C. 1996
- D. 1999

Answer: B

53. Which Pakistani scientist was awarded the Nobel Prize in Physics in 1979?

- A. Abdus Salam
- B. Abdul Qadeer Khan
- C. Riazuddin
- D. Pervez Hoodbhoy

Answer: A

54. What is the total length of the coastline of Pakistan?

- A. Approximately 650 kilometers
- B. Approximately 1,046 kilometers
- C. Approximately 1,200 kilometers
- D. Approximately 1,050 kilometers

Answer: B

55. Who is considered the first female pilot from Pakistan?

- A. Ayesha Farooq
- B. Marium Mukhtiar
- C. Shukria Khanum
- D. Maliha Lodhi

Answer: B

56. Which Pakistani singer won the Nobel Peace Prize in 2014?

- A. Atif Aslam
- B. Abida Parveen
- C. Nusrat Fateh Ali Khan
- D. Malala Yousafzai

Answer: D

General Knowledge Past Paper

57. What is the literacy rate of Pakistan according to the latest data available (as of 2022)?

- A. Approximately 55%
- B. Approximately 62%
- C. Approximately 69%
- D. Approximately 76%

Answer: B

58. Which Pakistani city is known as the "City of Saints"?

- A. Multan
- B. Lahore
- C. Karachi
- D. Faisalabad

Answer: A

59. Who was the first woman to climb Mount Everest?

- A. Junko Tabei
- B. Reinhold Messner
- C. Sir Edmund Hillary
- D. Tenzing Norgay

Answer: A

60. What is the largest desert in the world?

- A. Sahara Desert
- B. Arabian Desert
- C. Gobi Desert
- D. Antarctic Desert

Answer: D

61. Which country is the largest producer of gold in the world?

- A. China
- B. Australia
- C. United States
- D. Russia

Answer: A

62. Who is the author of the book "To Kill a Mockingbird"?

- A. Harper Lee
- B. J.K. Rowling
- C. George Orwell
- D. Ernest Hemingway

Answer: A

63. Which element has the chemical symbol "Fe"?

General Knowledge Past Paper

- A. Iron
- B. Gold
- C. Silver
- D. Copper

Answer: A

64. Who painted the famous painting "The Starry Night"?

- A. Vincent van Gogh
- B. Pablo Picasso
- C. Leonardo da Vinci
- D. Claude Monet

Answer: A

65. Which city hosted the first modern Olympic Games in 1896?

- A. Paris
- B. London
- C. Athens
- D. Rome

Answer: C

66. What is the longest river in Europe?

- A. Danube River
- B. Volga River
- C. Rhine River
- D. Seine River

Answer: B

67. Who was the first female Prime Minister of the United Kingdom?

- A. Margaret Thatcher
- B. Theresa May
- C. Indira Gandhi
- D. Angela Merkel

Answer: A

68. What is the highest mountain peak in South America?

- A. Mount Aconcagua
- B. Mount Chimborazo
- C. Mount Huascarán
- D. Mount Fitz Roy

Answer: A

69. What was the official language declared in 1956 constitution?

- A. Urdu
- B. Bengali

General Knowledge Past Paper

- C. Hindi
- D. Both a & b

Answer: D

70. Who abrogated 1956 constitution?

- A. Ayub Khan
- B. Tikka Khan
- C. Iskander Mirza
- D. Yahya Khan

Answer: A

71. When the first constitution was abrogated and Martial Law was proclaimed?

- A. May 1958
- B. June 1958
- C. October 1958
- D. December 1958

Answer: C

72. When Ayub Khan enforced new constitution in Pakistan?

- A. 9th January 1962
- B. 6th February 1962
- C. 13th March 1962
- D. 8th June 1962

Answer: D

73. Which kind of system of Government was introduced by the 1962 constitution?

- A. Autonomous
- B. Presidential
- C. Bicameral
- D. Confederate

Answer: B

74. When the constitution of 1962 was abrogated?

- A. 26th March 1969
- B. 29th March 1969
- C. 4th April 1969
- D. 14th April 1969

Answer: A

75. Who abrogated 1962 constitution and became CMLA?

- A. Gen. Tikka Khan
- B. Gen. Ahsan Khan
- C. Gen. Mansoor Khan
- D. Gen Yahya Khan

Answer: D

General Knowledge Past Paper

76. When Mr. Z.A. Bhutto launched a new constitution in the country?

- A. 11th August 1973
- B. 14th August 1973
- C. 17th August 1973
- D. 21st August 1973

Answer: B

77. Which kind of system of Government was introduced in 1973 constitution?

- A. Parliamentary
- B. Presidential
- C. Basic Democracy
- D. Autonomous

Answer: A

78. who elects the President according to 1973 constitution?

- A. National Assembly
- B. Senate
- C. Provincial Assemblies
- D. All of them
- E. None of them

Answer: D

79. According to 1973 constitution who elects Prime Minister?

- A. Senate
- B. National Assembly
- C. President
- D. Provincial Assemblies

Answer: B

80. In which constitution Bicameral Legislature was provided for the first time?

- A. 1949
- B. 1956
- C. 1962
- D. 1973

Answer: D

81. In constitution of 1973 what age is specified for a person to contest for the Election to National Assembly?

- A. 25 years
- B. 18 years
- C. 20 years
- D. 30 years

Answer: A

General Knowledge Past Paper

82. In constitution 1973 what number of seats in Senate was set?

- A. 120 Seats
- B. 115 Seats
- C. 110 Seats
- D. 100 Seats

Answer: D

83. According to 1973 constitution what is the term of the office of President?

- A. 6 years
- B. 5 years
- C. 4 years
- D. 3 years

Answer: B

84. How many articles were there in the constitution of 1956?

- A. 200 Articles
- B. 259 Articles
- C. 254 Articles
- D. 234 Articles

Answer: D

85. how many articles were there in 1962 constitution?

- A. 225 Articles
- B. 250 Articles
- C. 275 Articles
- D. 290 Articles

Answer: B

86. how many articles are there in 1973 constitution?

- A. 220 Articles
- B. 240 Articles
- C. 260 Articles
- D. 280 Articles

Answer: D

87. in constitution 1973 who were declared none Muslims?

- A. Qadiyanis
- B. Hindus
- C. Christians
- D. Jews

Answer: A

88. When did Fatima Jinnah joined All India Muslim league?

- A. 1939

General Knowledge Past Paper

- B. 1927
- C. 1947
- D. 1949

Answer: A

89. Pakistan's National Flag was prepared by?

- A. Abdur-rehman Chughtai
- B. Liaqat Ali
- C. Chaudhary Rehmat Ali
- D. Ameer-ud-din Qadwai

Answer: D

90. Pakistan's first coin was issued on

- A. 3rd June 1948
- B. 6th June 1949
- C. 3rd January 1948
- D. none of these

Answer: C

91. Where the biggest Salt Mine located in Pakistan ?

- A. Mangora
- B. Jhelum
- C. Sawat
- D. none of these

Answer: B

92. The longest river in Pakistan is ?

- A. River Ravi
- B. River Sindh
- C. River Cheenab
- D. River Jehlum

Answer: D

93. Which is the national flower of Pakistan ?

- A. Lilly
- B. Rose
- C. Jasmine
- D. Tulip

Answer: C

94. Which is the national bird of Pakistan ?

- A. Markhor
- B. Parrot
- C. Pigeon

General Knowledge Past Paper

D. Chakor

Answer: D

95. Who started the Faraizi Movement?

- A. Haji Shariat Ullah
- B. Allama Muhammad Iqbal
- C. Maulana Muhammad Ali Jauhar
- D. Sir Aga Khan

Answer: A

96. The 'Kashaf-ul-Mahjub' was written by?

- A. Hazrat Data Gunj Buksh (R.A)
- B. Maulana Altaf Hussain Hali
- C. Maulana Shibli Nomani
- D. Maulana Zakaullah

Answer: A

97. Who Reviewed the famous book "The Indian Musalmans" in 1872?

- A. Sir Syed Ahmed Khan
- B. Sir William Wilson Hunter
- C. M Delwar Hussain
- D. John King Fairbank

Answer: A

98. Government of India Act 1858 was passed on?

- A. 2nd August 1858
- B. 18th July 1858
- C. 24th October 1858
- D. 3rd June 1858

Answer: A

99. The book, "Khutbat e Ahmadia' is written by?

- A. Dr. Safdar Mahmood
- B. Abdul Haleem Sharar
- C. Sir Syed Amir Ali
- D. Sir Syed Ahmad Khan

Answer: D

100. Indian Independence Act' was enforced on ?

- A. 13th August 1947
- B. 14th August 1947
- C. 15th August 1947
- D. 16th August 1947

Answer: C

General Knowledge Past Paper